



UP PET MOCK TEST



REASONING

30 DAYS

महाभ्यारस

DAY-09



LIVE | 06:30 PM

By Kuldeep Mahendras



UPCOMING ONLINE BATCHES

September 2022

21 SEP 2022

10:30 AM to 12:30 PM

BANK ONLINE LIVE CLASS

03:00 PM to 05:00 PM

SSC ONLINE LIVE CLASS

BILINGUAL

28 SEP 2022

07:30 PM to 09:30 PM

BANK ONLINE LIVE CLASS

08:00 AM to 10:00 AM

SSC ONLINE LIVE CLASS

BILINGUAL

28 SEP 2022

04:00 PM to 06:00 PM

BANK ONLINE LIVE CLASS

BENGALI+ENGLISH



www.mahendras.org



7052477777/7052577777



Chhavi Saxena 2 days ago
Home work answer is option D
Very nice session Sir Thank you so much 🙏

👍 🗨️ REPLY ➡️

▼ 1 REPLY



Vishnu Gupta 2 days ago 10 subscribers
D is the right ans very nice session sir thank you 🙏 sir love ❤️ you sir

👍 🗨️ REPLY ➡️

▼ 1 REPLY



🌸 PUJA KUNDU 🌸 ----- 2 days ago 8 subscribers
The ans is 11..121...132...THANK YOU SOO MUCH SIR...SIR PLEASE 45 MIN KA CLSS KJIYE SSC KA PLEASE SIR 🙏🙏🙏🙏🙏

👍 1 🗨️ REPLY ➡️

▼ 1 REPLY



Umesh Kushwah 1 day ago
Home work Answer
11:121:132
Thank you soo much sir

👍 🗨️ REPLY ➡️

▼ 1 REPLY



Bhavya thakur ✍️ _____ 2 days ago 28 subscribers
D 🙏

👍 🗨️ REPLY ➡️

▼ 1 REPLY



#TMKOC_LOVER 2 days ago 29 subscribers

Option D

 1  REPLY 

▼ 1 REPLY



Pallavi Choudhary 2 days ago

Option d

  REPLY 

▼ 1 REPLY



Shalini Gangwar 1 day ago

Option d

  REPLY 

▼ 1 REPLY

Share
&
like.



Find the option which should replace (?)

$$8 : 88 : 96 :: ?$$

Handwritten annotations: An arc above 8 and 88 is labeled $\times 12$. An arc below 8 and 88 is labeled $\times 11$.

- (A) 9 : 99 : 96
- (B) 7 : 77 : 121
- (C) 12 : 144 : 173
- (D) 11 : 121 : 132

$$11 : 121 : 132$$

Handwritten annotations: An arc below 11 and 121 is labeled $\times 11$. An arc below 11 and 132 is labeled $\times 12$.





Find the option which should replace (?)



Sunrise : Sunset :: ? : ?

सूर्योदय : सूर्यास्त :: ? : ?

A. Dawn : Twilight / डॉन : गोधूलि ✗

B. Noon : Midnight / दोपहर : आधी रात ✗

C. Morning : Night / सुबह : रात ✗

D. Energetic : Lazy / ऊर्जावान : आलसी ✓



Find the option which should replace (?)



245 , 356 , 469 , 674 , ?

↑ ↑ ↑ ↑

8 8 1

- (A) 881
- (B) 981
- (C) 225
- (D) 343

Pravleen



Find the option which should replace (?)



B : 16 :: D : ?

$$2^4 \rightarrow 16$$

$$4^4 \rightarrow 4 \times 4 \times 4 \times 4 = 256$$

(A) 64

(B) 120

(C) 256

(D) 128





Find the missing one (?)



850 : 863 :: 430 : ?

(A) 437 ✓

(B) 442

(C) 435

(D) 451

$$\begin{array}{r} 850 \\ + 13 \quad (8+5+0) \\ \hline 863 \end{array}$$

$$\begin{array}{r} 430 \\ + 7 \quad (4+3+0) \\ \hline 437 \end{array}$$



Find the option which should replace (?)



$$12.5 : 6.25 :: 7 : ?$$

$$\frac{5}{10} \quad \div 2$$

3.5

(A) 3.5

(B) 3.25

(C) 6.5

(D) 12



Find the option which should replace (?)



Peace : Chaos :: Creation : ?
शांति: अराजकता :: निर्माण:?

- A. Build / बिल्ड
- B. Construction / निर्माण
- C. Destruction / विनाश
- D. Manufacture / उत्पादन



Arrange the in Meaning order :-

1. Consultation / परामर्श
2. Illness / बीमारी
3. Doctor / चिकित्सक
4. Treatment / इलाज
5. Recovery / स्वास्थ्य लाभ ✓

A-2, 3 ,1,4,5 ✓

B- 1,3,4,2,5

C- 3,2,1,4,5

~~D- 5,1,4,3,2~~





Find the option which should replace (?)

$$2.75 : 13/4 :: 3.75 : ?$$

(A) $17/4$

(B) $19/4$

(C) $15/4$

(D) $11/4$



$$\frac{13}{4} = 3.25 - 0.5$$
$$= 2.75$$

$$\frac{17}{4} = 4.25 - 0.5$$
$$= 3.75$$



Arrange the words given below in a meaningful sequence.

1. Wall / दीवार
2. Clay / चिकनी मिट्टी ✓
3. House / मकान
4. Room / कक्ष
5. Bricks / ईंटें



~~A. 5, 2, 1, 4, 3~~

B. 2, 5, 4, 1, 3 ✓

C. 2, 5, 1, 4, 3 ✓

~~D. 1, 2, 3, 4, 5~~



Find the option which should replace (?)

$$\text{If } \overset{12}{\frown} 62 * \overset{21}{\frown} 73 * \overset{18}{\frown} 63 = \textcircled{51}$$
$$\overset{20}{\frown} 54 * \overset{36}{\frown} 49 * \overset{14}{\frown} 27 = \textcircled{70}$$

- (A) 60
- (B) 62
- (C) 66
- (D) 70





8	27	17
4	6	6
14	51	31
11	? 24	19

$$\begin{aligned} &(17-8) \times 3 \\ &(6-4) \times 3 \\ &(31-14) \times 3 \\ &(19-11) \times 3 \end{aligned}$$

Find the option which should replace (?)

- (A) 21
- (B) 24 ✓
- (C) 35
- (D) 37



Find the option which should replace (?)



$$5 * 9 * 4 = 7 = 49$$

$$5 * 3 * 1 = 4 = 16$$

$$7 * 9 * 1 = ?$$

$$5 \times 9 + 4 = \sqrt{49} = 7$$

$$5 \times 3 + 1 = \sqrt{16} = 4$$

$$7 \times 9 + 1 = \sqrt{64} = 8$$

(A) 5

(B) 6


(C) 7

(D) 8





Find the option which should replace (?)



$$\overline{12} @ \overline{11} = 12$$

$$\overline{13} @ \overline{16} = 18$$

$$\overline{32} @ \overline{14} =$$

$$12 \times 2 = \overline{24} = 8$$

$$11 \times 2 = \overline{22} = \frac{4}{12}$$

$$13 \times 2 = \overline{26} = 12$$

$$16 \times 2 = \overline{32} = \frac{6}{18}$$

$$32 \times 2 = \overline{64} = 24$$

$$14 \times 2 = \overline{28} = \frac{16}{40}$$

(A) ~~36~~

(B) 40 ✓

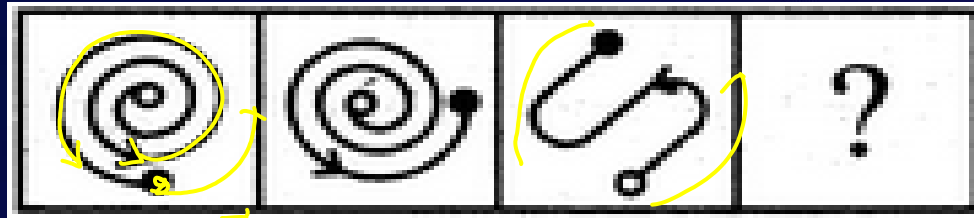
(C) 45

(D) 60



Select a suitable figure from the Answer Figures that would replace the question mark (?).

Problem Figures:



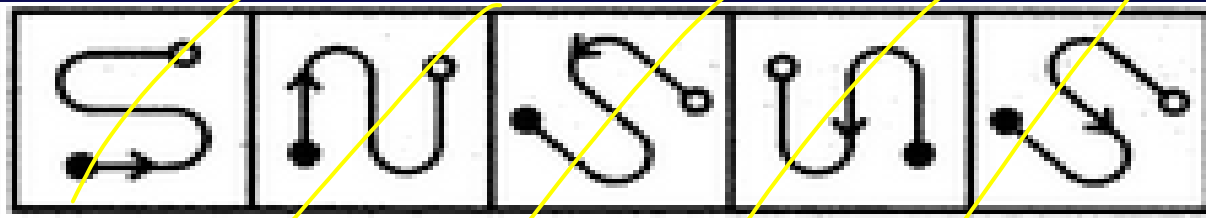
(A)

(B)

(C)

(D)

Answer Figures:



(1)

(2)

(3)

(4)

(5)

A.1

B.2

C.3

D.4

E.5





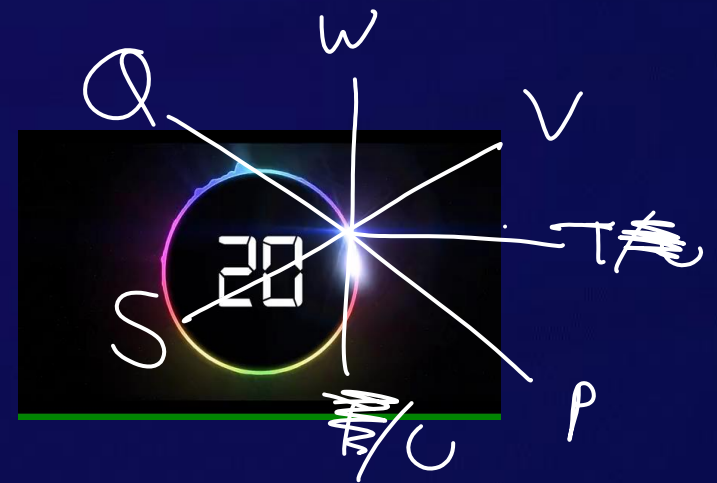
7 Delegates are sitting around a circular conference table P , R , S , T , U , V and W are the delegates and they grouped to discuss an impending meeting. P is the neighbor of Both T and U . S sits on the immediate right of U . There is one person sitting between S and W but he is not V.

7 प्रतिनिधि एक परिपत्र सम्मेलन की मेज के चारों ओर बैठे हैं, P, R, S, T, U, V और W प्रतिनिधि हैं और उन्होंने आसन्न बैठक पर चर्चा करने के लिए समूहबद्ध किया। P, T और U दोनों का पड़ोसी है। S, U के तत्काल दायें बैठता है। S और W के बीच एक व्यक्ति बैठा है लेकिन वह V नहीं है।

Who is the neighbor of V ?

V का पड़ोसी कौन है?

- (A) P
- (B) T**
- (C) R
- (D) Q





Statement: For supervising the advertisements by different companies, should a censor board be created?

I. Yes, It is seen many times that a particular ad comes under a topic of debate about showing of some scenes.

II. No, There is no need of censor boards for all purposes.

विभिन्न कंपनियों द्वारा विज्ञापनों की निगरानी के लिए, क्या एक सेंसर बोर्ड बनाया जाना चाहिए ?

I. हां, यह कई बार देखा जाता है कि एक विशेष विज्ञापन किसी विषय के अंतर्गत आता है जो कुछ दृश्यों के बारे में बहस करता है।

II. नहीं, सभी उद्देश्यों के लिए सेंसर बोर्ड की कोई आवश्यकता नहीं है।





Arrange the following words in meaningful order.

1. Satisfied / संतुष्ट
2. Inquiry / पूछताछ
3. Problem / समस्या
4. Solution / समाधान
5. Office / कार्यालय



~~(1) 32415~~

(2) 35124

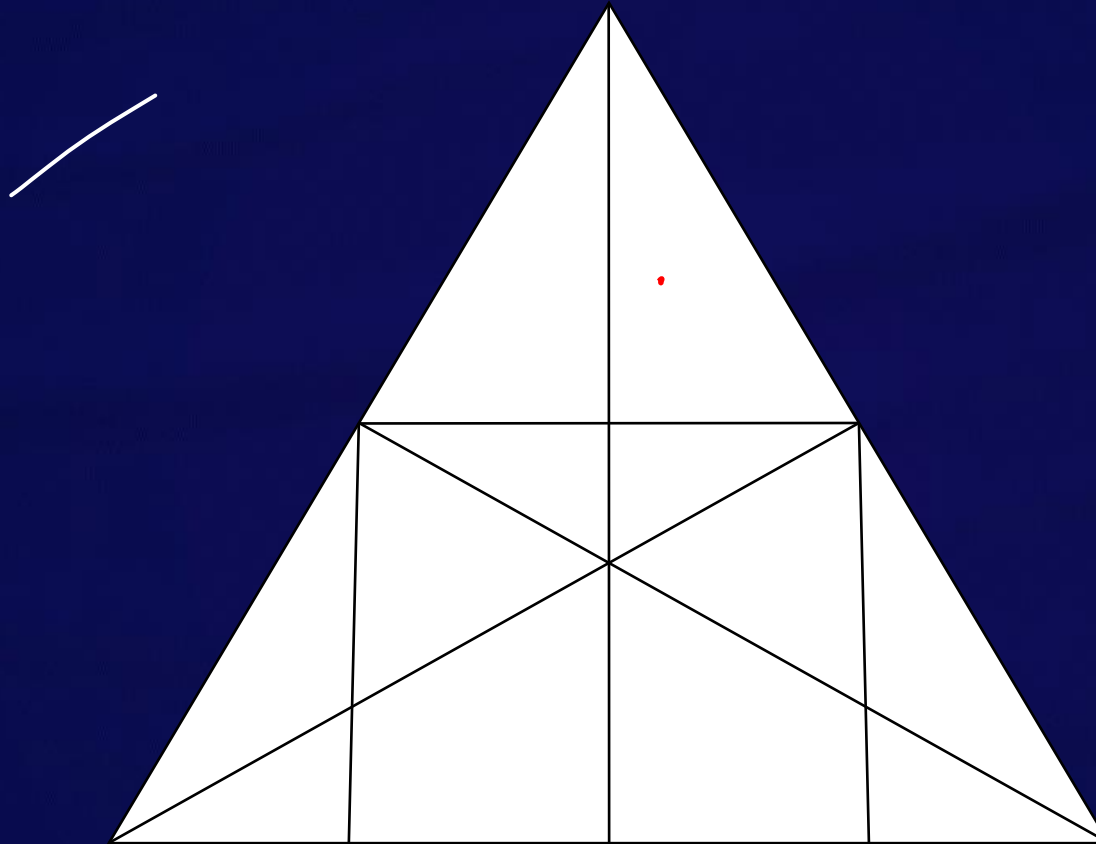
(3) 35241

~~(4) 43521~~



Find the number of STRAIGHT LINE (?)

- (A) 9
- (B) 10
- (C) 11
- (D) 12





Find the missing one (?)

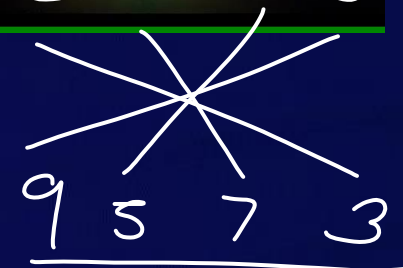
$$6428 : 9257 :: 3658 : ?$$

(A) 5726

~~(B) 9674~~

(C) 9573

(D) 5382



Prime No.



No change



Find the missing :-

13	20
15	11

26	40
30	22

52	?
? ₆₀	44

80

1. 81 , 60
2. 80 , 62
3. 80 , 60
4. 90 , 60



Find the missing one (?)

India : Peacock :: China : ?

भारत: मोर :: चीन:?

(A) Kiwi / कीवी

(B) Penguin / पेंगुइन

(C) Crane / क्रेन

(D) Kukkoo / कुक्कू





Find the missing term(?)

Town : Country :: Earth : ?

नगर : देश :: पृथ्वी : ?

(A) World / दुनिया ✗

(B) Solar System / सौर मंडल ✓

(C) Ocean / महासागर ✗

(D) Planet / ग्रह ✗



Find the missing term(?)

NIGERIA : 5975991

GINGER : ?

(A) 797595

(B) 795759

(C) 797559

(D) 795795

MW



9.00 AM — Bank (Reasoning)

6.30 PM — Hindi (MWF)
Rea (TTS)