



SSC MTS 2021

Previous Year Paper Discussion

8 घंटे लगातार

- English
- Numerical Aptitude
- Reasoning
- General Awareness

08:00 AM

•LIVE

26 Sep 2021





Don't Let Your Studies Get Impacted By COVID-19 Pandemic

Stay Home & Study Online With Mahendras Hybrid Model

Features



Offline Classes



Live Interactive Online Classes



Same Faculty



Same Batch



Same Batch Timing



Online Library Facility



Recorded Video



PDFs



Classes In Both Model

CONTACT US:

1800-103-5225

www.mahendras.org





UPCOMING ONLINE BATCHES

September 2021

01 Sep 2021

01:00 PM to 03:00 PM

**LIVE PREMIUM
GREEN CARD**
(BANK-PO & CLERK)

08:00 AM to 10:00 AM

**LIVE PREMIUM
SILVER CARD**
(SSC CGL & CHSL)

BILINGUAL

08 Sep 2021

10:30 AM to 12:30 PM

**LIVE PREMIUM
GREEN CARD**
(BANK-PO & CLERK)

BILINGUAL

15 Sep 2021

03:00 PM to 05:00 PM

**LIVE PREMIUM
GREEN CARD**
(BANK-PO & CLERK)

03:00 PM to 05:00 PM

**LIVE MATHS
INDIVIDUAL**
(ONLINE LIVE CLASS)

BILINGUAL

03:00 PM to 05:00 PM

LIVE PREMIUM SILVER CARD
(SSC CGL & CHSL)

ENGLISH MEDIUM

22 Sep 2021

05:30 PM to 07:30 PM

**LIVE PREMIUM
GREEN CARD**
(BANK-PO & CLERK)

BILINGUAL

29 Sep 2021

10:30 AM to 12:30 PM

**LIVE PREMIUM
SILVER CARD**
(SSC CGL & CHSL)

BILINGUAL

07:30 PM to 09:30 PM

LIVE PREMIUM GREEN CARD
(BANK-PO & CLERK)

ENGLISH MEDIUM



www.mahendras.org

S No	Name of Examination	Paper/ Stage	Schedule of Examination
1	Combined Graduate Level Examination-2019	Skill Test	15.09.2021 to 16.09.2021
2	Junior Engineer (Civil, Mechanical, Electrical and Quantity Surveying & Contracts) Examination, 2020	Paper-II	26.09.2021
3	Multi Tasking (Non-Technical) Staff Examination, 2020	Paper-I	05.10.2021 to 20.10.2021
4	Stenographer Grade 'C' and 'D' Examination, 2019	Skill Test	21.10.2021 To 22.10.2021

Find the missing ONE (?)

83 : 37 :: 72 : ?

- (A) 35
- (B) 53
- (C) 49
- (D) 54



Find the missing ONE (?)

7 : 18 :: 12 : ?

- (A) 26
- (B) 28
- (C) 32
- (D) 27



Find the missing ONE (?)

23 : 31 :: 25 : ?

- (A) 211
- (B) 125
- (C) 129
- (D) 130



Find the missing ONE (?)

$$324 : 224 :: 311 : ?$$

- (A) 233
- (B) 200
- (C) 240
- (D) 221



Find the option which should replace (?)

$$97 : 47 :: 75 : ?$$

- (A) 57
- (B) 27
- (C) 23
- (D) 21



Find the option which should replace (?)



$$17 : 144.5 :: 13 : ?$$

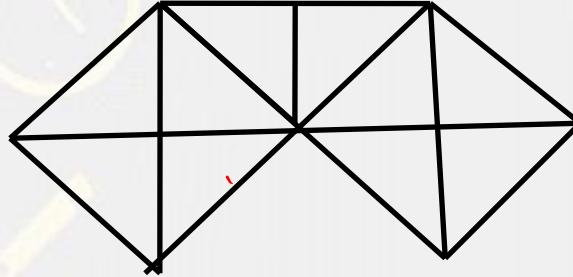
- A. 87.5
- B. 86.25
- C. 84.5
- D. 81.25

Find number of triangle in the given figure ?

दी गई आकृति में त्रिभुज की संख्या ज्ञात कीजिए?




- (A) 29
- (B) 29
- (C) 38
- (D) 21



Find the SQUARE :-

- (A) 9**
- (B) 8**
- (C) 7**
- (D) 10**



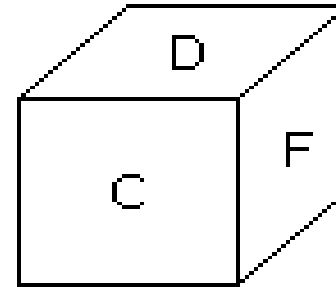
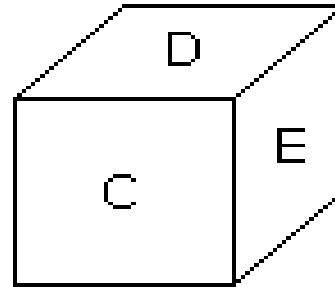
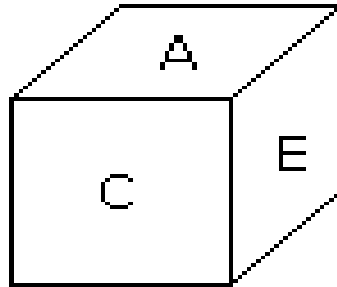
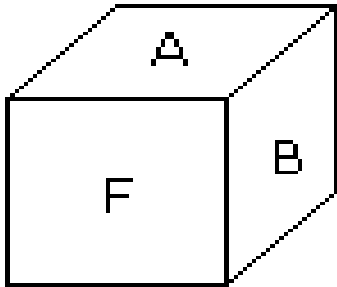
Find the MISSING (?)



Current : 3 hour 8 hour :: water : ?

- 1. 11 hour : 6 hour**
- 2. 21 hour : 12 hour**
- 3. 1 hour : 6 hour**
- 4. NOT**

A cube has six different Alphabet drawn over its six faces. Three different positions of the cube are shown in figures .



Which alphabet is opposite the A?

- A. B
- B. C
- C. D
- D. E

**Pinki ranks 16th from the top and 15th from the bottom in a class.
How many students are there in the class?**

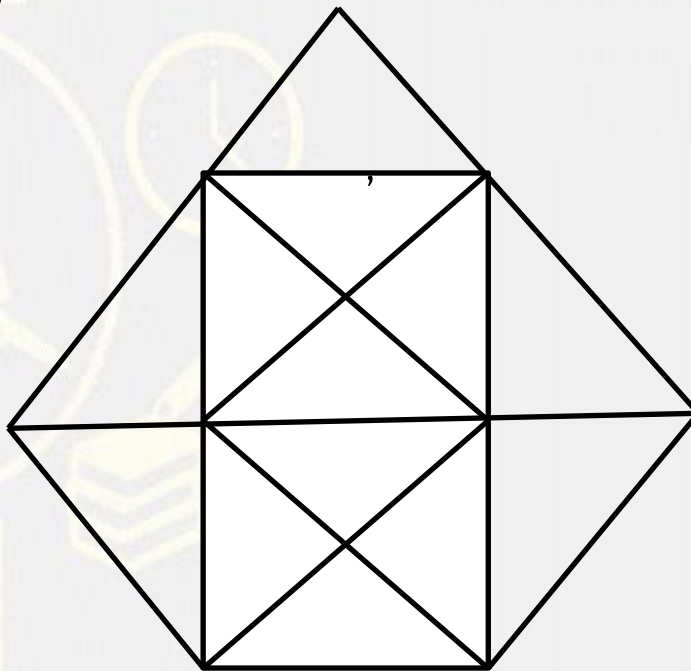
पिंकी एक कक्षा में 16 वीं और नीचे से 15 वीं रैंक पर है। वहाँ कक्षा में कितने छात्र हैं?

1. 30
2. 31
3. 32
4. Cannot be determined /निर्धारित नहीं किया जा सकता है



Find the triangle (?)

- 1. 29**
- 2. 28**
- 3. 30**
- 4. 31**



Find number of triangle in given figure ?

त्रिभुज की संख्या ज्ञात कीजिये?

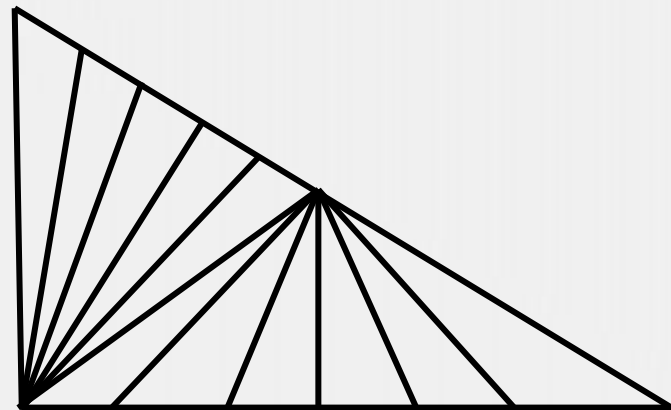
(A) 32

(C) 41



(B) 27

(D) 37



Find the missing :-

- (A) 1
- (B) -1
- (C) 2
- (D) 0

0	-1	-2
1	0	-1
2	1	?



Find the option which should replace (?)

$$95 : 105 :: 89 : ?$$

- (A) 109
- (B) 809
- (C) 111
- (D) 98



Find the option which should replace (?)

$$75 : 24 :: 63 : ?$$

- (A) 25
- (B) 26
- (C) 27
- (D) 30



Find the missing :-

- (A) 16
- (B) 11
- (C) 15
- (D) 17

5	6	7	8
10	18	21	24
7	9	10	?



Find the missing :-

- (A) 16
- (B) 15
- (C) 18
- (D) 21

17	12	?
11	34	19
19	28	11
25	06	08



Find the missing :-

- (A) 7
- (B) 6
- (C) 9
- (D) 8

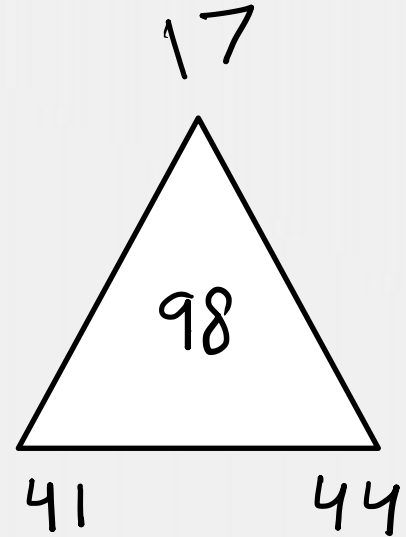
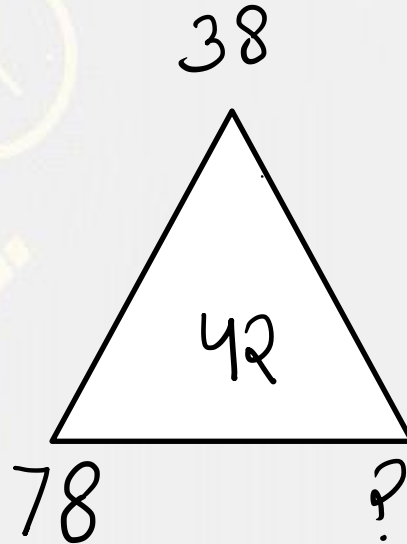
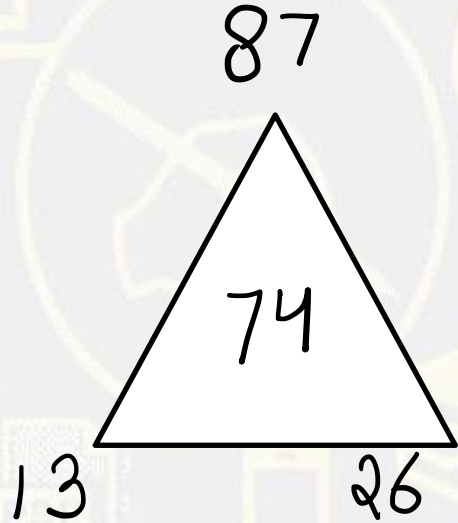
6	9	20	5
15	3	8	4
7	25	8	10
7	8	?	22





Find the missing :-

- (A) 42
- (B) 32
- (C) 76
- (D) 68



Find the missing one (?)

2F : FD :: 3D : ?

- (A) HU
- (B) HA
- (C) HO
- (D) HI



The calendar for the year 2019 will be the same for the year?

वर्ष 2019 के लिए कैलेंडर वर्ष के लिए समान होगा?

- 1) 2025
- 2) 2031
- 3) 2030
- 4) 2047



Find the option which should replace (?)



$$2 \ (3) \ 4 = 14$$

$$3 \ (4) \ 6 = 60$$

$$4 \ (5) \ 7 = ?$$

A. 72

B. 84

C. 96

D. 108

Find the Missing one (?)

$$12 : 48 :: 10 : ?$$



- (A) 100
- (B) 50
- (C) 25
- (D) 80

Find the option which should replace (?)

$$63 : 46 :: 18 : ?$$

- (A) 100
- (B) 121
- (C) 144
- (D) 169



Find the missing :-

1	7	28	9
2	5	62	5
1	8	32	?



(A) 3

(B) 2

(C) 4

(D) 1

Find the missing :-

- (A) 35
- (B) 42
- (C) 45
- (D) 95

3	10	6	186
9	5	3	138
5	7	1	36
3	2	5	?



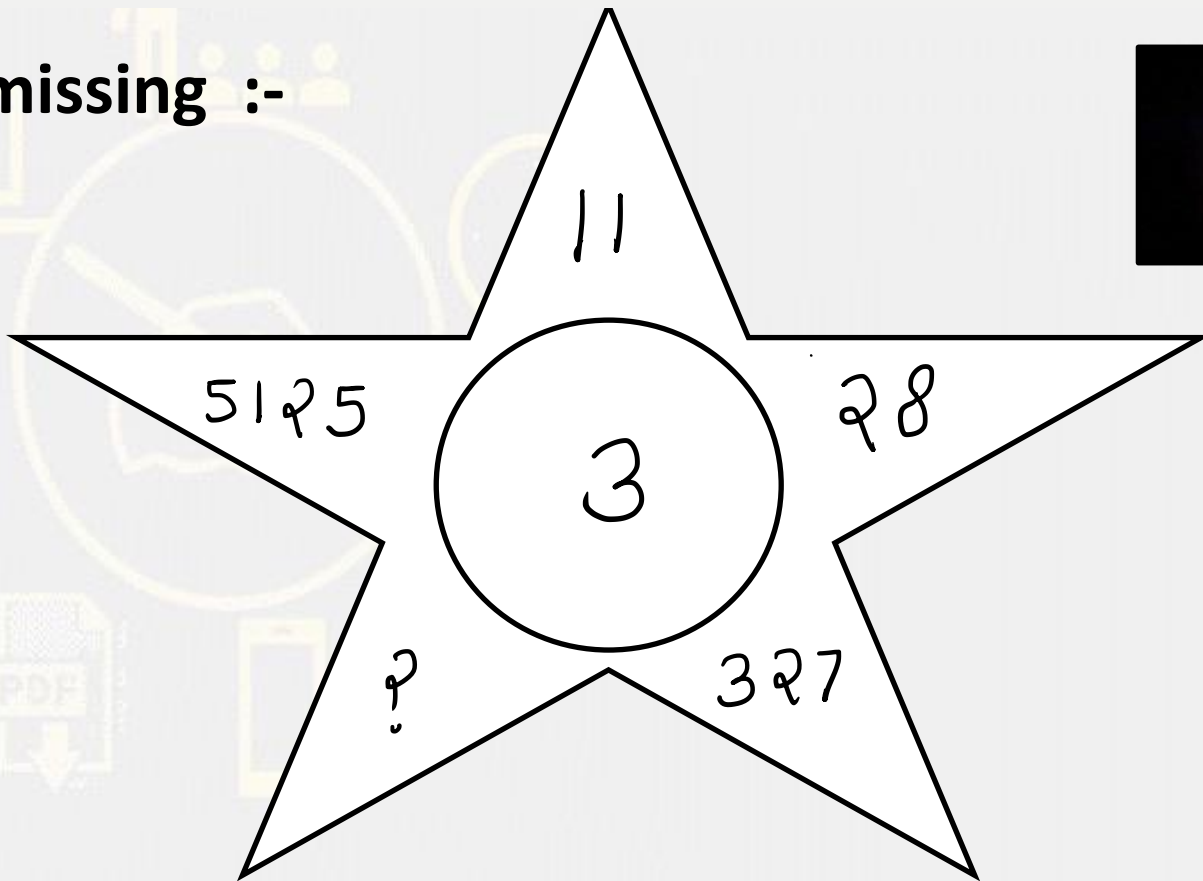


Find the ODD :-

- (A) Photo : Frame / **फोटो : फ्रेम**
- (B) House : Compound wall / **घर: कंपाउंड की दीवार**
- (C) Garden : Fence / **बगीचे : बाड़**
- (D) Room : Door / **कमरा: दरवाजा**

Find the missing :-

- (A) 4126
- (B) 444
- (C) 464
- (D) 446



Find the missing :-

- (A) 14
- (B) 8
- (C) 10
- (D) 12

8	27	32	16
12	18	16	20
18	12	?	25



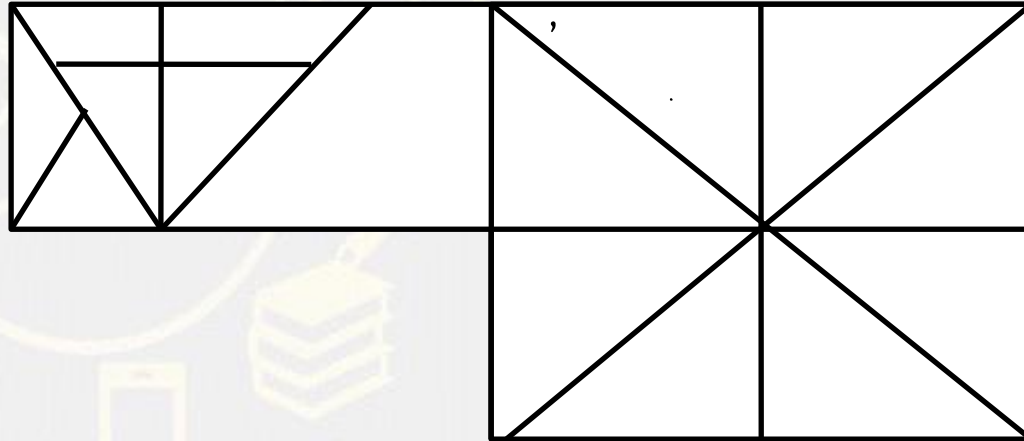


Mahendra's

FOR MORE DISCOUNT VISIT www.mahendras.org & USE PROMO CODE : **E09419**

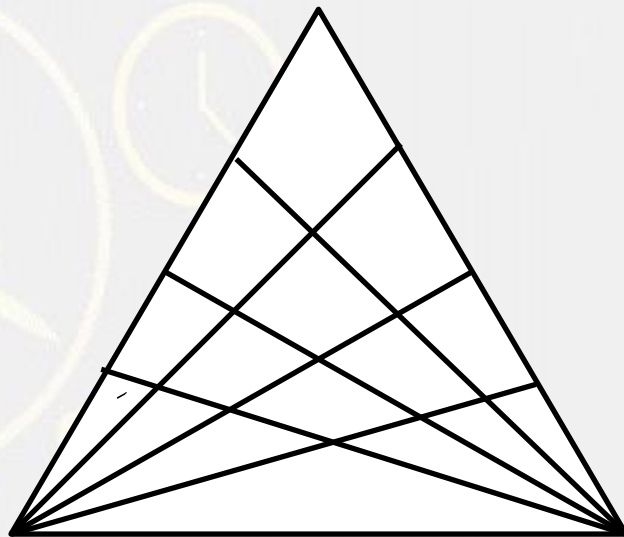
Find the triangle (?)

1. 26
2. 27
3. 28
4. 25



Find the number of triangle (?)

- (A) 42**
- (B) 64**
- (C) 60**
- (D) 70**



Find the option which should replace (?)

$$10 + 7 = 12$$

$$25 + 3 = 25$$

$$27 + 8 =$$

(A) 21

(B) 30

(C) 39

(D) 26





‘ 2 5 3 ’ means ‘man are good’

‘ 5 4 6 ’ means ‘woman was good’

‘ 3 7 8 ’ means ‘walking old man’

Q- What stands for ‘Was’ is that code ?

- (A) 8**
- (B) 4**
- (C) 6**
- (D) 4 or 6**