

# RAILWAY GROUP D

 Mahendra's

REASONING



≡ अंतिम प्रहार ≡

FIGURE  
COUNTING

LIVE | 08:30 PM







# UPCOMING ONLINE BATCHES

## July 2022

**06 July 2022**

05:30 PM to 07:30 PM

**BANK ONLINE LIVE CLASS**

03:00 PM to 05:00 PM

**SSC ONLINE LIVE CLASS**

**BILINGUAL**

06 July 2022

07:30 PM to 09:30 PM

**BANK ONLINE LIVE CLASS**

**ENGLISH MEDIUM**

06 July 2022

02:00 PM to 04:00 PM

**SSC ONLINE LIVE CLASS**

**ENGLISH & BENGALI**

**13 July 2022**

08:00 AM to 10:00 AM

**BANK ONLINE LIVE CLASS**

07:30 PM to 09:30 PM

**SSC ONLINE LIVE CLASS**

**BILINGUAL**

13 July 2022

09:15 AM to 11:15 AM

**BANK ONLINE LIVE CLASS**

**ENGLISH & BENGALI**

**20 July 2022**

01:00 PM to 03:00 PM

**BANK ONLINE LIVE CLASS**

10:30 AM to 12:30 PM

**SSC ONLINE LIVE CLASS**

**BILINGUAL**

**27 July 2022**

10:30 AM to 12:30 PM

**BANK ONLINE LIVE CLASS**

08:00 AM to 10:00 AM

**SSC ONLINE LIVE CLASS**

**BILINGUAL**

27 July 2022

07:00 AM to 09:00 AM

**BANK ONLINE LIVE CLASS**

**ENGLISH & BENGALI**



[www.mahendras.org](http://www.mahendras.org)



7052477777/7052577777



PUJA KUNDU 17 hours ago 7 subscribers

The answer is..... 526118 jo ki option mai nhi hai....." logic hai -reverse of sq of the given no"...... Thank you sir for the amazing session 🔥👍👍👍👍

1 REPLY

[View reply from Mahendras : Online Videos For Govt. Exams](#)



Vishnu Gupta 14 hours ago 3 subscribers

526118 is the right ans very super nice session sir Thank you 👍 sir love ❤️ you sir 👍❤️

REPLY

[View reply from Mahendras : Online Videos For Govt. Exams](#)



Chhavi Saxena 17 hours ago

Home work answer is 526118

Logic - 549 square then reverse

526118.... options are wrong

Very Nice Session Sir Thanku so much dear Sir 🙏🙏🙏🙏🙏🙏🙏🙏🙏🙏🙏🙏

REPLY

[View reply from Mahendras : Online Videos For Govt. Exams](#)



DEEKSHA SHARMA 17 hours ago

Home work answer is option c

very nice session sir 🙏🙏🙏

REPLY

[View reply from Mahendras : Online Videos For Govt. Exams](#)



Ankit Vish 17 hours ago (edited) 228 subscribers

Answer. CCC.

Nice session sir 👍👍

1 REPLY

[View reply from Mahendras : Online Videos For Govt. Exams](#)



vedant yaduwanshi 4 hours ago

Homework Ans.526118



REPLY



Bhavya thakur  \_\_\_\_\_ 17 hours ago 27 subscribers

C 



REPLY

[View reply from Mahendras : Online Videos For Govt. Exams](#)



Surbhi Sinha 17 hours ago

526194 Option cccccccc  



REPLY

[View reply from Mahendras : Online Videos For Govt. Exams](#)

Find the missing ONE (?)

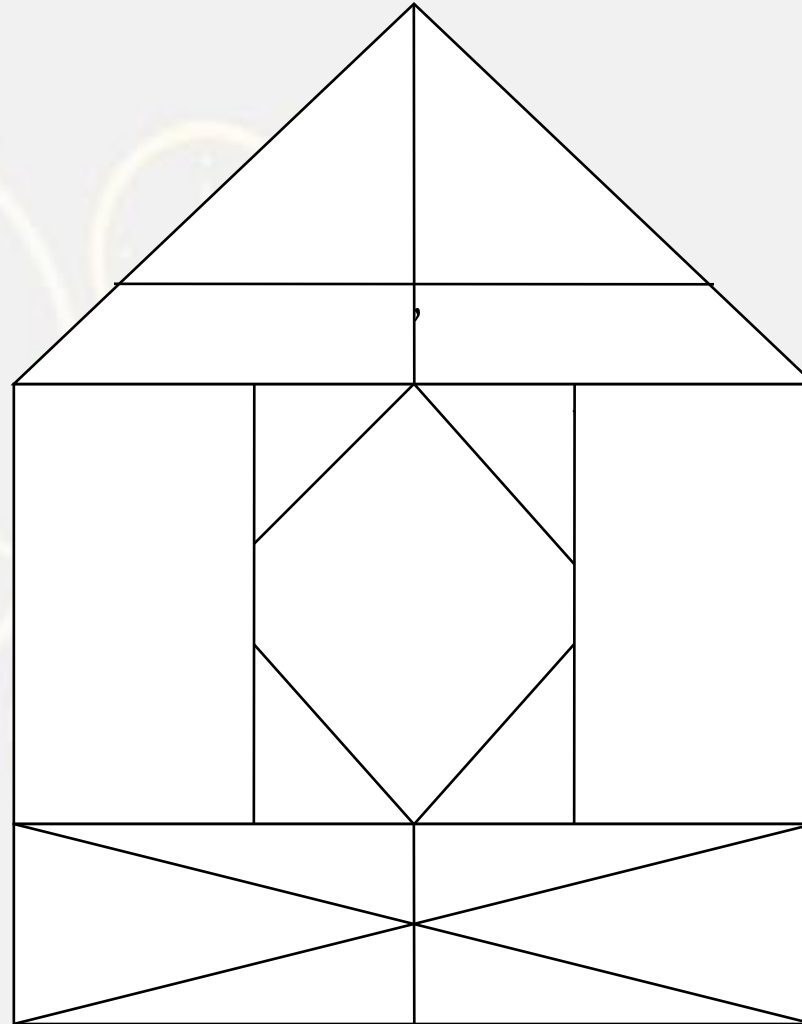
176 : 19463 :: 549 : ?

- (A) 3546
- (B) 4571
- (C) 526194
- (D) 251649



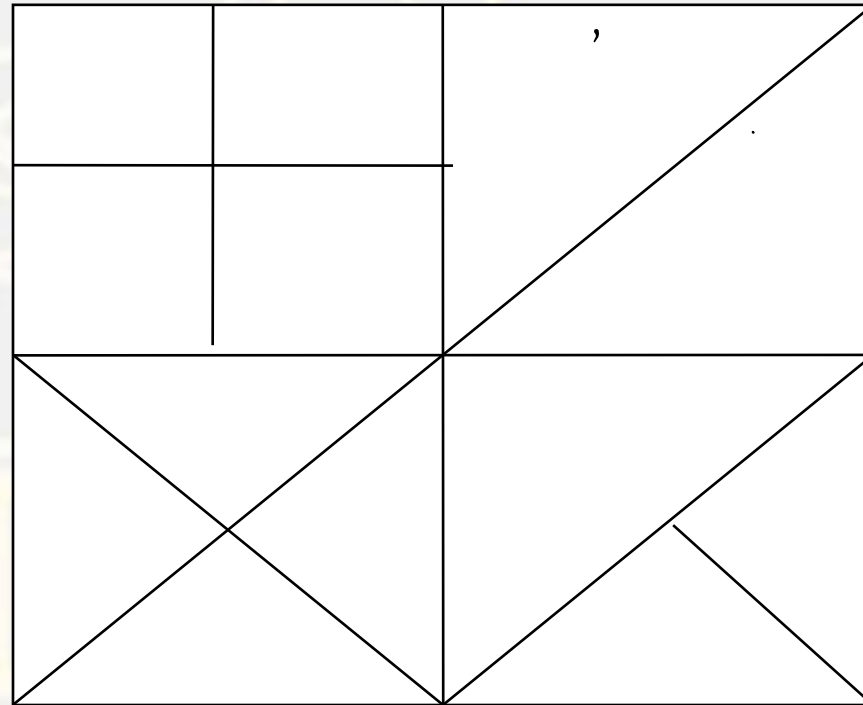
Find the triangle (?)

- 1. 20
- 2. 22
- 3. 18
- 4. 24



Find the triangle (?)

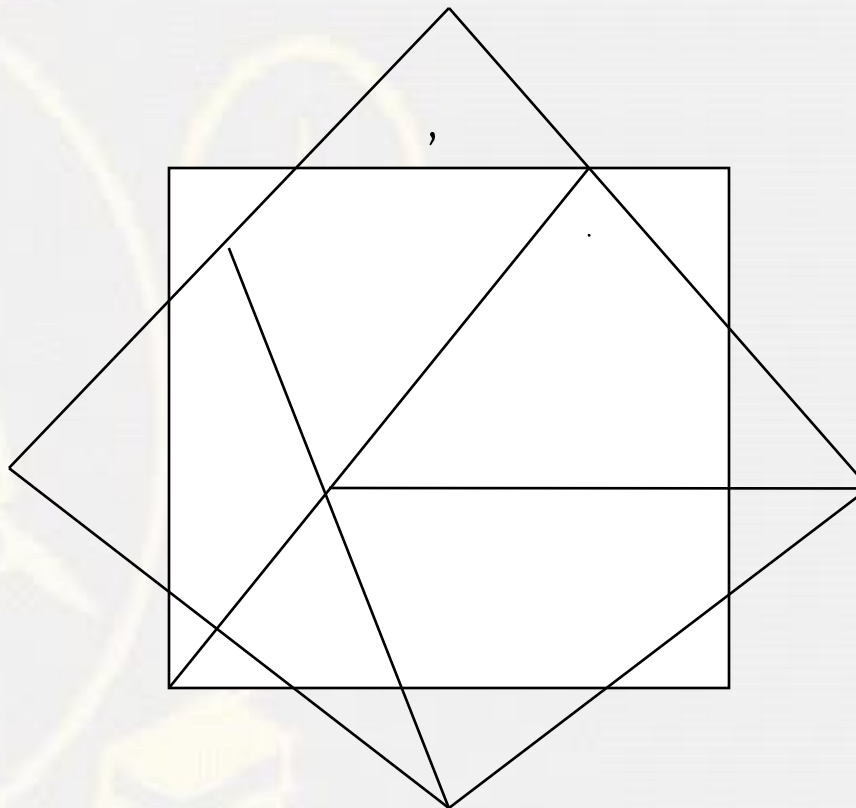
- (A) 20
- (B) 16
- (C) 17
- (D) 14





**Find the triangle (?)**

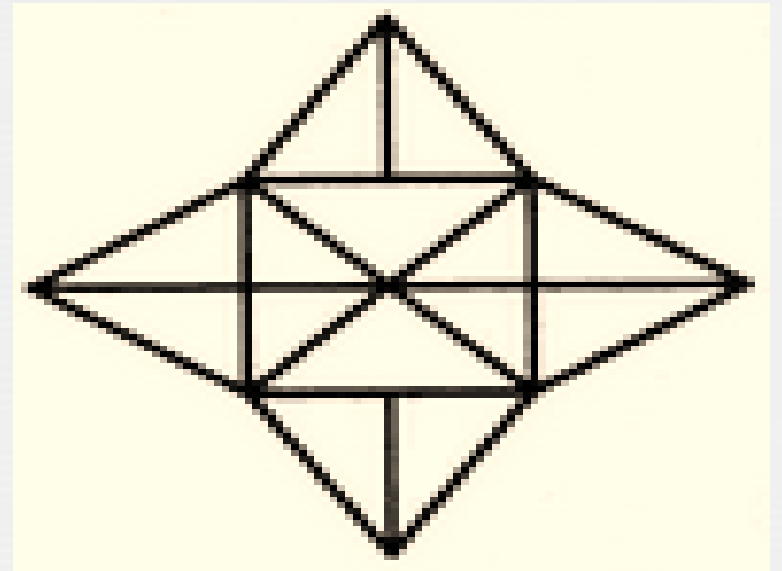
- 1. 21**
- 2. 20**
- 3. 14**
- 4. NOT**





Find number of triangle in figure?

- (A) 18
- (B) 28
- (C) 20
- (D) 32



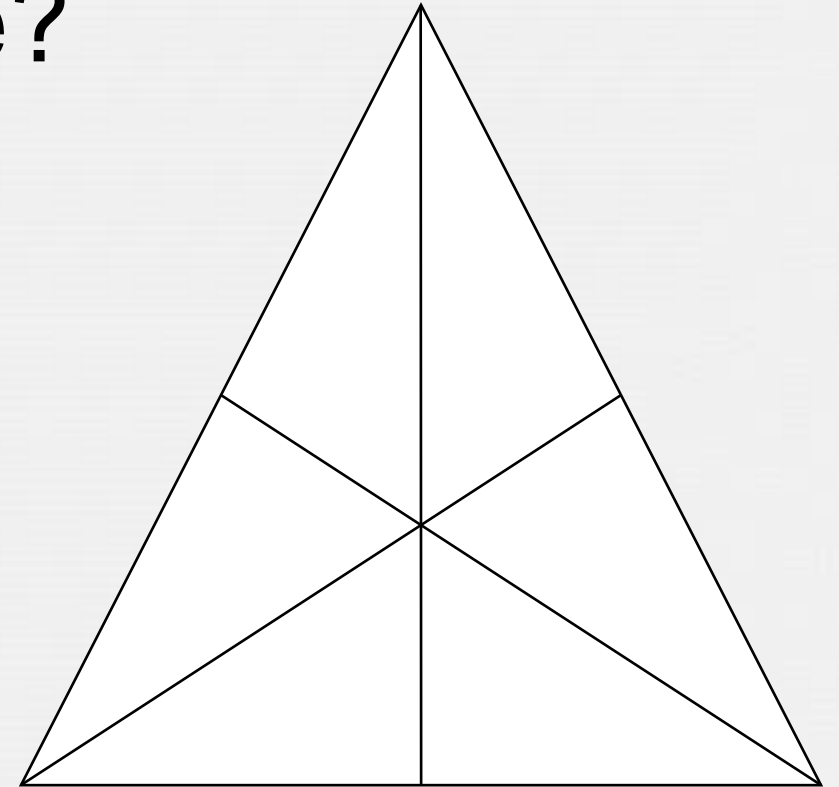
Find number of triangle in figure?

(A) 20

(B) 24

(C) 16

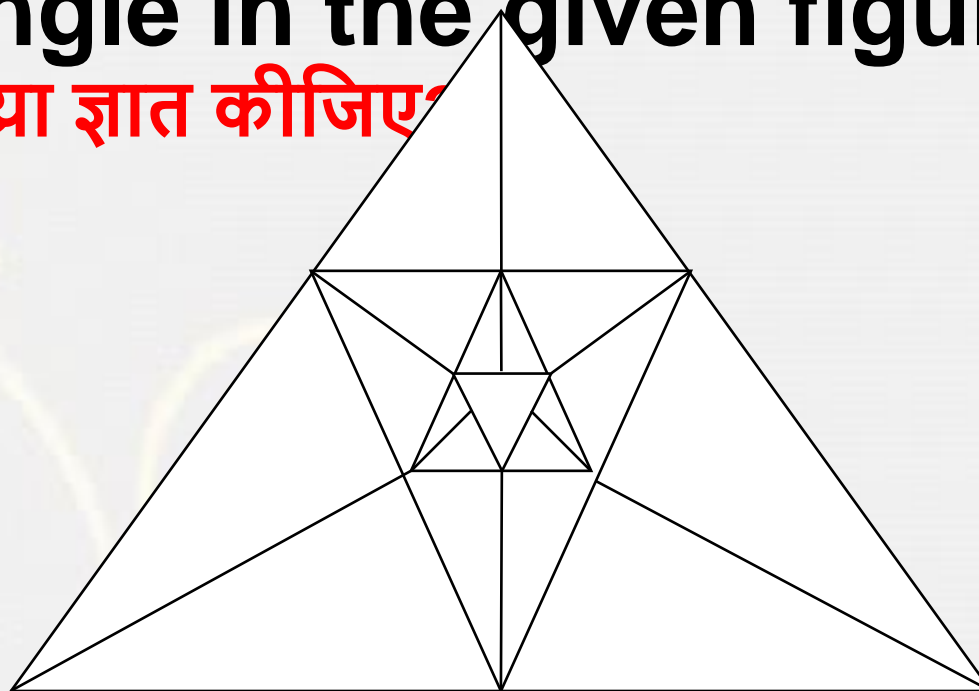
(D) 25



Find number of triangle in the given figure ?


दी गई आकृति में त्रिभुज की संख्या ज्ञात कीजिए।

- (A) 20
- (B) 31
- (C) 17
- (D) NOT




Find number of square in the given figure ?

- (A) 32
- (B) 30
- (C) 29
- (D) 28



**Find number of rectangle in the given figure ?**

- (A) 90**
- (B) 100**
- (C) 80**
- (D) 70**





Find number of square in the given figure



(A) 42

(B) 30


(C) 49

(D) 28



# Find number of square in the given figure ?

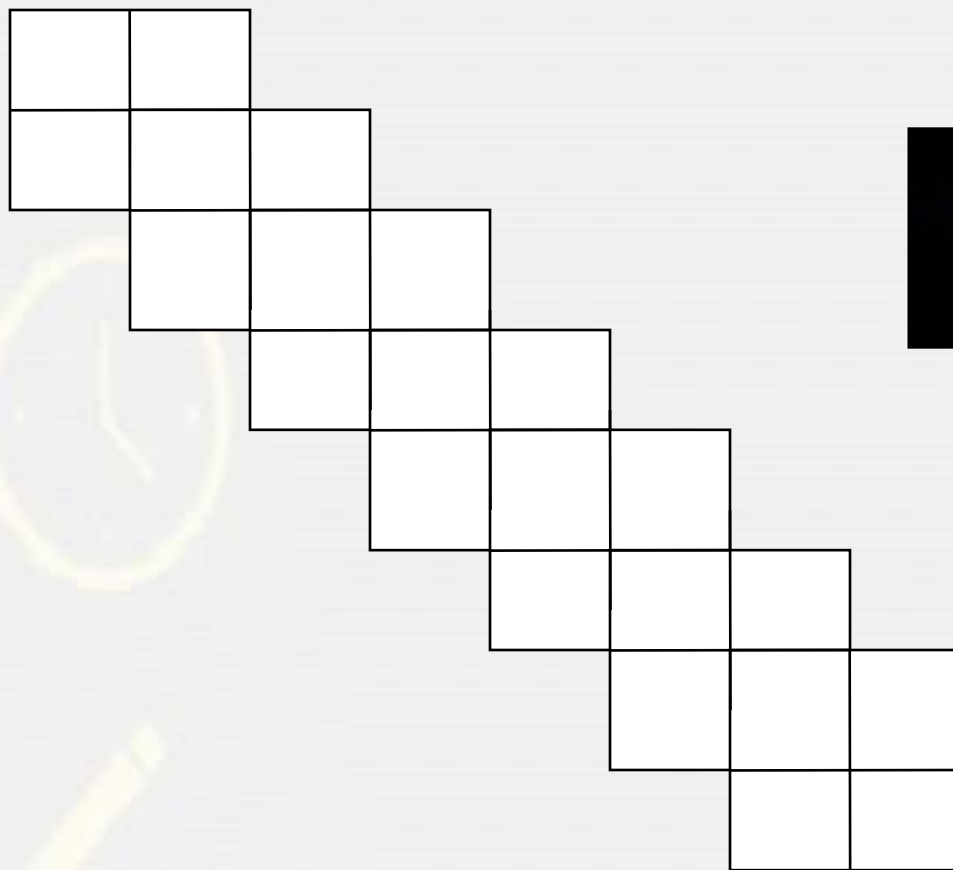
- (A) 90                      (B) 91
- (C) 28                     (D) 42



# Find number of square in the given figure ?

दिए गए आंकड़े में वर्ग की संख्या ज्ञात कीजिए

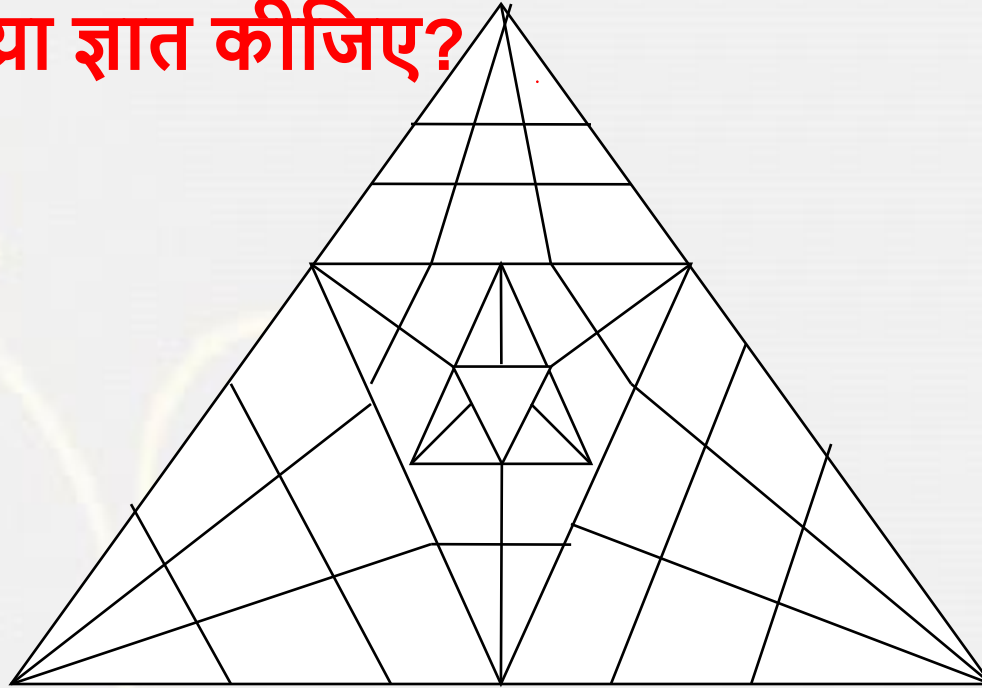
- (A) 34
- (B) 29
- (C) 31
- (D) cnd



Find number of triangle in the given figure ?

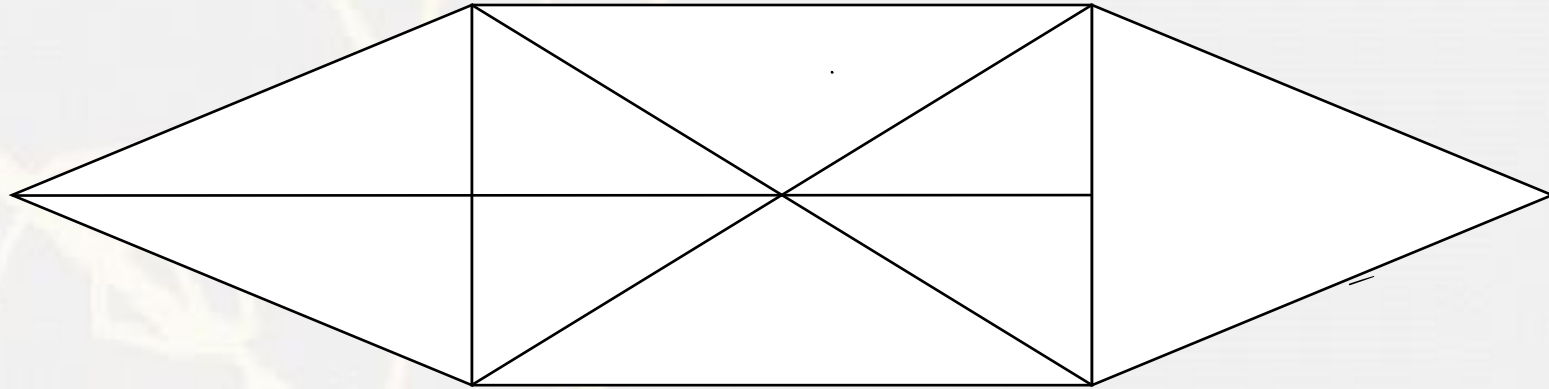
दी गई आकृति में त्रिभुज की संख्या ज्ञात कीजिए?

- (A) 85
- (B) 91
- (C) 16
- (D) NOT



Find the triangle (?)

1. 14
2. 18
3. 16
4. 20

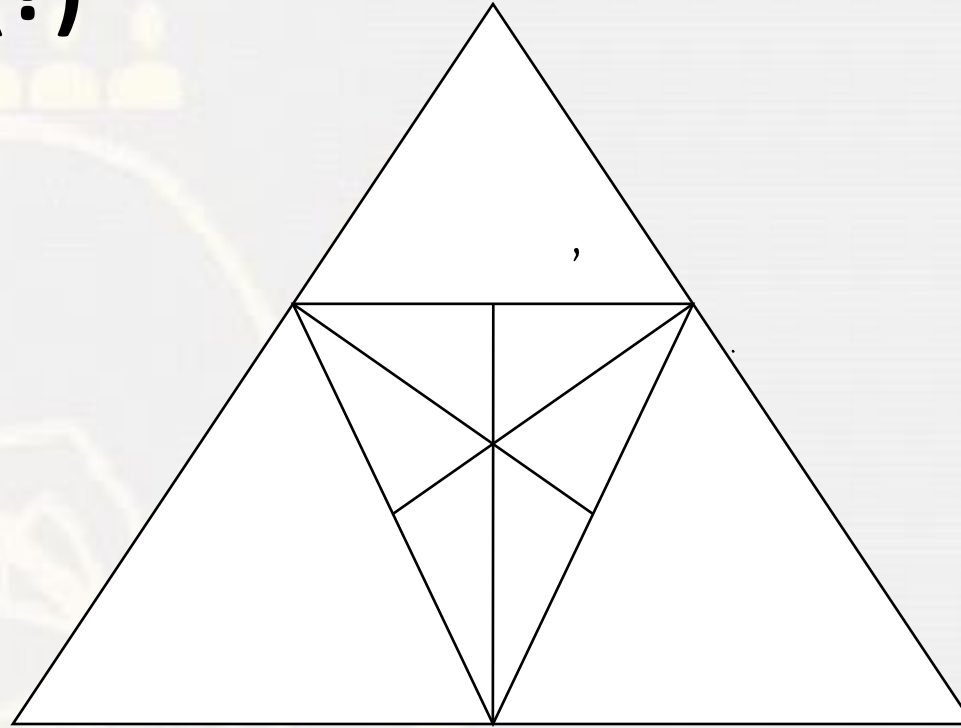






Find the triangle (?)

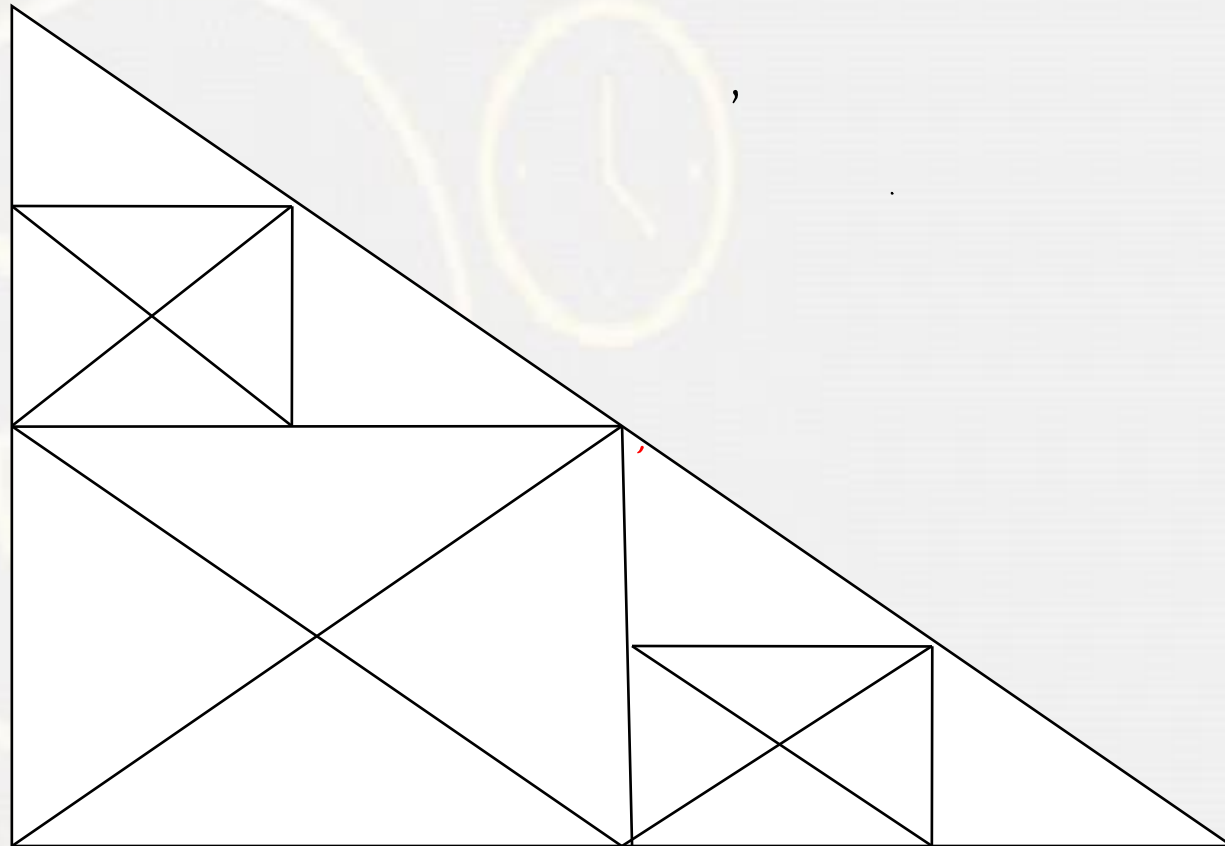
- 1. 16
- 2. 18
- 3. 19
- 4. 20



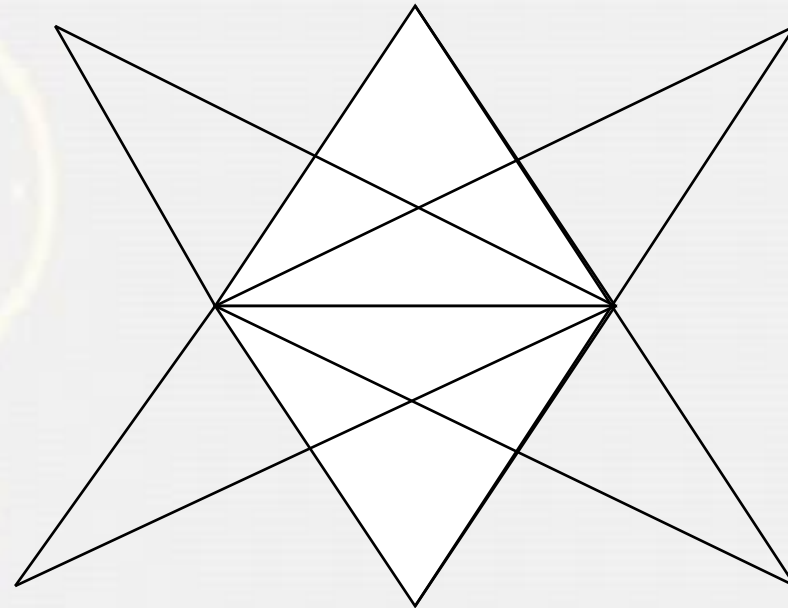


# Find the TRIANGLE (?)

- 1. 32
- 2. 34
- 3. 37
- 4. 40

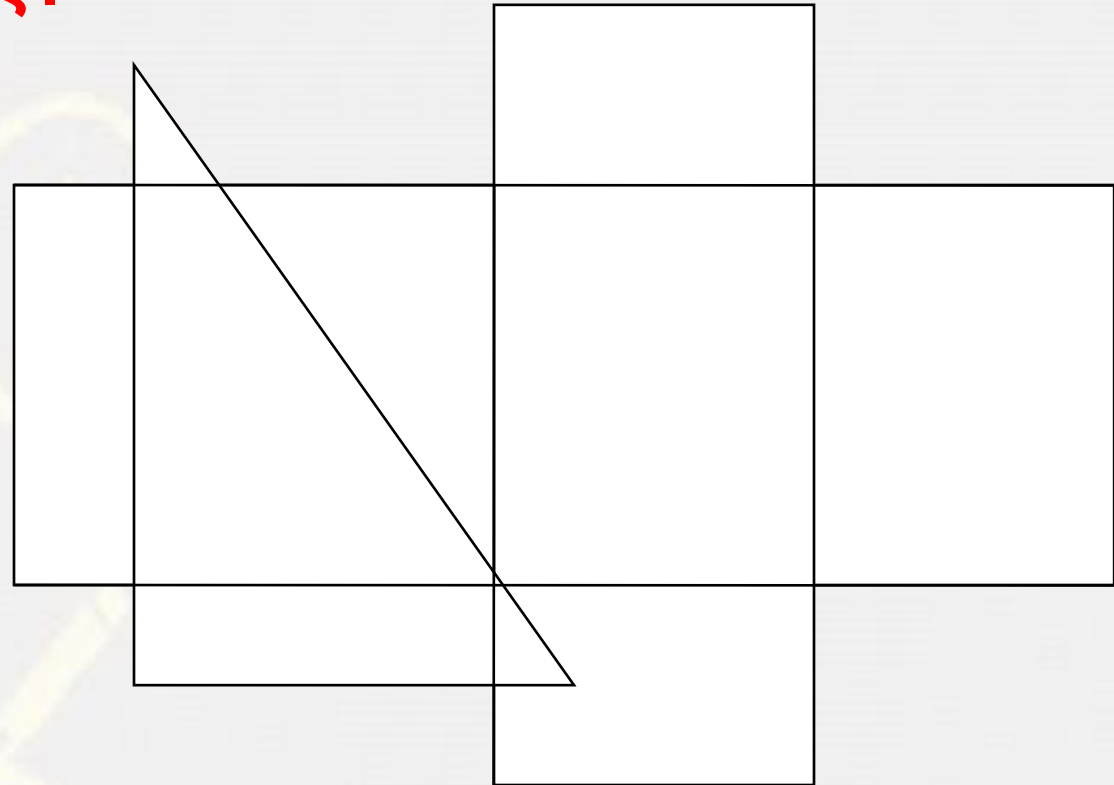


Find the number of triangles in the given figure.  
दिए गए आंकड़े में त्रिकोणों की संख्या ज्ञात कीजिए।



- A. 16
- B. 18
- C. 22
- D. More than 22

Find the number of Rectangles in the given figure.  
दिए गए आंकड़े में की संख्या ज्ञात कीजिए।



- A.15
- B.12
- C.17
- D.16