

TOPIC WISE REASONING



Figure Counting, Missing Number,
Dice & Paper Cutting
SSC MTS & GD
Previous Year Paper Questions

ALL COMPETITIVE EXAMS

LIVE   2:00 PM





Don't Let Your Studies Get Impacted By COVID-19 Pandemic

Stay Home & Study Online With Mahendras Hybrid Model

Features



Offline Classes



Live Interactive Online Classes



Same Faculty



Same Batch



Same Batch Timing



Online Library Facility



Recorded Video



PDFs



Classes In Both Model

CONTACT US:

1800-103-5225

www.mahendras.org





UPCOMING ONLINE BATCHES

August 2021

04 AUG 2021

10:30 AM to 12:30 PM

LIVE PREMIUM GREEN CARD
(BANK PO & CLERK)

07:30 PM to 09:30 PM

LIVE PREMIUM SILVER CARD
(SSC CGL & CHSL)

07:30 PM to 09:30 PM

LIVE CLASS COURSE
(MATHS)

03:00 PM to 05:00 PM

LIVE CLASS COURSE
(UP SI)

BILINGUAL

11 AUG 2021

01:00 PM to 03:00 PM

LIVE CLASS COURSE
(TET & CTET)

05:30 PM to 07:30 PM

LIVE PREMIUM GREEN CARD
(BANK PO & CLERK)

08:00 AM to 10:00 AM

LIVE CLASS COMPLETE COURSE
(SSC GD)

BILINGUAL

18 AUG 2021

08:00 AM to 10:00 AM

LIVE PREMIUM GREEN CARD
(BANK PO & CLERK)

01:00 PM to 03:00 PM

LIVE PREMIUM SILVER CARD
(SSC CGL & CHSL)

BILINGUAL

25 AUG 2021

07:30 PM to 09:30 PM

LIVE PREMIUM GREEN CARD
(BANK PO & CLERK)

BILINGUAL





Sania S 16 hours ago

Super dhansu session sir 🙏🙏🙏🙏
h.w anwer-30 🔥🔥

26:14pr jo logic tha wo shaandaar tha sir ek no.🙏🙏🙏 moj kr di sir 😊😊

👍 🗨️ REPLY

▼ [View reply from Mahendras : Online Videos For Govt. Exams](#)



Viśhñu Güptā 19 hours ago

CND is the right ans
Very nice super session sir
Thank you so much sir ❤️🙏

👍 🗨️ REPLY

▼ [View reply from Mahendras : Online Videos For Govt. Exams](#)



sarita rawat 19 hours ago

Homework answer
Option (D) CND
Today very awesome session sir 🙏👍👍🙏
Thanku so much sir 🙏

👍 🗨️ REPLY

▼ [View reply from Mahendras : Online Videos For Govt. Exams](#)



Satyam Pandey 11 hours ago

Ekdm mst session 🔥🔥🔥
Ans -30

👍 🗨️ REPLY



DEEKSHA SHARMA 19 hours ago

Homework ans is 30
Awesome session sir ji 🙏🙏🙏🙏🙏

👍 🗨️ REPLY

▼ [View reply from Mahendras : Online Videos F](#)



Chhavi Saxena 16 hours ago

Home work question answer is option A 30
Very Nice Session Sir 🙏🙏🙏😊😊

👍 🗨️ REPLY

▼ [View reply from Mahendras : Online Videos F](#)



Masum Idki 😊 19 hours ago

Cnd
Very nice session 🙏🙏👍👍

👍 1 🗨️ REPLY



nikita Chauhan 3 hours ago

Homework ANS-----
Option AAA
Thank you

👍 🗨️ REPLY



PUJA KUNDU 18 hours ago

The Answer is 30....SUPERB SESSION 🔥🔥🔥NEW LOGIC BAHAT SHIKHAYA AAPNE 🙏🙏THANK YOU SOO MUCH SIR FOR THE SESSION 🙏🙏🙏

👍 🗨️ REPLY

▼ [View reply from Mahendras : Online Videos For Govt. Exams](#)



sahil Israni 16 hours ago

Homework answer : 1)30

👍 🗨️ REPLY

▼ [View reply from Mahendras : Onlin](#)



Sukhchand Paradkar 3 hours ago

30.nice 🙏🙏🙏

👍 🗨️ REPLY



RASHMI SONI RASHMI SONI 18 hours ago

HW ANSWER,,CND

AWESOME SESSION 😊

👍 🗨️ REPLY

▼ [View reply from Mahendras : Onlin](#)



Abhishek Pandey 17 hours ago

homework answer option (D) CND

👍 🗨️ REPLY

▼ [View reply from Mahendras : Onlin](#)



Raju THAKUR 3 hours ago

Ans is 30

👍 🗨️ REPLY



Kapil Bhagat 19 hours ago

30

👍 🗨️ REPLY



Naved Khan 15 hours ago

30

👍 🗨️ REPLY

▼ [View reply from Mahendras : Online V](#)



Rohit Gond 19 hours ago

30

👍 🗨️ REPLY

▼ [View reply from Mahendras : Online V](#)



Smarty Sardar 19 hours ago

30

👍 🗨️ REPLY

▼ [View reply from Mahendras :](#)



sameer ranjan 19 hours ago

option no (D) CND

👍 🗨️ REPLY

▼ [View reply from Mahendras :](#)

**Pinki ranks 16th from the top and 15th from the bottom in a class.
How many students are there in the class?**

पिंकी एक कक्षा में 16 वीं और नीचे से 15 वीं रैंक पर है। वहाँ कक्षा में कितने छात्र हैं?

1. 30
2. 31
3. 32
4. Cannot be determined /निर्धारित नहीं किया जा सकता है



Find the option which should replace (?)

EGIK : XVTR :: DFHJ : ?

- (A) WUSQ
- (B) BDFH
- (C) ECGI
- (D) SQON



Find the option which should replace (?)

$$182 : ? :: 210 : 380$$

- (A) 352
- (B) 272
- (C) 240
- (D) 156



Find the option which should replace (?)

$$142 : 29 :: 156 : ?$$

- (A) 52
- (B) 56
- (C) 92
- (D) 78



Find the option which should replace (?)

20	5	16
28	4	49
35	7	?
42	14	9

- (A) 25
- (B) 45
- (C) 35
- (D) 40



Statements: कथन :

Some politician are sinister./ कुछ राजनेता पापी होते हैं।
All sinister is a bureaucrats. / सभी पापी नौकरशाह हैं।



Conclusions: निष्कर्ष:

- I. Some bureaucrats are not sinister./ कुछ नौकरशाह पापी नहीं हैं।
- II. No politician is a bureaucrats. / कोई भी राजनेता नौकरशाह नहीं है।

Find the option which should replace (?)

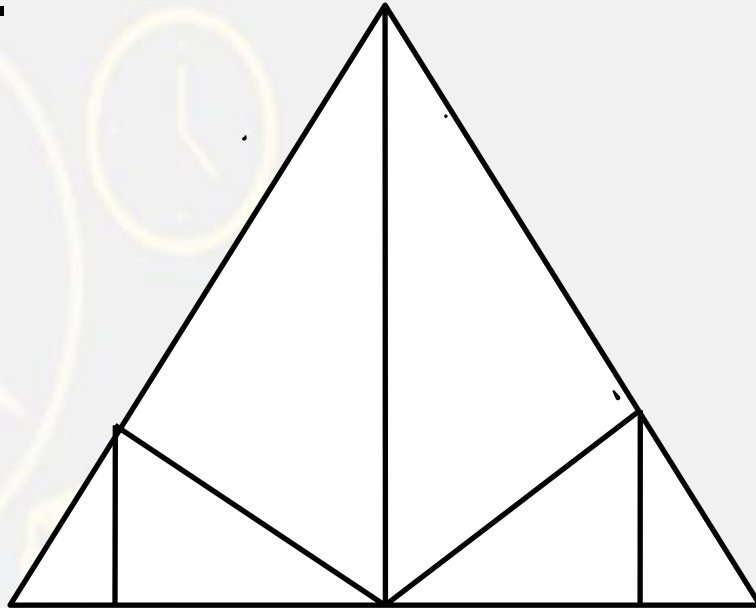
$$25 : 64 :: 35 : ?$$

- (A) 64
- (B) 81
- (C) 72
- (D) 100



Find the triangle :-

- (A) 09
- (B) 10
- (C) 11
- (D) 12



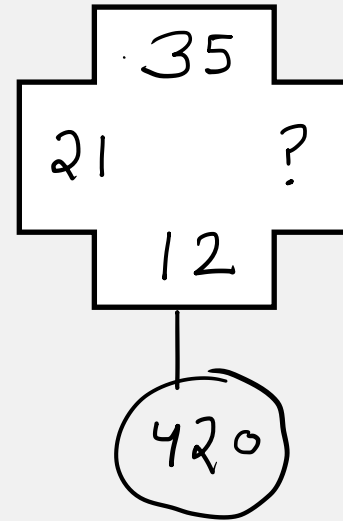
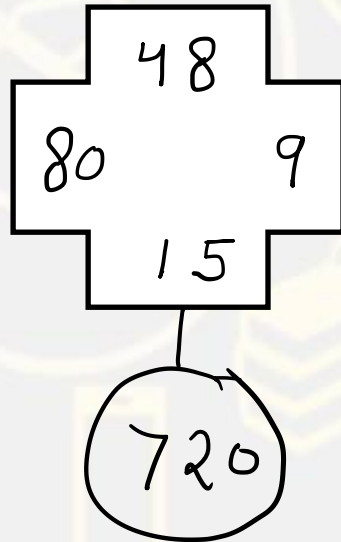
Find the odd (?)

- (A) Vitamin A : Loss of vision**
- (B) Vitamin B : Beriberi**
- (C) Vitamin K : Haemorrhage**
- (D) Vitamin D : Peralysis**



Find the option which should replace (?)

- (A) 25
- (B) 20
- (C) 22
- (D) 13



Find the missing (?)

$$4 @ 5 = 209$$

$$6 @ 7 = 601$$

$$8 @ 2 = ?$$

(A) 620

(B) 495

(C) 540

(D) 536



Find the missing (?)

RELATIVE = MFSCVHYL
NUMBERED = ?

- (A) NVOCFSFE**
- (B) NVODGGHU**
- (C) NVOGDSFE**
- (D) NVOCFDGG**







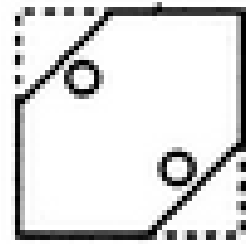


Find the missing (?)

47 , 57 , 69 , 85 , ?

- (A) 109**
- (B) 101**
- (C) 92**
- (D) 95**



Choose a figure which would most closely resemble the unfolded form of Figure



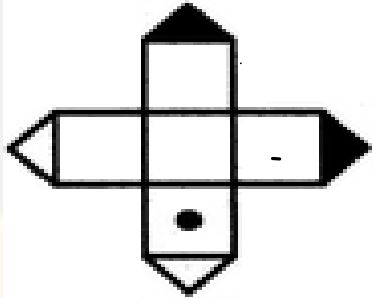
(A)

(B)

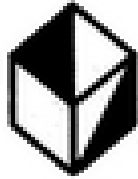
(C)

(D)


Choose the box that is similar to the box formed from the given sheet of paper (X)



(X)



(1)



(2)



(3)

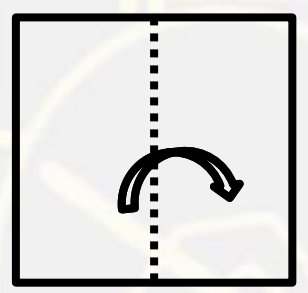


(4)

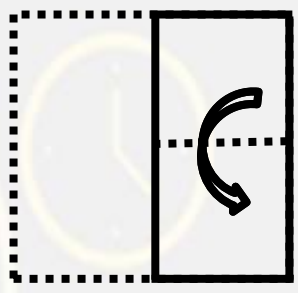
- A. 1 and 2 only
- B. 2 and 4 only
- C. 2 and 3 only
- D. 1 and 4 only



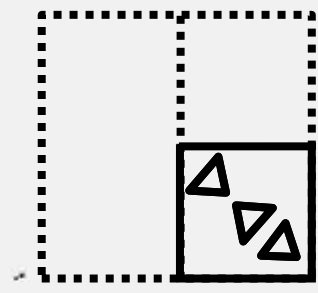
Choose a figure which would most closely resemble the unfolded form of Figure (Z)




(X)



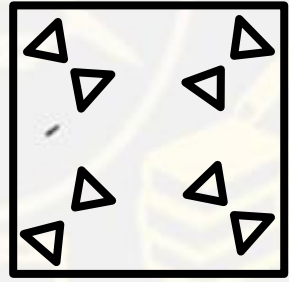
(Y)




(Z)




(A)



(B)



(C)



(D)

