

Percentage of students in various courses (A, B, C, D, E, F) and Percentage of girls out of these. विभिन्न पाठ्यक्रमों (ए, बी, सी, डी, ई, एफ) में छात्रों का प्रतिशत और इनमें से लड़कियों का प्रतिशत।

Total students : 1200 (800 girls + 400 boys)

कुल छात्र : 1200 (800 लड़कियां + 400 लड़के)

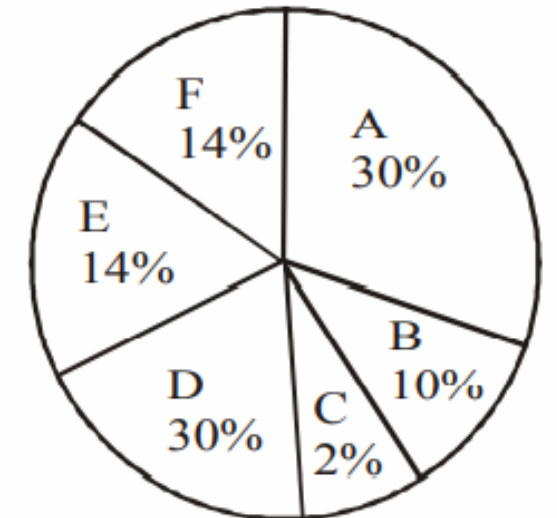
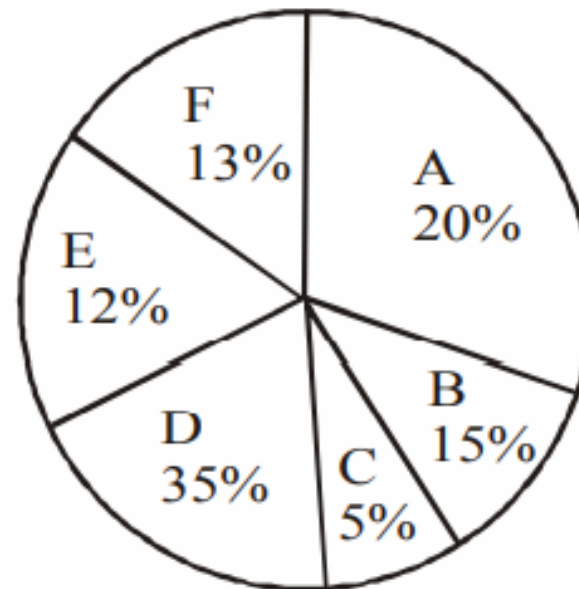


Total students : 1200 (800 girls + 400 boys)

Total Girls : 800

Percentage in various courses

Percentage of Girls in courses



For course D what is the respective ratio of boys and girls?

पाठ्यक्रम D के लिए लड़कों और लड़कियों का संबंधित अनुपात क्या है?

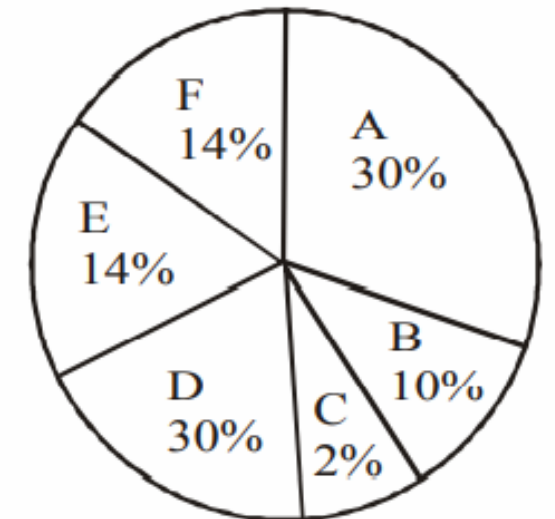
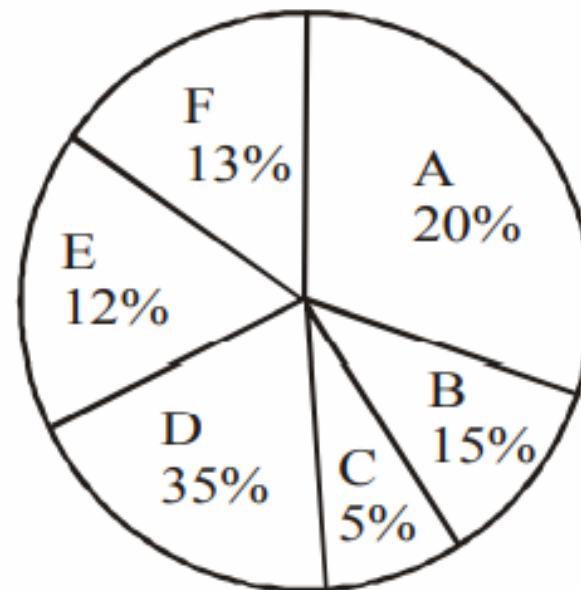
(a) 3 : 4 (b) 4 : 5 (c) 3 : 5 (d) 5 : 6 (e) **00:20** these

Total students : 1200 (800 girls + 400 boys)

Percentage in various courses

Total Girls : 800

Percentage of Girls in courses



For which pair of courses is the number of boys the same?

00:20

किस जोड़ी कोर्स के लिए लड़कों की संख्या समान है?

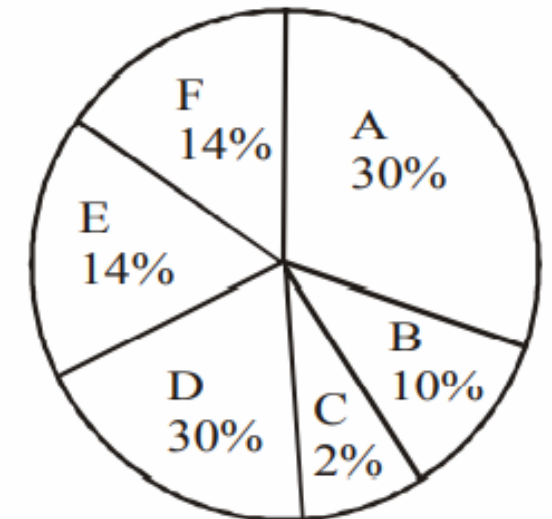
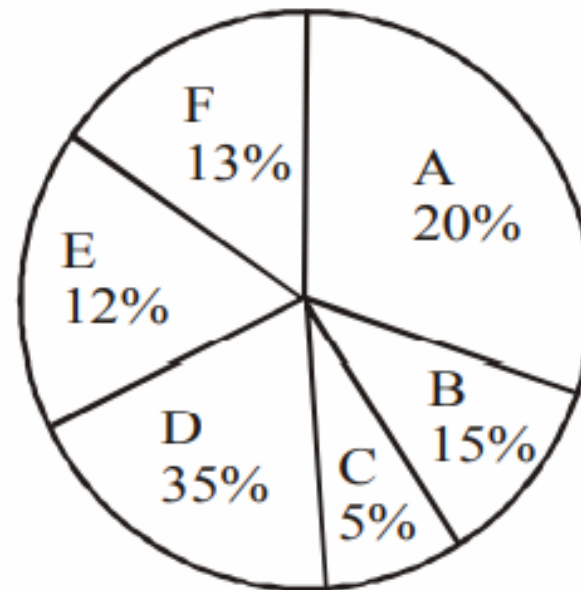
(a) E & F (b) A & D (c) C & F (d) B & D (e) None of these

Total students : 1200 (800 girls + 400 boys)

Percentage in various courses

Total Girls : 800

Percentage of Girls in courses



For course, E, the number of girls is how much per cent more than the boys for course E?

पाठ्यक्रम E के लिए, लड़कियों की संख्या पाठ्यक्रम E के लिए लड़कों से कितना प्रतिशत अधिक है?

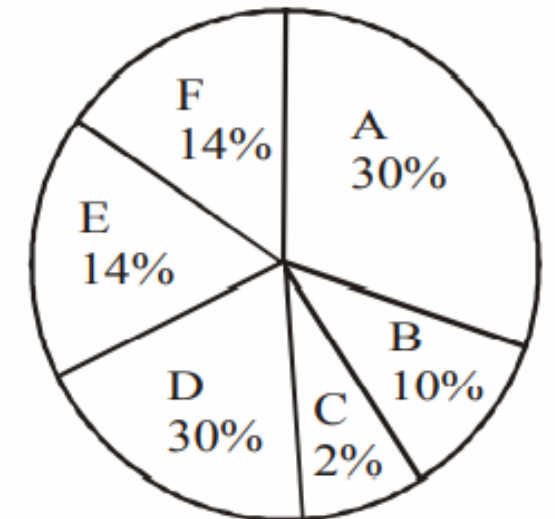
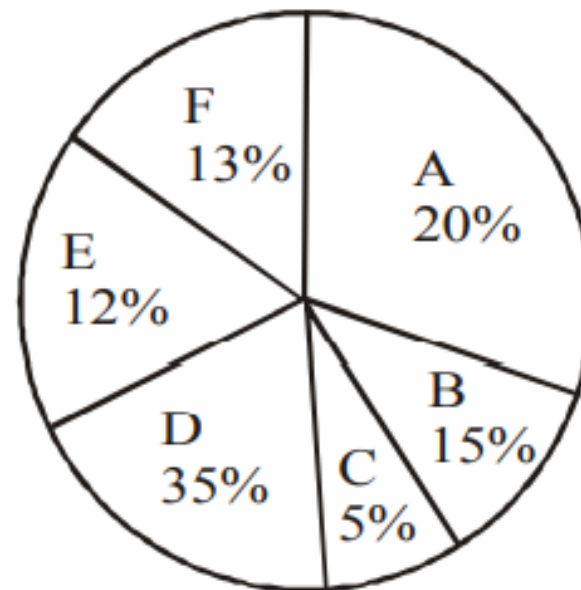
(a) 250 (b) 350 (c) 150 (d) 80 (e) **00:20**e

Total students : 1200 (800 girls + 400 boys)

Percentage in various courses

Total Girls : 800

Percentage of Girls in courses



For which course is the number of boys the minimum?

किस कोर्स के लिए लड़कों की संख्या न्यूनतम है?

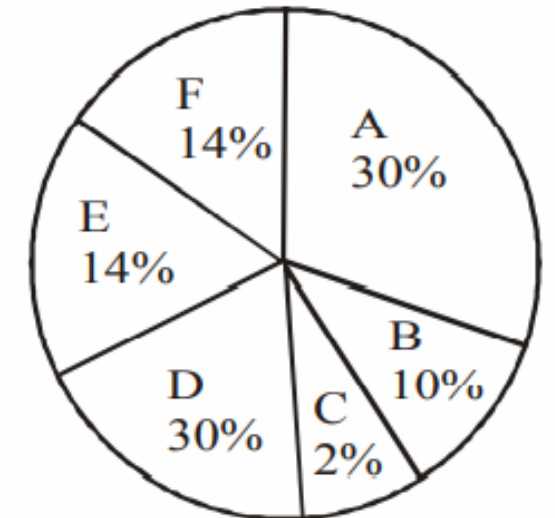
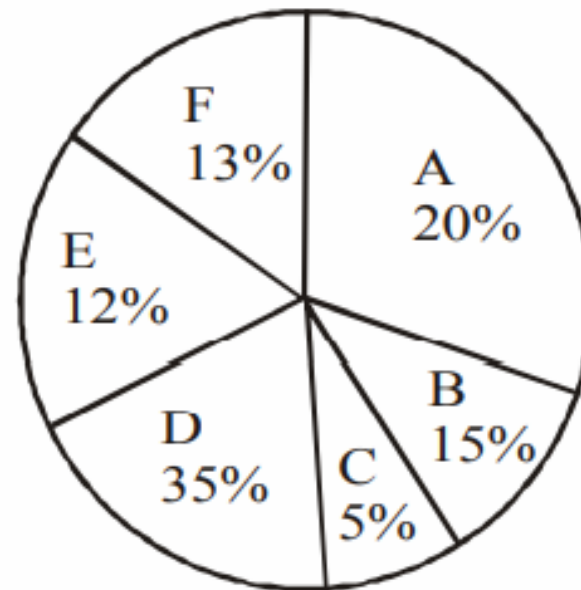
(a) E (b) F (c) C (d) A (e) None **00:20**

Total students : 1200 (800 girls + 400 boys)

Percentage in various courses

Total Girls: 800

Percentage of Girls in courses



How many girls are in course C ?

पाठ्यक्रम C में कितनी लड़कियां हैं?

(a) 44 (b) 16 (c) 40 (d) 160 (e) None of these

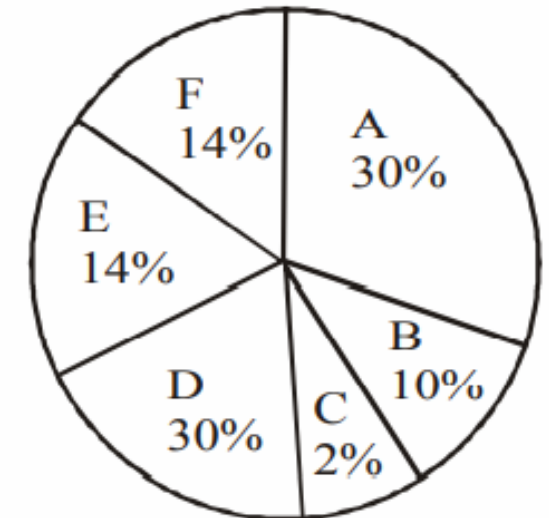
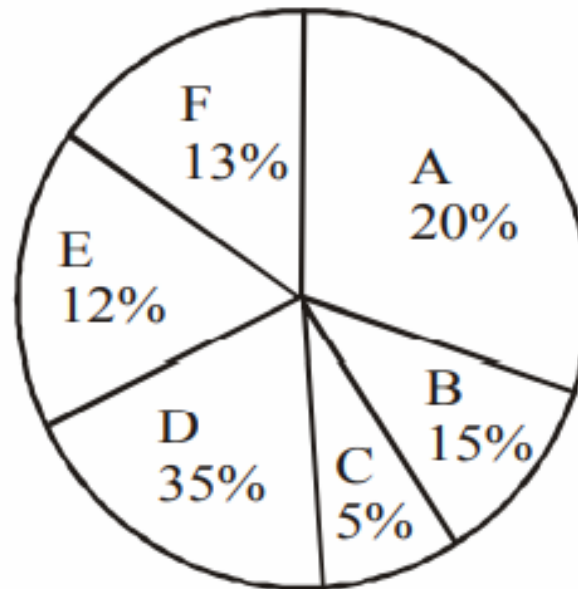


Total students : 1200 (800 girls + 400 boys)

Percentage in various courses

Total Girls : 800

Percentage of Girls in courses



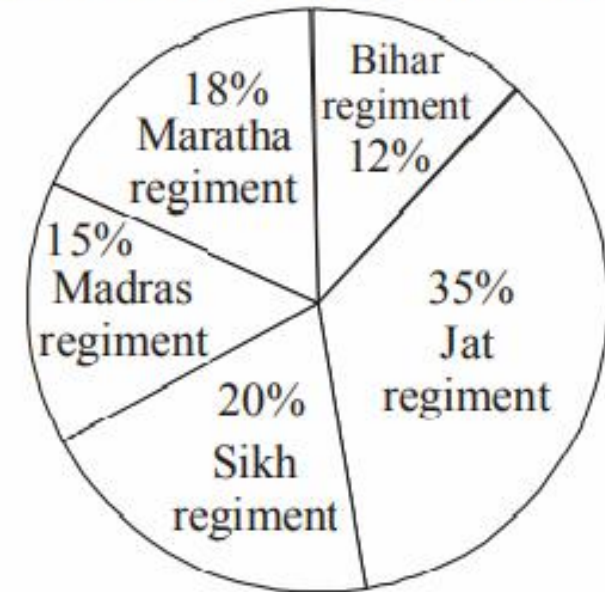
What is the number of Hindu soldiers in Jat regiment?

जाट रेजिमेंट में हिंदू सैनिकों की संख्या कितनी है?

(a) 2600 (b) 2700 (c) 3200 (d) 2800 (e) 2350

00:20

Percentage of various regiments in the Army



Total number of soldiers in the army = 10000

The table shows the ratio of Hindu religion soldiers to soldiers of other religions

Name of regiment	Hindu	Other religions
Jat regiment	4	1
Sikh regiment	3	5
Madras regiment	2	1
Maratha regiment	3	2
Bihar regiment	5	3

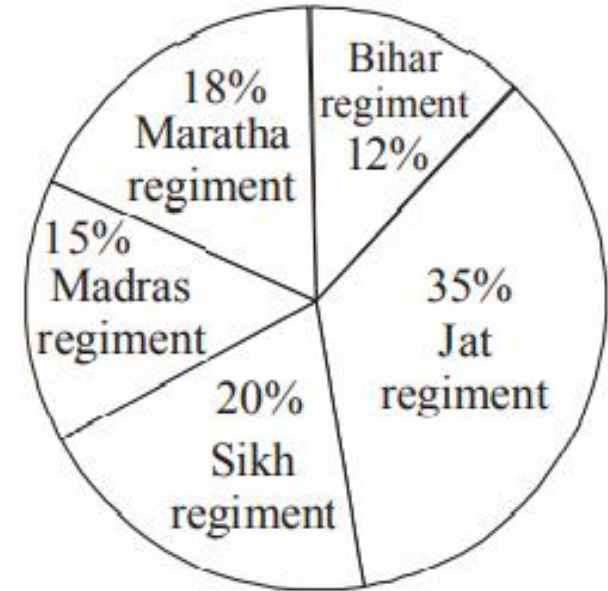
What is the difference between Hindu soldiers in Madras regiment and soldiers of other religions in Bihar regiment?

मद्रास रेजिमेंट में हिंदू सैनिकों और बिहार रेजिमेंट में अन्य धर्मों के सैनिकों के बीच क्या अंतर है?

- (a) 485 (b) 550 (c) 520 (d) 510 (e) 490



Percentage of various regiments in the Army



Total number of soldiers in the army = 10000

The table shows the ratio of Hindu religion soldiers to soldiers of other religions

No. of regiment	Hindu	Other religions
Jat regiment	4	1
Sikh regiment	3	5
Madras regiment	2	1
Maratha regiment	3	2
Bihar regiment	5	3

The number of Hindu soldiers in Sikh regiment is what percent of the number of other soldiers in Maratha regiment?

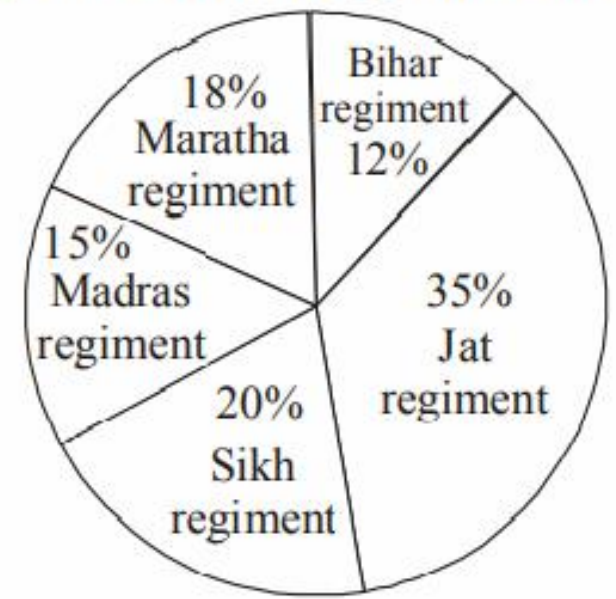
सिख रेजिमेंट में हिंदू सैनिकों की संख्या मराठा रेजिमेंट में अन्य सैनिकों की संख्या का कितना प्रतिशत है?



- (a) 97.12% (b) 99.50%
- (d) 104.16% (e) 25%

The table shows the ratio of Hindu religion soldiers to soldiers of other religions

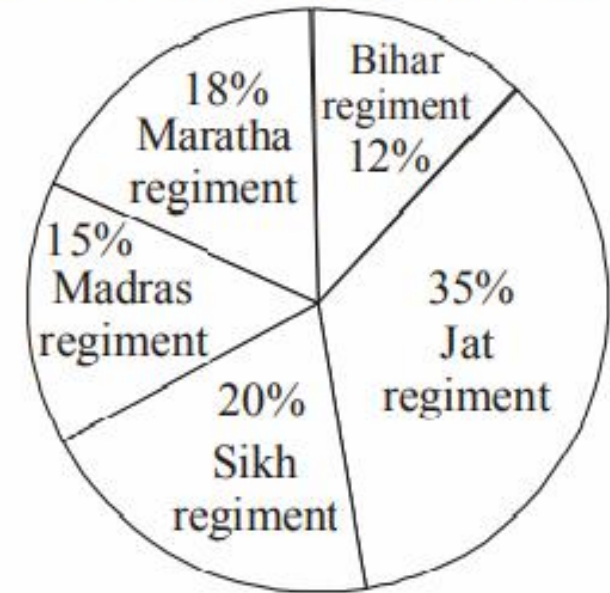
Percentage of various regiments in the Army



Total number of soldiers in the army = 10000

No. of regiment	Hindu	Other religions
Jat regiment	4	1
Sikh regiment	3	5
Madras regiment	2	1
Maratha regiment	3	2
Bihar regiment	5	3

Percentage of various regiments in the Army



Total number of soldiers in the army = 10000

What is the ratio of the number of Hindu soldiers in Bihar regiment to the number of non-Hindu soldiers in Jat regiment?
 बिहार रेजिमेंट में हिंदू सैनिकों की संख्या का जाट रेजिमेंट में गैर-हिंदू सैनिकों की संख्या से अनुपात कितना है?

- (a) 11 : 10 (b) 12 : 11 (c) 13 : 12
 (d) 14 : 13 (e) 15 : 14

00:20

The table shows the ratio of Hindu religion soldiers to soldiers of other religions

Name of regiment	Hindu	Other religions
Jat regiment	4	1
Sikh regiment	3	5
Madras regiment	2	1
Maratha regiment	3	2
Bihar regiment	5	3

