

SSC MTS/HAWALDAR/CHSL



REASONING

LIVE TEST

तैयारी जीत की...

LIVE

08:30 PM





UPCOMING ONLINE BATCHES

May 2022

04 May 2022

05:30 PM to 07:30 PM

BANK ONLINE LIVE CLASS

10:30 AM to 12:30 PM

SSC ONLINE LIVE CLASS

BILINGUAL

11 May 2022

10:30 AM to 12:30 PM

BANK ONLINE LIVE CLASS

01:00 PM to 03:00 PM

SSC ONLINE LIVE CLASS

BILINGUAL

18 May 2022

07:30 PM to 09:30 PM

BANK ONLINE LIVE CLASS

05:30 PM to 07:30 PM

SSC ONLINE LIVE CLASS

BILINGUAL

04:00 PM to 06:00 PM

BANK ONLINE LIVE CLASS

ENGLISH & BENGALI

25 May 2022

03:00 PM to 05:00 PM

BANK ONLINE LIVE CLASS

08:00 AM to 10:00 AM

SSC ONLINE LIVE CLASS

BILINGUAL

05:30 PM to 09:30 PM

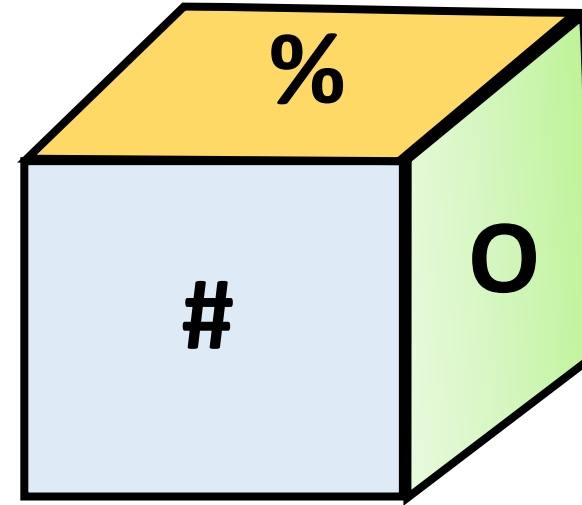
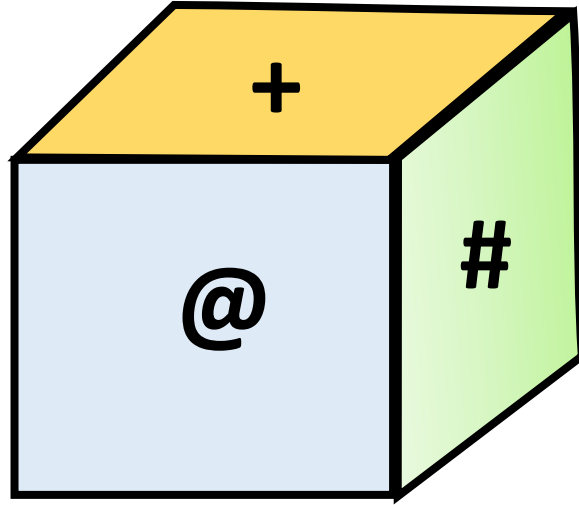
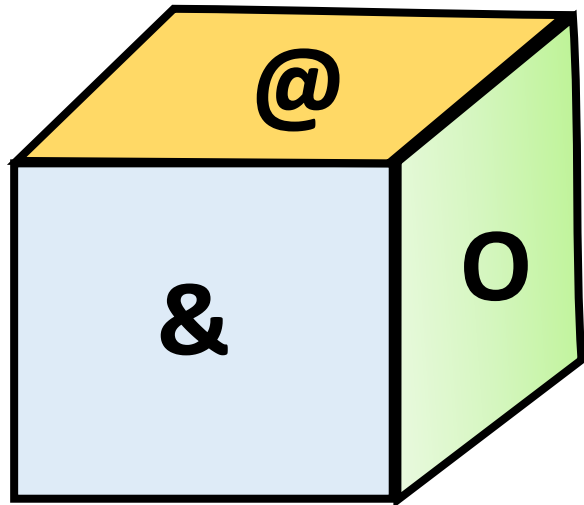
CUET ONLINE LIVE CLASS

BILINGUAL



Three positions of dice are shown. What will appear on the opposite to the face containing O? पासा की तीन स्थितियां दिखाई गई हैं तो ज्ञात कीजिए की 'O' के विपरीत सतह पर क्या होगा?

- (A) # (B) +
(C) % (D) &





SSC MTS/HAWALDAR/CHSL

Live at 08:30 PM



Find the option which should replace (?)



JK : 87 :: RS : ?

- A. 98**
- B. 109**
- C. 110**
- D. 89**



Find the option which should replace (?)

4 : 71 :: 7 : ?

- (A) 49
- (B) 05
- (C) 51
- (D) 52





Find the option which should replace (?)

127, 63, 31, 15, 7, ?

(A) 2

(B) 3

(C) 5

(D) 4





Find the missing one (?)

85 : 20 :: 139 : ?



- (A) 124
- (B) 117
- (C) 180
- (D) 109



Find the option which should replace (?)

5 , 6 , 15 , ? , 89 , 170 , 291

- (A) 40**
- (B) 45**
- (C) 50**
- (D) 55**





Find the missing one (?)

123 : 12 :: 222 : ?

- (A) 52
- (B) 69
- (C) 33
- (D) 25





Find the missing one (?)

392 : 28 :: 722 : ?

- (A) 18
- (B) 28
- (C) 38
- (D) 48





Find the option which should replace (?)

A , G , L , P , S , ?

- (A) X
- (B) U
- (C) Y
- (D) W





Find the missing one (?)

Teacher : Student :: Pontiff : ?
शिक्षक : छात्र :: पुरोहित : ?

- (A) Disciple / शिष्य
- (B) Followers / फोलेर्स
- (C) Priest / पुजारी
- (D) Diety / दैत्य





Find the missing one (?)

Hen : Egg :: Tree : ?
मुर्गी: अंडा :: पेड़:?

- (A) Bark / बार्क
- (B) Seed / बीज
- (C) Leaves / पत्तियां
- (D) Fruits / फल





Find the missing one (?)

6 : 180 :: 10 : ?

- (A) 1000
- (B) 891
- (C) 900
- (D) 910





Find the missing one (?)

XXIV : 48 :: XIV : ?

- (A) 28
- (B) 24
- (C) 14
- (D) 30





Find the missing one (?)

$$600 : 2000 :: ? : 9000$$

- (A) 2700**
- (B) 3600**
- (C) 5400**
- (D) 5600**





Find the missing one (?)

55 : 32 :: 76 : ?

- (A) 14
- (B) 16
- (C) 18
- (D) 20





Find the missing one (?)

14 : 90 :: 26 : ?


- (A) 21
- (B) 31
- (C) 51
- (D) 31





Find the number of triangle (?)

- (A) 28
- (B) 29
- (C) 31
- (D) 30





Find the missing :-

47 : 65 :: 59 : ?

- (A) 95**
- (B) 110**
- (C) 106**
- (D) 118**





Find the option which should replace (?)



6 : 252 :: 5 : ?


- A. 225
- B. 175
- C. 150
- D. 125





Find number of triangle in the given figure ?
दी गई आकृति में त्रिभुज की संख्या ज्ञात कीजिए?

- (A) 40
- (B) 41
- (C) 38
- (D) 25





Statements :

All toys are tasks.

No task is a tree.



Conclusions :

I. No tree is a task.

II. A few tasks are toys.

कथन:

सभी टॉय टास्क हैं।

कोई टास्क ट्री नहीं है।

निष्कर्ष:

कोई ट्री टास्क नहीं है।

कुछ टास्क खिलौने हैं।



Statements :

All toys are tasks.

No task is a tree.

Conclusions :

I. No tree is a task.

II. A few tasks are toys.