



SSC MTS 2022-23



REASONING

SESSION-I

LIVE TEST

WITH TIMER



BASED ON PREVIOUS YEAR QUESTIONS

📶 LIVE | 03:00 PM

BY KULDEEP MAHENDRAS





UPCOMING ONLINE BATCHES

February 2023

08 FEB 2023

03:00 PM to 05:00 PM

SSC ONLINE LIVE CLASS

BILINGUAL

15 FEB 2023

10:30 AM to 12:30 PM

BANK ONLINE LIVE CLASS

BILINGUAL

15 FEB 2023

06:30 PM to 08:30 PM

BANK ONLINE LIVE CLASS

English & Bengali



www.mahendras.org •  7052477777/7052577777

14.6 Computer Based Examination:

Part	Subject	Number of Questions/ Maximum Marks	Time Duration (For all four Parts)
Session-I			45 Minutes (60 Minutes for candidates eligible for scribes as per para 8)
I	Numerical and Mathematical Ability	20/60	
II	Reasoning Ability and Problem Solving	20/60	
Session-II			45 Minutes (60 Minutes for candidates eligible for scribes as per para 8)
I	General Awareness	25/75	
II	English Language and Comprehension	25/75	



SSC MTS 2022-23

LIVE at 3:00 PM

	UR	OBC	SC	ST	EWS	TOTAL	ESM	OH	HH	VH	OTHERS
MTS AGE GROUP 18-25	4115	2505	1051	679	979	9329	979	104	131	119	58
MTS AGE GROUP 18-27	1085	723	358	216	283	2665	222	36	36	32	18
Havaladar in CBIC	201	143	106	29	50	529	53	8	7	0	6
Grand Total	5401	3371	1515	924	1312	12523	1254	148	174	151	82



Bipul vishwa 1 day ago 1 subscribers

HW. Ans Option (2.)23-31 Odd
Difference 6 👍👍👍👍

👍 🗨️ Reply

▼ 🚫 • 1 reply



SK6 1 day ago 13 subscribers

D.... B/w 2 prime no.

👍 1 🗨️ Reply



Suruchi Jha 1 day ago

Hw answer option A thankyou sir 🙏

👍 🗨️ Reply

▼ 🚫 • 1 reply



Surbhi Sinha 1 day ago 5 subscribers

Homework question answer 🙏 option Aaas

👍 🗨️ Reply

▼ 🚫 • 1 reply



Ravi Patel 1 day ago 5 subscribers

D

👍 1 🗨️ Reply





Find the odd :-

- 1. 11 - 17**
- 2. 23 - 31**
- 3. 41 - 47**
- 4. 43 - 59**





Find the missing :-


- 1. 6750**
- 2. 690**
- 3. 1380**
- 4. 660**

7	21	15
49	441	225
98	882	450
140	1302	?



Find the missing :-

- 1. 1**
- 2. 26**
- 3. 39**
- 4. 45**






Find the number of triangles in the given figure.
दिए गए आंकड़े में त्रिकोणों की संख्या ज्ञात कीजिए।



- A.16 or More**
- B.14**
- C.10**
- D.NOT**





SSC MTS 2022-23

LIVE at 3:00 PM

Brother , Human , Men / भाई, मानव, पुरुष



A.

B.

C.

D.



SSC MTS 2022-23

LIVE at 3:00 PM

Find the missing term(?)

20 : 30 :: 110 : ?



(A) 123

(B) 321

(C) 312

(D) 132



Find the missing term(?)

2 , 3 , 9 , 49 , ? , 3841



- (A) 385**
- (B) 685**
- (C) 458**
- (D) 565**



SSC MTS 2022-23

LIVE at 3:00 PM

A , Alphabet , Vowel / A, वर्णमाला, स्वर



A.

B.

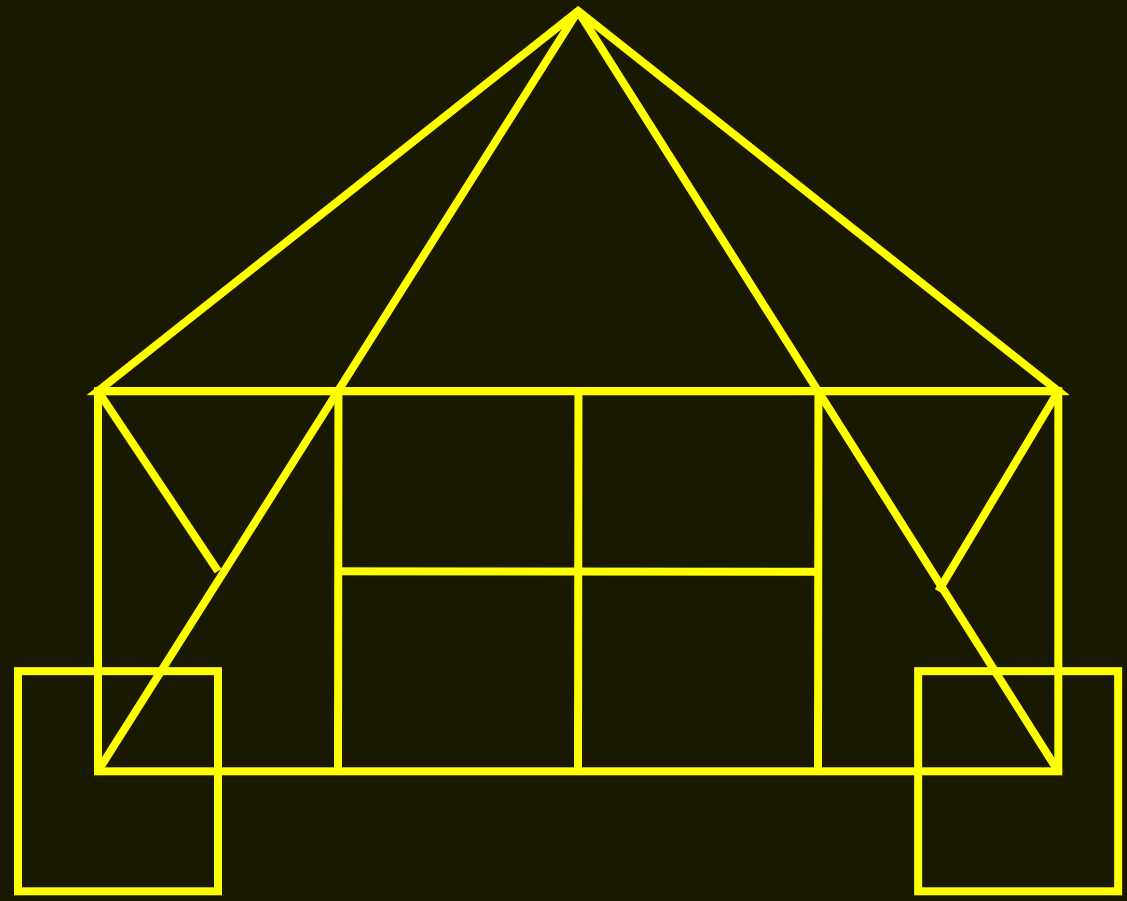
C.

D.



Find the triangle :-

- 1. 21**
- 2. 23**
- 3. 17**
- 4. 19**





Find the missing :-

A , 2 , 3 , B , 5 , 6 , 7 , ? , ?



- 1. C , C**
- 2. 8 , 9**
- 3. C , 9**
- 4. 8 , C**



Find the missing :-

223 : 131 :: ? : ?

- 1. 32 : 17**
- 2. 31 : 12**
- 3. 69 : 31**
- 4. 44 : 11**





Find the missing :-

- 1. 23**
- 2. 25**
- 3. 32**
- 4. 42**

8	4	3	39
9	5	4	30
6	2	3	?





SSC MTS 2022-23

LIVE at 3:00 PM

Graduate , Painter , Teacher / स्नातक, पेंटर, शिक्षक

A.

B.


C.

D.



Find the number of triangles in the given figure.
दिए गए आंकड़े में त्रिकोणों की संख्या ज्ञात कीजिए।

- A.10**
- B.14**
- C.12**
- D.NOT**





Find the missing one (?)

FLOP : 1/3 :: MAXIMUM : ?



(A) 2/7

(B) 3/4

(C) 3/5

(D) 2/4



Find the option which should replace (?)

6	5	4
11	9	7
?	56	33



- (A) 75**
- (B) 95**
- (C) 65**
- (D) 85**