

TOPIC WISE REASONING



**Blood Relation Direction,
Missing Number &
Arithmetical Reasoning**



(SSC MTS, Steno & GD

Previous Year Paper Questions)

ALL COMPETITIVE EXAMS

2:00 PM





Don't Let Your Studies Get Impacted By COVID-19 Pandemic

Stay Home & Study Online With Mahendras Hybrid Model

Features



Offline Classes



Live Interactive Online Classes



Same Faculty



Same Batch



Same Batch Timing



Online Library Facility



Recorded Video



PDFs



Classes In Both Model

CONTACT US:

1800-103-5225

www.mahendras.org





UPCOMING ONLINE BATCHES

October 2021

06 Oct 2021

08:00 AM to 10:00 AM

LIVE PREMIUM GREEN CARD
(BANK-PO & CLERK)

01:00 PM to 03:00 PM

LIVE PREMIUM GREEN CARD
(BANK-PO & CLERK)

03:00 PM to 05:00 PM

LIVE PREMIUM SILVER CARD
(SSC CGL & CHSL)

10:30 AM to 12:30 PM

LIVE CLASS NIELIT CARD
(CCC)

BILINGUAL

13 Oct 2021

10:30 AM to 12:30 PM

LIVE PREMIUM GREEN CARD
(BANK-PO & CLERK)

05:30 PM to 07:30 PM

LIVE PREMIUM GREEN CARD
(BANK-PO & CLERK)

07:30 PM to 09:30 PM

LIVE PREMIUM SILVER CARD
(SSC CGL & CHSL)

BILINGUAL

20 Oct 2021

03:00 PM to 05:00 PM

LIVE PREMIUM GREEN CARD
(BANK-PO & CLERK)

08:00 AM to 10:00 AM

LIVE PREMIUM SILVER CARD
(SSC CGL & CHSL)

01:00 PM to 03:00 PM

LIVE CLASS CTET CARD
(CTET)

BILINGUAL

27 Oct 2021

08:00 AM to 10:00 AM

LIVE PREMIUM GREEN CARD
(BANK-PO & CLERK)

07:30 PM to 09:30 PM

LIVE PREMIUM GREEN CARD
(BANK-PO & CLERK)

10:30 AM to 12:30 PM

LIVE PREMIUM SILVER CARD
(SSC CGL & CHSL)

BILINGUAL





Absolutely Free
For Mahendras Student

SBI Clerk 2021 Mains Batch

Starting Date : **23 Sept, 2021**

Timings: **07:00 AM - 11:15 AM**

FILL THE BELOW ATTACHED FORM NOW !!



S No	Name of Examination	Paper/ Stage	Schedule of Examination
1	Combined Graduate Level Examination-2019	Skill Test	15.09.2021 to 16.09.2021
2	Junior Engineer (Civil, Mechanical, Electrical and Quantity Surveying & Contracts) Examination, 2020	Paper-II	26.09.2021
3	Multi Tasking (Non-Technical) Staff Examination, 2020	Paper-I	05.10.2021 to 20.10.2021
4	Stenographer Grade 'C' and 'D' Examination, 2019	Skill Test	21.10.2021 To 22.10.2021



🌟 PUJA KUNDU 🌟 11 hours ago

THE ANSWER IS "VE7".....THANK YOU SOO MUCH SIR 🙏 FOR THE AMAZING SESSION WITH SUPERB LOGICS 🔥🔥🔥🔥🔥

👍 🗨️ REPLY

▼ [View reply from Mahendras : Online Videos For Govt. Exams](#)



Gunjan Agrawal 10 hours ago

Homework Ans is VE7

Thank you for the Amazing session sir 🙏😊

👍 🗨️ REPLY



Anamika Awasthi 10 hours ago

Homework answer VE7. Wonderful session thanks sir

👍 🗨️ REPLY



VEDANT yaduwanshi 10 hours ago

Ans. VE 7 nice session sir thank you 🙏🙏🙏🙏

👍 🗨️ REPLY



Chhavi Saxena 16 hours ago

Home work answer is option D VE7

Very Nice Session Sir ,Thank you So Much 🙏🙏🙏🙏

👍 🗨️ REPLY



NINJA_____ 16 hours ago

VE7

👍 🗨️ REPLY

▼ [View reply from Mahendras : On](#)



Kaushal116 16 hours ago

Last que Ans -D
Nice session 🙏 Thank you sir 🙏

👍 🗨️ REPLY

▶ [View reply from Mahendras : Online Videos For](#)



nikita Chauhan 15 hours ago

Homework ANS-----
Option DDD
Thank you sir 😊🙏

👍 1 🗨️ REPLY

▶ [View reply from Mahendras : Online Videos For](#)




Abhi Vaghela 16 hours ago

NICE SESSION SIR ❤️

👍 🗨️ REPLY

▶ [View reply from Mahendras : Online Videos For](#)



Sania S 16 hours ago

Shandaar session sir 🙏🙏
option D---VE7🔥🔥🔥🔥

👍 🗨️ REPLY

▶ [View reply from Mahendras : Online Videos For](#)



Roshni Khandelwal 11 hours ago

Answer is D Part
Very nice session sir thank you

👍 🗨️ REPLY

▶ [View reply from Mahendras : Online Videos For](#)



Juthika Das 16 hours ago

Ans is ---Option--D
Thank you sir 🙏

👍 🗨️ REPLY

▶ [View reply from Mahendras : Online Videos For](#)



QUARANTINED NOOB 16 hours ago

Ans - VE7, THANK YOU SIR JI🔥🔥🔥

👍 🗨️ REPLY

▶ [View reply from Mahendras : Online Videos For](#)



Masum Idki 😊 12 hours ago

VE7 option d is the correct ans
Very nice session 🙏🙏

👍 🗨️ REPLY

▶ [View reply from Mahendras : Online Videos For](#)



Abhishek Pandey 16 hours ago

Homework answer is option -(D) VE7
Nice session sir



Miss. Anita MBM 999 16 hours ago

हर खानदान में एक कोई होता है जो गरीबी रेखा को तोड़ कर आगे चला जाता है भगवान करे दोस्तों आपके खानदान में शुरूआत आप सभी करें

👍 1 🗨️ REPLY

▼ [View reply from Mahendras : Online Videos For Govt. Exams](#)



RASHMI SONI RASHMI SONI 16 hours ago

ANSWER,,, D

THANK YOU SIR 😊

AAPKE PAAS HI COMMENT NAHI JA RAHE,,, MERE SAATH AISA AAJ 2 BAAR HUA H 😞😞😞😞😞😞

👍 🗨️ REPLY

▼ [View reply from Mahendras : Online Videos For Govt. Exams](#)



Nadeem 14 hours ago (edited)

🍀🍀 HomeWork Answer 🍀🍀

🍀 Option D :- VE7 🍀

🍀🍀 Shandar Session Sir ❤️😊🌸🍀

👍 🗨️ REPLY

▼ [View reply from Mahendras : Online Videos For Govt. Exams](#)



MISTY MISTY 📖👍 16 hours ago

Right answer is option dd (VE7)

👍👍

👍 🗨️ REPLY

▼ [View reply from Mahendras : Online Videos For Govt. Exams](#)



DEEKSHA SHARMA 15 hours ago

Homework answer is D

👍 🗨️ REPLY



Abhishek Rathore 6 hours ago

Option D is correct



REPLY




bablu sharma 15 hours ago

Option d correct answer sir ji



REPLY

▼ [View reply from Mahendras : Online](#)



Miss. Anita MBM 999 16 hours ago

Nicw



1



REPLY

▼ [View reply from Mahendras : Online](#)



Hrithik_____ 16 hours ago

Option D EV7



REPLY

▼ [View reply from Mahendras : Online](#)



Ankit Vish 16 hours ago

Option D----- VE7



1



REPLY

▼ [View reply from Mahendras : Online](#)



Bhaskar Nath 10 hours ago

Hi sir



REPLY



ravi kumar 16 hours ago

VE7 ~~XXXXXXXXXX~~



REPLY

▼ [View reply from Mahendras : Online Video](#)



Kapil Bhagat 16 hours ago

VE7



REPLY




puspranjan singh 16 hours ago

Ddd



REPLY

▼ [View reply from Mahendras : Online Video](#)



Preeti 16 hours ago

VE7



REPLY

▼ [View reply from Mahendras : Online Video](#)

Find the missing ONE (?)

$ZA_5, Y_4B, XC_6, W_3D, \underline{\hspace{2cm}}$

A. E_7V

B. V_2E

C. VE_5

D. VE_7



Shyam walks 7 km. in the east. Then he turns to his right and moves 20 km, then he turns to his left and moves 5 km, then he turns to his left and moves 11 km. and then again he turned to his left and moves 12 km. Now in which direction is he from his starting point and how far ?

श्याम 7 किमी पूर्व में जाता है। फिर वह अपने दाहिने ओर मुड़ता है और 20 किमी चलता है, फिर वह अपने बाएं ओर मुड़ता है और 5 किमी चलता है, फिर वह अपने बाएं ओर मुड़ता है और 11 किमी चलता है और फिर वह दुबारा अपने बाएं ओर मुड़ता है और 12 किमी की दूरी चलता है। अब वह प्रारंभिक बिंदु से किस दिशा में और कितनी दूर है?

- (1) 9 km South
- (2) 64 km East
- (3) 20 km west
- (4) 7 km south
- (5) None of these



Mr. Khan moves towards South-East a distance of 7 km, then he moves towards West and travels a distance of 14 km. From here he moves towards North-West a distance of 7 km and finally he moves a distance of 4 km towards east. How far is he now from the starting point?

श्रीमान खान दक्षिण-पूर्व की तरफ 7 किमी की दूरी पर चले जाते हैं, फिर वह पश्चिम की ओर बढ़ते हैं और 14 किमी की दूरी तय करते हैं। यहां से वह उत्तर-पश्चिम की तरफ 7 किमी की दूरी तय करते हैं और अंततः वह पूर्व की ओर 4 किमी की दूरी तय करता है। अब वह शुरुआती बिंदु से कितनी दूरी पर है?

- (1) 3 km
- (2) 4 km
- (3) 10 km
- (4) 11 km
- (5) None of these



Find the option which should replace (?)

$$16 : 124 :: 11 : ?$$

(A) 88

(B) 86

(C) 24

(D) 22



Find the option which should replace (?)

$$324 + 289 = 35$$

$$441 + 484 = 43$$

$$625 + 400 = 45$$

$$256 + 729 = ?$$



(A) 29

(B) 43

(C) 40

(D) 37

Find the option which should replace (?)

$$1 + 4 = 51$$

$$8 + 2 = 06$$

$$3 + 6 = 72$$

$$9 + 7 = ?$$

(A) 37

(B) 49

(C) 32

(D) 23



The total of the ages of Amar, Akbar and Anthony is 80 years.
What was the total of their ages three years ago ?

अमर, अकबर और एंथोनी की कुल आयु 80 वर्ष है। तीन वर्ष पूर्व
उनकी आयु का योग कितना था?

- A. 71 years
- B. 72 years
- C. 74 years
- D. 77 years



If you write down all the numbers from 1 to 100, then how many times do you write 3 ?

यदि आप 1 से 100 तक की सभी संख्याएँ लिख दें, तो आप 3 को कितनी बार लिखेंगे?

- A.11
- B.18
- C.20
- D.21



We have 16 columns and 18 rows of students in a playground and distance between the two students is 1.5metres. The length of the row of students is

हमारे पास एक खेल के मैदान में छात्रों के 16 स्तंभ और 18 पंक्तियां हैं और दो छात्रों के बीच की दूरी 1.5 मीटर है। छात्रों की पंक्ति की लंबाई है-

(A) 20.5 m

(B) 22.5 m

(C) 22 m

(D) 25.5 m



A school has 2100 students. For every 20 students there is one class monitor. The number of monitors in the school is

एक स्कूल में 2100 छात्र हैं। प्रत्येक 20 छात्रों के लिए एक कक्षा का मॉनीटर होता है। स्कूल में मॉनीटर की संख्या क्या है-

(A) 100

(C) 80

(B) 75

(D) 85



In an examination, a student scores 4 marks for every correct answer and loses 1 mark for every wrong answer. If he attempts in all 60 question and secures 130 marks, the number of question he attempts correctly, is

एक परीक्षा में, एक छात्र प्रत्येक सही उत्तर के लिए 4 अंक स्कोर करता है और हर गलत उत्तर के लिए 1 अंक खो देता है। यदि वह सभी 60 प्रश्नों में प्रयास करता है और 130 अंकों को सुरक्षित करता है, तो उस के सही प्रश्नों की संख्या क्या होगी-

(A) 35

(B) 38

(C) 40

(D) 42



Anuj is 5 years older to Barkha and 7 years younger to Chandan, while Barkha and Dheeraj are twins. How many years older is Chandan to Dheeraj ?

अनुज बरखा से 5 साल बड़ा है और चंदन से 7 साल छोटा हैं, जबकि बरखा और धीरज जुड़वा हैं। चंदन से धीरज कितने साल बड़ा हैं?

(A) 10

(B) 18

(C) 14

(D) 12



A#B	means	A is the father of B. (A, B का पिता है)
A%B	means	A is the sister of B. (A, B की बहन है)
A@B	means	A is the wife of B. (A, B की पत्नी है)
A*B	means	A is the brother of B. (A, B का भाई है)
A&B	means	A is the son of B. (A B का पुत्र है)

Which of the following means A is the grandfather of R?

निम्न में से किसका अर्थ है A,R का दादा है ?

- (1) F&A@J#K%R
- (2) U*R%H&A%K
- (3) A@H#J*U%R
- (4) A@H#K*M#R
- (5) A#B*C#R%H

