



*Mahendra's*

**RRB NTPC CBT 2 / GROUP D**

**REASONING**

**CHRISTMAS SPECIAL  
CLASS**



**07:30 PM**





# Don't Let Your Studies Get Impacted By COVID-19 Pandemic

Stay Home & Study Online With Mahendras Hybrid Model

## Features



Offline Classes



Live Interactive Online Classes



Same Faculty



Same Batch



Same Batch Timing



Online Library Facility



Recorded Video



PDFs



Classes In Both Model

CONTACT US:

1800-103-5225

[www.mahendras.org](http://www.mahendras.org)





# UPCOMING ONLINE BATCHES

## December 2021

01 Dec 2021

08:00 AM to 10:00 AM

**LIVE PREMIUM GREEN CARD**  
(BANK-PO & CLERK)

05:30 PM to 07:30 PM

**LIVE PREMIUM GREEN CARD**  
(BANK-PO & CLERK)

01:00 PM to 03:00 PM

**LIVE PREMIUM SILVER CARD**  
(SSC CGL & CHSL)

**BILINGUAL**

08 Dec 2021

10:30 AM to 12:30 PM

**LIVE PREMIUM GREEN CARD**  
(BANK-PO & CLERK)

03:00 PM to 05:00 PM

**LIVE PREMIUM GREEN CARD**  
(BANK-PO & CLERK)

08:00 AM to 10:00 AM

**LIVE PREMIUM SILVER CARD**  
(SSC CGL & CHSL)

**BILINGUAL**

15 Dec 2021

01:00 PM to 03:00 PM

**LIVE PREMIUM GREEN CARD**  
(BANK-PO & CLERK)

10:30 AM to 12:30 PM

**LIVE PREMIUM SILVER CARD**  
(SSC CGL & CHSL)

**BILINGUAL**

22 Dec 2021

08:00 AM to 10:00 AM

**LIVE PREMIUM GREEN CARD**  
(BANK-PO & CLERK)

07:30 PM to 09:30 PM

**LIVE PREMIUM SILVER CARD**  
(SSC CGL & CHSL)

**BILINGUAL**

29 Dec 2021

10:30 AM to 12:30 PM

**LIVE PREMIUM GREEN CARD**  
(BANK-PO & CLERK)

07:30 PM to 09:30 PM

**LIVE PREMIUM GREEN CARD**  
(BANK-PO & CLERK)

03:00 PM to 05:00 PM

**LIVE PREMIUM SILVER CARD**  
(SSC CGL & CHSL)

**BILINGUAL**



Find the missing ONE (?)

**VWA : 451 :: ? : ?**

- (A) ABC : 125**
- (B) ZAS : 819**
- (C) KLM : 234**
- (D) PQC : 683**



Find the option which should replace (?)

$$6 : 2 :: 8 : ?$$

- (A) 1
- (B) 3
- (C) 5
- (D) 7



Find the option which should replace (?)

$$17 : 4 :: 37 : ?$$

- (A) 4
- (B) 6
- (C) 12
- (D) 7



Find the missing ONE (?)

- (A) 10
- (B) 14
- (C) 8
- (D) 2

<b>10</b>	
<b>8</b>	<b>13</b>
<b>16</b>	<b>6</b>
<b>4</b>	<b>19</b>
<b>22</b>	<b>?</b>



Find the option which should replace (?)

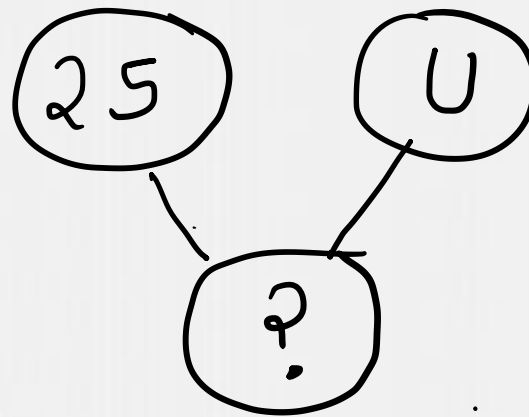
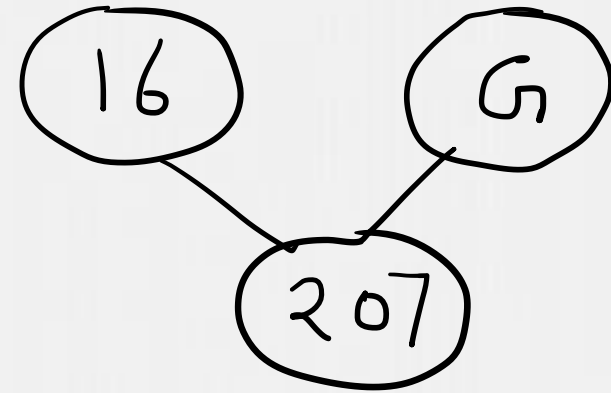
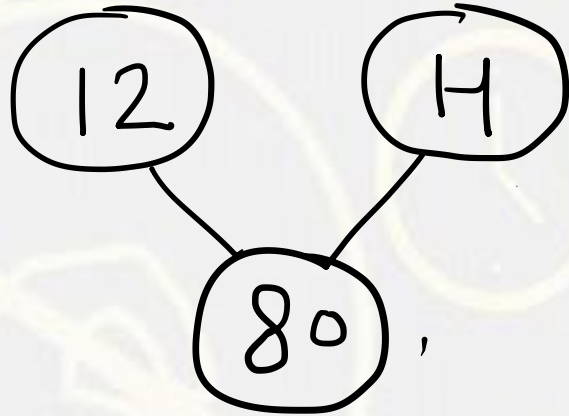
**GO : AA :: NO : ?**

- (A) EE
- (B) OO
- (C) AA
- (D) UU





Find the option which should replace (?)



- (A) 184
- (B) 160
- (C) 120
- (D) 250

Find the missing term(?)

**PEMOURD : RNVRFHF :: FENDRAK : ?**

- (A) IVMGZIN**
- (B) IMVGIZN**
- (C) HMVGZIO**
- (D) IMVGZIP**



Find the missing term(?)

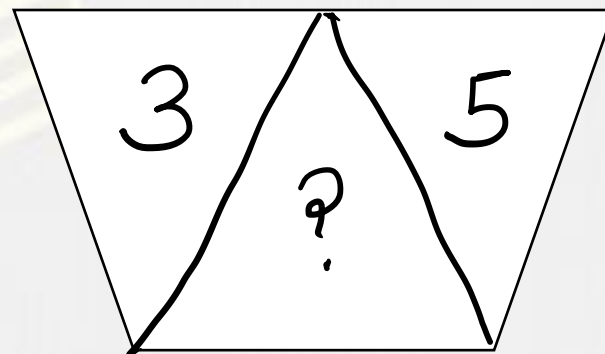
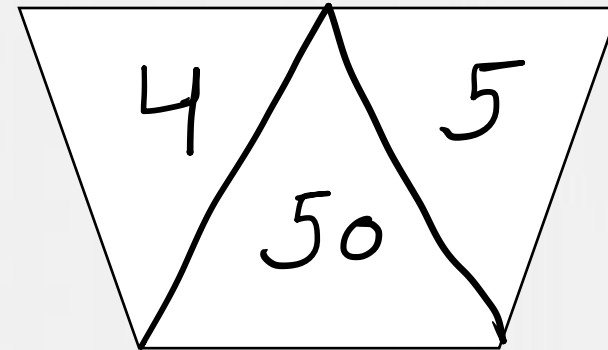

**2 , 3 , 9 , 49 , ? , 3841**

- (A) 385**
- (B) 685**
- (C) 458**
- (D) 565**

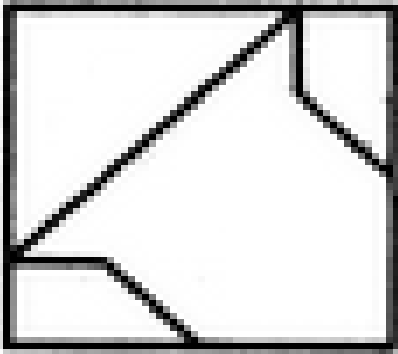


Find the option which should replace (?)

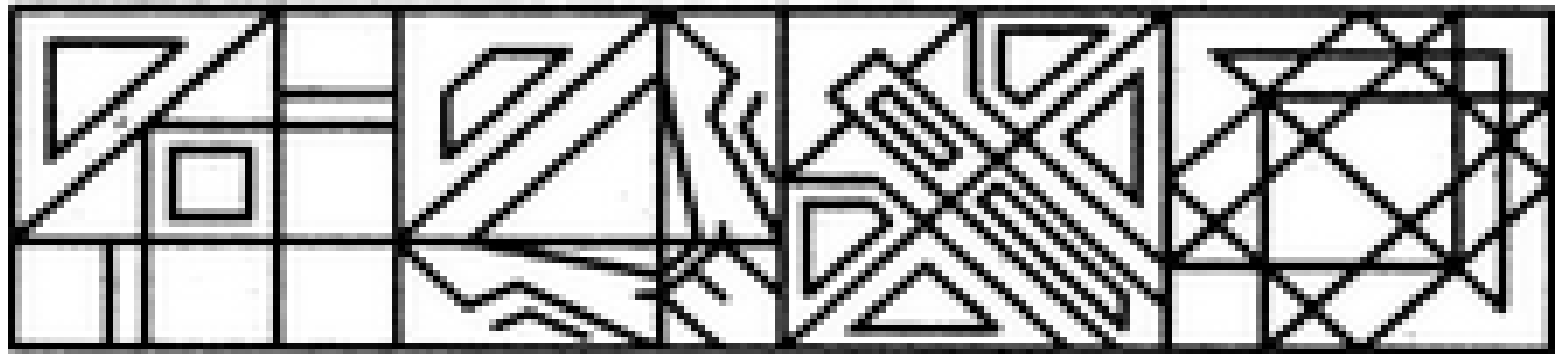
- (A) 34
- (B) 40
- (C) 49
- (D) 53



Find out the alternative figure which contains figure (X) as its part.



(X)



(1)

(2)

(3)

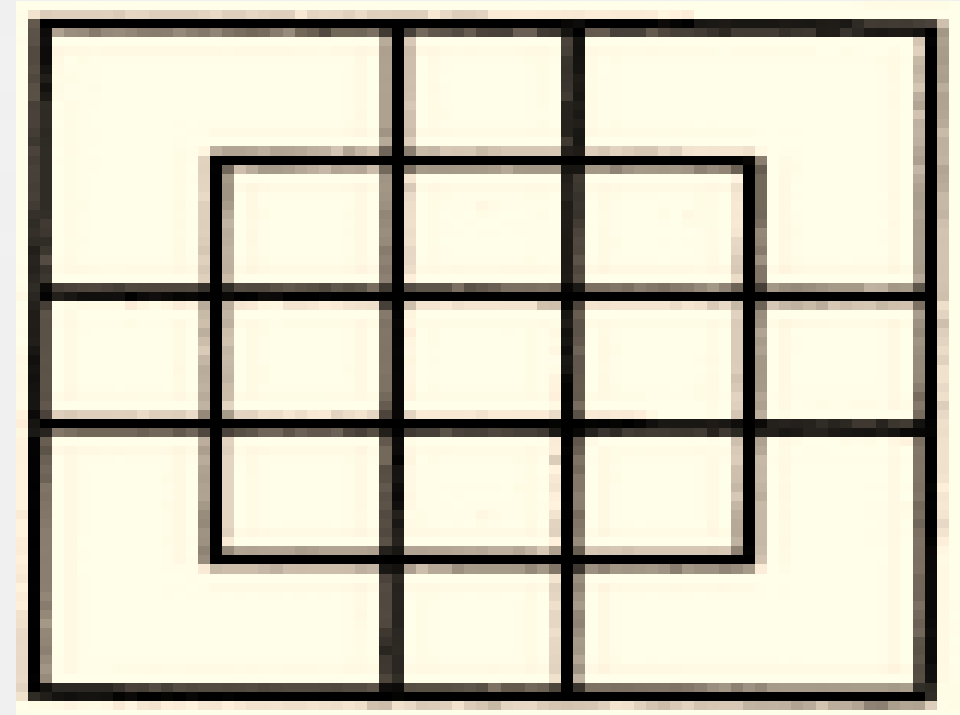
(4)

- A.1
- B.2
- C.3
- D.4



Find number of squares in figure?

- (A) 18
- (B) 19
- (C) 25
- (D) 27



Arrange in meaningful order :

1. Orange
2. Indigo
3. Red
4. Blue
5. Green
6. Yellow
7. Violet

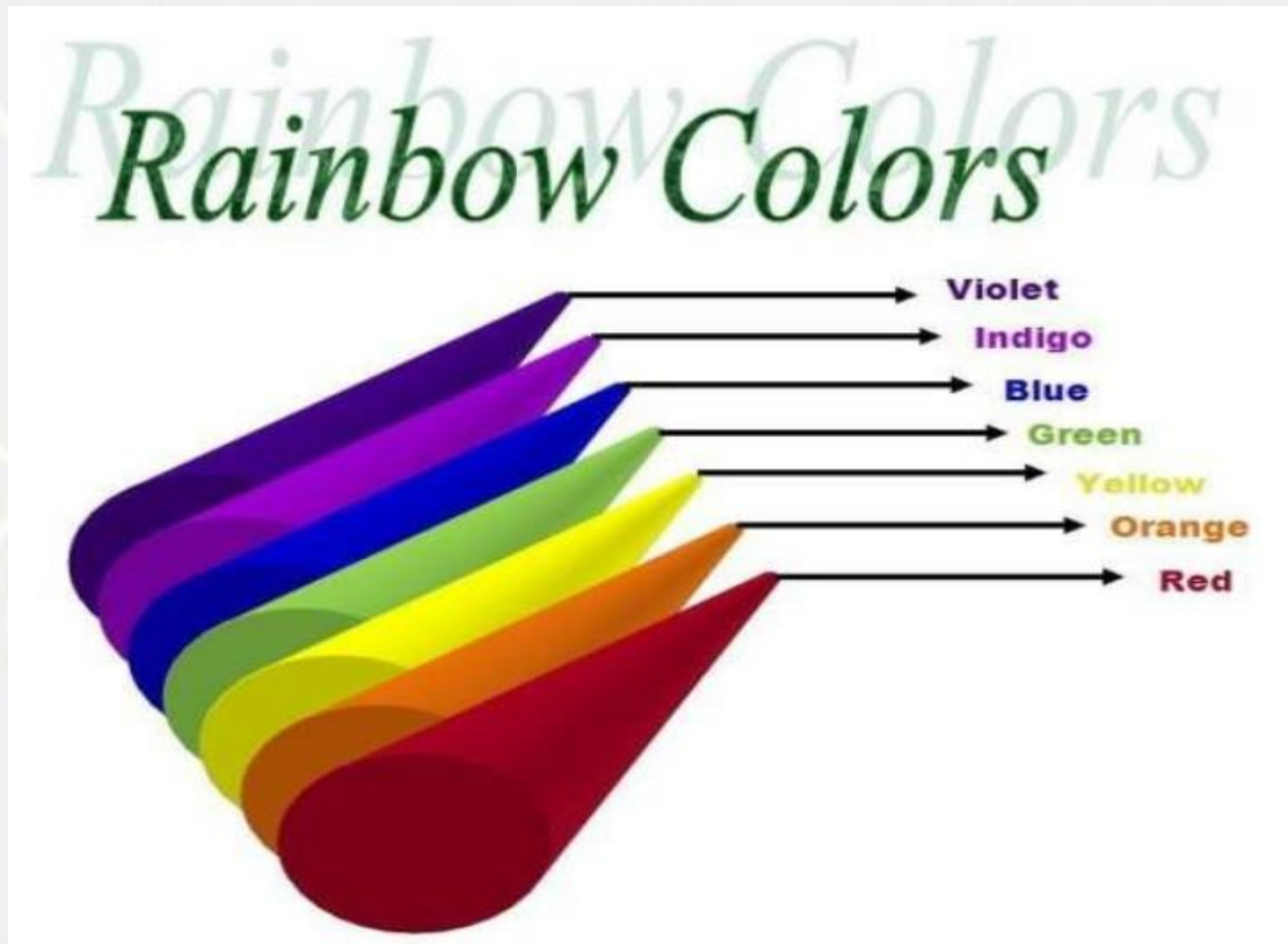
- A. 5,4,2,1,3,6,7
- B. 2,4,1,3,6,5,7
- C. 7,1,2,3,4,5,6
- D. 2,1,6,5,3,4



Arrange in meaningful order :

1. Orange
2. Indigo
3. Red
4. Blue
5. Green
6. Yellow
7. Violet

- A. 5,4,2,1,3,6,7
- B. 2,4,1,3,6,5,7
- C. 7,2,4,5,6,1,3
- D. 2,1,6,5,3,4,7





**Statement :-**

**The decrease in rainfall is the cause of crop failure ,” says the meteorologist.**

**Conclusion :-**

**Rain is necessary for the crop.**

**Irrigation is only dependent on rainfall.**

**बयान :- मौसम विज्ञानी का कहना है कि बारिश में कमी फसल की विफलता का कारण है।**

**निष्कर्ष: - फसल के लिए बारिश जरूरी है।**

**सिंचाई केवल वर्षा पर निर्भर है।**



Find the missing term(?)

**RODE : 23 :: LANE : ?**

- (A) 16
- (B) 17
- (C) 22
- (D) 20



**Which number will replace the question mark ?**

<b>C</b>	<b>E</b>	<b>P</b>
<b>A</b>	<b>D</b>	<b>J</b>
<b>F</b>	<b>C</b>	<b>R</b>
<b>A</b>	<b>H</b>	<b>?</b>



**(A) R**

**(B) M**

**(C) P**

**(D) L**

**In Which year 1872 calender will be repated ?**

- (A) 1900**
- (B) 2016**
- (C) 1912**
- (D) 1928**



**G is the mother of B , C is the son of G, D is the brother of J , J is the daughter of B. Who is the grandmother of J?**

**G, B की माँ है, C, G का पुत्र है, D, J का भाई है, J, B की पुत्री है, J की दादी कौन है?**

- (A) B**
- (B) C**
- (C) G**
- (D) D**



Find the odd one (?)

- (A) Sikkim**
- (B) Manipur**
- (C) Bihar**
- (D) Chennai**

