



RRB GROUP D 2022



REASONING

MEMORY BASED PAPER DISCUSSION

25th AUG - ALL SHIFTS

LIVE  **08:30 PM**





UPCOMING ONLINE BATCHES

August 2022

03 AUG 2022

03:00 PM to 05:00 PM

BANK ONLINE LIVE CLASS

01:00 PM to 03:00 PM

SSC ONLINE LIVE CLASS

BILINGUAL

10 AUG 2022

05:30 PM to 07:30 PM

BANK ONLINE LIVE CLASS

08:00 AM to 10:00 AM

SSC ONLINE LIVE CLASS

BILINGUAL

17 AUG 2022

08:00 AM to 10:00 AM

BANK ONLINE LIVE CLASS

05:30 PM to 07:30 PM

SSC ONLINE LIVE CLASS

BILINGUAL

24 AUG 2022

07:30 PM to 09:30 PM

BANK ONLINE LIVE CLASS

10:30 AM to 12:30 PM

SSC ONLINE LIVE CLASS

BILINGUAL

31 AUG 2022

10:30 AM to 12:30 PM

BANK ONLINE LIVE CLASS

07:30 PM to 09:30 PM

SSC ONLINE LIVE CLASS

BILINGUAL

10 AUG 2022

02:00 PM to 04:00 PM

BANK ONLINE LIVE CLASS

BENGALI+ENGLISH

31 AUG 2022

06:30 PM to 08:30 PM

BANK ONLINE LIVE CLASS

BENGALI+ENGLISH



www.mahendras.org



7052477777/7052577777



🍁 PUJA KUNDU 🍁 ----- 17 hours ago 8 subscribers

The answer is --136....PQ($16/2=8*17$).....THANK YOU SOO MUCH SIR FOR THE AMAZING SESSION 🙏🙏🙏

👍 🗨️ REPLY ▶️

▼ 🚫 • 1 REPLY



Chhavi Saxena 17 hours ago

Home work answer is option B (136)

Logic $16 * 17 = 272 / 2 = 136$

Very Nice session sir Thank you so much dear Sir 🙏🙏🙏🙏🙏🙏🙏🙏

👍 🗨️ REPLY ▶️

▼ 🚫 • 1 REPLY



Vishnu Gupta 17 hours ago 10 subscribers

136 is the right ans

Very nice session sir thank you sir love you 🥰 sir 🙏❤️

👍 🗨️ REPLY ▶️

▼ 🚫 • 1 REPLY



Ankit Vish 17 hours ago 276 subscribers

Answer. BBB

Logic $16 * 17 = 272 \div 2 = 136$

Lajwab session sir 🙏🙏

👍 🗨️ REPLY ▶️

▼ 🚫 • 1 REPLY



DEEKSHA SHARMA 17 hours ago

Home work answer is option b
Very nice session sir

REPLY

▼ • 1 REPLY



GUDIYA SHARMA 5 hours ago **4 subscribers**

16*17 di vi by2

REPLY

khushbu 17 hours ago



BBB---- ($16*17=272/2=136$)

REPLY

▼ • 1 REPLY



Bidya Behera 😊 16 hours ago

H.w

136

REPLY

▼ • 1 REPLY



M@RÇOS_____ 17 hours ago **29 subscribers**

136

REPLY

▼ • 1 REPLY



Bhavya thakur_____ 17 hours ago **27 subscribers**

Bb

REPLY

▼ • 1 REPLY

Find the option which should replace (?)

JP : 80 :: PQ : ?

- (A) 98**
- (B) 136**
- (C) 248**
- (D) 150**



Find the option which should replace (?)



$$6 + 6 + 6 = N$$

$$7 + 7 + 7 = E$$

$$8 + 8 + 8 = R$$

$$0 + 0 + 0 = ?$$

A. A

B. E

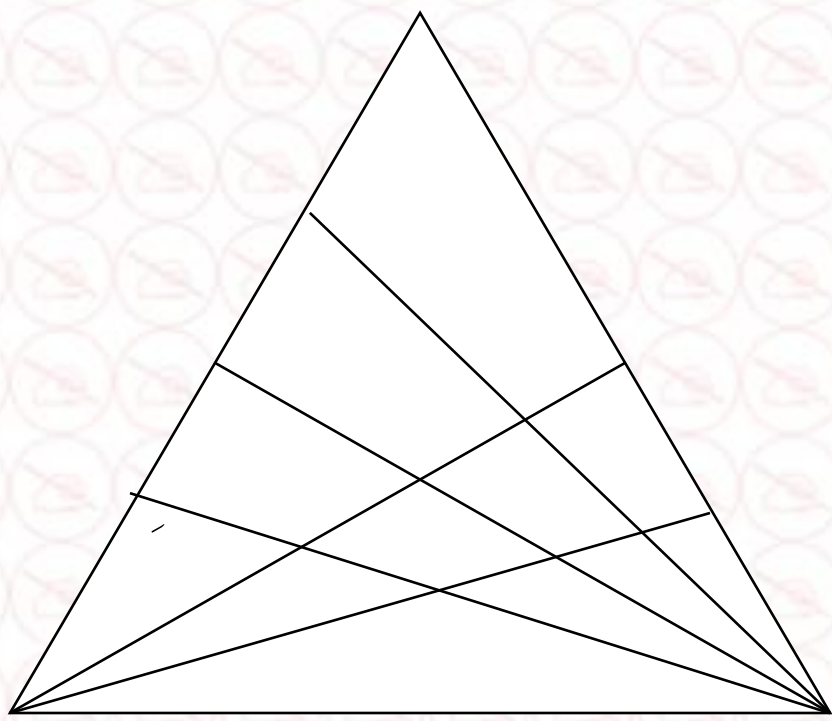
C. I

D. O

20

Find the number of triangle (?)

- (A) 42
- (B) 64
- (C) 60
- (D) 70



Find the option which should replace (?)

Border : Country :: ? : ?

सीमा : देश :: ? : ?

A. Pen : Cap / पुस्तक : आवरण

B. Book : Cover / पेन : कैप

C. Handle : Shade / हैंडल : शेड

D. Frame : Picture / फ्रेम : चित्र

Find the option which should replace (?)

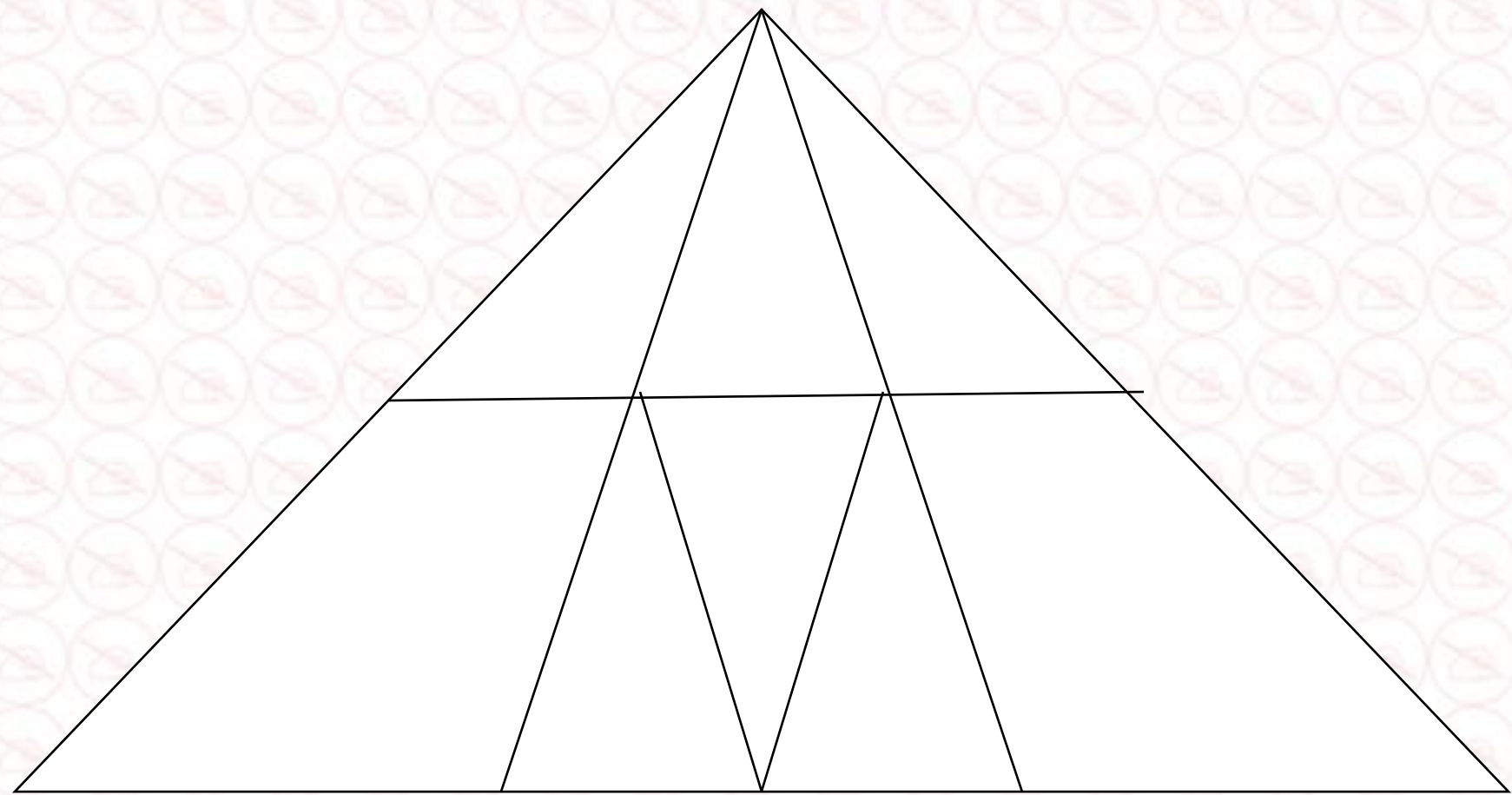
56 : 41 :: 94 : ?

- A. 49**
- B. 53**
- C. 60**
- D. 89**

20

Find the number of triangle (?)

- (A) 10
- (B) 11
- (C) 15
- (D) 30



Find the option which should replace (?)

KFG : IEE :: DDLJ : ?

- A. EERI**
- B. AAI**
- C. AAIEI**
- D. AIEI**



20

Find the option which should replace (?)

MASTER = 6

FREEDOM = 25

HERO = ?

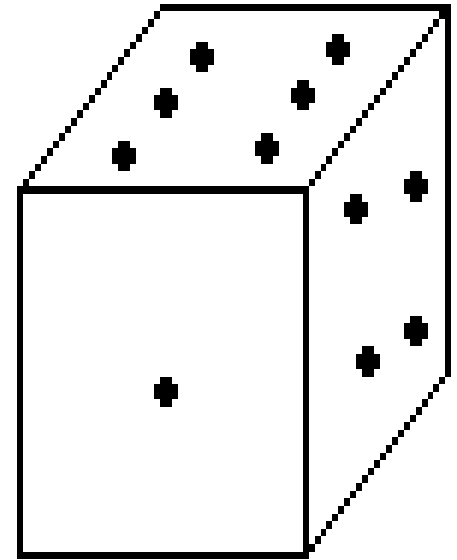
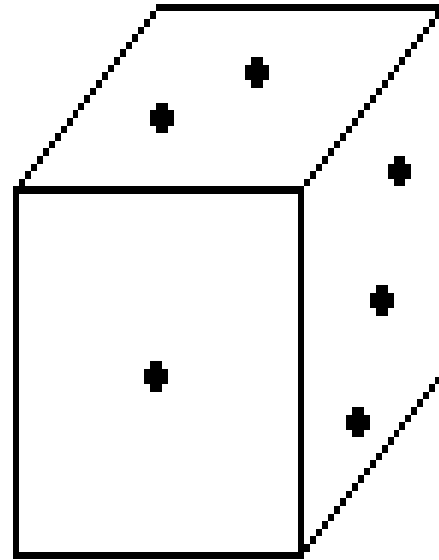
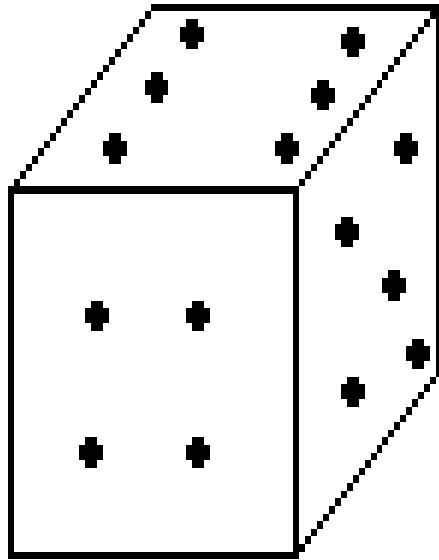
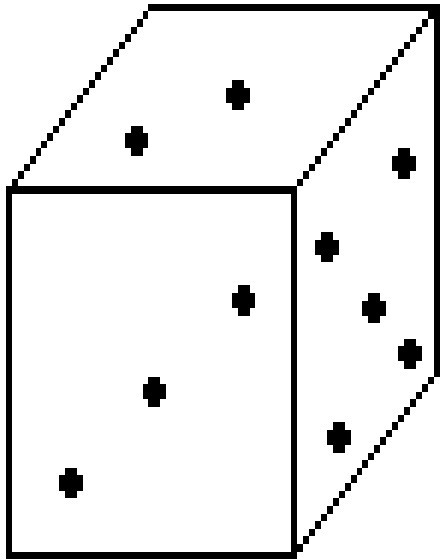
A. 10

B. 15

C. 20

D. 25

How many points will be on the face opposite to in face which contains 2 points?



A.1

B.6

C.3

D.4



Find the option which should replace (?)



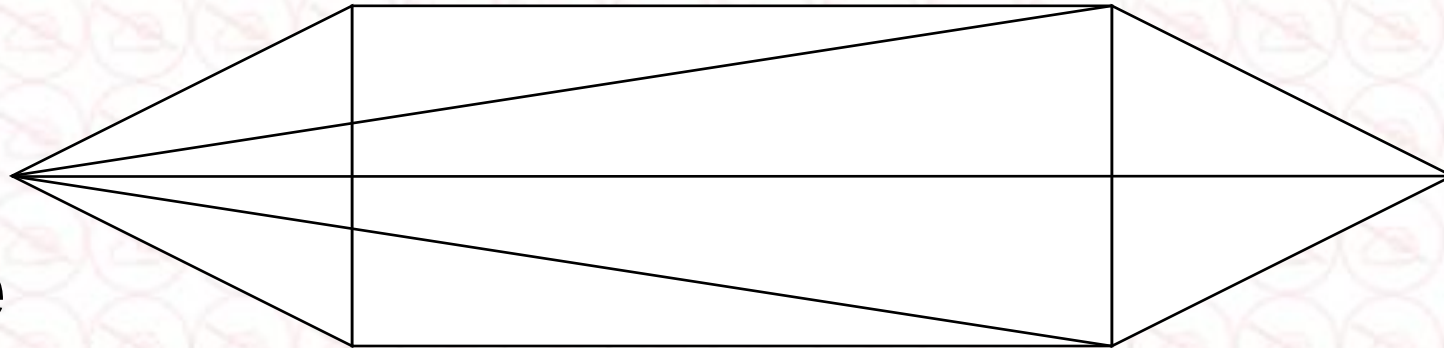
23, 28, 38, 49, 62, ?

- (A) 70**
- (B) 77**
- (C) 85**
- (D) 75**

Find number of triangle in the given figure ?

दी गई आकृति में त्रिभुज की संख्या ज्ञात कीजिए?

- (A) 11
- (B) 14
- (C) 18
- (D) 20 or more



If 'a' means ' \div ', 'b' means '+', 'c' means '-' and 'd' means ' \times ' then

36 b 13 c 7 d 8 a 2 b 14 = ?



- (1) 36
- (2) 35
- (3) 46
- (4) 37

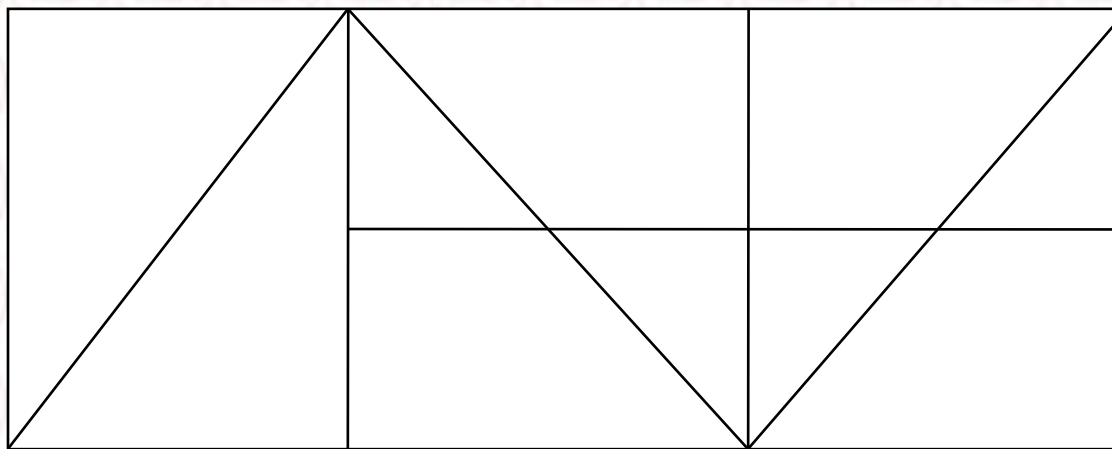
In Which year 1272 calender will be repated ?

- (A) 1300**
- (B) 2016**
- (C) 1312**
- (D) 1328**



Find the number of triangle (?)

- (A) 13
- (B) 14
- (C) 15
- (D) 16



Find the option which should replace (?)



DIG : 25

CUT : 49

KICK : ?

A. 43

B. 39

C. 41

D. 34

Find the option which should replace (?)



SIT : 8

TOY : 10

VIP : ?

A. 11

B. 15

C. 16

D. 7

Find the ODD option (?)

- A. 12 , 23 , 9**
- B. 21 , 7 , 16**
- C. 25 , 6 , 12**
- D. 13 , 12 , 19**



20