



# MISSION SSC 2023



**CGL • CHSL • MTS • CPO**

**REASONING**

**LIVE TEST**  
**SSC MTS SPECIAL**

**WITH TIMER** 

**BASED ON PREVIOUS YEAR QUESTIONS**

**BY KULDEEP MAHENDRAS**




 **LIVE** | **05:30 PM**



# MISSION SSC 2023

**LIVE at 5:30 PM**

Selection Examination, Phase-XI, 2023	Post	Paper-I (CBE)*	24/Feb/2023 (Friday)	17/Mar/2023 (Friday)	May-Jun, 2023
Combined Graduate Level Examination, 2023		Tier-I (CBE)*	01/Apr/2023 (Saturday)	01/May/2023 (Monday)	Jun-Jul, 2023
Combined Secondary Level Examination, 2023	Higher (10+2)	Tier-I (CBE)*	09/May/2023 (Tuesday)	08/Jun/2023 (Thursday)	Jul-Aug, 2023
Multi Tasking (Non-Technical) Staff, and Havaldar (CBIC & CBN) Examination-2023		Tier-I (CBE)*	14/Jun/2023 (Wednesday)	14/Jul/2023 (Friday)	Aug-Sep, 2023
Sub-Inspector in Delhi Police and Central Armed Police Forces Examination, 2023		Tier-I (CBE)*	20/Jul/2023 (Thursday)	13/Aug/2023 (Sunday)	Oct/2023
Junior Engineer (Civil, Mechanical, Electrical & Quantity Surveying & Contracts) Examination, 2023		Paper-I (CBE)*	26/Jul/2023 (Wednesday)	16/Aug/2023 (Wednesday)	Oct/2023
Stenographer Grade 'C' & 'D' Examination, 2023		CBE*	02/Aug/2023 (Wednesday)	23/Aug/2023 (Wednesday)	Oct-Nov, 2023




Višhñù Güptå 10 hours ago

Opt- B is the right ans very super duper nice session sir thank you sir ❤️🙏



Reply



CHHAVI SAXENA 100 100 12 hours ago

Home work answer is option B ....place value sum 26



Reply




Tamanna Gahlot 12 hours ago

Option b - PVF



Reply




Zikra Yasmeen 8 hours ago

Option B

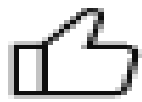


Reply




Aishwaryarani Tripathy 8 hours ago

Ans is option B



1




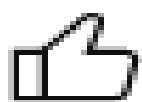
Reply

Share & like!




megastarr 8 hours ago

B

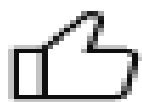


Reply



Surbhi Sinha 8 hours ago

Bbbbbbbbbb 😊



Reply




# MISSION SSC 2023

LIVE at 5:30 PM

## Find the missing term(?)

# ALU : YNE :: JDT : ?



- ~~(A) PVG~~
- ~~(B) PVF~~
- ~~(C) QVE~~
- ~~(D) PWF~~

1	12	21
A	L	U
1	1	1
Y	N	E
25	14	5



**Find the missing :-**

**Vitamin A : Retinol :: Vitamin D : ?**

**विटामिन ए: रेटिनाॅल :: विटामिन डी:?**



- (A) Ascorbic acid / एस्कॉर्बिक अम्ल**
- (B) Calciferol / कैल्सिफैरोल**
- (C) Tocopherol / टोकोफैरोल**
- (D) Phytonadione / फाइटोनाडियन**



# MISSION SSC 2023


**LIVE at 5:30 PM**

Find the missing :-

- (A) 2
- (B) 3**
- (C) 4
- (D) 5

18	24	32
12	14	16
3	3	4
<b>72</b>	112	128

Handwritten calculations:

$$\frac{6}{18 \times 12} = 72$$


Handwritten notes around the clock:  $3 \times 16 = 128$

$$\frac{8}{24 \times 14} = 112$$



# MISSION SSC 2023

LIVE at 5:30 PM

Find the missing :-

- (A) 4
- (B) 5
- (C) 6
- (D) 7

8	6	4
3	?	7
14	14	18

$$(8 \times 3) - 10 = 14$$


$$(4 \times 20) - 10 = 18$$

$$(6 \times 4) - 10 = 14$$





Find the missing :-



(A) 20

(B) 30

(C) 40

(D) 50

3	5	6	10
2	4	3	2
1	2	1	2
6	40	18	?

40



# MISSION SSC 2023

LIVE at 5:30 PM

Find the missing :-

- (A) 16
- (B) 12
- (C) 28**
- (D) 13

5	4	3
8	7	1
6	2	9
38	15	?

Handwritten annotations: A large bracket on the left side of the grid spans the first three rows. A large bracket on the right side of the grid spans the first three rows. A large bracket at the bottom right spans the last row and the third column. The number 28 is written next to the question mark in the bottom-right cell and is circled.





Find the missing :-

(A) 3

(B) 4

**(C) 5**

(D) 6

<del>3</del>	<del>4</del>	<del>2</del>	<del>6</del>
<b>? 5</b>	<del>2</del>	<del>5</del>	<del>3</del>
<del>4</del>	<del>2</del>	<del>2</del>	<del>7</del>



= 15

= **15**

= 15



# MISSION SSC 2023

LIVE at 5:30 PM

Find the missing :-

(A) 20

(B) 21

(C) 22

(D) 24

3	6 +	4	18
2	5 +	8	21
3	1 +	7	?

Handwritten annotations: An 'X' above the first row and another 'X' below the second and third rows. A curved arrow connects the first and third rows. A circle around the number 22 is at the bottom right.



22



# MISSION SSC 2023

LIVE at 5:30 PM

Find the missing :-

- (A) 6
- (B) 0
- (C) 9
- (D) 4

	9	8	7
→ ⊗	4	5	6
	20	15	?

$(9-4) \times 4 = 20$

$(8-5) \times 3 = 15$

$(7-6) \times 6 = 6$



# MISSION SSC 2023

LIVE at 5:30 PM

Find the missing :-

- (A) 125
- (B) 120**
- (C) 100
- (D) 140

51	65	?
06	15	20
08	04	05
03	05	20



120

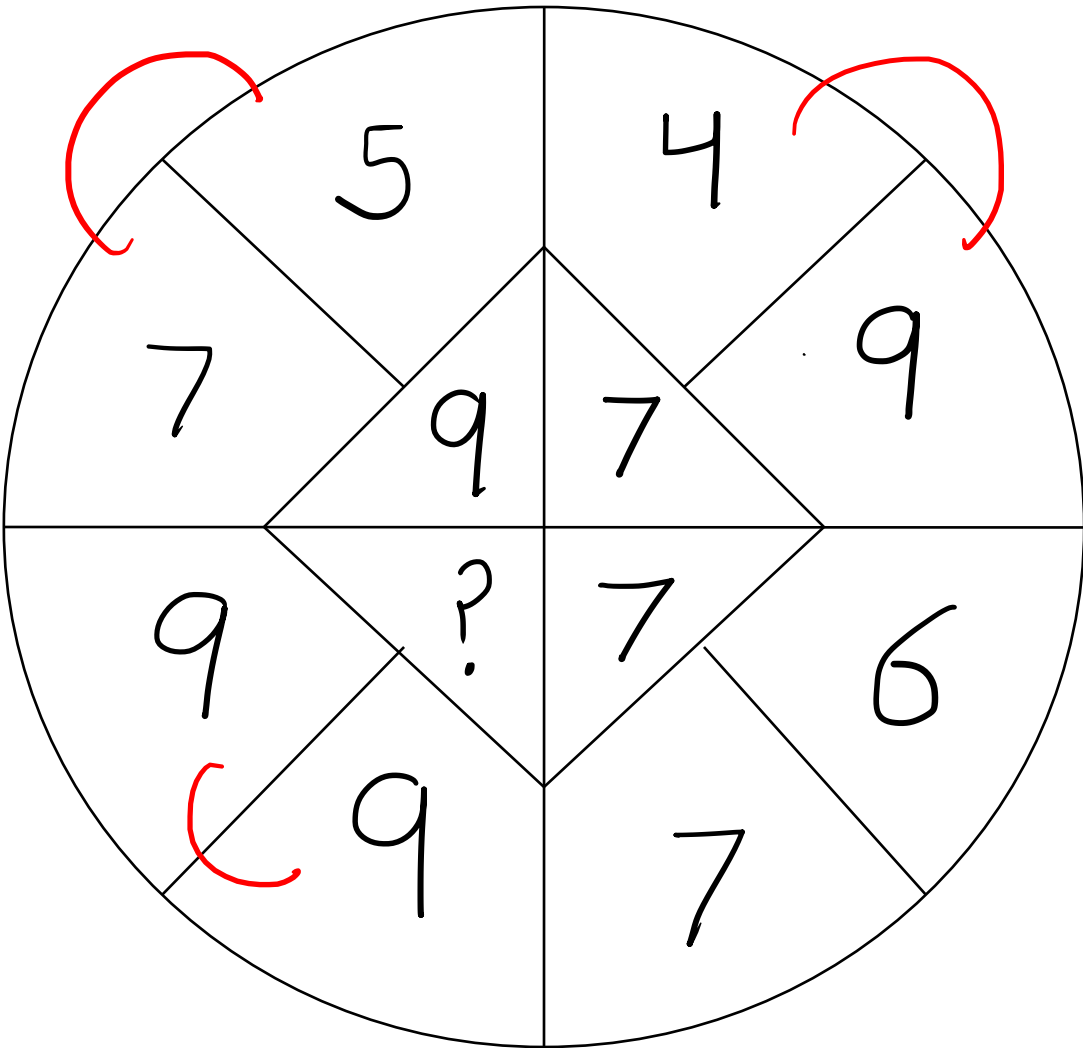


# MISSION SSC 2023

LIVE at 5:30 PM

Find the missing :-

- ~~(A) 9~~
- (B) 7
- (C) 8
- (D) 12



$7 + 5 = 12$   
 $\downarrow$   
 $3^2 \rightarrow 9$

$9 + 4 = 13$   
  
 $\rightarrow 16$   
 $\downarrow$   
 $9$

$9 + 9 = 18$   
 $81 - 9^2$   
 $\downarrow$   
 $9$



Find the option which should replace (?)

$$\begin{array}{cccc} (6^2 - 1) & (11^2 + 1) & (12^2 - 1) & (17^2 + 1) \\ 35 : 122 :: 143 : ? & & & 290 \end{array}$$

*Handwritten annotations: A bracket under 35 and 122 is labeled '+5'. A bracket under 143 and 290 is labeled '+5'. The number 290 is circled.*



(A) 216

(B) 289

(C) 290

(D) 225





Find the option which should replace (?)



**75 : 24 :: 63 : ?**

(A) 25

(B) 26

**(C) 27**

(D) 30

$$7^2 - 5^2$$

$$49 - 25 = 24$$

---

$$6^2 - 3^2$$

$$36 - 9 = 27$$



Arrange the given words in the sequence in which they occur in the dictionary.

1. Decollete
2. Deseccrate
3. Decorous
4. Desipicable
5. Destitute



A. 13245

B. ~~15243~~

C. ~~32451~~

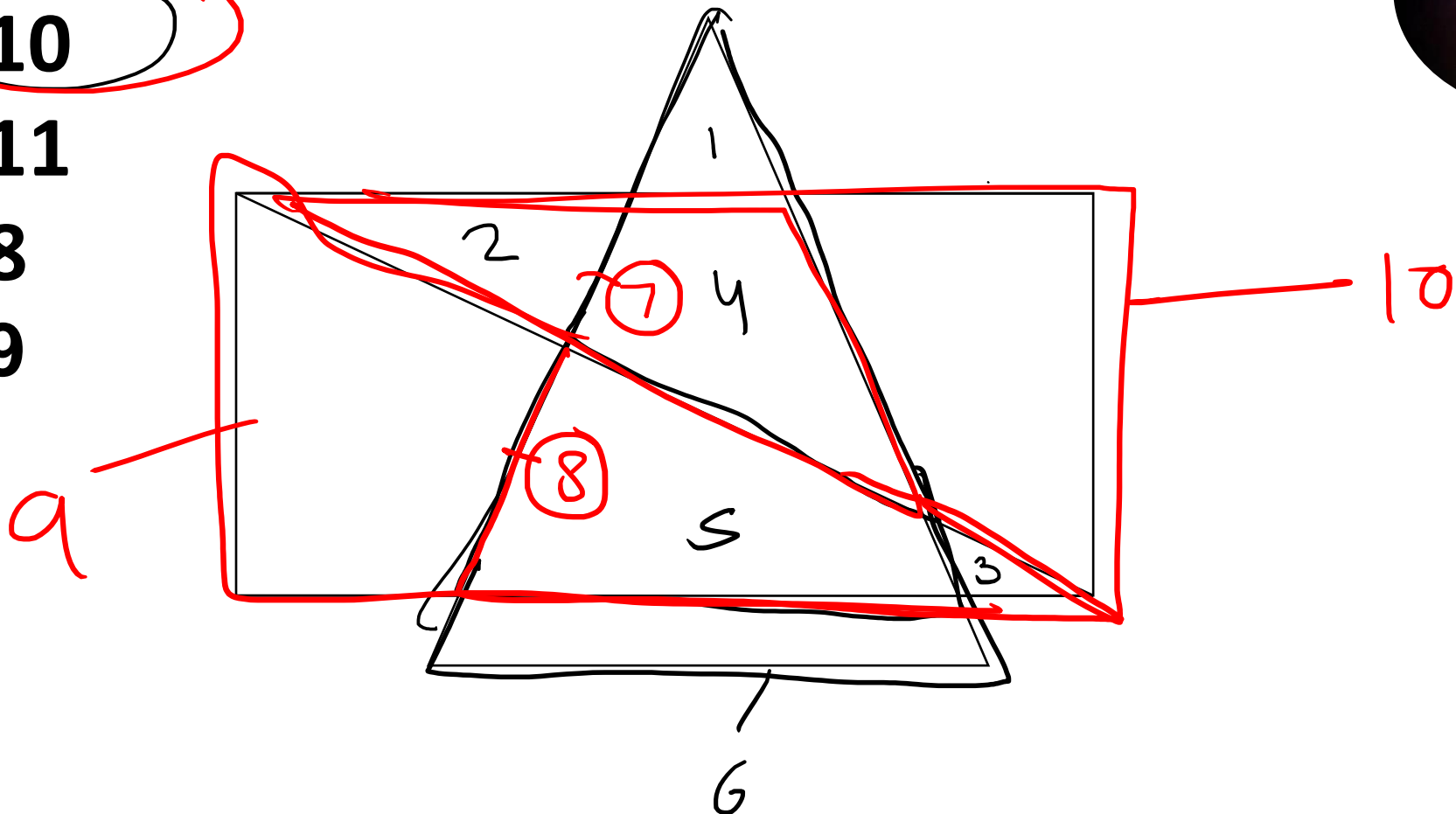
D. ~~45231~~



**Find the triangle :-**



- 1. **10**
- 2. 11
- 3. 8
- 4. 9





Find the missing :-

$$200 : 25 :: 300 : ?$$

Handwritten annotations: An arrow labeled 'x8' points from 25 to 200. Another arrow labeled 'x8' points from the question mark to the handwritten answer '37.5', which is circled.



(A) 30

(B) 37.5

(C) 32.5

(D) 30.25