



UP PET MOCK TEST



REASONING

30 DAYS

महाभ्युत्थान

DAY-08



LIVE | 06:30 PM

By Kuldeep Mahendras



UPCOMING ONLINE BATCHES

September 2022

21 SEP 2022

10:30 AM to 12:30 PM

BANK ONLINE LIVE CLASS

03:00 PM to 05:00 PM

SSC ONLINE LIVE CLASS

BILINGUAL

28 SEP 2022

07:30 PM to 09:30 PM

BANK ONLINE LIVE CLASS

08:00 AM to 10:00 AM

SSC ONLINE LIVE CLASS

BILINGUAL

28 SEP 2022

04:00 PM to 06:00 PM

BANK ONLINE LIVE CLASS

BENGALI+ENGLISH



www.mahendras.org



7052477777/7052577777



Surbhi Sinha 1 day ago

Option eeeeeee,,3:35   



REPLY



▼ 1 REPLY



Rahul Vishwakarma 1 day ago

This is upsssc pet class?



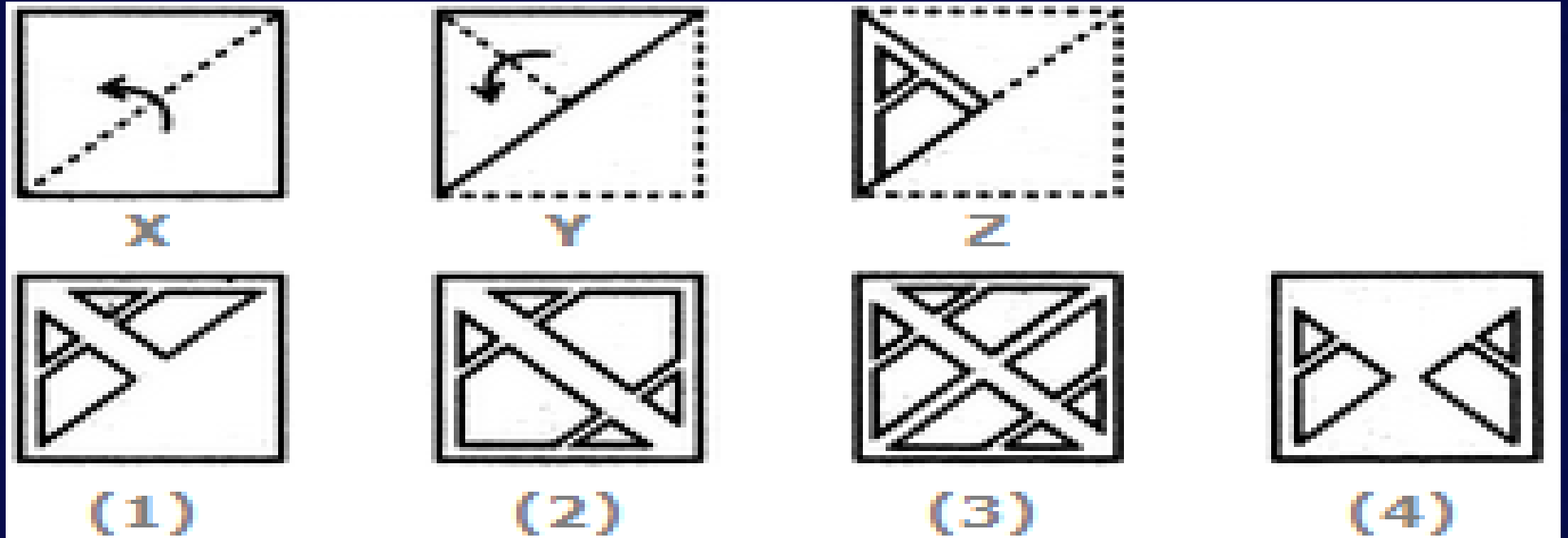
REPLY



▼ 1 REPLY



Choose a figure which would most closely resemble the unfolded form of Figure (Z)



- A.1
- B.2
- C.3
- D.4





Find the missing :-

7 : 559 :: ? : ?

1. 11 : 786

2. 9 : 593

3. 3 : 35

4. 5 : 89





In a certain code language POND is written as RSTL, then how would HEAR be written in same code language?/

यदि किसी सांकेतिक भाषा में POND को RSTL, लिखा जाये, तो उसी सांकेतिक भाषा में HEAR को क्या लिखा जायेगा?

- A. JIHD**
- B. KLPM**
- C. JIGZ**
- D. JIGX**





In a certain code language POND is written as RSTL, then how would HEAR be written in same code language?/

यदि किसी सांकेतिक भाषा में POND को RSTL, लिखा जाये, तो उसी सांकेतिक भाषा में HEAR को क्या लिखा जायेगा?

- A. JIHD**
- B. KLPM**
- C. JIGZ**
- D. JIGX**





If $A = 2$, $M = 26$, $Z = 52$ then what would be the value of $BET = ?$

यदि $A=2$, $M=26$, $Z=52$ तो BET का मान क्या होगा?

A. 54

B. 52

C. 51

D. 55





Find the missing :-

8, 15, 29, 57, 113, ?

A. 227

B. 223

C. 225

D. 224





Find the missing :-

ACE, GIK, ?, SUW, YAC

- A. MPQ**
- B. MOQ**
- C. MOP**
- D. MPQ**





Find the missing :-

10, 100, 200, 310, ?

A. 400

B. 410

C. 420

D. 430





Find the missing :-

4/12/95/, 1/1/96, 29/1/96, ?

A. 24/3/96

B. 26/2/96

C. 26/3/96

D. 27/3/96





Find the missing :-

p q - p p q q - - - p - q q q r r r

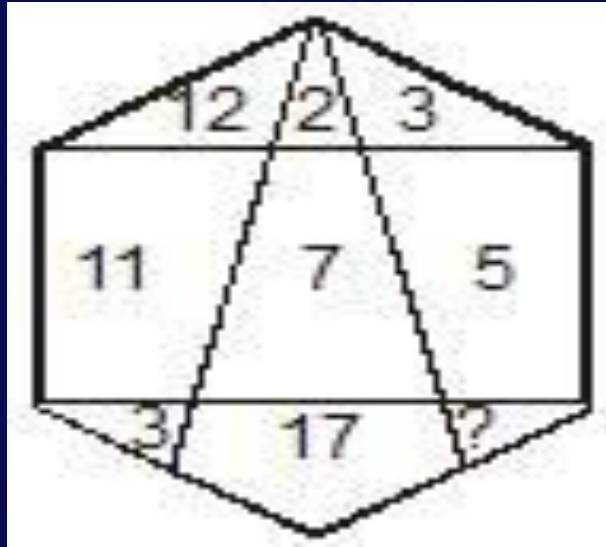
- A. rrrpp
- B. rqrpq
- C. rqrpp
- D. rrpqp





Find the missing :-

- A. 18
- B. 16
- C. 15
- D. 17





Find the missing :-

A. 25

B. 27

C. 24

D. 26

41	31	29
?	71	19
89	55	109





Find the option which should replace (?)



$$5+6 : 16 :: 6+6 : ?$$

- (A) 30
- (B) 27
- (C) 45
- (D) 50



Find the option which should replace (?)

25 : 64 :: 35 : ?

- (A) 64
- (B) 81
- (C) 72
- (D) 100





Find the option which should replace (?)

HEED : 02 :: PACIFY : ?

- (A) 24
- (B) 40
- (C) 31
- (D) 55





Find the option which should replace (?)

$P : 13 :: N : ?$

(A) 12

(B) 13

(C) 15

(D) 16





Find the option which should replace (?)



ANT = 11420

YELLOW = ?

(A) 25612121523

(B) 25513131523

(C) 51212152325

(D) 51212623242



30	5	15
18	9	81
27	7	?



Find the option which should replace (?)

(A) 189

(B) 35

(C) 36

(D) 63



Find odd word from the given alternative.

दिए गए विकल्प में से विषम शब्द ज्ञात कीजिए ।

(A) 40

(B) 36

(C) 12

(D) 44





In a certain code

'2 5 3' means 'man are good'

'5 4 6' means 'woman was good'

'3 7 8' means 'walking old man'

Q- What stands for 'Was' is that code ?

(A) 8

(B) 4

(C) 6

(D) 4 or 6





Which of the following diagrams indicates the best relation between **Sun, Moon and Earth** (सूर्य, चंद्रमा और पृथ्वी)?



A.

B

.C

.D.



Find the option which should replace (?)

Stable : Horse :: Sty : ?

स्थिर: घोड़ा :: शूकरशाला:?

- A. Cow / गाय**
- B. Buffalo / भेंस**
- C. Pig / सूअर**
- D. Fly / मक्खी**





Find the option which should replace (?)

JP : 80 :: PQ : ?

(A) 98

(B) 136

(C) 248

(D) 150





Find the option which should replace (?)

81 : 49 :: 64 : ?

(A) 16

(B) 04

(C) 49

(D) 25





Find number of triangle in the given figure ?


दी गई आकृति में त्रिभुज की संख्या ज्ञात कीजिए?

(A) 37

(B) 35

(C) 36

(D) 38





Find the option which should replace (?)

338 : 392 :: 450 : ?

(A) 578

(B) 512

(C) 600

(D) 810





Find the option which should replace (?)

Meat : vegetarian :: Liquor : ?

मांस: शाकाहारी :: शराब:?

- A. Insane / पागल**
- B. Tectotaller / मद्यत्यागी**
- C. Introvert / अंतर्मुखी**
- D. Alcoholic / मादक**





Find the option which should replace (?)

$$4 : 48 :: 12 : ?$$

- (A) 96**
- (B) 246**
- (C) 432**
- (D) 58**





Find the option which should replace (?)

Create : Destroy :: Condense : ?

बनाएँ: नष्ट :: संक्षेप :?

- A. Retreat /रिट्रीट**
- B. Expand /विस्तार**
- C. Gradual /क्रमिक**
- D. Initial /प्रारंभिक**





Find the option which should replace (?)

7 : 36 :: 9 : ?

(A) 12

(B) 15

(C) 21

(D) 8





Find the option which should replace (?)

8 : 88 : 96 :: ?

(A) 9 : 99 : 96

(B) 7 : 77 : 121

(C) 12 : 144 : 173

(D) 11 : 121 : 132

