

SSC MTS/HAWALDAR/CHSL



REASONING

LIVE TEST

तैयारी जीत की...

LIVE

08:30 PM





UPCOMING ONLINE BATCHES

May 2022

04 May 2022

05:30 PM to 07:30 PM

BANK ONLINE LIVE CLASS

10:30 AM to 12:30 PM

SSC ONLINE LIVE CLASS

BILINGUAL

11 May 2022

10:30 AM to 12:30 PM

BANK ONLINE LIVE CLASS

01:00 PM to 03:00 PM

SSC ONLINE LIVE CLASS

BILINGUAL

18 May 2022

07:30 PM to 09:30 PM

BANK ONLINE LIVE CLASS

05:30 PM to 07:30 PM

SSC ONLINE LIVE CLASS

BILINGUAL

04:00 PM to 06:00 PM

BANK ONLINE LIVE CLASS

ENGLISH & BENGALI

25 May 2022

03:00 PM to 05:00 PM

BANK ONLINE LIVE CLASS

08:00 AM to 10:00 AM

SSC ONLINE LIVE CLASS

BILINGUAL

05:30 PM to 09:30 PM

CUET ONLINE LIVE CLASS

BILINGUAL



Chhavi Saxena 12 hours ago

Home work answer is option B(021)

$20 \times 5 = 100 + 20 = 120$ then reverse 021

Very nice session sir Thank you so much 🙏🙏🙏🙏🙏🙏🙏🙏

👍 🗨️ 📄 ▼ 📄 REPLY ➡️

▶️ [View reply from Mahendras : Online Videos For Govt. Exams](#)



Vishnu Gupta 12 hours ago 3 subscribers

$021 = 20 \times 5 = 100 + 20 = 120$ utha kr diya

Very dhashu session sir thank you sir love you 😊 sir

👍 🗨️ 📄 ▼ 📄 REPLY ➡️

▶️ [View reply from Mahendras : Online Videos For Govt. Exams](#)



Hrithik_____ 12 hours ago (edited) 27 subscribers

021

OPTION B

👍 1 🗨️ 📄 ▼ 📄 REPLY ➡️

▶️ [View reply from Mahendras : Online Videos For Govt. Exams](#)



DEEKSHA SHARMA 12 hours ago

Home work answer is 120

👍 🗨️ 📄 ▼ 📄 REPLY ➡️



SANIA ____ 3 hours ago

Jhakkass photo session sir 🙏🙏

$20 \times 5 + 20 = 120 = 021$ 🍊🍊🍊🍊🍊🍊🍊

👍 🗨️ 📄 ▼ 📄 REPLY ➡️

▶️ [View reply from Mahendras : Online Videos For Govt. Exams](#)



🌸 PUJA KUNDU 🌸 12 hours ago 8 subscribers

The answer is ---021(((20×5=100+20=120 ulta kar diya 021 kar diya.....thank you sir...ajj ka clss sandar Qn k saath majedar tha...🔥🔥🙏🙏🙏🙏

👍 🗨️ 📄 ▼ 📄 REPLY ➡️

▼ [View reply from Mahendras : Online Videos For Govt. Exams](#)



Bhavya thakur ✍️ 12 hours ago 12 subscribers

120

👍 🗨️ 📄 ▼ 📄 REPLY ➡️



Hrithik_____ 12 hours ago (edited) 27 subscribers

$20 \times 5 = 100 + 20 = 120$,reverse 021

👍 1 🗨️ 📄 ▼ 📄 REPLY ➡️

▼ [View reply from Mahendras : Online Videos For Govt. Exams](#)



Puspranjan singh 12 hours ago 2 subscribers

120

👍 🗨️ 📄 ▼ 📄 REPLY ➡️



Find the missing :-

- (A) 012
- (B) 021
- (C) 100
- (D) 120

15	56	?
06	15	20
08	04	05
03	05	20





Find the missing :-

- (A) 5
- (B) 6
- (C) 7
- (D) 8

5	7	6	36
10	?	17	64
9	11	8	56





Find the missing :-

- (A) 16
- (B) 11
- (C) 15
- (D) 17

5	6	7	8
10	18	21	24
7	9	10	?





Find the missing :-

- (A) 16
- (B) 15
- (C) 18
- (D) 21

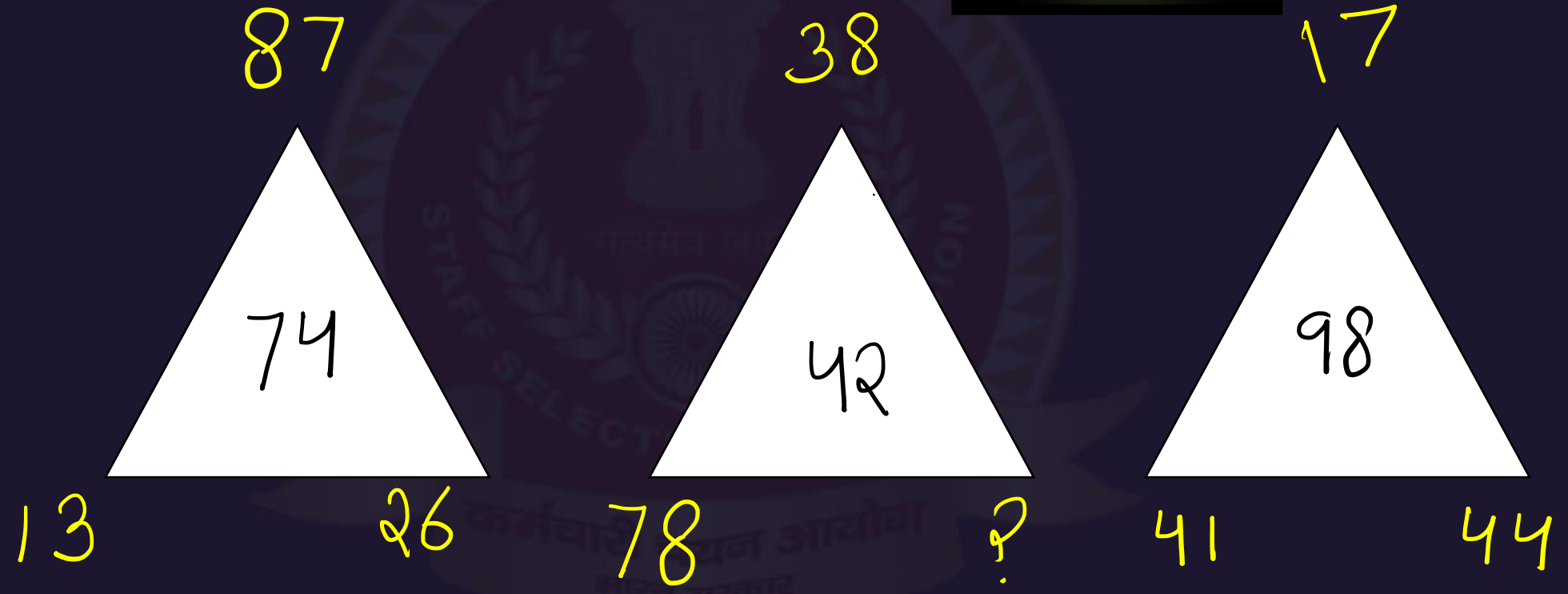
17	12	?
11	34	19
19	28	11
25	06	08





Find the missing :-

- (A) 42
- (B) 32
- (C) 76
- (D) 68





Find the missing :-

- (A) 7
- (B) 6
- (C) 9
- (D) 8

6	9	20	5
15	3	8	4
7	25	8	10
7	8	?	22





Which number will replace the question mark ?



6	10	15	12
5	9	4	2
7	13	8	12
79	259	124	?

- (A) 157
- (C) 168

- (B) 169
- (D) 144



Find the missing :-

- (A) 32
- (B) 34
- (C) 44
- (D) 28

16	?	30
20	29	21
10	26	24
12	20	16





Find the missing :-



- (A) 4
- (B) 5
- (C) 7
- (D) 8

6	4	8	9	3
9	2	9	4	2
4	1	11	11	3
5	1	?	1	4
3	3	1	6	5



Find the missing :-

- (A) 02
- (B) 04
- (C) 06
- (D) 08

3	2
5	4
1	7

1	2
7	6
4	2

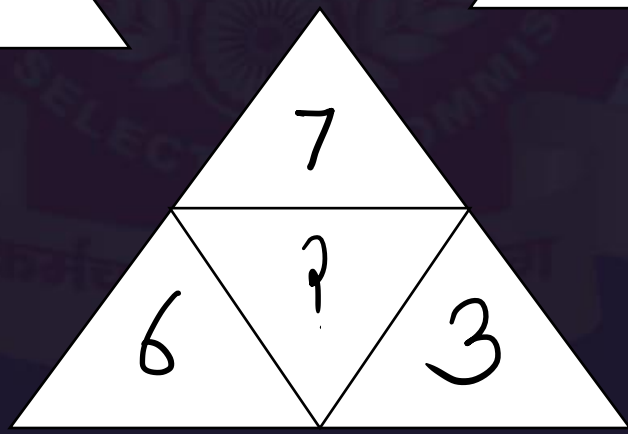
2	1
3	11
1	?






Find the missing :-

- (A) 06
- (B) - 4
- (C) - 8
- (D) 82





Which of the following diagrams indicates the best relation between (Gold Ring , Jewellery , Gold Article) / (गोल्ड रिंग, ज्वेलरी, गोल्ड आर्टिकल)



A.



B



.C




.D.





Find the number of triangle (?)

- (A) 13
- (B) 14
- (C) 17
- (D) 12





Find the missing :-

Table : Wood :: ? : ?

टेबल: लकड़ी :: ? : ?

- 1. Rubber : Latex / रबर: लेटेक्स**
- 2. Wheat : crop / गेहूं : फसल**
- 3. Paper : write / कागज: लिखो**
- 4. Rubber : Erase / रबर: मिटाएँ**





Find the missing :-

Cycle : Wheel :: Notebook : ?

साइकिल: पहिया :: नोटबुक:?

1. Write / लिखो
2. Writer / लेखक
3. Pages / पेज
4. Bind / बाइंड





SSC MTS/HAWALDAR/CHSL

Live at 08:30 PM



Find the ODD :-

- 1. Chair / कुरसी**
- 2. Sofa / सोफ़ा**
- 3. Bench / बेंच**
- 4. Pen / कलम**





Find number of square in the given figure ?
दिए गए आंकड़े में वर्ग की संख्या ज्ञात कीजिए

- (A) 34
- (B) 29
- (C) 32
- (D) 35

