

RRB NTPC CBT 2/GROUP D



REASONING

अबकी बार **RAILWAY** पार

Complete Revision



LIVE 7:30 PM





Don't Let Your Studies Get Impacted By COVID-19 Pandemic

Stay Home & Study Online With Mahendras Hybrid Model

Features



Offline Classes



Live Interactive Online Classes



Same Faculty



Same Batch



Same Batch Timing



Online Library Facility



Recorded Video



PDFs



Classes In Both Model

CONTACT US:

1800-103-5225

www.mahendras.org





UPCOMING ONLINE BATCHES

January 2022

05 Jan 2022

08:00 AM to 10:00 AM

BANK ONLINE LIVE CLASS

10:30 AM to 12:30 PM

SSC ONLINE LIVE CLASS

01:00 PM to 03:00 PM

SSC ONLINE LIVE CLASS

05:30 PM to 07:30 PM

BANK ONLINE LIVE CLASS

BILINGUAL

12 Jan 2022

08:00 AM to 10:00 AM

SSC ONLINE LIVE CLASS

10:30 AM to 12:30 PM

BANK ONLINE LIVE CLASS

03:00 PM to 05:00 PM

BANK ONLINE LIVE CLASS

05:30 PM to 07:30 PM

SSC ONLINE LIVE CLASS

BILINGUAL

19 Jan 2022

08:00 AM to 10:00 AM

BANK ONLINE LIVE CLASS

01:00 PM to 03:00 PM

BANK ONLINE LIVE CLASS

03:00 PM to 05:00 PM

SSC ONLINE LIVE CLASS

07:30 PM to 09:30 PM

SSC ONLINE LIVE CLASS

BILINGUAL

27 Jan 2022

10:30 AM to 12:30 PM

BANK ONLINE LIVE CLASS

07:30 PM to 09:30 PM

BANK ONLINE LIVE CLASS

08:00 AM to 10:00 AM

SSC ONLINE LIVE CLASS

01:00 PM to 03:00 PM

SSC ONLINE LIVE CLASS

BILINGUAL



RRB NTPC Stage-2 Exam Pattern

Sections	No. of Questions	Total Marks	Duration
Mathematics	35	35	90 minutes
General Intelligence and Reasoning	35	35	
General Awareness	50	50	
Total	120	120	



Nadeem 1 day ago

🌟 Homework Answer 🌟

🟦 Option A :- 100 Monitors

🌟 Thank You Sir 🙏 Nice Session Sir 😊 🌟 🎓

👍 1 💬 📄 ▼ 📄 REPLY

▶ [View reply from Mahendras : Online Videos For Govt. Exams](#)



Viśhñù Güptâ 1 day ago

A-100 is the right ans

Very super nice session sir Thank you 🙏 love ❤️ you sir

👍 1 💬 📄 ▼ 📄 REPLY

▶ [View reply from Mahendras : Online Videos For Govt. Exams](#)



🌸 PUJA KUNDU 🌸 1 day ago

The answer is—2100÷(20+1)=100.....amazing session sir and thank you for the session 🙏

👍 💬 📄 ▼ 📄 REPLY

▶ [View 2 replies from Mahendras : Online Videos For Govt. Exams and others](#)



SANIA _____ 1 day ago

mast session sir 🙏🙏

100 🔥🔥

👍 1 💬 📄 ▼ 📄 REPLY

▶ [View reply from Mahendras : Online Videos For Govt. Exams](#)



RASHMI SONI   1 day ago

HW ANSWER 100

V NICE SESSION

 1     [REPLY](#)

[View reply from Mahendras : Online Videos For Govt. Exams](#)




Chhavi Saxena 1 day ago

Home work answer is 100

 1     [REPLY](#)

[View reply from Mahendras : Online Videos For Govt. Exams](#)



Ashwini Kumar 1 day ago

100

 1     [REPLY](#)

[View reply from Mahendras : Online Videos For Govt. Exams](#)



ROHIT GOND 1 day ago

100

 1     [REPLY](#)

[View reply from Mahendras : Online Videos For Govt. Exams](#)



puspranjan singh 1 day ago

100

 1     [REPLY](#)

[View reply from Mahendras : Online Videos For Govt. Exams](#)

A school has 2100 students. For every 20 students there is one class monitor. The number of monitors in the school is

एक स्कूल में 2100 छात्र हैं। प्रत्येक 20 छात्रों के लिए एक कक्षा का मॉनीटर होता है। स्कूल में मॉनीटर की संख्या क्या है-

- (A) 100
(C) 80

- (B) 75
(D) 85



The Captain of a football team of 11 members is 36 years old and the goalkeeper is 3 year older than him . If the ages of these two excluded , the average age of the remaining players is one year less than the average age of the whole team . What is the average age of the team ?

11 सदस्यों वाली एक फुटबॉल टीम का कैप्टन 36 साल का है और गोलकीपर उससे 3 साल बड़ा है। यदि इन दोनों की आयु को छोड़ दिया जाए, तो शेष खिलाड़ियों की औसत आयु पूरी टीम की औसत आयु से एक वर्ष कम है। टीम की औसत आयु क्या है?

1. 39 years
2. 30 years
3. 36 years
4. 33 years

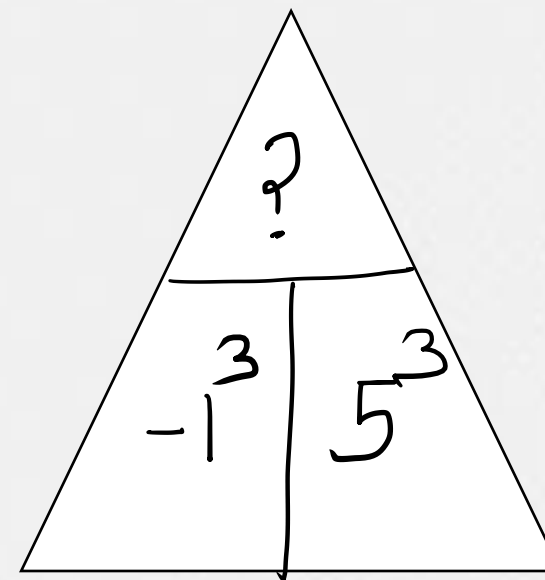
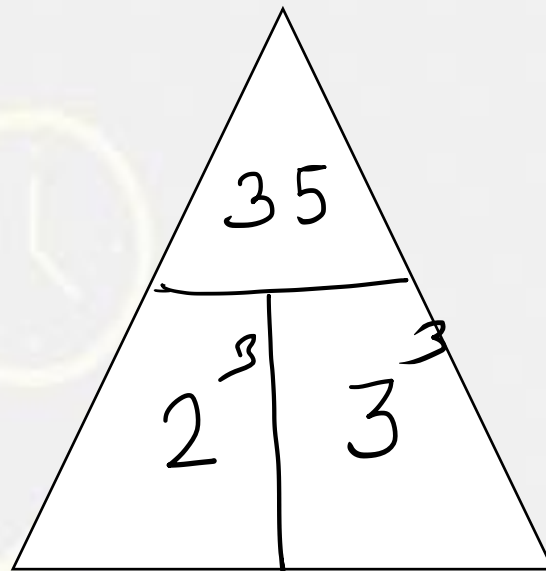
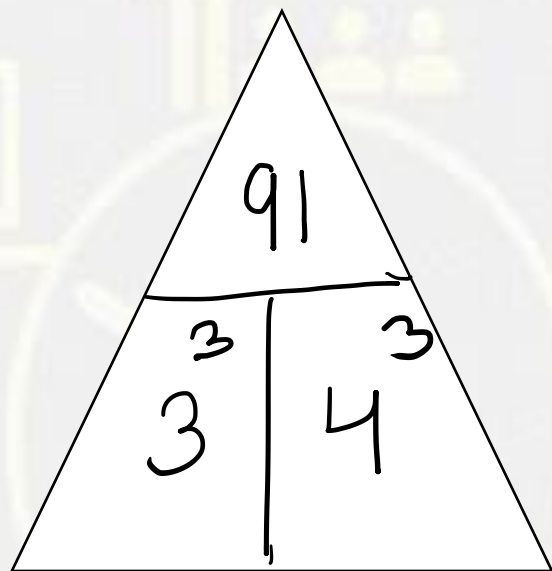


Find the missing :-

NOMADS : LQKCBU :: GRAPES : ?

1. ETYRUC
2. ETRCYU
3. ETRTCU
4. ETYRCU





- A. 136
- B. 126
- C. 127
- D. 124



Find the missing term(?)

Teach : Teacher :: Game : ?

सिखाना: शिक्षक :: खेल:?

- (A) Sportsman / खिलाड़ी
- (B) Coach / कोच
- (C) Captain / कप्तान
- (D) President / अध्यक्ष



Find the missing term(?)



January : December :: Monday : ?

- (A) Wednesday**
- (B) Sunday**
- (C) Monday**
- (D) Saturday**

Find the odd one (?)

- (A) GJ - 24
- (B) AF - 120
- (C) MQ - 60
- (D) BH - 120



Statements : -

- Some lions are tigers./ कुछ शेर बाघ हैं।
No jaguar is lion./ कोई जगुआर शेर नहीं है।
Some leopards are lions./ कुछ तेंदुए शेर हैं।

**Conclusion :-**

- No lion is Jaguar./ कोई भी शेर जगुआर नहीं है।
All tiger being leopard is a possibility./ सभी बाघ तेंदुआ होने की संभावना है।
Some leopard are not jaguar./ कुछ तेंदुए जगुआर नहीं हैं।

Two women and two men are playing ludo and are seated at north , South , East and West direction . No man is facing east . Persons sitting opposite to each other are not of the same sex . One woman is facing south . Which direction are the man facing ?

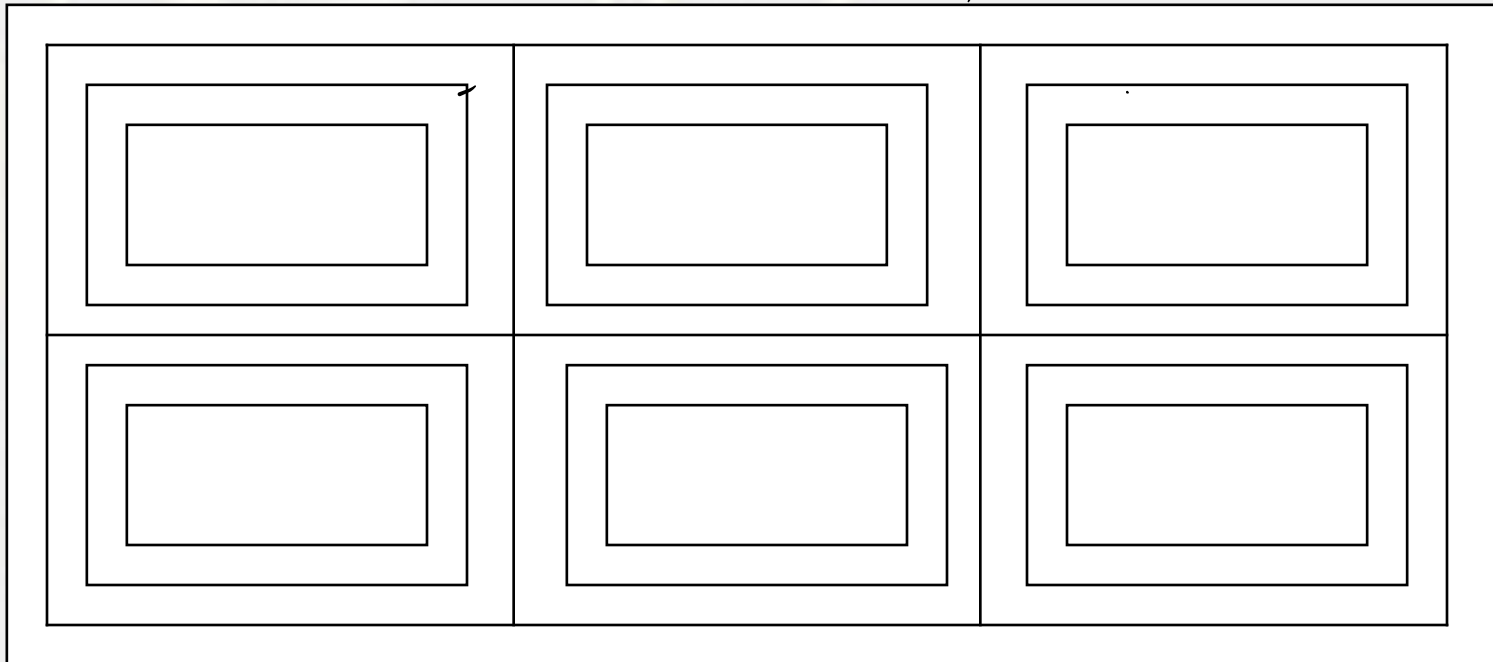
दो महिलाएं और दो पुरुष लूडो खेल रहे हैं और उत्तर, दक्षिण, पूर्व और पश्चिम दिशा में बैठे हैं। कोई भी आदमी पूर्व की ओर मुंह नहीं कर रहा है। एक दूसरे के विपरीत बैठे व्यक्ति एक ही लिंग के नहीं होते हैं। एक महिला दक्षिण का सामना कर रही है। आदमी किस दिशा का सामना कर रहा है?

1. East and West
2. North and West
3. North and South
4. South and East



Find the rectangle :-

1. 31
2. 32
3. 39
4. 35



Find the missing term(?)

BCJ / O : AFK / R : CDE / L : ?

- (A) DEF / P**
- (B) DEF / M**
- (C) TAC / X**
- (D) CET / E**



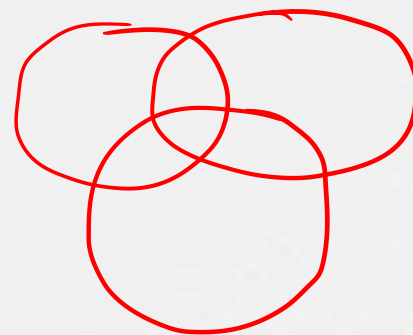
Find the missing term(?)

_ X X _ Y _ X Y Y X _ Y

- (A) YYXY
- (B) YXYX
- (C) XYYX
- (D) YYXX



Which of the following diagrams indicates the best relation between **life, Death and Time** / **जीवन, मृत्यु और समय**



A.

B

.C

.D.

Find the option which should replace (?)

(12 , 67 , 122) :: ?

(A) 15 , 77 , 139

(B) 7 , 24 , 73

(C) 13 , 40 , 118

(D) 9 , 28 , 83



Arrange the words given below in a meaningful sequence.

1. Work in progress / कार्य प्रगति पर
2. Profit / लाभ
3. Raw Material / कच्चा माल
4. Sale / बिक्री
5. Commodity / क्मोडिटी

- A. 3, 1, 5, 4, 2
- B. 2, 4, 3, 1, 5
- C. 1, 3, 2, 4, 5
- D. 4, 3, 1, 5, 2



Find the missing :-

Sack : Jute :: Prism : ?

बोरी: जूट :: प्रिज्म:?

1. Wood / लकड़ी
2. Glass / कांच
3. Gold / सोना
4. Metal / धातु

