



RRB GROUP D 2022



REASONING

MEMORY BASED PAPER DISCUSSION

24th AUG - ALL SHIFTS

LIVE  **08:30 PM**





UPCOMING ONLINE BATCHES

August 2022

03 AUG 2022

03:00 PM to 05:00 PM

BANK ONLINE LIVE CLASS

01:00 PM to 03:00 PM

SSC ONLINE LIVE CLASS

BILINGUAL

10 AUG 2022

05:30 PM to 07:30 PM

BANK ONLINE LIVE CLASS

08:00 AM to 10:00 AM

SSC ONLINE LIVE CLASS

BILINGUAL

17 AUG 2022

08:00 AM to 10:00 AM

BANK ONLINE LIVE CLASS

05:30 PM to 07:30 PM

SSC ONLINE LIVE CLASS

BILINGUAL

24 AUG 2022

07:30 PM to 09:30 PM

BANK ONLINE LIVE CLASS

10:30 AM to 12:30 PM

SSC ONLINE LIVE CLASS

BILINGUAL

31 AUG 2022

10:30 AM to 12:30 PM

BANK ONLINE LIVE CLASS

07:30 PM to 09:30 PM

SSC ONLINE LIVE CLASS

BILINGUAL

10 AUG 2022

02:00 PM to 04:00 PM

BANK ONLINE LIVE CLASS

BENGALI+ENGLISH

31 AUG 2022

06:30 PM to 08:30 PM

BANK ONLINE LIVE CLASS


BENGALI+ENGLISH



www.mahendras.org




7052477777/7052577777

 Chhavi Saxena 13 hours ago
Home work answer is option A(184)
Logic - $25^2 - 21^2 = 184$
Very Nice session Sir Thank you so much dear Sir 🙌🙌🙌🙌🙌🙌


👍 1 🗨️ REPLY ▶️

▼ 🚫 • 1 REPLY

 🌸 PUJA KUNDU 🌸 ----- 10 hours ago 8 subscribers
The ans is -184....625-441.....thank you sir for the fabulous session 🙌


👍 1 🗨️ REPLY ▶️

▼ 🚫 • 1 REPLY

 Vishnu Gupta 12 hours ago 10 subscribers
184 is the right ans very super nice session sir thank you 🙌 sir


👍 🗨️ REPLY ▶️

▼ 🚫 • 1 REPLY

 Ankit Vish 13 hours ago 273 subscribers
Answer. AAA
Logic $25^2 - 21^2 = 184$
Lajwab session sir 🙌🙌


👍 🗨️ REPLY ▶️

▼ 🚫 • 1 REPLY

 Army girl ✍️ _____ 13 hours ago 27 subscribers
184 🙌
25 or 21 ka square


👍 🗨️ REPLY ▶️

▼ 🚫 • 1 REPLY

 Surbhi Sinha 13 hours ago
184. 25 and 21 square = 184 supper session 😞😞😞😞

👍 🗨️ REPLY ▶️

▼ 🚫 • 1 REPLY

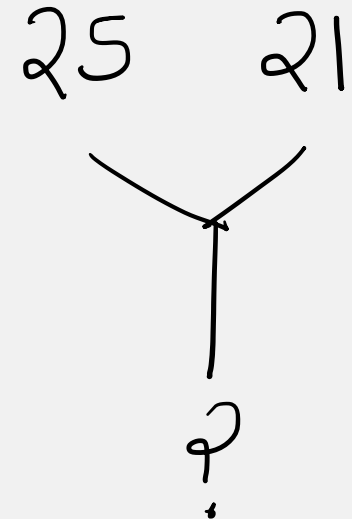

 M@RÇOS _____ 13 hours ago 29 subscribers
184

👍 1 🗨️ REPLY ▶️

▼ 🚫 • 1 REPLY

Find the missing :-

- 1. 184
- 2. 210
- 3. 321
- 4. 241



LAPET = 28367

BWEND = 51694

WENTED = ?

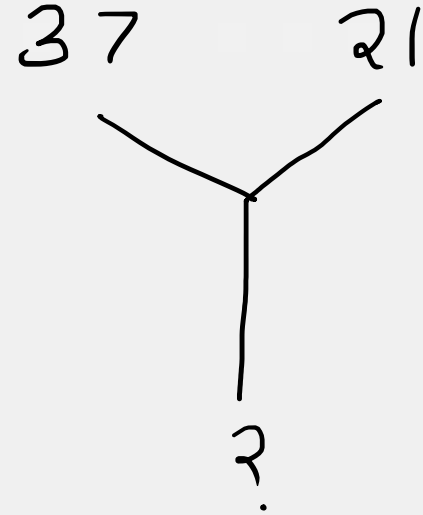
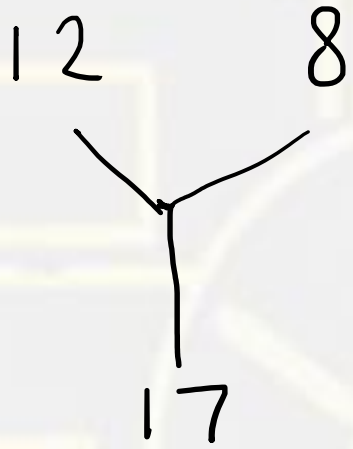
(1) 196764

(2) 189764

(3) 169746

(4) 169764





- (1) 257
- (2) 290
- (3) 226
- (4) 325



$$12 @ 5-5 @ 7 = 95$$

$$15 @ 3-3 @ 8 = 69$$

$$17 @ 4-4 @ 7 = ?$$

(1) 54

(2) 108

(3) 96

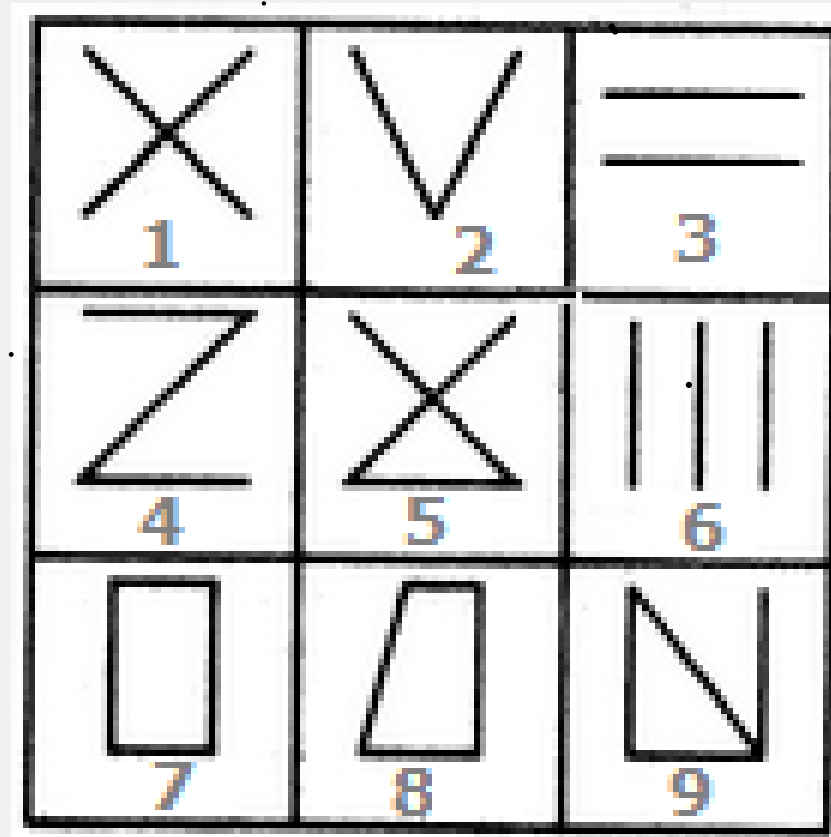
(4) 98



Group the given figures into three classes using each figure only once.



- A. 1,2,3 ; 4,5,6 ; 7,8,9
- B. 1,3,5 ; 2,4,6 ; 7,8,9
- C. 1,5,9 ; 3,6,2 ; 4,7,8
- D. 1,9,7 ; 2,8,5 ; 3,4,6



Which number will replace the question mark ?

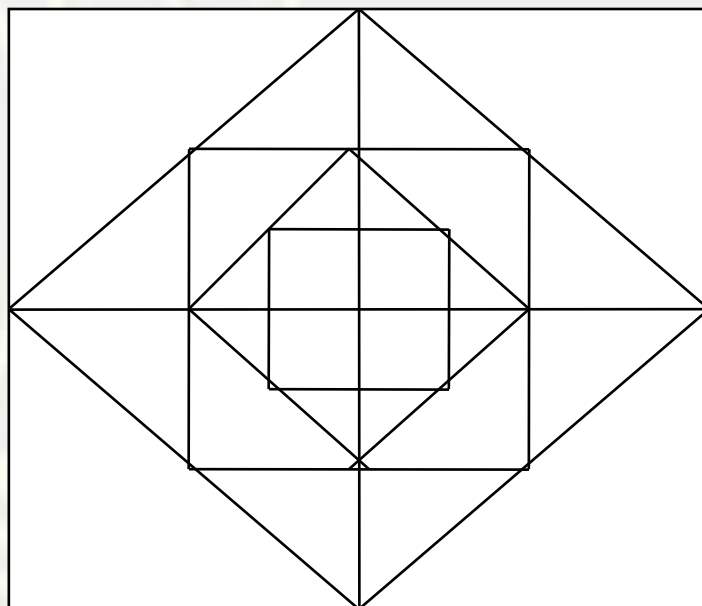
963	2	844
464	?	903

- (A) 2 (B) 3
(C) 4 (D) 5



Find the number of square (?)

- (A) 12**
- (B) 15**
- (C) 17**
- (D) 18**



Rinku was born on April 10, 1975. Tinku was born 15 days before Rinku . If Republic day in that year was on Monday , on which day was Tinku born ?

रिंकू का जन्म 10 अप्रैल 1975 को हुआ था। टिंकू का जन्म रिंकू से 15 दिन पहले हुआ था। यदि उस वर्ष में रेप्लिक दिवस सोमवार को था, तो टिंकू का जन्म किस दिन हुआ था?

- (A) Tuesday
- (B) Thursday
- (C) Wednesday
- (D) Friday



Which number will replace the question mark ?

$$11 \frac{1}{9}, 12 \frac{1}{2}, 14 \frac{2}{7}, 16 \frac{2}{3}, ?$$

(A) $8 \frac{1}{3}$

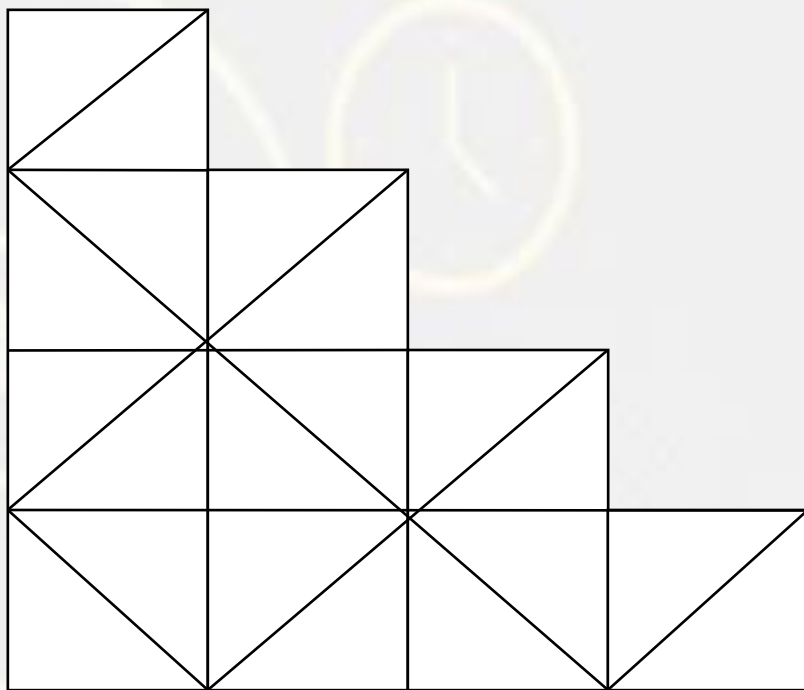
(B) 20

(C) $19 \frac{1}{2}$

(D) $22 \frac{1}{3}$



Find the number of square in the given figure.



- A. 10**
- B. 11**
- C. 12**
- D. 14**

In a Certain code **DAM** is written as **52**, than find the code for **CAN**?

एक निश्चित कोड में **DAM** का कोड **52** लिखा गया है तो **CAN** का कोड क्या होगा ?


- (1) 56
- (2) 42
- (3) 70
- (4) 64



Find number of cube in the given figure ?

दी गई आकृति में घन की संख्या ज्ञात कीजिए?

- (A) 34
- (B) 35
- (C) 31
- (D) 15



Find odd word from the given alternative.
दिए गए विकल्प में से विषम शब्द ज्ञात कीजिए ।

- A. House / **मकान**
- B. Cottage / **कुटिया**
- C. School / **स्कूल**
- D. Palace / **महल**
- E. Hut / **कुटिया**



Find odd word from the given alternative.

दिए गए विकल्प में से विषम शब्द ज्ञात कीजिए ।

- A.Car / गाड़ी
- B.Scooter / स्कूटर
- C.Helicopter / हेलीकॉप्टर
- D.Aeroplane / विमान
- E.Cycle / साइकिल



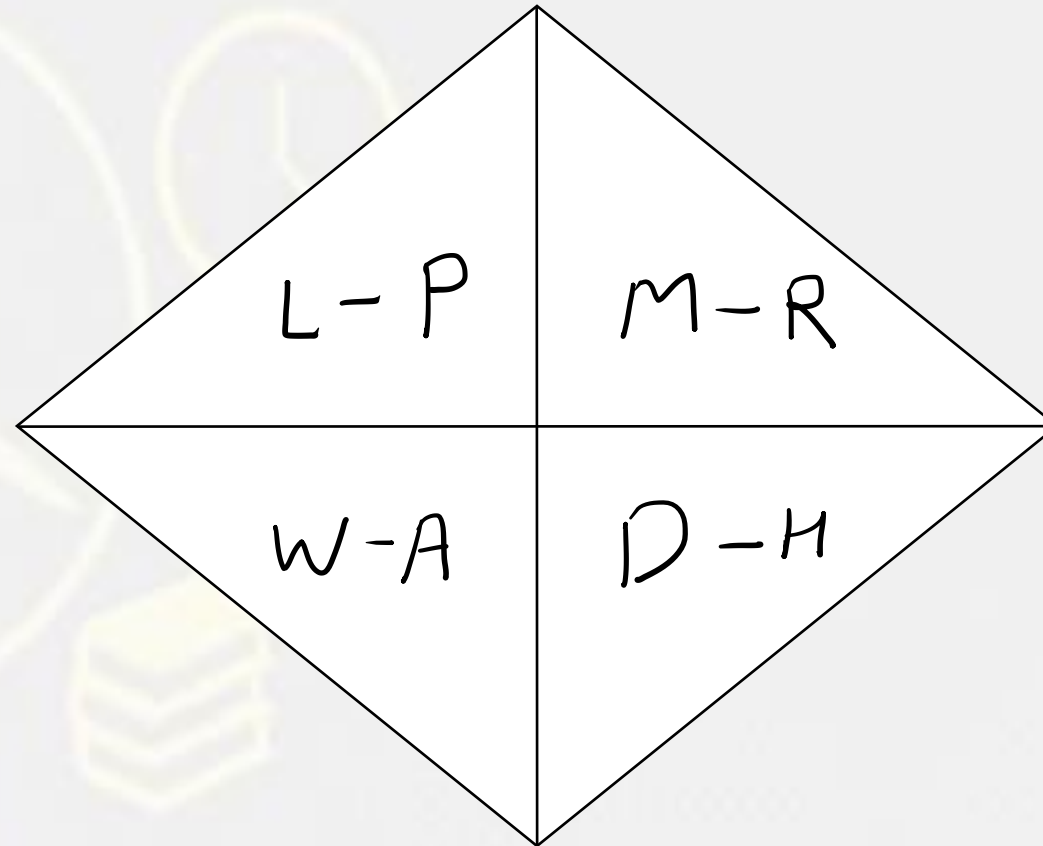
Find odd word from the given alternative.
दिए गए विकल्प में से विषम शब्द ज्ञात कीजिए ।

- A. Month / महीना
- B. Year / साल
- C. Fortnight / दो सप्ताह का समय
- D. Season / मौसम
- E. Week / सप्ताह



Find the odd one out(?)

- A. L-P**
- B. M-R**
- C. D-R**
- D. W-A**



Find the odd one out(?)

- A. Principal**
- B. Doctor**
- C. Engineer**
- D. Teacher**

