

# SSC MTS/HAWALDAR/CHSL



## REASONING

# FIGURE COUNTING

## PART-1

तैयारी जीत की...

LIVE

08:30 PM





# UPCOMING ONLINE BATCHES

## April 2022

06 April 2022

10:30 AM to 12:30 PM

**BANK ONLINE LIVE CLASS**

05:30 PM to 07:30 PM

**SSC ONLINE LIVE CLASS**

07:30 PM to 09:30 PM

**RBI ONLINE LIVE CLASS**

**BILINGUAL**

13 April 2022

01:00 PM to 03:00 PM

**BANK ONLINE LIVE CLASS**

03:00 PM to 05:00 PM

**SSC ONLINE LIVE CLASS**

11:30 AM to 01:30 PM

**BANK ONLINE LIVE CLASS**  
(English & Bengali)

07:30 PM to 09:30 PM

**BANK ONLINE LIVE CLASS**  
(English & Odia)

**BILINGUAL**

05:30 PM to 06:30 PM

**CCC ONLINE LIVE CLASS**  
(NIELIT COMPUTER COURSE)

**BILINGUAL**

20 April 2022

08:00 AM to 10:00 AM

**BANK ONLINE LIVE CLASS**

07:30 PM to 09:30 PM

**SSC ONLINE LIVE CLASS**

01:00 PM to 03:00 PM

**SSC ONLINE LIVE CLASS**  
(English & Odia)

**BILINGUAL**

10:30 AM to 11:30 AM

**ENGLISH SPEAKING COURSE 2022**  
(ENGLISH SPEAKING COURSE)

**BILINGUAL**

27 April 2022

04:15 PM to 06:15 PM

**SSC ONLINE LIVE CLASS**  
(English & Bengali)

07:30 PM to 09:30 PM

**BANK ONLINE LIVE CLASS**

08:00 AM to 10:00 AM

**SSC ONLINE LIVE CLASS**

**BILINGUAL**



Vishnu Gupta 17 hours ago 3 subscribers

8261 right ans

17 prime no

Very nice session sir thank you 🙏 sir love you 😊 sir



REPLY



▼ [View reply from Mahendras : Online Videos For Govt. Exams](#)



🌸 PUJA KUNDU 🌸 18 hours ago 8 subscribers

The ans is 8261 total 17 prime no.....thank you sir..superb session k liye 🙏🙏🙏🙏🙏



REPLY



▼ [View reply from Mahendras : Online Videos For Govt. Exams](#)



Omffffoo \_\_\_\_\_ 10 hours ago

dhaansu session sir 🙏🙏

8261 🔥🔥🔥🔥



REPLY



▼ [View reply from Mahendras : Online Videos For Govt. Exams](#)



Ajaya kumar 18 hours ago 8 subscribers

8261



REPLY



▼ [View reply from Mahendras : Online Videos For Govt. Exams](#)



Puspranjan Singh 16 hours ago **2** subscribers


8261 total 17 prime no.



REPLY



▼ [View reply from Mahendras : Online Videos For Govt. Exams](#)



RASHMI SONI 🇮🇳✍️ 18 hours ago **32** subscribers

HW ANSWER,,, B



REPLY



▼ [View reply from Mahendras : Online Videos For Govt. Exams](#)



ANNU LATA 17 hours ago

bb is right ans



REPLY



▼ [View reply from Mahendras : Online Videos For Govt. Exams](#)



Niteesh Kumar 18 hours ago

Opt bbbbbbb



REPLY





**SSC MTS/HAWALDAR/CHSL**

**Live at 08:30 PM**



**Find the ODD one(?)**

- A. 2424**
- B. 8261**
- C. 6354**
- D. 4248**






Find number of triangle in figure?


- (A) 20
- (C) 21

- (B) 24
- (D) 23





Find number of triangle in figure?



- (A) 50
- (C) 58

- (B) 42
- (D) NOT






Find number of triangle in given figure ?

- (A) 32
- (C) 23

- (B) 27
- (D) 37








Find number of triangle in given figure ?


- (A) 109
- (B) 94
- (C) 96
- (D) NOT





Find number of triangle in the given figure ?  
दी गई आकृति में त्रिभुज की संख्या ज्ञात कीजिए?


- (A) 20
- (B) 8
- (C) 28
- (D) 16





Find number of triangle in the given figure ?  
दी गई आकृति में त्रिभुज की संख्या ज्ञात कीजिए?


- (A) 27
- (B) 28
- (C) 29
- (D) NOT





Find number of triangle in the given figure ?  
दी गई आकृति में त्रिभुज की संख्या ज्ञात कीजिए?


- (A) 90
- (B) 98
- (C) 110
- (D) NOT





Find number of triangle in the given figure ?  
दी गई आकृति में त्रिभुज की संख्या ज्ञात कीजिए?

- (A) 12
- (B) 15
- (C) 21
- (D) NOT





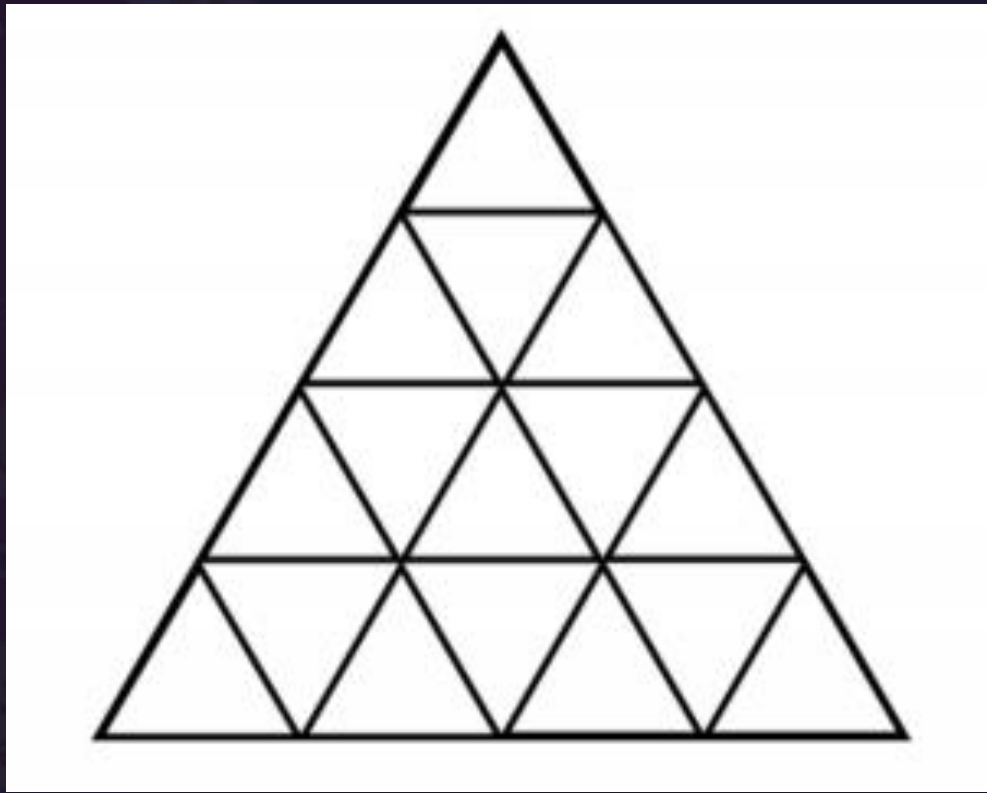
Find number of triangle in figure?

(A) 27

(B) 26

(C) 16

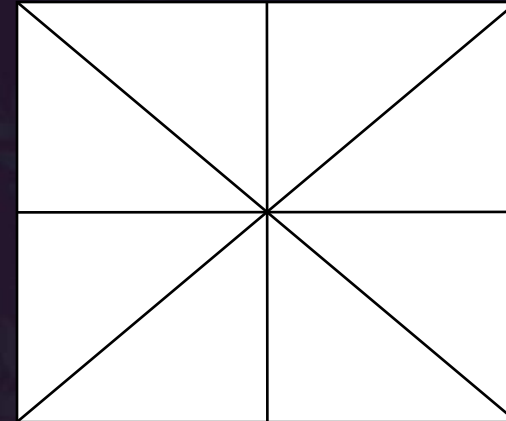
(D) 23





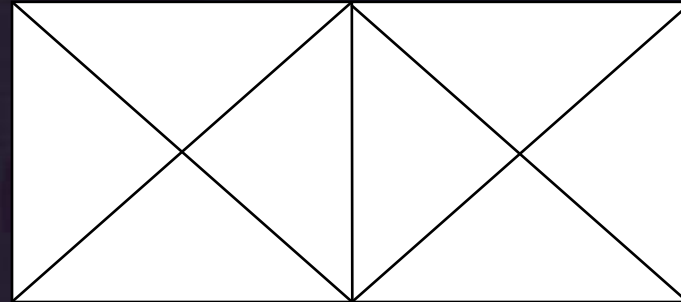
Find number of triangle in the given figure ?  
दी गई आकृति में त्रिभुज की संख्या ज्ञात कीजिए?

- (A) 20
- (B) 18
- (C) 28
- (D) 16





Find number of triangle in the given figure ?  
दी गई आकृति में त्रिभुज की संख्या ज्ञात कीजिए?



- (A) 20
- (B) 18
- (C) 28
- (D) 16








Count the number of triangles and squares in the given figure.

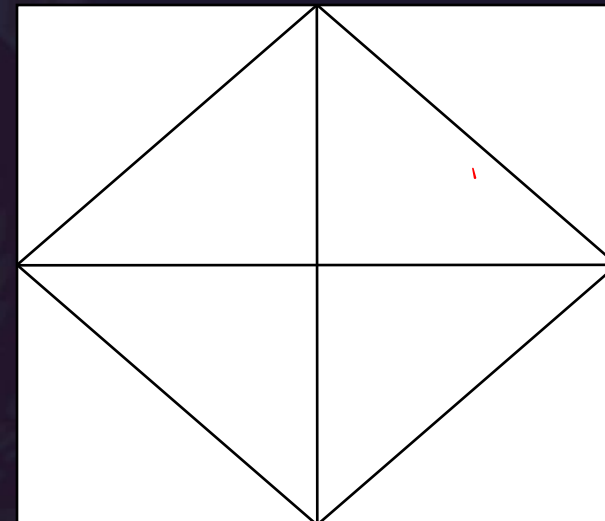
- (A) 28 triangles, 3 squares
- (B) 24 triangles, 5 squares
- (C) 28 triangles, 5 squares
- (D) 24 triangles, 3 squares





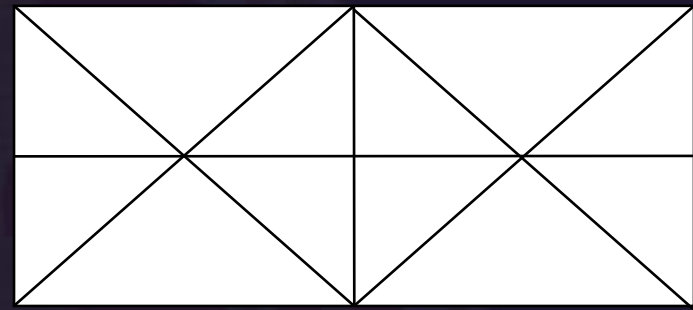
Find number of triangle in the given figure ?  
दी गई आकृति में त्रिभुज की संख्या ज्ञात कीजिए?

- (A) 12
- (B) 18
- (C) 28
- (D) 16






Find number of triangle in the given figure ?  
दी गई आकृति में त्रिभुज की संख्या ज्ञात कीजिए?



- (A) 20
- (B) 18
- (C) 30
- (D) 16





Find number of triangle in the given figure ?

दी गई आकृति में त्रिभुज की संख्या ज्ञात कीजिए?

- (A) 20
- (B) 38
- (C) 28
- (D) 36

