

# RAILWAY GROUP D

 Mahendra's

REASONING



≡ अंतिम प्रहार ≡

# EXPECTED QUESTIONS

LIVE | 08:30 PM





# UPCOMING ONLINE BATCHES

## July 2022

**06 July 2022**

**05:30 PM to 07:30 PM**

**BANK ONLINE LIVE CLASS**

**03:00 PM to 05:00 PM**

**SSC ONLINE LIVE CLASS**

**BILINGUAL**

**06 July 2022**

**07:30 PM to 09:30 PM**

**BANK ONLINE LIVE CLASS**

**ENGLISH MEDIUM**

**06 July 2022**

**02:00 PM to 04:00 PM**

**SSC ONLINE LIVE CLASS**

**ENGLISH & BENGALI**

**13 July 2022**

**08:00 AM to 10:00 AM**

**BANK ONLINE LIVE CLASS**

**07:30 PM to 09:30 PM**

**SSC ONLINE LIVE CLASS**

**BILINGUAL**

**13 July 2022**

**09:15 AM to 11:15 AM**

**BANK ONLINE LIVE CLASS**

**ENGLISH & BENGALI**

**20 July 2022**

**01:00 PM to 03:00 PM**

**BANK ONLINE LIVE CLASS**

**10:30 AM to 12:30 PM**

**SSC ONLINE LIVE CLASS**

**BILINGUAL**

**27 July 2022**

**10:30 AM to 12:30 PM**

**BANK ONLINE LIVE CLASS**

**08:00 AM to 10:00 AM**

**SSC ONLINE LIVE CLASS**

**BILINGUAL**

**27 July 2022**

**07:00 AM to 09:00 AM**

**BANK ONLINE LIVE CLASS**

**ENGLISH & BENGALI**



[www.mahendras.org](http://www.mahendras.org)



7052477777/7052577777



Mohit.. 19 hours ago 1 subscribers

Thank-you Sir for this Amazing Class Session of today's..👏😊

And

My Answer for today's Homework is like-  
Option D...

Read more

👍 🗨️ REPLY 🗨️

▼ [View reply from Mahendras : Online Videos For Govt. Exams](#)



🌸 PUJA KUNDU 🌸 ----- 19 hours ago 7 subscribers

The answer is...Option D...LITTLE = $6^2=36$  & CHILD == $5^2=25$ ===== $36+25=61$ .....THANK YOU SOO MUCH SIR FOR THE AMAZING SESSION....AGAR KUCH BHI AAPKO BURA LAGA HO TO SORRY SIR👏👏👏

👍 🗨️ REPLY 🗨️



Ankit Vish 7 hours ago 222 subscribers

Answer DDD

Nice session sir👏👏

👍 🗨️ REPLY 🗨️



Vishnu Gupta 19 hours ago 3 subscribers

Homework 📖 D is the right ans

Very Shaandar dhashu session sir thank you 👏❤️ you sir 👏❤️

👍 🗨️ REPLY 🗨️

▼ [View reply from Mahendras : Online Videos For Govt. Exams](#)



GUDIYA SHARMA 7 hours ago 2 subscribers

Option ddd 👍👍

👍 🗨️ REPLY 🗨️



DEEKSHA SHARMA 19 hours ago

Home work answer is Ddd  
Very nice session sir

[REPLY](#)

[View reply from Mahendras : Online Videos For Govt. Exams](#)



khushbu 19 hours ago

Ccccc—sum of no of latter ka square

[REPLY](#)



Bhavya thakur \_\_\_\_\_ 19 hours ago [27 subscribers](#)

Homework ans - D

1 [REPLY](#)

[View reply from Mahendras : Online Videos For Govt. Exams](#)



Hrithik \_\_\_\_\_ 19 hours ago [29 subscribers](#)

D

[REPLY](#)

[View reply from Mahendras : Online Videos For Govt. Exams](#)

Find the odd ONE (?)

- (A) BOLD , YES , 25
- (B) CLIFORIA , PUNJAB , 100
- (C) WRONG , IDEA , 41
- (D) LITTLE , CHILD , 51



Find the option which should replace (?)



<b>9</b>	<b>14</b>	<b>8</b>
<b>12</b>	<b>18</b>	<b>?</b>
<b>16</b>	<b>32</b>	<b>54</b>

- A. 20
- B. 15
- C. 40
- D. 60

Which number will replace the question mark ?

10	5	6	9
7	3	14	18
8	5	2	?

(A) 6

(B) 8

(C) 10

(D) 9



**Find the MISSING (?)**

$$12 : 16 :: 16 : ?$$

- (A) 49**
- (B) 36**
- (C) 25**
- (D) 64**





Find the MISSING (?)

$$16 * 25 * 99$$

$$23 * 52 * 59$$

$$23 * 31 * ?$$

(A) 54

(B) 56

(C) 43

(D) 23

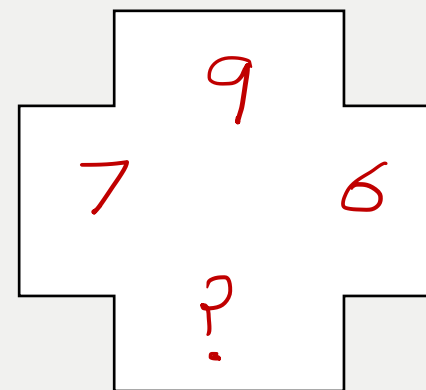
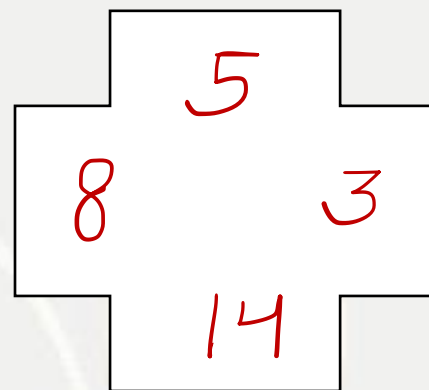
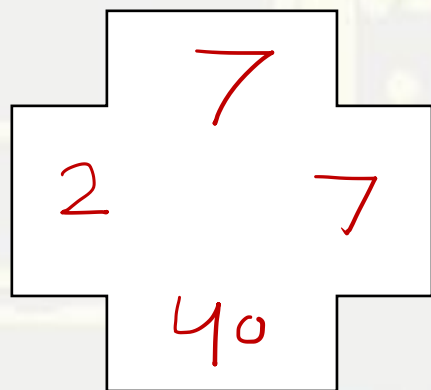


Find the missing :-



- (A) 11
- (B) 12
- (C) 15
- (D) 10

<b>5</b>	<b>15</b>	<b>10</b>
<b>9</b>	<b>17</b>	<b>4</b>
<b>10</b>	<b>?</b>	<b>10</b>



- (A) 27
- (B) 68
- (C) 70
- (D) 36



Find the missing ONE (?)

**DE : 20 :: DEN : 48 :: DENIM : ?**

- (A) 96
- (B) 94
- (C) 98
- (D) 92



Find the missing ONE (?)

**1 , 2 , 4 , 6 , 10 , 12 , 16 , 18 , 22 , 28 , 30 , ?**

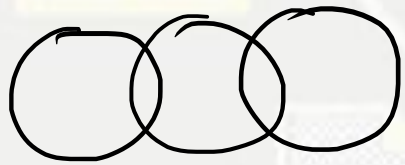
- (A) 36**
- (B) 32**
- (C) 34**
- (D) 38**



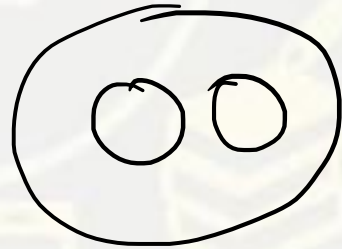
Find the RIGHT ONE (?)

**MIGRANT , GERMAN PEOPLE , HUMAN**


प्रवासी, जर्मन लोग, मानव



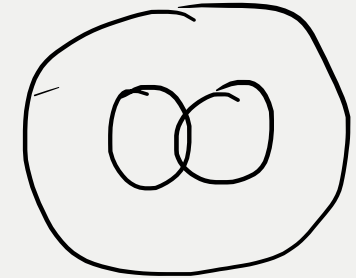
(A)



(B)



(C)



(D)

Find the missing ONE (?)

**IG : RU :: KH : ?**

- (A) TX
- (B) XV
- (C) XT
- (D) VX



Find the missing ONE (?)

**BAD = ROB VAN DAM**

**TOB = FIT COM BAG**

**NEC = ?**

- (A) PAN HET BUC**
- (B) WON RED CAP**
- (C) NOT LID COW**
- (D) LAN HAD HOC**





Find the missing ONE (?)

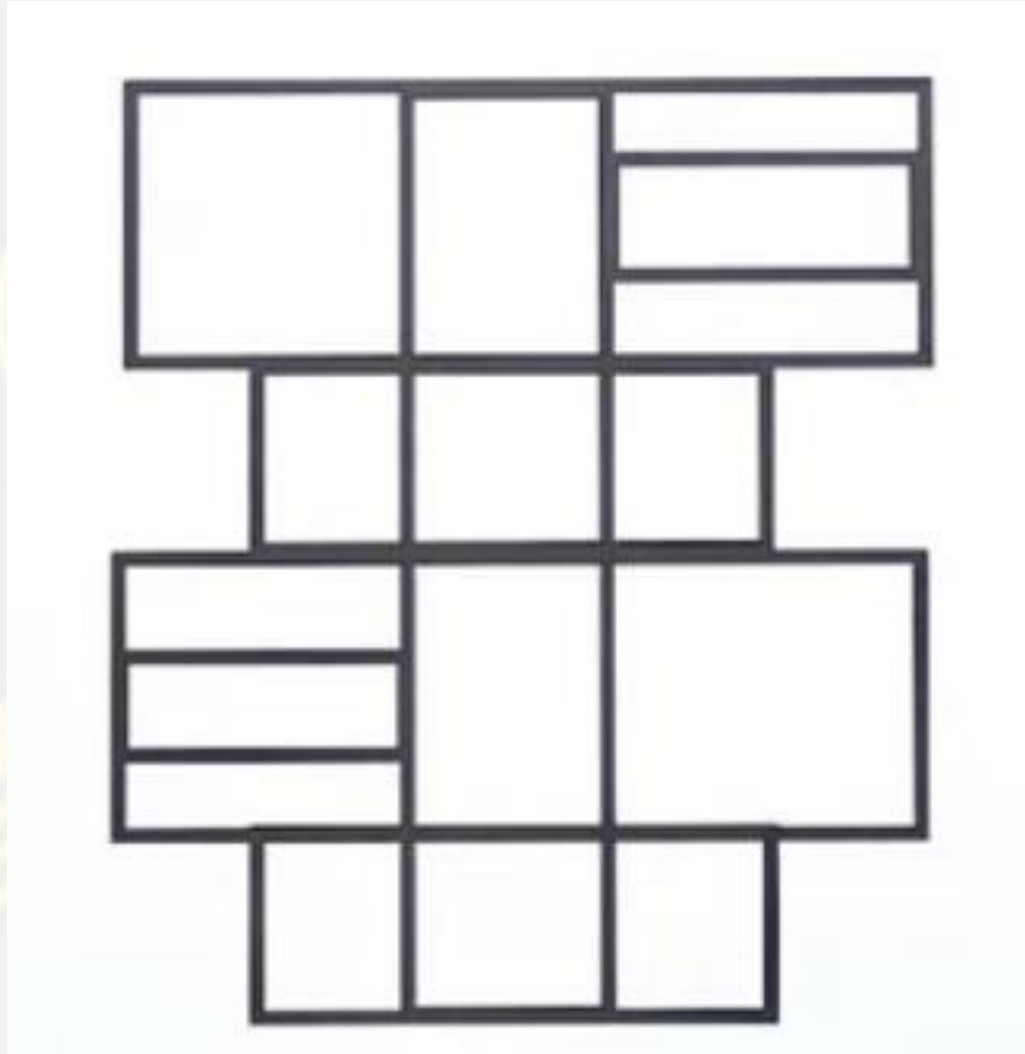
- (A) 32
- (B) 24
- (C) 28
- (D) 20

<b>4</b>	<b>5</b>	<b>6</b>	<b>8</b>
<b>92</b>			<b>11</b>
<b>58</b>	<b>37</b>	<b>?</b>	<b>16</b>



Find the RECTANGLE (?)

- (A) 44
- (B) 46
- (C) 40
- (D) 36



Find the missing ONE (?)

**DAG : 139 :: AGDH : ?**

- (A) 447**
- (B) 436**
- (C) 582**
- (D) 437**



Find the missing ONE (?)

$$C D E = 32$$

$$B H I = 88$$

$$H F D = ?$$

(A) 72

(B) 96

(C) 84

(D) 48





Find the missing ONE (?)

- (A) 1
- (B) 5
- (C) 9
- (D) 3

