

SSC GD 2021



REASONING

25 कदम

Exam की ओर.....

Figure
Counting

Day - 3



LIVE 8:30 PM





Don't Let Your Studies Get Impacted By COVID-19 Pandemic

Stay Home & Study Online With Mahendras Hybrid Model

Features



Offline Classes



Live Interactive Online Classes



Same Faculty



Same Batch



Same Batch Timing



Online Library Facility



Recorded Video



PDFs



Classes In Both Model

CONTACT US:

1800-103-5225

www.mahendras.org





UPCOMING ONLINE BATCHES

October 2021

20 Oct 2021

03:00 PM to 05:00 PM

LIVE PREMIUM GREEN CARD
(BANK-PO & CLERK)

08:00 AM to 10:00 AM

LIVE PREMIUM SILVER CARD
(SSC CGL & CHSL)

01:00 PM to 03:00 PM

LIVE CLASS CTET CARD
(CTET)

BILINGUAL

27 Oct 2021

08:00 AM to 10:00 AM

LIVE PREMIUM GREEN CARD
(BANK-PO & CLERK)

07:30 PM to 09:30 PM

LIVE PREMIUM GREEN CARD
(BANK-PO & CLERK)

10:30 AM to 12:30 PM

LIVE PREMIUM SILVER CARD
(SSC CGL & CHSL)

BILINGUAL





🌸 PUJA KUNDU 🌸 18 hours ago

THE ANS IS 24...2HAI 2 VOWEL HAI AND 4 HAI NO. OF ALPHABET....THANK YOU SIR FOR THE AMAZING SESSION 🙏🙏🙏🙏

👍 1 🗨️ REPLY

▼ [View reply from Mahendras : Online Videos For Govt. Exams](#)



Mohit 19 hours ago

Thank-you Sir For today's magical Class Session.. 🙏😊

And

Today's answer for homework is-

Option C- 24...

Read more

👍 1 🗨️ REPLY

▼ [View reply from Mahendras : Online Videos For Govt. Exams](#)



Chhavi Saxena 17 hours ago

Home work answer is option C 24

Gajab session sir Thank You 🙏🙏🙏

👍 🗨️ REPLY



-: मोहित यादव 18 hours ago

Ans:- 24

🌸 Vowel or total letter

Tq so much sir super class 🙏🙏🙏

👍 1 🗨️ REPLY

▼ [View reply from Mahendras : Online Videos For Govt. Exams](#)



SANIA _____ 18 hours ago

super duper session sir 🙏🙏
24🔥🔥🔥🔥

👍 1 🗨️ REPLY

View reply from Mahendras : Online Videos For Gov



Manidipa Mandal 19 hours ago

Options (C) 24.
Thank you sir....nice session sir 🙏🙏🙏🙏

👍 1 🗨️ REPLY

View reply from Mahendras : Online Videos For Gov



Masum Idki 😊 16 hours ago

24 options c
Very nice session 🙏🙏🙏

👍 🗨️ REPLY



puspranjan singh 19 hours ago

Good classes 🙏🙏🙏🙏🙏

👍 1 🗨️ REPLY



QUARANTINED NOOB 4 hours ago

Option c - 24 is the right answer guruji

👍 🗨️ REPLY



VEDANT yaduwanshi 1 hour ago

Homework answer 24 super sessions sir 🙏🙏🙏🙏🙏

👍 1 🗨️ REPLY



DEEKSHA SHARMA 18 hours ago

Home work answer is 24
nice session sir 🙏

👍 1 🗨️ REPLY

View reply from Mahendras : Online Videos For Govt. Exams



Abhi Vaghela 18 hours ago

Nice session sir ❤️🙏

👍 1 🗨️ REPLY

View reply from Mahendras : Online Videos For Govt. Exams



Roshni Khandelwal 18 hours ago

Answer is 24
Osm trick sir very nice session
Thank you sir

👍 1 🗨️ REPLY

View reply from Mahendras : Online Videos For Govt. Exams



#Nidhi #Study ❤️❤️ 18 hours ago

धन्यवाद सर 🙏🙏🙏🙏❤️❤️❤️

👍 1 🗨️ REPLY



Neha Singh 18 hours ago

Good evening sir

👍 1 🗨️ REPLY



riya tiwari 2 hours ago

Sir blood relation kb kraoge

👍 🗨️ REPLY



Yousuf Khan 19 hours ago

hello sir

👍 1 🗨️ REPLY



Hrithik_____ 19 hours ago

24 sare bol rahe hai mera na aaya sir 😞😞😞

👍 🗨️ REPLY

📄 View reply



future YT's 6 hours ago

24

👍 🗨️ REPLY



Shruti Jain 8 hours ago

24

👍 🗨️ REPLY



Kapil Bhagat 19 hours ago (edited)

24 2vowel total word

👍 🗨️ REPLY



shalu ji 18 hours ago

24 answer

👍 1 🗨️ REPLY

📄 View reply from Mahendras : Online Videos For Govt. Exams



bablu sharma 18 hours ago

24

👍 1 🗨️ REPLY

📄 View reply from Mahendras : Online Videos For Govt. Exams



puspranjan singh 19 hours ago

Sir aap teligram link bhaj dooo

👍 🗨️ REPLY

📄 Hide 2 replies



-: मोहित यादव 18 hours ago

@Kmdailyquizjiji

👍 🗨️ REPLY



SANIA _____ 18 hours ago

kuldeep Mahendras reasoning
reasoning Mahendras live 👍

👍 🗨️ REPLY

Find the missing one (?)

COMPUTER : 38

GIRL : 14

RACE : ?

(A) 28

(B) 22

(C) 24

(D) 30



Find the missing :-

VINIT = 49490,

HARSHIT = 8189890

SOYA = ?

(A) 95101

(C) 95110

(B) 95011

(D) 90511



Find the missing :-

24896 = ADMIN

1375 = CURE

21245891 = ?



(A) ACADEMRY

(C) ACAMIRE

(B) ACADEMIC

(D) ACACEMID

Find the missing :-

WATSON = 112843

JOHN = 1483

PONTING = ?

(A) 4432937

(C) 5342937

(B) 5432936

(D) 5432937



Find the missing :-

CARD = 20

TEA = 12

PARENTS = ?



(A) 32

(C) 76

(B) 56

(D) 121

Find the missing :-

WIN = 18

SIP = 12

TOY = ?

(A) 5

(C) 15

(B) 10

(D) 20



Find the missing :-

DRAWING = 83

TOOLS = 86

DESIGN = ?

(A) 64

(C) 65

(B) 63

(D) 52



Find the missing :-

SACHIN = 311598

DRAVID = ?

(A) 184495

(C) 194494

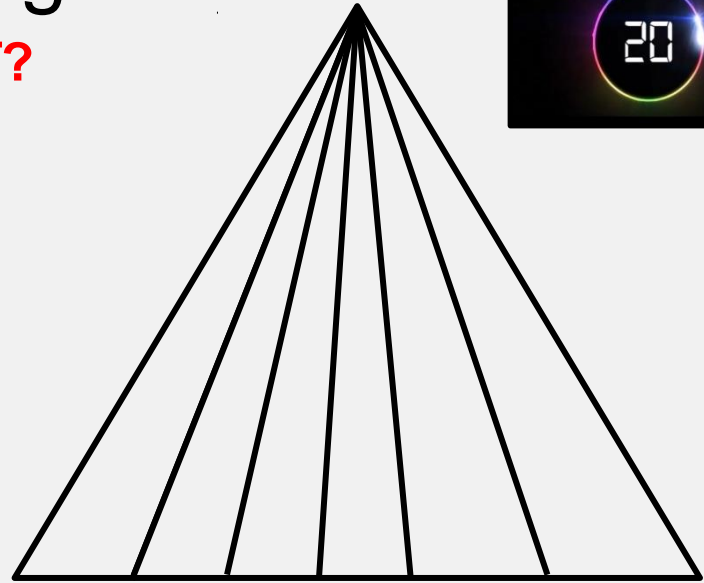
(B) 194495

(D) 49149



Find number of triangle in figure?

दी गई आकृति में त्रिभुज की संख्या ज्ञात कीजिए?



(A) 20

(B) 24

(C) 21

(D) 23

Find number of triangle in figure?

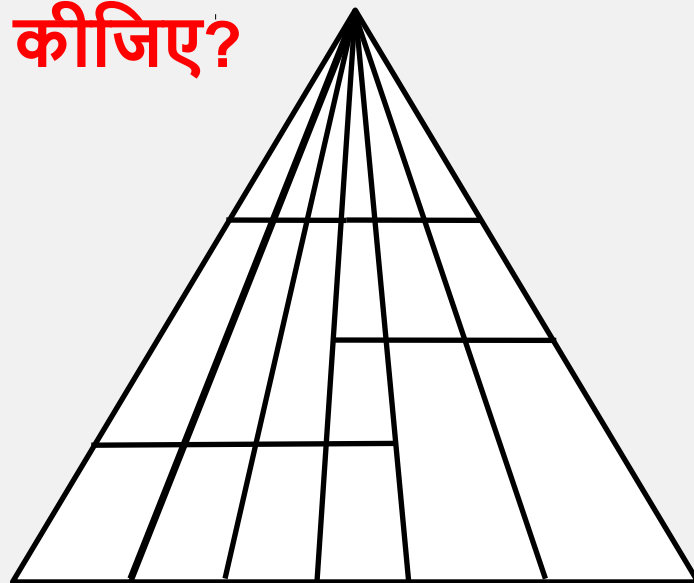
दी गई आकृति में त्रिभुज की संख्या ज्ञात कीजिए?

(A) 50

(B) 42

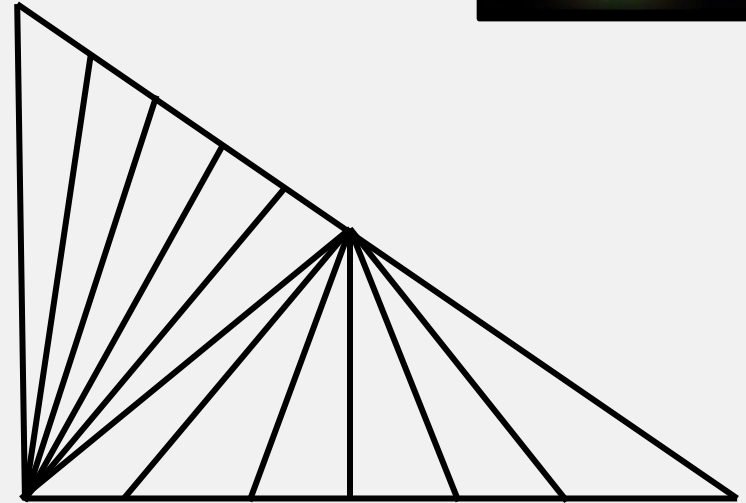
(C) 58

(D) NOT



Find number of triangle in given figure ?

दी गई आकृति में त्रिभुज की संख्या ज्ञात कीजिए?



- (A) 32
- (B) 27
- (C) 41
- (D) 37

Find number of triangle in given figure ?

दी गई आकृति में त्रिभुज की संख्या ज्ञात कीजिए?

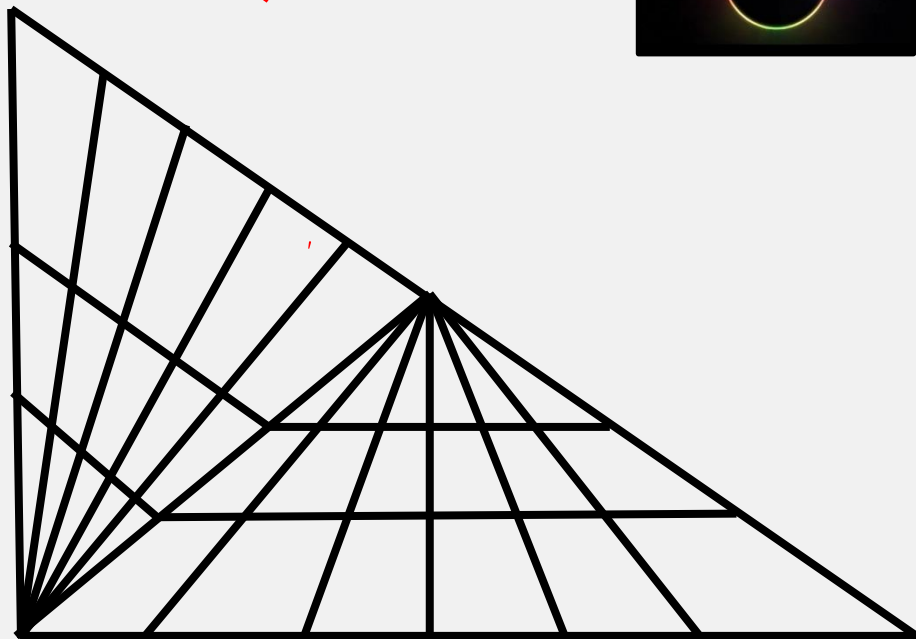


(A) 109

(B) 113

(C) 96

(D) NOT



Find number of triangle in the given figure ?

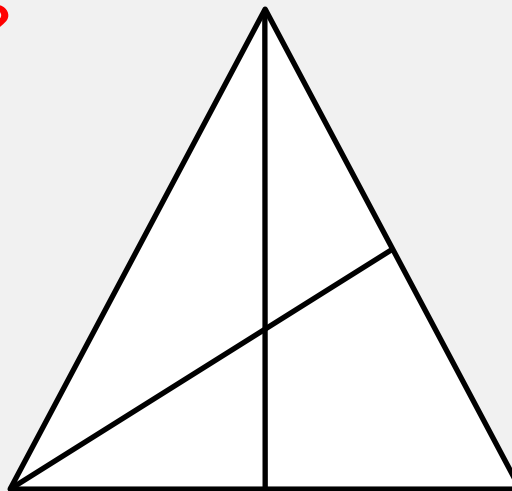
दी गई आकृति में त्रिभुज की संख्या ज्ञात कीजिए?

(A) 20

(B) 8

(C) 28

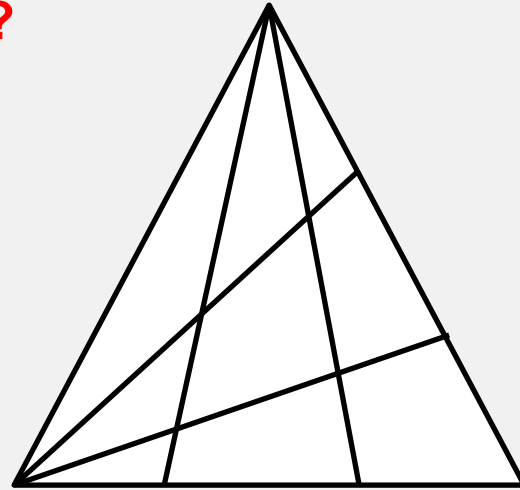
(D) 16



Find number of triangle in the given figure ?

दी गई आकृति में त्रिभुज की संख्या ज्ञात कीजिए?

- (A) 27**
- (B) 28**
- (C) 29**
- (D) NOT**

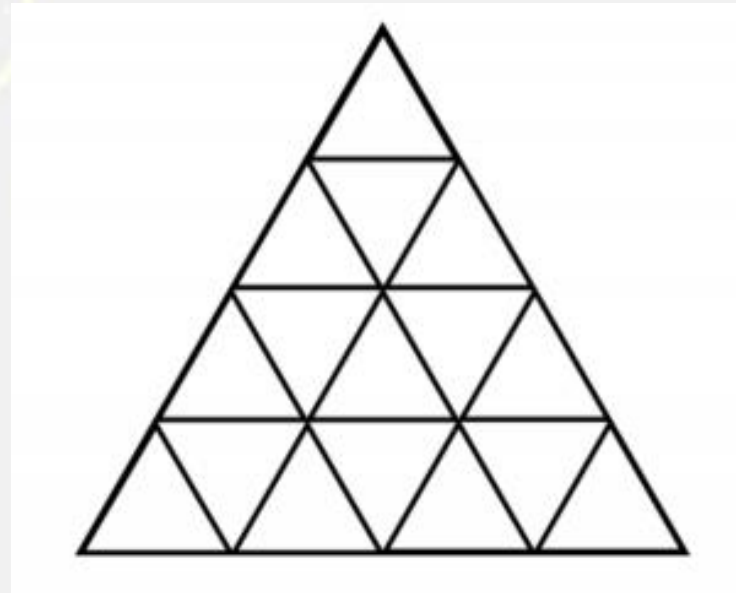


Find number of triangle in figure?

दी गई आकृति में त्रिभुज की संख्या ज्ञात कीजिए?



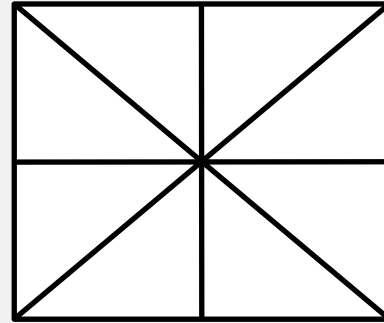
- (A) 27
- (B) 26
- (C) 16
- (D) 23



Find number of triangle in the given figure ?

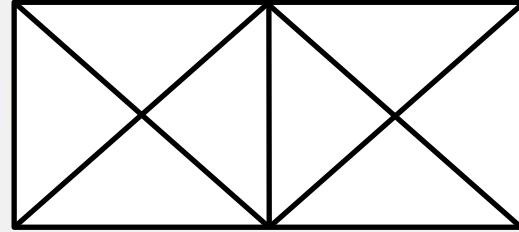
दी गई आकृति में त्रिभुज की संख्या ज्ञात कीजिए?

- (A) 20**
- (B) 18**
- (C) 28**
- (D) 16**



Find number of triangle in the given figure ?

दी गई आकृति में त्रिभुज की संख्या ज्ञात कीजिए?



- (A) 20**
- (B) 18**
- (C) 28**
- (D) 16**




Count the number of triangles and squares in the given figure.

(A) 28 triangles, 3 squares

(B) 24 triangles, 5 squares

(C) 28 triangles, 5 squares

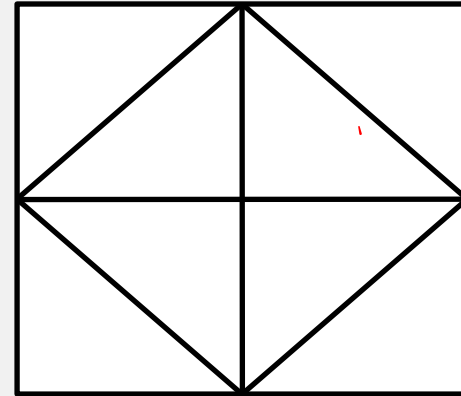
(D) 24 triangles, 3 squares



Find number of triangle in the given figure ?

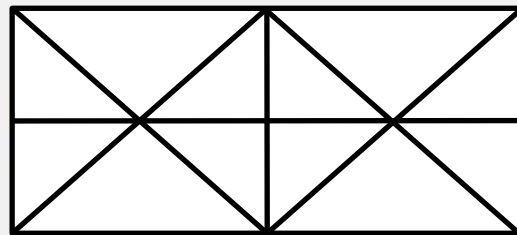
दी गई आकृति में त्रिभुज की संख्या ज्ञात कीजिए?

- (A) 12**
- (B) 18**
- (C) 28**
- (D) 16**



Find number of triangle in the given figure ?

दी गई आकृति में त्रिभुज की संख्या ज्ञात कीजिए?



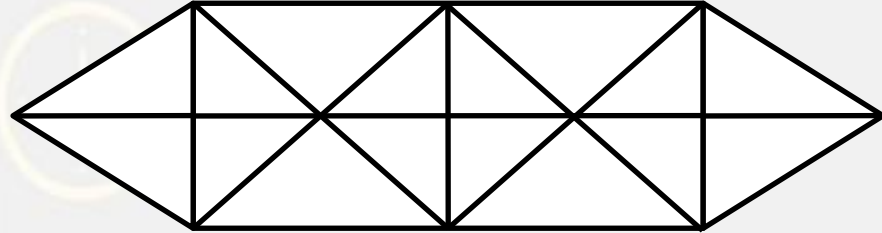
- (A) 20
- (B) 28
- (C) 30
- (D) 16



Find number of triangle in the given figure ?

दी गई आकृति में त्रिभुज की संख्या ज्ञात कीजिए?

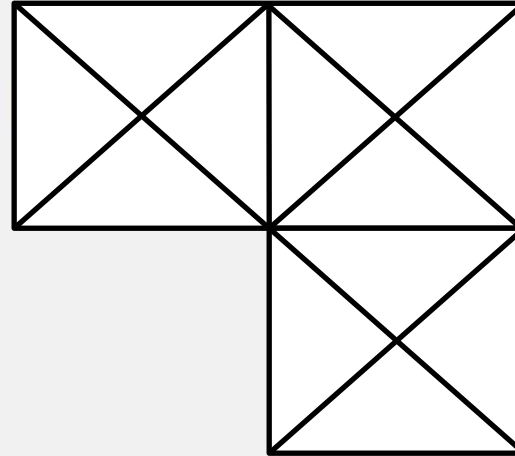
- (A) 20**
- (B) 38**
- (C) 28**
- (D) 36**



Find number of triangle in the given figure ?

दी गई आकृति में त्रिभुज की संख्या ज्ञात कीजिए?

- (A) 20**
- (B) 28**
- (C) 29**
- (D) 30**



Find number of Triangle in the given figure ?

दी गई आकृति में त्रिभुज की संख्या ज्ञात कीजिए?

- (A) 40
- (B) 41
- (C) 44
- (D) 38

