



 *Mahendra's*

UP Police कांस्टेबल

REASONING

LIVE EXAM



 **4:00 PM**

LIVE 



Don't Let Your Studies Get Impacted By COVID-19 Pandemic

Stay Home & Study Online With Mahendras Hybrid Model

Features



Offline Classes



Live Interactive Online Classes



Same Faculty



Same Batch



Same Batch Timing



Online Library Facility



Recorded Video



PDFs



Classes In Both Model

CONTACT US:

1800-103-5225

www.mahendras.org





UPCOMING ONLINE BATCHES

February 2022

02 Feb 2022

08:00 AM to 10:00 AM
BANK ONLINE LIVE CLASS

05:30 PM to 07:30 PM
BANK ONLINE LIVE CLASS

01:00 PM to 03:00 PM
SSC ONLINE LIVE CLASS

10:30 AM to 12:30 PM
SSC ONLINE LIVE CLASS

BILINGUAL

09 Feb 2022

10:30 AM to 12:30 PM
BANK ONLINE LIVE CLASS

03:00 PM to 05:00 PM
BANK ONLINE LIVE CLASS

05:30 PM to 07:30 PM
SSC ONLINE LIVE CLASS

BILINGUAL

16 Feb 2022

01:00 PM to 03:00 PM
BANK ONLINE LIVE CLASS

08:00 AM to 10:00 AM
BANK ONLINE LIVE CLASS

07:30 PM to 09:30 PM
SSC ONLINE LIVE CLASS

03:00 PM to 05:00 PM
SSC ONLINE LIVE CLASS

BILINGUAL

23 Feb 2022

10:30 AM to 12:30 PM
BANK ONLINE LIVE CLASS

08:00 AM to 10:00 AM
SSC ONLINE LIVE CLASS

01:00 PM to 03:00 PM
SSC ONLINE LIVE CLASS

BILINGUAL

08:00 AM to 10:00 AM
SSC ONLINE LIVE CLASS
(SSC CGL & CHSL)

ENGLISH MEDIUM

07:30 PM to 09:30 PM
BANK ONLINE LIVE CLASS
(BANK PO & CLERK)

ENGLISH MEDIUM



Viśhñù Güptâ 3 hours ago

343 is the right ans very super nice session sir Thank you 🙏 sir

     [REPLY](#)

[View reply from Mahendras : Online Videos For Govt. Exams](#)



Tannu PSN 13 hours ago

Hindi language sir

     [REPLY](#)



Piyush Rai 13 hours ago

343

     [REPLY](#)

[View reply from Mahendras : Online Videos For Govt. Exams](#)



ANNU LATA 9 hours ago

343 is right ans

     [REPLY](#)

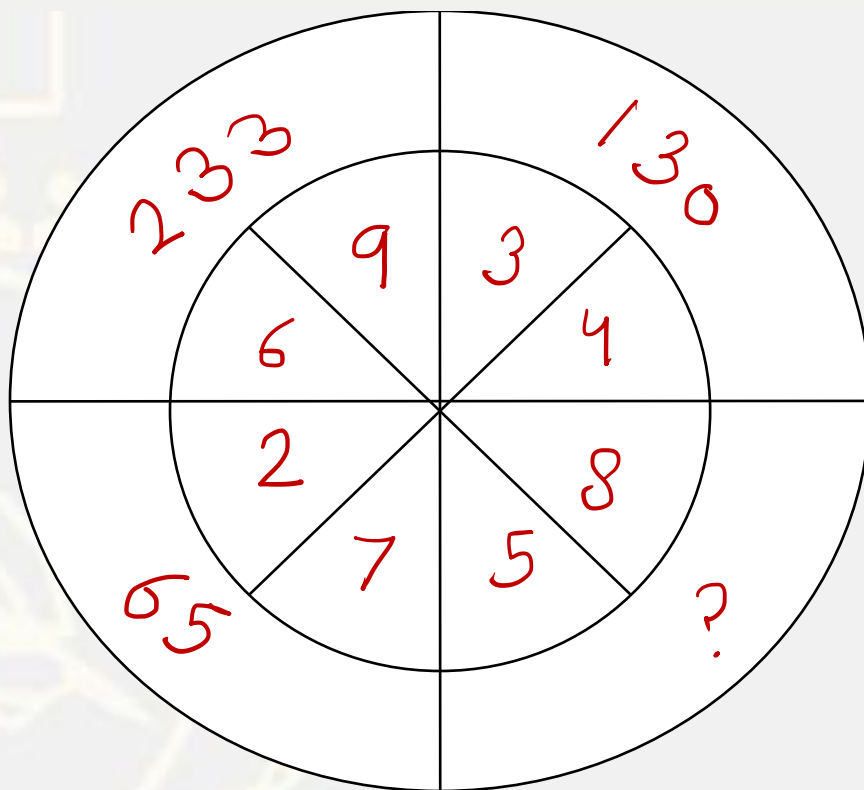
[View reply from Mahendras : Online Videos For Govt. Exams](#)



Shruti Jain 37 minutes ago

Skip

     [REPLY](#)



- (A) 300
- (B) 343
- (C) 306
- (D) 204

Find the odd :-

- (A) 153**
- (B) 57**
- (C) 54**
- (D) 178**



Find the missing :-

15 , 40 , 184

- (A) 37 , 57 , 191**
- (B) 65 , 80 , 224**
- (C) 24 , 49 , 193**
- (D) 10 , 45 , 179**



Pointing to a girl , Dr. Mahii Said , “ She is the only daughter of my grandfather’s only child .” How is the girl related to Dr. Mahi ?

एक लड़की की ओर इशारा करते हुए, डॉ माही ने कहा, "वह मेरे दादा की इकलौती संतान की इकलौती बेटी है।" लड़की का डॉ माही से क्या संबंध है ?

- (A) Sister
- (B) Niece
- (C) Daughter
- (D) Brother



Find the missing :-

207 : 23 :: 405 : ?

- (A) 47**
- (B) 43**
- (C) 45**
- (D) 49**



Find the missing :-

1. 47
2. 44
3. 53
4. 58


15	32	59
27	?	71
33	50	77



Find the number of RECTANGLE in the given figure.

दिए गए आंकड़े में की संख्या ज्ञात कीजिए।

- A. 8
- B. 9
- C. 10
- D. 7



Choose the word which is different from the rest.

- A. 5934**
- B. 248**
- C. 3716**
- D. 138**



Choose the word which is different from the rest.

- A. TF**
- B. RH**
- C. XB**
- D. DW**



Question: How many students in a class play football ?

Statements:

Only boys play football.

There are forty boys and thirty girls in the class.

प्रश्न: एक कक्षा में कितने छात्र फुटबॉल खेलते हैं?

कथन:

केवल लड़के फुटबॉल खेलते हैं।

कक्षा में चालीस लड़के और तीस लड़कियां हैं।



Find the option which should replace (?)

Carbon : Diamond :: Corundum : ?

कार्बन: हीरा :: कोरुन्डम:?

A. Garnet / गहरा लाल रंग

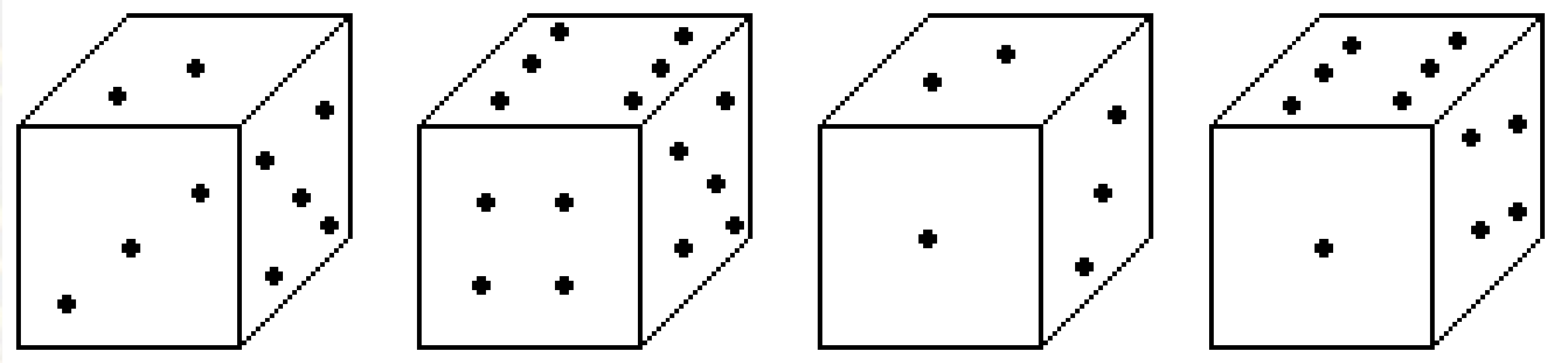
B. Ruby / माणिक

C. Pukhraj / पुखराज

D. Pearl / मोती



How many points will be on the face opposite to in face which contains 2 points?
 चेहरे के विपरीत चेहरे पर कितने बिंदु होंगे जिसमें 2 अंक शामिल हैं?

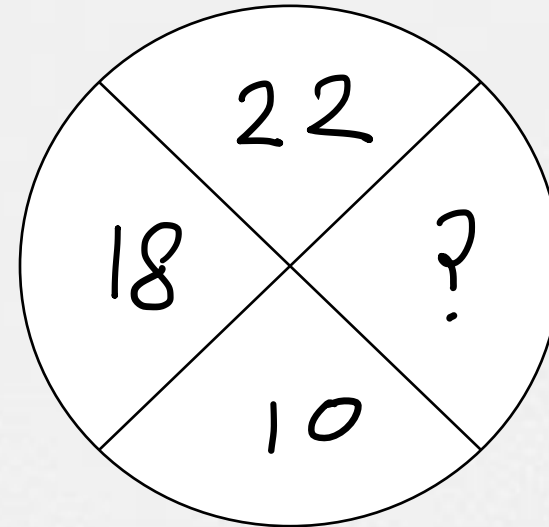
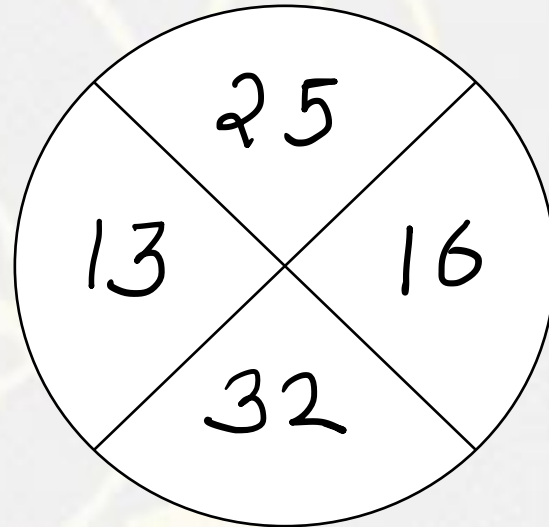


- A.1
- B.5
- C.4
- D.6



Find the missing one (?)

- A. 19
- B. 10
- C. 14
- D. 12



A man types counting from 1 to 250 by board . Then how many times he presses the buttons of board?

एक व्यक्ति बोर्ड द्वारा 1 से 250 तक की गिनती टाइप करता है। फिर वह कितनी बार बोर्ड के बटन दबाता है?

- (A) 642
- (B) 500
- (C) 750
- (D) 250



Choose the odd one.

- (A) 1 / 2**
- (B) 1 / 3**
- (C) 1 / 4**
- (D) 1 / 5**



Find the option which should replace (?)

B : 16 :: D : ?

- (A) 64
- (B) 120
- (C) 256
- (D) 128

