



Don't Let Your Studies Get Impacted By COVID-19 Pandemic

Stay Home & Study Online With Mahendras Hybrid Model

Features



Offline Classes



Live Interactive Online Classes



Same Faculty



Same Batch



Same Batch Timing



Online Library Facility



Recorded Video



PDFs



Classes In Both Model

CONTACT US:

1800-103-5225

www.mahendras.org





UPCOMING ONLINE BATCHES

JULY 2021

07 July 2021

08:00 AM to 10:00 AM

**LIVE PREMIUM
GREEN CARD**
(BANK-PO & CLERK)

BILINGUAL

14 July 2021

10:30 AM to 12:30 PM

LIVE PREMIUM SILVER CARD
(CGL & CHSL)

03:00 PM to 05:00 PM

LIVE PREMIUM STATE CARD
(UPSSSC PET)

10:30 AM to 02:00 PM

IBPS CLERK PRELIMS 2021
(CRASH COURSE)

BILINGUAL

21 July 2021

01:00 PM to 03:00 PM

LIVE PREMIUM GREEN CARD
(IBPS RRB PO/CLERK PRE + MAINS)

06:30 PM to 09:30 PM

IBPS CLERK PRELIMS 2021
(CRASH COURSE)

BILINGUAL

28 July 2021

01:00 PM to 03:00 PM

LIVE PREMIUM BRONZE CARD
(TET)

07:30 PM to 09:30 PM

LIVE PREMIUM GREEN CARD
(IBPS PO & CLERK)

08:00 AM to 10:00 AM

LIVE PREMIUM SILVER CARD
(SSC CGL & CHSL)

08:00 AM to 11:30 AM

IBPS CLERK PRELIMS 2021
(CRASH COURSE)

BILINGUAL



 *Mahendra's*

IBPS Clerk Prelims 2021

Crash Course

Batch Starts July 14, 2021

10:30 AM To 02:00 PM

LIVE CLASS



Bilingual

 *Mahendra's*

IBPS Clerk Prelims 2021

Crash Course

Batch Starts July 28, 2021

08:00 AM To 11:30 AM

LIVE CLASS



Bilingual



IBPS Clerk Prelims 2021

Crash Course

Batch Starts July 21, 2021

06:30 PM To 09:30 PM

LIVE CLASS



Bilingual

The Staff Selection Commission has decided to re-schedule its following examinations as per the details given below:

S. No.	Name of Examination	Revised Schedule
1.	Sub-Inspector in Delhi Police, CAPFs and ASI in CISF Examination (Paper-II), 2019	26.07.2021
2.	Combined Higher Secondary (10+2) Level Examination (Tier-I), 2020 - For left-over candidates	04.08.2021-12.08.2021
3.	Combined Graduate Level Examination (Tier-I), 2020	13.08.2021-24.08.2021



Ninja 19 hours ago

Previous prime no Ka add Kiya hai ya logic hai

27 Ka phale previous prime no 23

8 Ka phale previous prime no 7

$(23+7) = 30$

Show less

👍 🗨️ REPLY

View reply from Mahendras : Online Videos For Govt. Exams



Your success by Ak Sinha 16 hours ago

Sir hamne abhi bank ki preparation start ki hai sir reasoning ki book kaunsi pade please sir

🙏🙏🙏🙏🙏🙏🙏🙏🙏🙏🙏🙏

👍 🗨️ REPLY



GUDIYA SHARMA GUDIYA SHARMA 13 hours ago

$23+7(30)$

👍 🗨️ REPLY



Radha Garima 19 hours ago

Answer : 30

Cool session sir 🙏🙏

👍 🗨️ REPLY

View reply from Mahendras : Online Videos For Govt. Exams



Satyam Pandey 3 hours ago

Xuperb session sir 🙏🙏❤️

👍 🗨️ REPLY



GUDIYA SHARMA GUDIYA SHARMA 13 hours ago

Sir apki class super rahti always YouTube pe

👍 🗨️ REPLY



GUDIYA SHARMA GUDIYA SHARMA 13 hours ago

Sir apki class super rahti always YouTube pe

👍 🗨️ REPLY



sarita rawat 19 hours ago

Homework answer

Option (B) 30.....

Very awesome session sir 🙏🙏🙏🙏

Thanku so much sir 🙏

👍 🗨️ REPLY

View reply from Mahendras : Online Videos For Govt. Exams



Abhi Vaghela 11 hours ago

Rapid session sir ❤️ nice session ❤️❤️❤️

👍 🗨️ REPLY



barbie dancer 21 hours ago

Class osssmmm thi sir 🙏🙏

👍 🗨️ REPLY

View reply from Mahendras : Online Videos For Govt. Exams



Manidipa Mandal 19 hours ago

Answer- Option (B) 30.

Thank you sir.....Nice session sir.. 🙏🙏🙏🙏

👍 🗨️ REPLY

View reply from Mahendras : Online Videos For Govt. Exams



vaibhav sahu 13 hours ago

30 ans is right 🙏🙏🙏🙏🙏 thanq sir ji 🙏🙏

👍 🗨️ REPLY



vaibhav sahu 13 hours ago

30 ans is right 🙏🙏🙏🙏🙏 thanq sir ji 🙏🙏

👍 🗨️ REPLY



Sania S 19 hours ago

nice session sir 🙏🙏🙏

$23+7=30$ 🙏🙏🙏🙏🙏

👍 🗨️ REPLY

▼ [View reply from Mahendras : Online Videos For Govt. Exams](#)



Adarsh Nayak 21 hours ago

21

👍 🗨️ REPLY

▼ [View reply from Mahendras : Online Videos For Govt. Exams](#)



Sunny Gupta 21 hours ago

26

👍 🗨️ REPLY

▼ [View reply from Mahendras : Online Videos For Govt. Exams](#)



PUJA KUNDU 18 hours ago

THE CORRECT ANSWER IS $30(23+7)$SUPERB SESSION SIR 🙏🙏🙏.....THANK YOU SOO

👍 🗨️ REPLY

▼ [View reply from Mahendras : Online Videos For Govt. Exams](#)



Roshni Khandelwal 17 hours ago

Answer is 30

Thank you sir

👍 🗨️ REPLY



vipul D 16 hours ago

nice session sir 🙏🙏

👍 🗨️ REPLY



Preeti rajput 16 hours ago

30

opp-b

👍 🗨️ REPLY

▼ [View reply from Mahendras : Online Videos For Govt. Exams](#)



Shivam Kumar 18 hours ago

30is right Answer sir ek hi time pr meri 2 class ho gyi esliye ye live class nhi le pa rha hu aaj

👍 🗨️ REPLY

▼ [View reply from Mahendras : Online Videos For Govt. Exams](#)



nikita Chauhan 19 hours ago

Homework ANS -----

Option CCC

👍 1 🗨️ REPLY

▼ [View reply from Mahendras : Online Videos For Govt. Exams](#)



Preeti 5 hours ago

30 ans is right

👍 🗨️ REPLY



Abhishek Pandey 17 hours ago

answer is 21

👍 🗨️ REPLY

Find the option which should replace (?)

$$10 + 7 = 12$$

$$25 + 3 = 25$$

$$27 + 8 =$$

- (A) 21
- (B) 30
- (C) 39
- (D) 26



DICE

REASONING

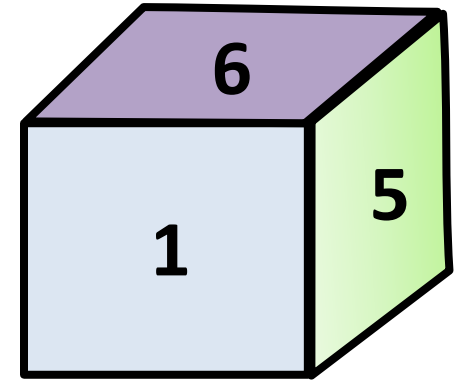
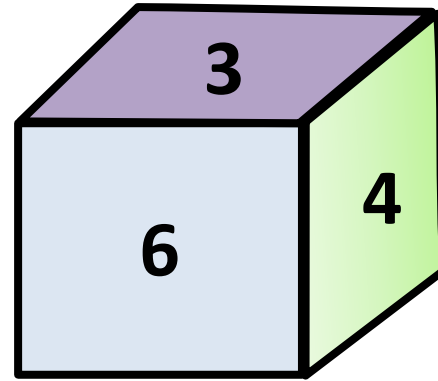
Q.: Two positions of dice are shown. What will appear on the opposite to the face containing 5? पासा की दो स्थितियां दिखाई गई हैं तो ज्ञात कीजिए की 5 के विपरीत सतह पर क्या होगा?

(A) 3

(B) 2

(C) 1

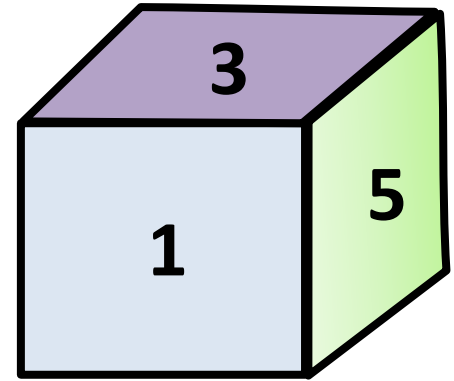
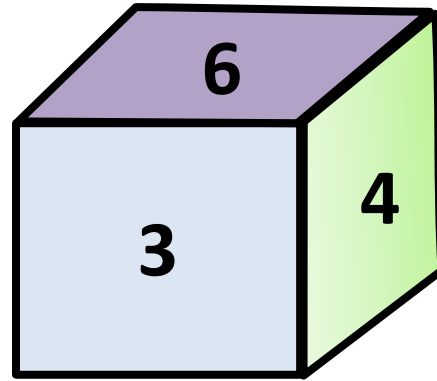
(D) 4



Q.: Two positions of dice are shown. What will appear on the opposite to the face containing 3? पासा की दो स्थितियां दिखाई गई हैं तो ज्ञात कीजिए की 3 के विपरीत सतह पर क्या होगा?

- (A) 3
- (C) 1

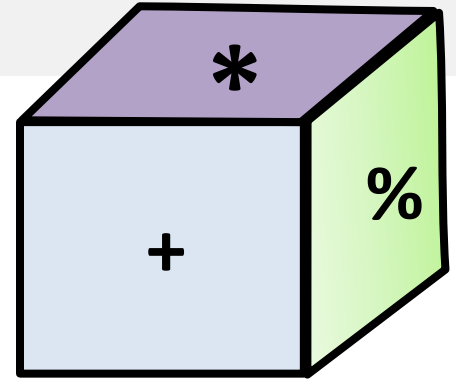
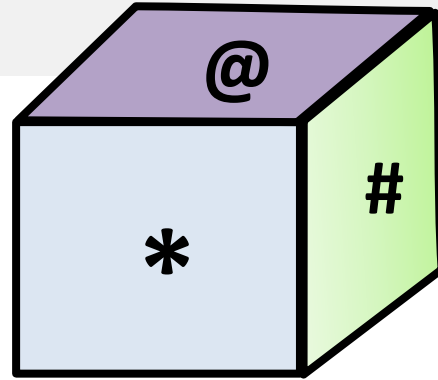
- (B) 2
- (D) 4



Q.: Two positions of dice are shown. What will appear on the opposite to the face containing * ? पासा की दो स्थितियां दिखाई गई है तो ज्ञात कीजिए की * के विपरीत सतह पर क्या होगा?

(A) @
(C) \$

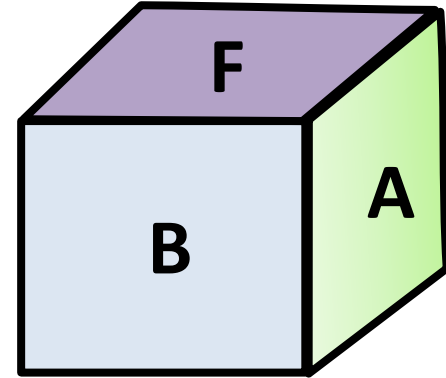
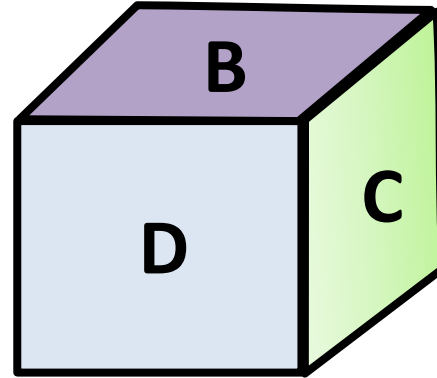
(B) %
(D) CND



Q.: Two positions of dice are shown using A to F letters. What will appear on the opposite to the face containing B? पासा की दो स्थितियां A से F तक दिखाई गई है तो ज्ञात कीजिए की B के विपरीत सतह पर क्या होगा?

**(A) F
(C) E**

**(B) C
(D) CND**



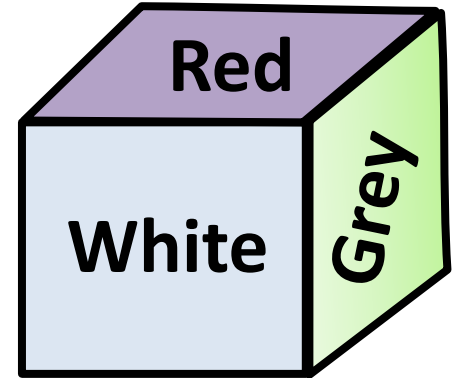
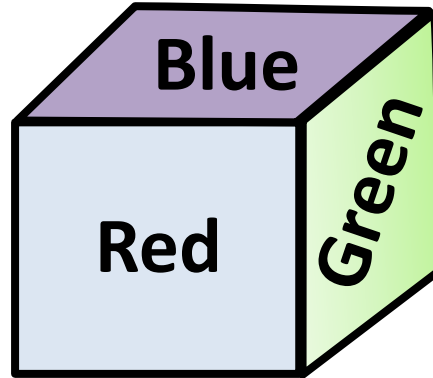
Q.: Two positions of dice are shown. What will appear on the opposite to the face containing Brown? पासा की दो स्थितियां दिखाई गई है तो ज्ञात कीजिए की 'BROWN' के विपरीत सतह पर क्या होगा?

(A) Blue

(B) White

(C) Red

(D) Green



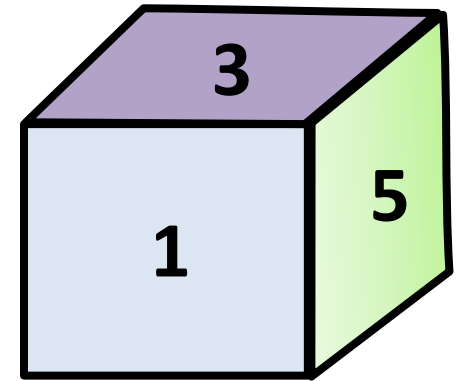
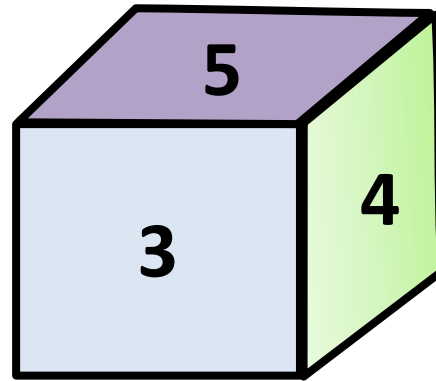
Q.: Two positions of dice are shown. What will appear on the opposite to the face containing 4? पासा की दो स्थितियां दिखाई गई हैं तो ज्ञात कीजिए की 4 के विपरीत सतह पर क्या होगा?

(A) 3

(B) 2

(C) 1

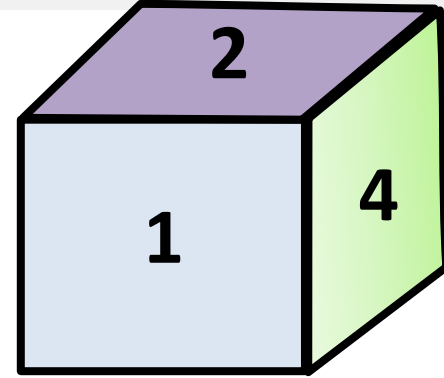
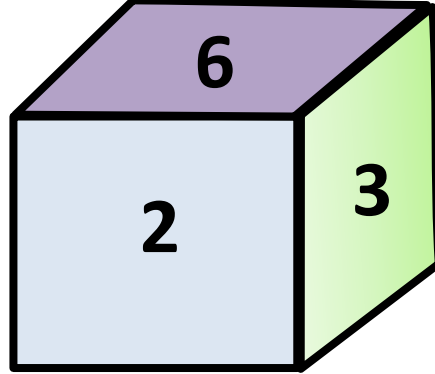
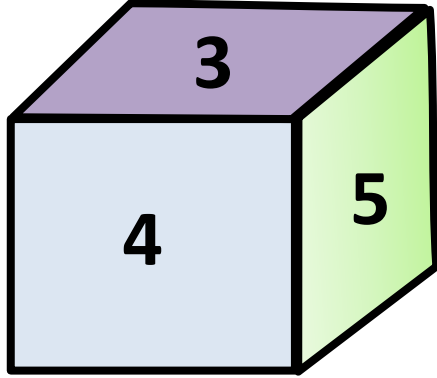
(D) 5



Q.: Three positions of dice are shown. What will appear on the opposite to the face containing 2? पासा की तीन स्थितियां दिखाई गई हैं तो ज्ञात कीजिए की 2 के विपरीत सतह पर क्या होगा?

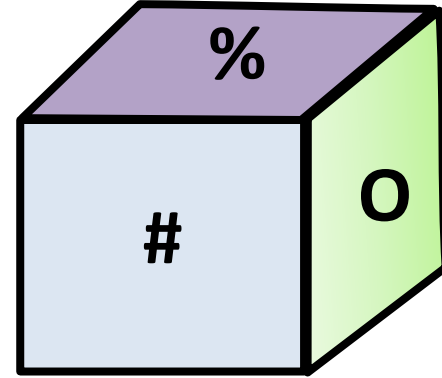
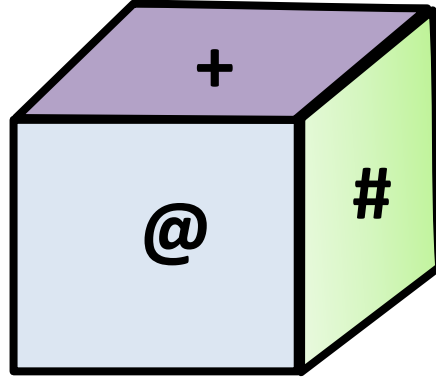
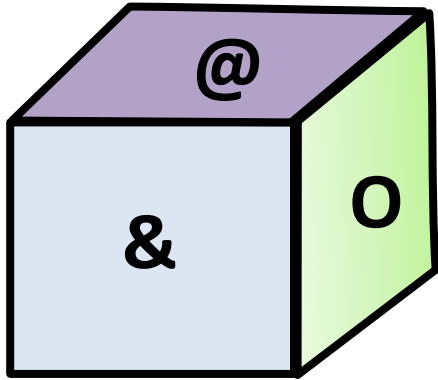
- (A) 3
(C) 1

- (B) 5
(D) 6



Q.: Three positions of dice are shown. What will appear on the opposite to the face containing O? पासा की तीन स्थितियां दिखाई गई हैं तो ज्ञात कीजिए की 'O' के विपरीत सतह पर क्या होगा?

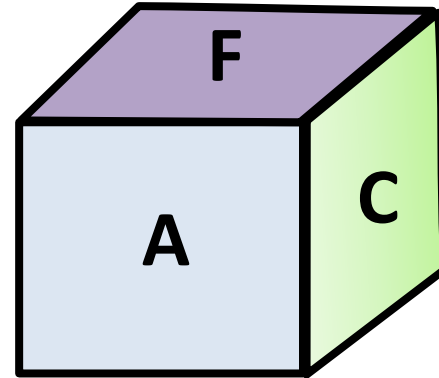
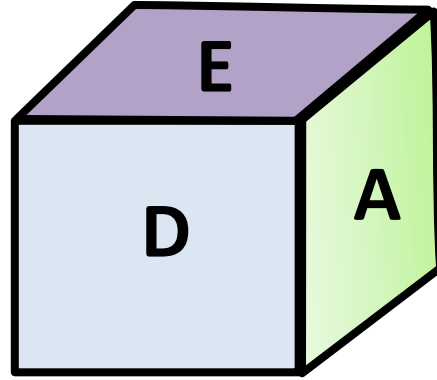
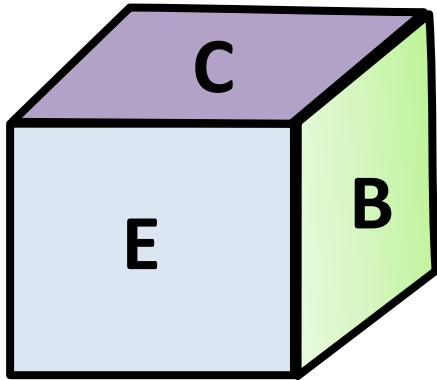
- (A) # (B) +
(C) % (D) &



Q.: Three positions of dice are shown. What will appear on the opposite to the face containing A? पासा की तीन स्थितियां दिखाई गई है तो ज्ञात कीजिए की A के विपरीत सतह पर क्या होगा?

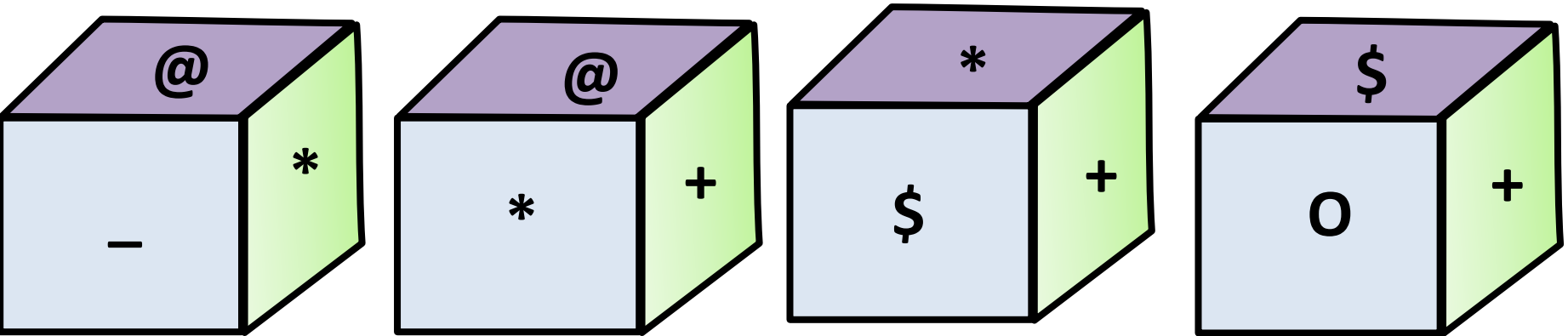
(A) C
(C) E

(B) D
(D) B



Q.: Four positions of dice are shown. What will appear on the opposite to the face containing O? पासा की चार स्थितियां दिखाई गई हैं तो ज्ञात कीजिए की 'O' के विपरीत सतह पर क्या होगा?

- (A) * (B) \$
(C) @ (D) +



Q.14: From the four positions of a dice given below, find the colour which is opposite to Violet ? : पासा की चार स्थितियां दिखाई गई है तो ज्ञात कीजिए की बैंगनी के विपरीत सतह पर क्या होगा?

- (A) Red (B) Yellow
(C) Blue (D) White

