

RRB NTPC CBT 2/GROUP D



REASONING

अबकी बार **RAILWAY** पार

Complete Revision



LIVE 7:30 PM





Don't Let Your Studies Get Impacted By COVID-19 Pandemic

Stay Home & Study Online With Mahendras Hybrid Model

Features



Offline Classes



Live Interactive Online Classes



Same Faculty



Same Batch



Same Batch Timing



Online Library Facility



Recorded Video



PDFs



Classes In Both Model

CONTACT US:

1800-103-5225

www.mahendras.org





UPCOMING ONLINE BATCHES

December 2021

01 Dec 2021

08:00 AM to 10:00 AM

LIVE PREMIUM GREEN CARD
(BANK-PO & CLERK)

05:30 PM to 07:30 PM

LIVE PREMIUM GREEN CARD
(BANK-PO & CLERK)

01:00 PM to 03:00 PM

LIVE PREMIUM SILVER CARD
(SSC CGL & CHSL)

BILINGUAL

08 Dec 2021

10:30 AM to 12:30 PM

LIVE PREMIUM GREEN CARD
(BANK-PO & CLERK)

03:00 PM to 05:00 PM

LIVE PREMIUM GREEN CARD
(BANK-PO & CLERK)

08:00 AM to 10:00 AM

LIVE PREMIUM SILVER CARD
(SSC CGL & CHSL)

BILINGUAL

15 Dec 2021

01:00 PM to 03:00 PM

LIVE PREMIUM GREEN CARD
(BANK-PO & CLERK)

10:30 AM to 12:30 PM

LIVE PREMIUM SILVER CARD
(SSC CGL & CHSL)

BILINGUAL

22 Dec 2021

08:00 AM to 10:00 AM

LIVE PREMIUM GREEN CARD
(BANK-PO & CLERK)

07:30 PM to 09:30 PM

LIVE PREMIUM SILVER CARD
(SSC CGL & CHSL)

BILINGUAL

29 Dec 2021

10:30 AM to 12:30 PM

LIVE PREMIUM GREEN CARD
(BANK-PO & CLERK)

07:30 PM to 09:30 PM

LIVE PREMIUM GREEN CARD
(BANK-PO & CLERK)

03:00 PM to 05:00 PM

LIVE PREMIUM SILVER CARD
(SSC CGL & CHSL)

BILINGUAL



RRB NTPC Stage-2 Exam Pattern

Sections	No. of Questions	Total Marks	Duration
Mathematics	35	35	90 minutes
General Intelligence and Reasoning	35	35	
General Awareness	50	50	
Total	120	120	



🍁 PUJA KUNDU 🍁 16 hours ago

The ans is $30(15+16-1)$superb session sir🔥🔥...thank you for the session sir 🙏🙏🙏🙏

👍 1 🗨️ REPLY

👇 [View reply from Mahendras : Online Videos For Govt. Exams](#)



Pronoti Biswas 15 hours ago

The homework ans is $(15+16)-1=30$
Thanks for the session sir.

👍 1 🗨️ REPLY

👇 [View reply from Mahendras : Online Videos For Govt. Exams](#)



Nadeem 15 hours ago

🌸 Home work 🌸

🌸 Answer :- 30

🌸 Nice Session Sir ❤️ 🌸

👍 1 🗨️ REPLY

👇 [View reply from Mahendras : Online Videos For Govt. Exams](#)



RASHMI SONI RASHMI SONI 16 hours ago

$30_{,,,}16+15-1_{,,,}$

V USEFUL SESSION 😊

👍 🗨️ REPLY

👇 [View reply from Mahendras : Online Videos For Govt. Exams](#)



Viśhñù Güptâ 16 hours ago

30 is the right ans very dhashu session sir thank you 🙏❤️ sir

👍 1 🗨️ REPLY

➤ [View reply from Mahendras : Online Videos For Govt. Exams](#)



Radha Garima 14 hours ago

Answer; 30

Nice session sir 🙏🙏

👍 1 🗨️ REPLY

➤ [View reply from Mahendras : Online Videos For Govt. Exams](#)



Ankit Vish 16 hours ago

Answer. 30

Very nice session sir 🙏🙏

👍 1 🗨️ REPLY

➤ [View reply from Mahendras : Online Videos For Govt. Exams](#)



SANIA _____ 8 hours ago

mast session sir 🙏🙏

30 🔥🔥🔥

👍 1 🗨️ REPLY

➤ [View reply from Mahendras : Online Videos For Govt. Exams](#)



Shruti Jain 5 hours ago

30 nice session sir.

1 REPLY

[View reply from Mahendras : Online Videos For Govt. Exams](#)



Preeti 16 hours ago

$16+15-1=30$

1 REPLY

[View reply from Mahendras : Online Videos For Govt. Exams](#)



Deepali Yadav 1 hour ago

$(15+16-1) = 30$ homework ans...

REPLY



Chhavi Saxena 16 hours ago

Home work answer is 30

1 REPLY

[View reply from Mahendras : Online Videos For Govt. Exams](#)



Raj Roy 16 hours ago

good evening dada



puspranjan singh 16 hours ago

30

2 REPLY

[View reply from Mahendras : Online Videos For Govt. Exams](#)



Devesh Trivedi 15 hours ago

30 Right answer

1 REPLY

[View reply from Mahendras : Online Videos For Govt. Exams](#)



Kapil Bhagat 16 hours ago

30

REPLY



Shahzada Jalal 12 hours ago

a

REPLY



Hrithik_____ 8 hours ago

30

1 REPLY

[View reply from Mahendras : Online Videos For Govt. Exams](#)



Masum Idki 🤔 15 hours ago

30



1



REPLY

▼ [View reply from Mahendras : Online Videos For Govt. Exams](#)



Sonu Pal 16 hours ago

30



1



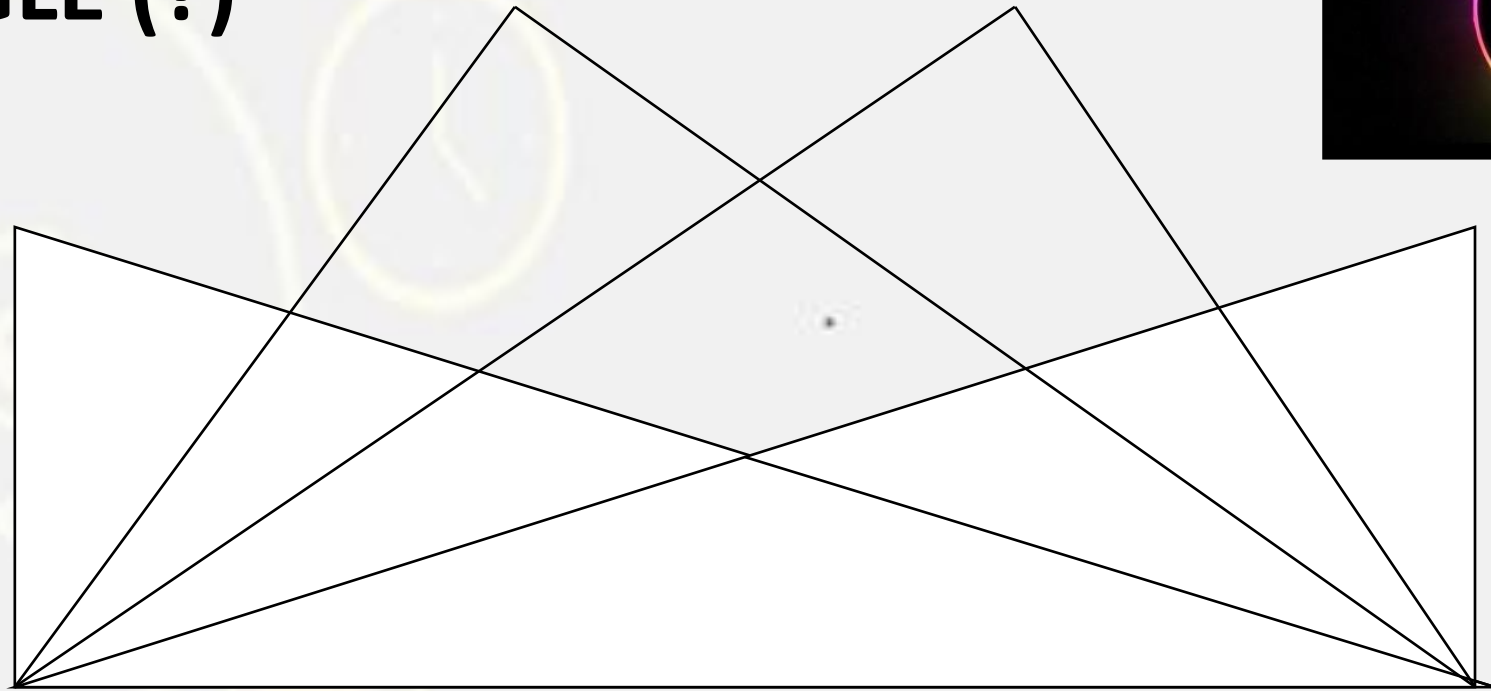
REPLY

▼ [View reply from Mahendras : Online Videos For Govt. Exams](#)



Find the TRIANGLE (?)

- (A) 25
- (B) 26
- (C) 27
- (D) 28



Pinki ranks 16th from the top and 15th from the bottom in a class. How many students are there in the class?

पिंकी एक कक्षा में 16 वीं और नीचे से 15 वीं रैंक पर है। वहाँ कक्षा में कितने छात्र हैं?

1. 30
2. 31
3. 32
4. Cannot be determined /निर्धारित नहीं किया जा सकता है



Statements: कथन :

Some politician are sinister./ कुछ राजनेता पापी होते हैं।
All sinister is a bureaucrats. / सभी पापी नौकरशाह हैं।



Conclusions: निष्कर्ष:

- I. Some bureaucrats are not sinister./ कुछ नौकरशाह पापी नहीं हैं।
- II. No politician is a bureaucrats. / कोई भी राजनेता नौकरशाह नहीं है।

Find the option which should replace (?)

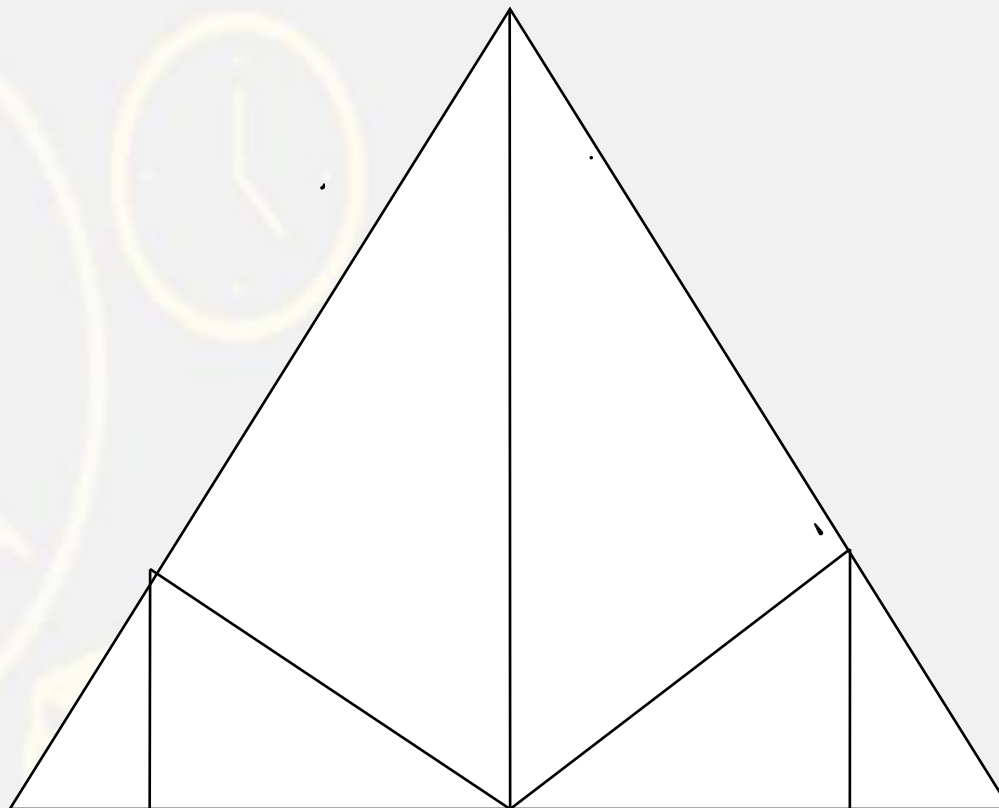
$$25 : 64 :: 35 : ?$$

- (A) 64
- (B) 81
- (C) 72
- (D) 100



Find the triangle :-

- (A) 09**
- (B) 10**
- (C) 11**
- (D) 12**



Find the odd (?)

- (A) Vitamin A : Loss of vision**
- (B) Vitamin B : Beriberi**
- (C) Vitamin K : Haemorrhage**
- (D) Vitamin D : Peralalysis**



A is brother of C . D is wife of M who is only son of N .C is daughter of D. How is N related to A ?


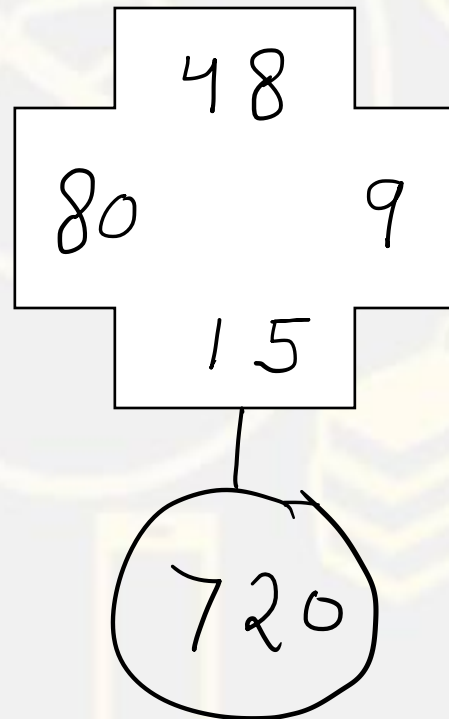
A, C का भाई है। D, M की पत्नी है जो केवल N का पुत्र है। D, D की बेटी है। N, A से कैसे संबंधित है?

- (A) Father / पापा
- (B) Grandfather / दादा
- (C) Uncle / चाचा
- (D) CND / CND



Find the option which should replace (?)

- (A) 25
- (B) 20
- (C) 22
- (D) 13



Find the in Dictionary order :-

1. Wrist / कलाई
2. Nails / नाखून
3. Shoulder / कंधा
4. Elbow / कोहनी
5. Palm / हथेली
6. Fingers / उँगलियाँ

A- 1 ,2,4,3,5,6

B- 3,4,1,5,6,2

C- 1,2,3,4,5,6

D- 2,1,4,3,5,6



Find the missing (?)

$$120 * 256 * 32 * 40 * 88$$

- (A) - ÷ = +
- (B) + = - ÷
- (C) + - ÷ =
- (D) + ÷ - =



Find the missing (?)

$$4 @ 5 = 209$$

$$6 @ 7 = 601$$

$$8 @ 2 = ?$$

(A) 620

(B) 495

(C) 540

(D) 536



Find the missing (?)

RELATIVE = MFSCVHYL
NUMBERED = ?



- (A) NVOCFSFE**
- (B) NVODGGHU**
- (C) NVOGDSFE**
- (D) NVOCFDGG**

Find the missing (?)

47 , 57 , 69 , 85 , ?

- (A) 109**
- (B) 101**
- (C) 92**
- (D) 95**

