



MISSION SSC 2023



CGL • CHSL • MTS • CPO

REASONING

LIVE TEST
SSC MTS SPECIAL

WITH TIMER 

BASED ON PREVIOUS YEAR QUESTIONS

BY KULDEEP MAHENDRAS



 **LIVE** | **05:30 PM**



MISSION SSC 2023

LIVE at 5:30 PM

Selection Examination, Phase-XI, 2023	Post	Paper-I (CBE)*	24/Feb/2023 (Friday)	17/Mar/2023 (Friday)	May-Jun, 2023
Combined Graduate Level Examination, 2023		Tier-I (CBE)*	01/Apr/2023 (Saturday)	01/May/2023 (Monday)	Jun-Jul, 2023
Combined Secondary Level Examination, 2023	Higher (10+2)	Tier-I (CBE)*	09/May/2023 (Tuesday)	08/Jun/2023 (Thursday)	Jul-Aug, 2023
Multi Tasking (Non-Technical) Staff, and Havaldar (CBIC & CBN) Examination-2023		Tier-I (CBE)*	14/Jun/2023 (Wednesday)	14/Jul/2023 (Friday)	Aug-Sep, 2023
Sub-Inspector in Delhi Police and Central Armed Police Forces Examination, 2023		Tier-I (CBE)*	20/Jul/2023 (Thursday)	13/Aug/2023 (Sunday)	Oct/2023
Junior Engineer (Civil, Mechanical, Electrical & Quantity Surveying & Contracts) Examination, 2023		Paper-I (CBE)*	26/Jul/2023 (Wednesday)	16/Aug/2023 (Wednesday)	Oct/2023
Stenographer Grade 'C' & 'D' Examination, 2023	Grade	CBE*	02/Aug/2023 (Wednesday)	23/Aug/2023 (Wednesday)	Oct-Nov, 2023



Vishnu Gupta 8 hours ago

B is the right ans very super duper nice session sir thank you sir

👍 🗨️ Reply



Puspranjan Singh 12 hours ago

Bb

👍 🗨️ Reply



CHHAVI SAXENA 100 100 12 hours ago

Home work answer is option b...Axe ...wood

👍 🗨️ Reply



Hrithik_____ 2 hours ago

B

👍 🗨️ Reply



Surbhi Sinha 8 hours ago

BBBB 😊

👍 🗨️ Reply



Aishwaryarani Tripathy 12 hours ago

B

👍 1 🗨️ Reply



Chitrasen Yadav 11 hours ago

Option b

👍 🗨️ Reply



Ravi Patel 12 hours ago

B 👍

👍 1 🗨️ Reply

Share & like!





Find the missing one (?)

Scissors : Cloth :: ? : ?

कैंची : कपड़ा :: ? : ?



(A) Stone : Grinder / पत्थर : चक्की

(B) Axe : Wood / कुल्हाड़ी : लकड़ी

(C) Knife : Stone / चाकू : पत्थर

(D) Gun : Hunt / गन : हट





Find the missing one (?)



Stool : Bench :: ? : ?

स्टूल : बेंच :: ? : ?

(A) Carpenter : Chair / बढई : कुर्सी

(B) Chair : Tables / कुर्सी : टेबल्स ✗

(C) Wood : Steel / लकड़ी : स्टील


(D) Foot : Yardstick / फुट : यार्डस्टिक

like & share

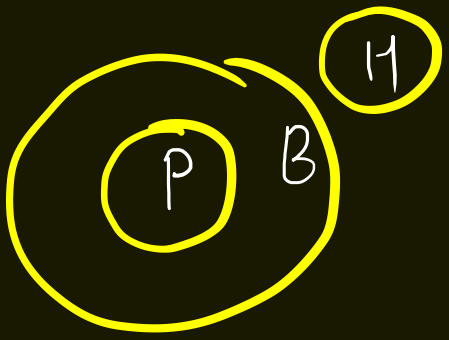
20




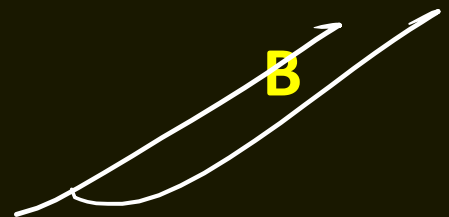
Which of the following diagrams indicates the best relation between **Horses**, **Parrot and Birds** (घोड़े, तोता और पक्षी) ?




A.



B



.C



.D.



Find the missing one (?)

2 : 0 :: 3 : ?

(A) 18

(B) 19 ✓

(C) 20

(D) 21

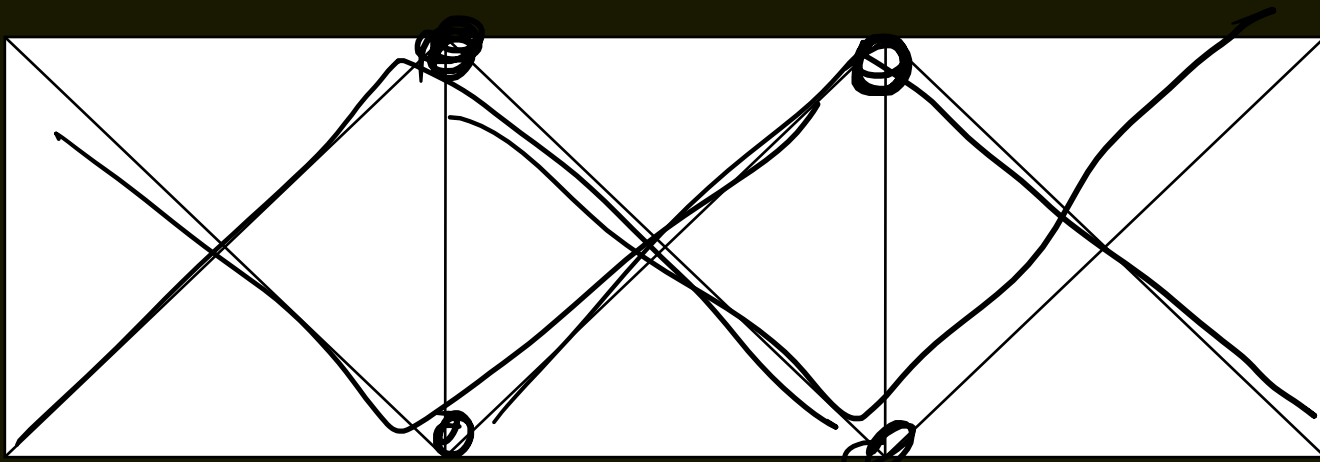
$2^3 - 8 = 0$

$3^3 - 8 = 19$



Find the number of triangle?

- (A) 28
- (B) 20
- (C) 22
- (D) 24



$$4 + 8 + 8 + 8$$

28





MISSION SSC 2023

LIVE at 5:30 PM

Find the option which should replace (?)

- 12 @ 11 = 12
- 13 @ 16 = 18
- 32 @ 14 = ?

- (A) ~~36~~
- (B) 40 ✓
- (C) ~~45~~
- (D) ~~60~~

$$\begin{array}{l}
 12 \times 2 \rightarrow 24 \rightarrow 8 \\
 11 \times 2 \rightarrow 22 \rightarrow \frac{4}{12}
 \end{array}$$

$$\begin{array}{l}
 32 \times 2 = 64 = 24 \\
 14 \times 2 = 28 = \frac{16}{40}
 \end{array}$$




Find the ODD ONE (?)

(A) Troop / सेना

(B) Group / समूह

(C) Mob / मोब

(D) Class / कक्षा





Find the option which should replace (?)

36 : 45 :: 25 : ?

A. 27

B. 28

C. 30

D. 29

$$3^2 + 6^2 = 45$$
$$4 + 36 = 40$$

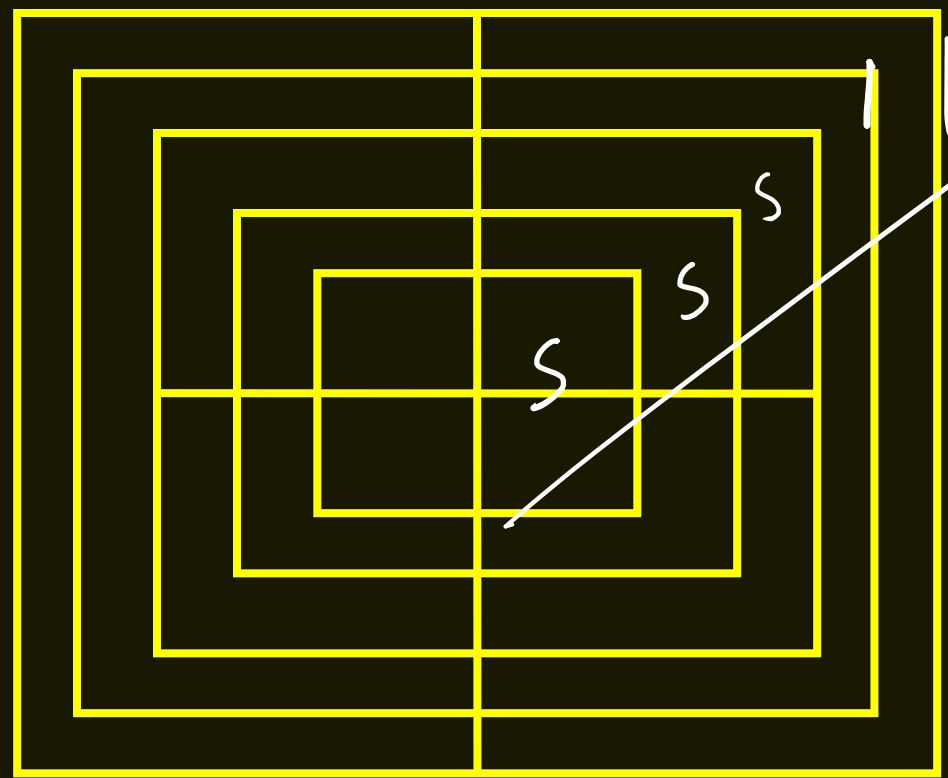
$$2^2 + 5^2$$

$$4 + 25$$



Find the SQUARE (?)

- (A) 14
- (B) 17
- (C) 25
- (D) NOT





Find the option which should replace (?)

$$9 : 24 :: ? : 6$$

- A. 1
- B. 2
- C. 5
- D. 3



$$24 \times 3 - 3 = 24$$
$$3 \times 3 - 3 = 6$$



Find the option which should replace (?)

$$(13, 20, 27) : ?$$

Handwritten annotations show an arc between 13 and 20 with '+7' above it, and another arc between 20 and 27 with '+7' above it.



~~A. 30, 11, 18~~

B. 18, 25, 32

~~C. 18, 27, 72~~

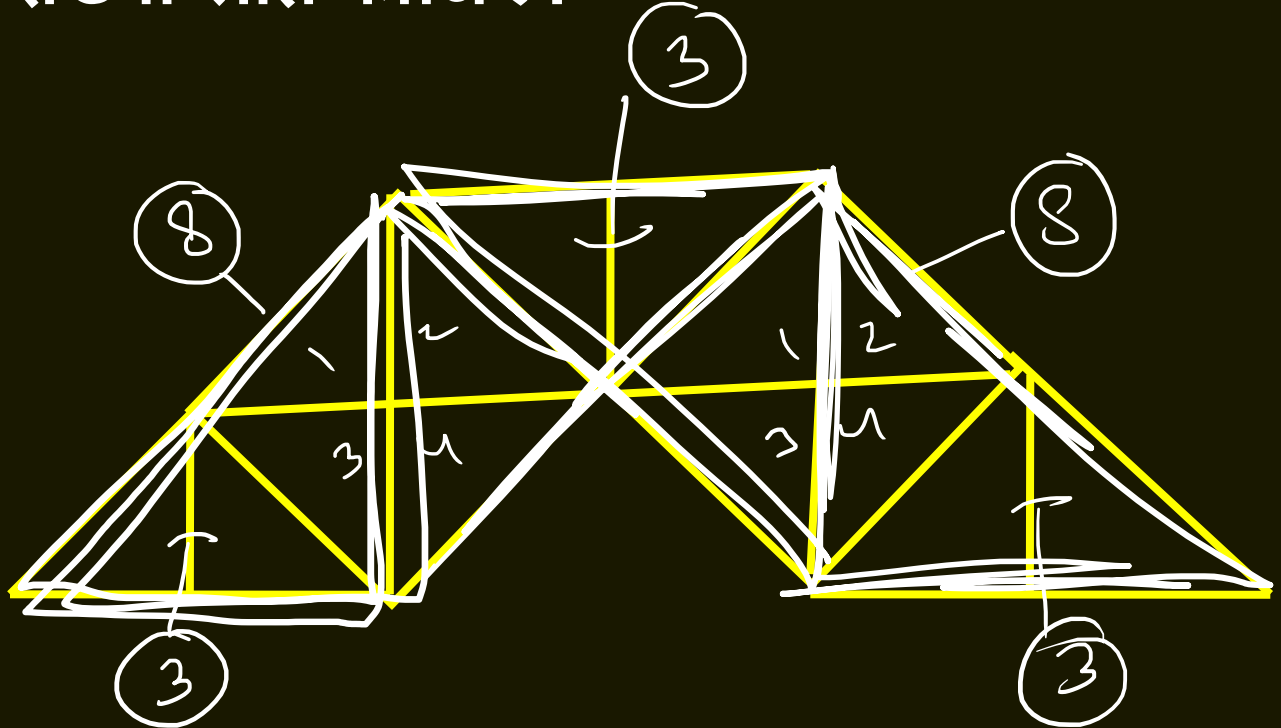
D. 7, 14, 28



Find number of triangle in the given figure ?

दी गई आकृति में त्रिभुज की संख्या ज्ञात कीजिए?

- (A) 29
- (B) 28
- (C) 25
- (D) 16



$$\begin{array}{r}
 16 + 9 = 25 \\
 + 4 \\
 \hline
 29
 \end{array}$$



Arrange the following words according to the dictionary.


1. Golf 2. Grip 3. Great 4. Grease 5. Group

~~1. 1,4,3,2,5~~

2. 2,1,4,5,3

3. 5,3,2,4,1

4. 5,4,1,2,3





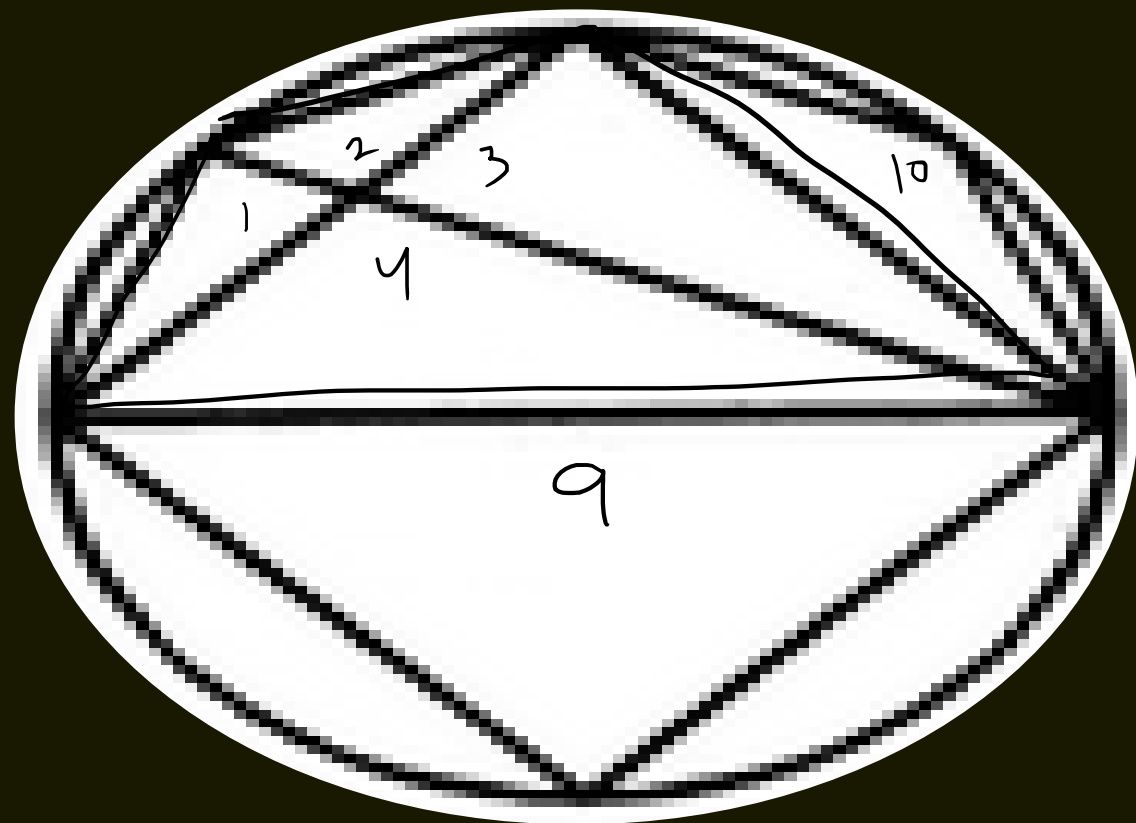
MISSION SSC 2023

LIVE at 5:30 PM

Find the number of triangle (?)

दी गई आकृति में त्रिभुज की संख्या ज्ञात कीजिए ?

- (A) 8
- (B) 10
- (C) 11
- (D) 12





Pinki ranks 16th from the top and 15th from the bottom in a class. How many students are there in the class?

पिंकी एक कक्षा में 16 वीं और नीचे से 15 वीं रैंक पर है। वहाँ कक्षा में कितने छात्र हैं?

1. 30
2. 31
3. 32
4. Cannot be determined / निर्धारित नहीं किया जा सकता है

$$16 + 15 - 1 =$$



30

$$\begin{cases} T = L + R - 1 \\ L = T - R + 1 \\ R = T - L + 1 \end{cases}$$



Find the missing :-

Hampi Chariot : 50 Rs Note :: Sanchi Stupa : ?

हम्पी रथ : 50 रुपये नोट :: सांची स्तूप : ?

1. 10 Rupees
2. 100 Rupees
3. 200 Rupees
4. 500 Rupees





MISSION SSC 2023

LIVE at 5:30 PM

Find the triangle (?)

- (A) 22
- (B) 23
- (C) 24
- (D) NOT

