

SSC MTS/HAWALDAR/CHSL



REASONING

LIVE EXAM

तैयारी जीत की...

LIVE

08:30 PM





UPCOMING ONLINE BATCHES

June 2022

01 June 2022

08:00 AM to 10:00 AM

BANK ONLINE LIVE CLASS

03:00 PM to 05:00 PM

SSC ONLINE LIVE CLASS

BILINGUAL

08 June 2022

01:00 PM to 03:00 PM

BANK ONLINE LIVE CLASS

07:30 PM to 09:30 PM

SSC ONLINE LIVE CLASS

BILINGUAL

15 June 2022

05:30 PM to 07:30 PM

BANK ONLINE LIVE CLASS

10:30 AM to 12:30 PM

SSC ONLINE LIVE CLASS

BILINGUAL

22 June 2022

10:30 AM to 12:30 PM

BANK ONLINE LIVE CLASS

08:00 AM to 10:00 AM

SSC ONLINE LIVE CLASS

BILINGUAL

29 June 2022

03:00 PM to 05:00 PM

BANK ONLINE LIVE CLASS

05:30 PM to 07:30 PM

SSC ONLINE LIVE CLASS

BILINGUAL

13 June 2022

10:30 AM to 12:30 PM

IBPS RRB ONLINE LIVE CLASS

BILINGUAL



www.mahendras.org



7052477777/7052577777



Mohit.. 16 hours ago 1 subscribers

Thank-you Sir for this Amazing class Session.. 🙏😊

Today's Homework answer is- None follows.



REPLY



▶ [View reply from Mahendras : Online Videos For Govt. Exams](#)



🌸 PUJA KUNDU 🌸 18 hours ago 7 subscribers

The answer is None.....thank you sir for the amazing session 🔥 🙏



REPLY



▶ [View reply from Mahendras : Online Videos For Govt. Exams](#)



Chhavi Saxena 17 hours ago

Home work answer is none follows

Very Nice session sir Thank you so much dear Sir 🙏🙏🙏🙏🙏



REPLY



▶ [View reply from Mahendras : Online Videos For Govt. Exams](#)



Vishnu Gupta 18 hours ago 3 subscribers

None is the right ans very super nice 🙏 session sir thank you 🙏 sir love ❤️ you sir 🙏❤️



REPLY



▶ [View reply from Mahendras : Online Videos For Govt. Exams](#)



arun ch mandal 6 hours ago
HW IS NONE
thank you sir
very good session

REPLY



Ankit Vish 6 hours ago **159** subscribers
Answer None follow
Lajwab session sir 🙏🙏

1 REPLY



Ragini Ranjan 2 hours ago **2** subscribers
None

REPLY



Shahzada Jalal 17 hours ago **17** subscribers
none follows

REPLY

[View reply from Mahendras : Online Videos For Govt. Exams](#)



Puspranjan singh 17 hours ago
None of them

REPLY

[View reply from Mahendras : Online Videos For Govt. Exams](#)



GUDIYA SHARMA 6 hours ago **1** subscribers
None of thiss 🖐🖐🖐🖐🖐🖐🖐🖐🖐🖐

REPLY



Statement –

- I. All fruits are lions
- II. All lions are foxes
- III. Some foxes are beggars

Conclusion –

- I. All fruits are foxes.
- II. Some fruits are beggars.

कथन –

- I. सभी फल शेर हैं
 - II. सभी शेर लोमड़ी हैं
 - III. कुछ लोमड़ियाँ भिखारी हैं
- ## निष्कर्ष –

- I. सभी फल लोमड़ी हैं।
- II. कुछ फल भिखारी हैं।



Statement –

- I. All fruits are lions**
- II. All lions are foxes**
- III. Some foxes are beggars**

Conclusion –

- I. All fruits are foxes.**
- II. Some fruits are beggars.**



Find the missing :-

0 , 1 , 1 , 3 , 2 , ? , 3 , 13 , 4 , 21

- (A) 7
- (B) 2
- (C) 3
- (D) 0





Arun is celebrating his birthday today . On his next birthday , he will be twice his age that was 12 years ago . How old is Arun today ?

अरुण आज अपना जन्मदिन मना रहे हैं। अपने अगले जन्मदिन पर, वह 12 साल पहले अपनी उम्र से दोगुनी होगी। अरुण आज कितने साल का है?

- (A) 24 years
- (B) 25 years
- (C) 26 years
- (D) 27 years





Find the missing :-

Odometer : Speed :: Ammeter : ?
ओडोमीटर: गति :: एम्मीटर:?




- (A) Mass / द्रव्यमान
- (B) Earthquake / भूकंप
- (C) Current / करंट
- (D) Air / वर्तमान वायु



Find the missing :-



Hardware , Software , Computer / हार्डवेयर, सॉफ्टवेयर,
कंप्यूटर



(A)



(B)



(C)




(D)



Find the missing :-

- (A) 828
- (B) 1293
- (C) 1945
- (D) 783






Find the number of square (?)



- (A) 5
- (B) 2
- (C) 3
- (D) 1





Find the odd one :-

1. Cumin / जीरा
2. Groundnut / मूंगफली
3. Cinnamon / दालचीनी
4. Pepper / मिर्च
5. Clove / लौंग





If 'a' means ' \div ', 'b' means '+', 'c' means '-' and 'd' means ' \times ' then



$$36 \text{ b } 13 \text{ c } 7 \text{ d } 8 \text{ a } 2 \text{ b } 14 = ?$$

- (1) 36
- (2) 35
- (3) 46
- (4) 37



In Which year 1272 calender will be repated ?

- (A) 1300
- (B) 2016
- (C) 1312
- (D) 1328





Find number of triangle in the given figure ?
दी गई आकृति में त्रिभुज की संख्या ज्ञात कीजिए?

- (A) 20
- (B) 18
- (C) 17
- (D) 19





Find the option which should replace (?)

SIT : 8

TOY : 10

VIP : ?

A. 11

B. 15

C. 16

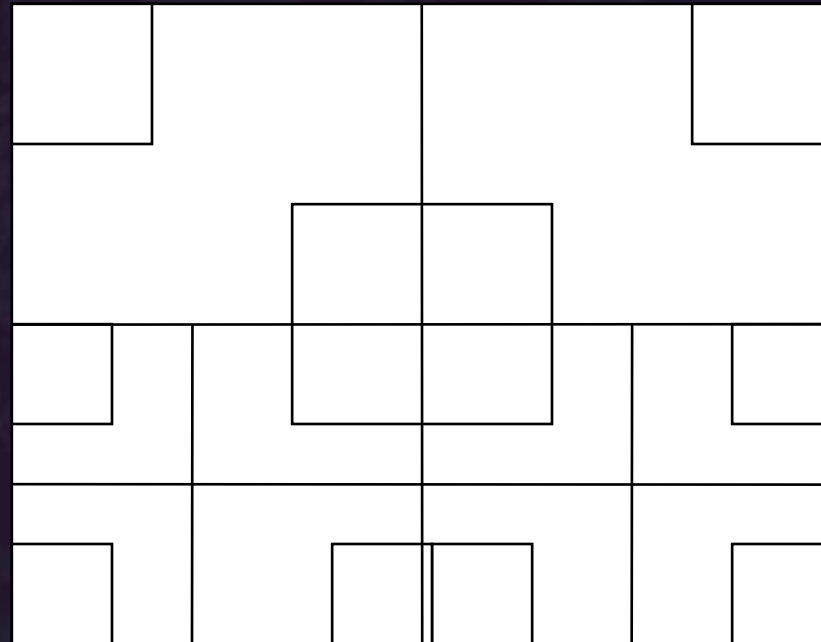
D. 7





Find number of SQUARE in the given figure ?
दी गई आकृति में वर्ग की संख्या ज्ञात कीजिए?

- (A) 24
- (B) 27
- (C) 23
- (D) NOT





Find the option which should replace (?)

CDEF : EGJM

PQRS :: ?

- (A) RTUZ
- (B) SUMK
- (C) ADIL
- (D) ALNP





Find the odd one (?)

- (A) Sharpener / शार्पनर
- (B) Calculator / कैलकुलेटर
- (C) Eraser / इरेज़र
- (D) Pencil / पेंसिल





Find the option which should replace (?)

FASHION : FOIHSAN

PROBLEM :: ?

- (A) PELBORM
- (B) MELBORP
- (C) LEPBMRO
- (D) PROBLEM

