

RRB NTPC CBT 2/GROUP D



REASONING

अबकी बार **RAILWAY** पार

Complete Revision



LIVE 7:30 PM





Don't Let Your Studies Get Impacted By COVID-19 Pandemic

Stay Home & Study Online With Mahendras Hybrid Model

Features



Offline Classes



Live Interactive Online Classes



Same Faculty



Same Batch



Same Batch Timing



Online Library Facility



Recorded Video



PDFs



Classes In Both Model

CONTACT US:

1800-103-5225

www.mahendras.org





UPCOMING ONLINE BATCHES

January 2022

05 Jan 2022

08:00 AM to 10:00 AM

BANK ONLINE LIVE CLASS

10:30 AM to 12:30 PM

SSC ONLINE LIVE CLASS

01:00 PM to 03:00 PM

SSC ONLINE LIVE CLASS

05:30 PM to 07:30 PM

BANK ONLINE LIVE CLASS

BILINGUAL

12 Jan 2022

08:00 AM to 10:00 AM

SSC ONLINE LIVE CLASS

10:30 AM to 12:30 PM

BANK ONLINE LIVE CLASS

03:00 PM to 05:00 PM

BANK ONLINE LIVE CLASS

05:30 PM to 07:30 PM

SSC ONLINE LIVE CLASS

BILINGUAL

19 Jan 2022

08:00 AM to 10:00 AM

BANK ONLINE LIVE CLASS

01:00 PM to 03:00 PM

BANK ONLINE LIVE CLASS

03:00 PM to 05:00 PM

SSC ONLINE LIVE CLASS

07:30 PM to 09:30 PM

SSC ONLINE LIVE CLASS

BILINGUAL

27 Jan 2022

10:30 AM to 12:30 PM

BANK ONLINE LIVE CLASS

07:30 PM to 09:30 PM

BANK ONLINE LIVE CLASS

08:00 AM to 10:00 AM

SSC ONLINE LIVE CLASS

01:00 PM to 03:00 PM

SSC ONLINE LIVE CLASS

BILINGUAL



RRB NTPC Stage-2 Exam Pattern

Sections	No. of Questions	Total Marks	Duration
Mathematics	35	35	90 minutes
General Intelligence and Reasoning	35	35	
General Awareness	50	50	
Total	120	120	



Nadeem 14 hours ago

🌸 Homework Answer 🌸

🟦 Option C :- 21 Triangles 🌸

🌿 Thank You Sir 🙏 Nice Session Sir 😊 🌸 🍷

👍 🗨️ 📌 ▼ 📊 REPLY



🌸 PUJA KUNDU 🌸 14 hours ago

THE ANSWER IS --21 📐 📐 📐AAJ KA CLASS SUPER SANDAR THA SIR AND THANK YOU FOR THE SESSION 🙏

👍 🗨️ 📌 ▼ 📊 REPLY



Viśhñù Güptâ 14 hours ago

21 is the right ans

Very nice session sir thank you so much sir 🙏

👍 🗨️ 📌 ▼ 📊 REPLY



SANIA _____ 4 hours ago

awesome session sir 🙏

21 🔥 🔥 🔥 🔥

👍 🗨️ 📌 ▼ 📊 REPLY



Radha Garima 14 hours ago

Answer : 21 📐 📐

Nice session sir 🙏 🙏

👍 🗨️ 📌 ▼ 📊 REPLY



DEEKSHA SHARMA 13 hours ago

Home work answer is 21

nice session sir 🙏🙏🙏



REPLY



Shruti Jain 13 hours ago

21 nice session sir.



REPLY



RASHMI SONI 📅✍️ 14 hours ago

HW ANSWER_21 V NICE SESSION 😊



REPLY



Chhavi Saxena 14 hours ago

Home work answer is 21



REPLY



SOUVIK DUTTA 14 hours ago

THE ANSWER IS 21



REPLY



SAPANA 13 hours ago

Ans.....21



1



REPLY



Anushka Mishra 12 hours ago

21

    [REPLY](#)



puspranjan singh 14 hours ago

21

    [REPLY](#)



Kapil Bhagat 14 hours ago

21

    [REPLY](#)



Piyush Rai 12 hours ago

21 answer

    [REPLY](#)



ROHIT GOND 14 hours ago

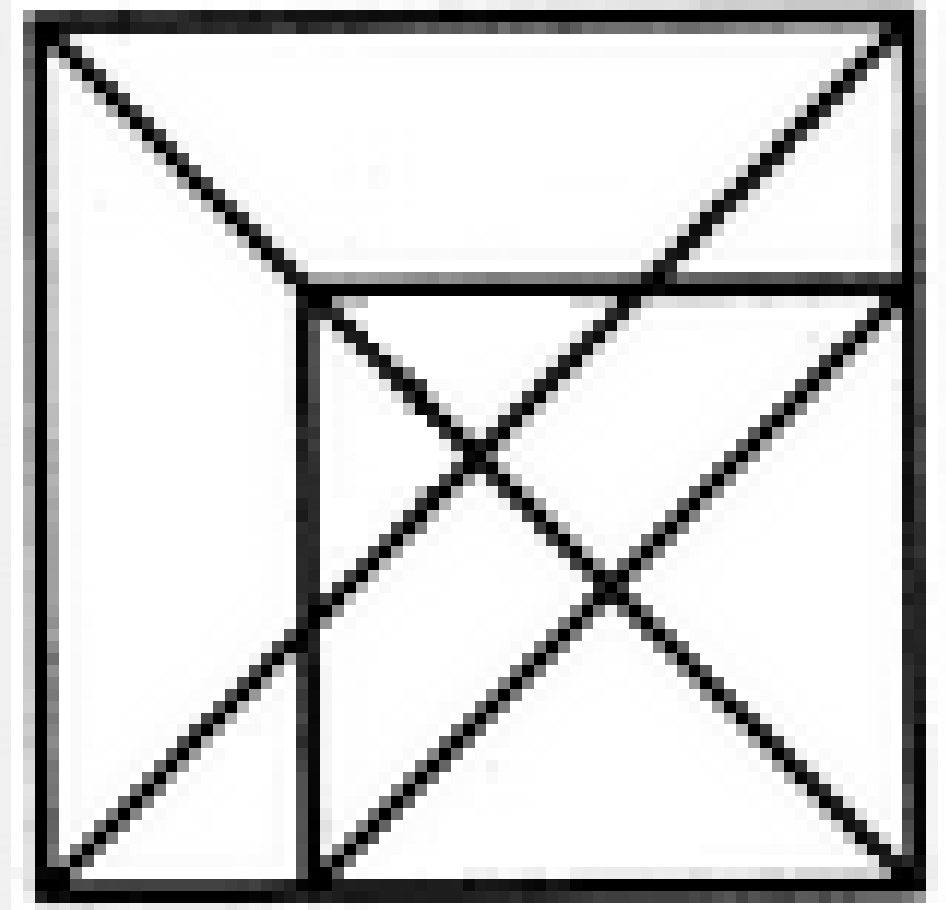
21 त्रिभुज

    [REPLY](#)

Find number of triangle in the given figure ?

दी गई आकृति में त्रिभुज की संख्या ज्ञात कीजिए?

- (A) 34**
- (B) 27**
- (C) 21**
- (D) 16**



Time of **2 : 12 : 20** is being seen in the mirror , what time will it show ?

2:12:20 का समय दर्पण में देखा जा रहा है, यह किस समय दिखाई देगा?

- (A) 9 : 47 : 40
- (B) 9 : 45 : 41
- (C) 9 : 42 : 43
- (D) 9 : 41 : 45



Find the option which should replace (?)

243 : 27 :: 354 : ?

- (A) 36
- (B) 40
- (C) 45
- (D) 60



Find the missing one (?)

2F : FD :: 3D : ?

- (A) HU
- (B) HA
- (C) HO
- (D) HI



If (-) stands for division, (+) for multiplication, (\div) for subtraction and (\times) for addition, which one of the following answers is correct to the given equation?

यदि (-) विभाजन के लिए खड़ा है, (+) गुणन के लिए, (and) घटाव के लिए (और) इसके अलावा, (\times), निम्नलिखित में से कौन सा उत्तर दिए गए समीकरण के लिए सही है?

$$4 \times 64 - 8 \div 4 + 2 = ?$$

1. 4
2. 6
3. 8
4. 1



A clock is taking 3:40 minutes , find the time when the hour needle must have moved 75 degree?

एक घड़ी में 3:40 मिनट लग रहे हैं, उस समय को खोजें जब घंटे की सुई 75 डिग्री से आगे होगी?

- (A) 6 : 10**
- (B) 5 : 50**
- (C) 6 : 20**
- (D) 6 : 15**



Arrange the given words in the alphabetical order.

- 1. Inadequate**
- 2. Institution**
- 3. Inhospitable**
- 4. Improvement**
- 5. Incompetent**

- (a) 4, 2, 3, 5, 1**
- (b) 4, 1, 3, 5, 2**
- (c) 4, 1, 5, 3, 2**
- (d) 4, 1, 5, 2, 3**



Find the option which should replace (?)

$$10 + 7 = 12$$

$$25 + 3 = 25$$

$$27 + 8 =$$

(A) 21

(B) 30

(C) 39

(D) 26





Bharat and Sapna are husband and Wife . Rohit and Bharat are brothers. Suresh is the father of Rohit . Sapna's son is Krish . How is Krish related to Sauresh ?

भरत और सपना पति और पत्नी हैं। रोहित और भरत भाई हैं। सुरेश रोहित के पिता हैं। सपना का बेटा कृष है। कृष का संबंध सुरेश से कैसे है?

- A. Son**
- B. Father**
- C. Uncle**
- D. Grandson**



Which of the following diagrams indicates the best relation between
(Players , Singers , Students) / (खिलाड़ी, गायक, छात्र)



A.

B

.C

.D.

Find the option which should replace (?)

BDE : 697

CCD :: ?

- (A) 677**
- (B) 666**
- (C) 667**
- (D) 776**



Find the option which should replace (?)

$$29 : 319 :: 23 :: ?$$

- (A) 252
- (B) 151
- (C) 46
- (D) 115



Find the MISSING (?)

335 : 16 :: 837 :

- (A) 216
- (B) 225
- (C) 289
- (D) 676



Find the MISSING (?)

16 : 46 :: 10 : ?

- (A) 25**
- (B) 52**
- (C) 64**
- (D) 63**

