

# SSC MTS/HAWALDAR/CHSL



## REASONING

# LIVE EXAM

तैयारी जीत की...

LIVE

08:30 PM





# UPCOMING ONLINE BATCHES

## June 2022

**01 June 2022**

**08:00 AM to 10:00 AM**

**BANK ONLINE LIVE CLASS**

**03:00 PM to 05:00 PM**

**SSC ONLINE LIVE CLASS**

**BILINGUAL**

**08 June 2022**

**01:00 PM to 03:00 PM**

**BANK ONLINE LIVE CLASS**

**07:30 PM to 09:30 PM**

**SSC ONLINE LIVE CLASS**

**BILINGUAL**

**15 June 2022**

**05:30 PM to 07:30 PM**

**BANK ONLINE LIVE CLASS**

**10:30 AM to 12:30 PM**

**SSC ONLINE LIVE CLASS**

**BILINGUAL**

**22 June 2022**

**10:30 AM to 12:30 PM**

**BANK ONLINE LIVE CLASS**

**08:00 AM to 10:00 AM**

**SSC ONLINE LIVE CLASS**

**BILINGUAL**

**29 June 2022**

**03:00 PM to 05:00 PM**

**BANK ONLINE LIVE CLASS**

**05:30 PM to 07:30 PM**

**SSC ONLINE LIVE CLASS**

**BILINGUAL**

**13 June 2022**

**10:30 AM to 12:30 PM**

**IBPS RRB ONLINE LIVE CLASS**

**BILINGUAL**



[www.mahendras.org](http://www.mahendras.org)



7052477777/7052577777



Mohit.. 1 day ago 1 subscribers

Thank-you Sir for today's Amazing धांसू Class Session.. 🙏😊

And

My Answer for today's Homework is like-  
Option C- 14...

Read more



REPLY



▶ [View reply from Mahendras : Online Videos For Govt. Exams](#)



🍁 PUJA KUNDU 🍁 1 day ago 7 subscribers

The answer is ---14..( $.28 \div 2$ )....thank you sir for the amazing session 🙏🙏



REPLY



▶ [View reply from Mahendras : Online Videos For Govt. Exams](#)



Chhavi Saxena 1 day ago

Home work answer is option C (14)

Very Nice session sir Thank you so much 🙏



REPLY



▶ [View reply from Mahendras : Online Videos For Govt. Exams](#)



Vishnu Gupta 1 day ago 3 subscribers

$28/2=14$  is the right ans very super nice session sir Thank you 🙏 sir love you sir ❤️🙏



REPLY



▶ [View reply from Mahendras : Online Videos For Govt. Exams](#)



DEEKSHA SHARMA 1 day ago

Home work answer is 14

Very nice session sir 🙏🙏



REPLY



▶ [View reply from Mahendras : Online Videos For Govt. Exams](#)



arun ch mandal 1 day ago

14

Nice session sir

Thank you sir



REPLY



▶ [View reply from Mahendras : Online Videos For Govt. Exams](#)



Ankit Vish 1 day ago 151 subscribers

Answer. CCC

Lajwab session sir 🙏🙏



1



REPLY



▶ [View reply from Mahendras : Online Videos For Govt. Exams](#)



Puspranjan singh 1 day ago

$28/2=14$



REPLY



▶ [View reply from Mahendras : Online Videos For Govt. Exams](#)



Bidya Behera 1 day ago

H.w.

Answer

14 hoga 👍



REPLY



▶ [View reply from Mahendras : Online Videos For Govt. Exams](#)



Bidya Behera 1 day ago

14 hoga 👍



REPLY



▶ [View reply from Mahendras : Online Videos For Govt. Exams](#)



Shruti Jain 1 day ago **11** subscribers

14



REPLY



▶ [View reply from Mahendras : Online Videos For Govt. Exams](#)



RIYA 😊😊 1 day ago

Right answer is 14



REPLY



▶ [View reply from Mahendras : Online Videos For Govt. Exams](#)



Find the missing ONE (?)

100 , 50 , 52 , 26 , 28 , ?

- (A) 30
- (B) 32
- (C) 14
- (D) 16





**Find the missing :-**

**35 , 99 , 195 , 323 , ?**

- (A) 576**
- (B) 385**
- (C) 475**
- (D) 483**





**Find the missing term(?)**

**( 7 , 16 , 34 ) :: ?**

- (A) 4 , 16 , 28**
- (B) 7 , 12 , 29**
- (C) 6 , 12 , 22**
- (D) 5 , 12 , 26**







**Find the missing :-**

**0 , 6 , 20 , 42 , 72 , ?**

- (A) 110**
- (B) 102**
- (C) 105**
- (D) 113**





Find the missing :-

Papaya : Vitamin A :: Karonda (Carissa carandas) : ?  
पपीता: विटामिन ए :: करोंदा


- (A) Vitamin A
- (B) Vitamin B
- (C) Vitamin C
- (D) Vitamin D





Find the triangle (?)

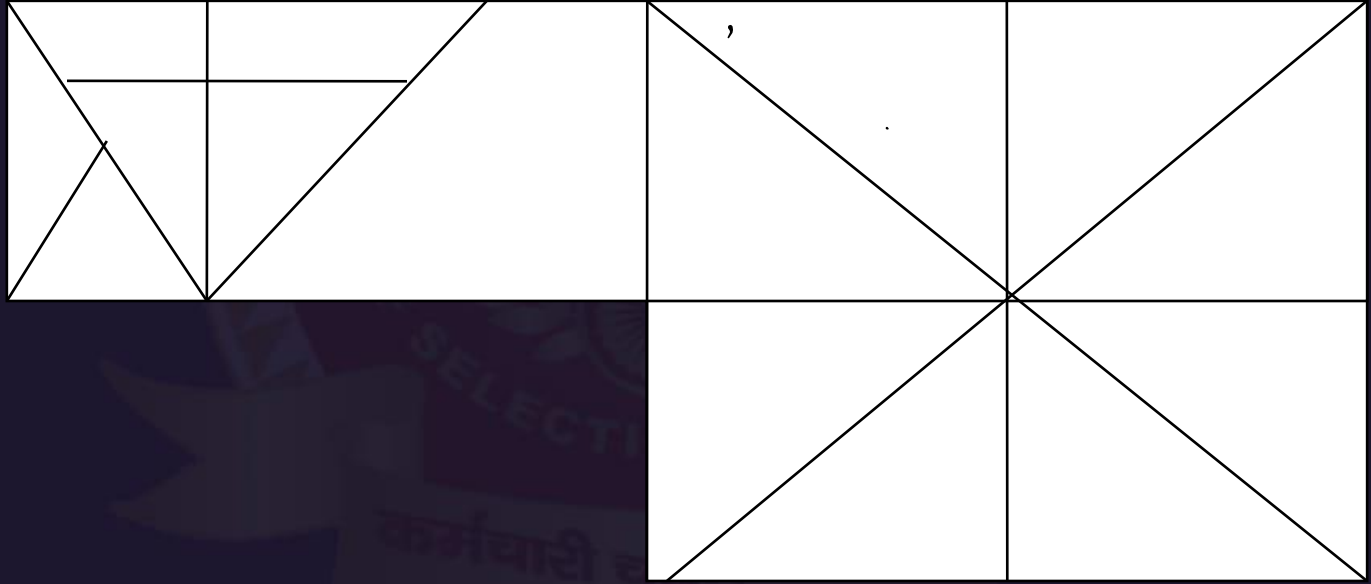
1. 29
2. 28
3. 27
4. 30





Find the triangle (?)

- 1. 26
- 2. 27
- 3. 28
- 4. 25





**Find the missing :-**

**12 , 20 , 34 , 57 , ?**

- (A) 93 .5**
- (B) 93**
- (C) 93.2**
- (D) 93 .25**





**SSC MTS/HAWALDAR/CHSL**

**Live at 08:30 PM**



**Find the missing :-**

**1023 , 987 , 915 , 807 , ?**

- (A) 563**
- (B) 543**
- (C) 636**
- (D) 663**





Find the missing term(?)

- (A) 13
- (B) 09
- (C) 36
- (D) 18

13	16
25	?



$20^2 = 625$

$13^2 = 169$

16



**Find the missing :-**

**99 , 121 , 143 , 165 , ?**

- (A) 187**
- (B) 192**
- (C) 275**
- (D) 173**







Find the missing (?)

Chair : Furniture :: ? : ?

कुर्सी : फर्नीचर : ? : ?



1. Letter paper : Stationary / पत्र कागज : स्टेशनरी
2. Pencil : Wood / पेंसिल : लकड़ी
3. Bicycle : Travel / साइकिल : यात्रा
4. Seat : Cover / सीट : गिलाफ



Find the option which should replace (?)

Garage : Motorcar :: Airplane : ?  
गैराज : मोटरकार :: हवाई जहाज : ?

- A. Haunt / अड्डा
- B. Workshop / कार्यशाला
- C. Hanger / हैंगर
- D. Dock / गोदी

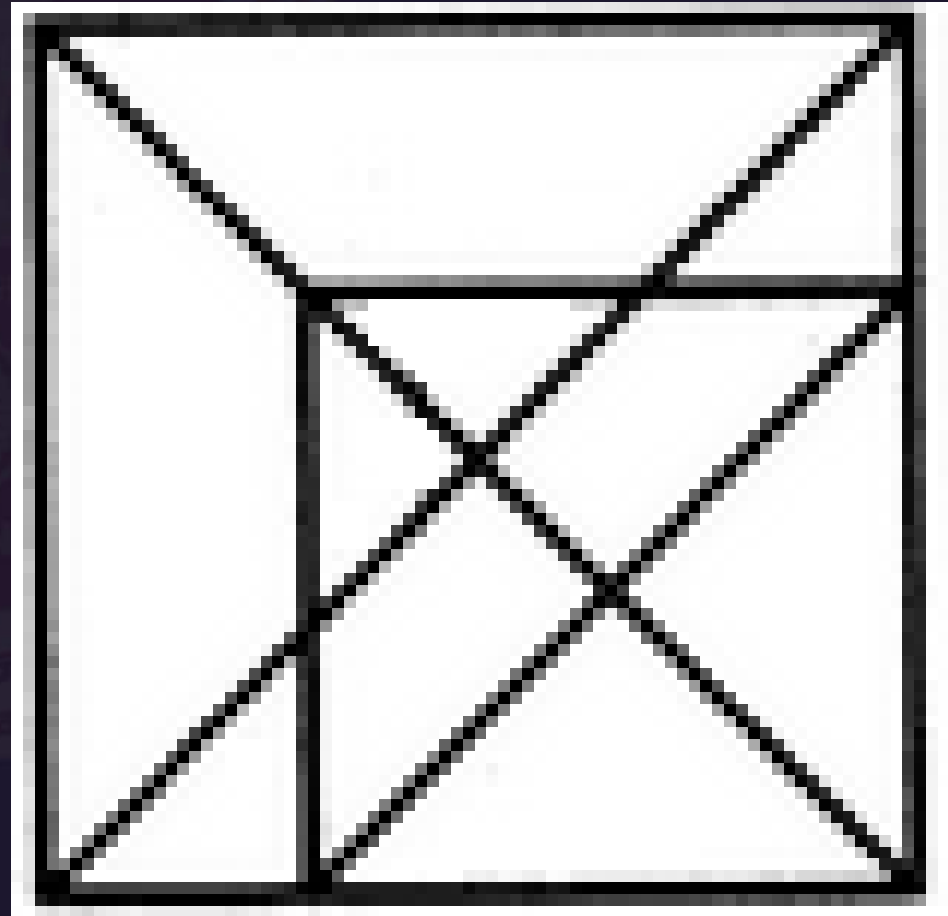




Find number of triangle in the given figure ?

दी गई आकृति में त्रिभुज की संख्या ज्ञात कीजिए?

- (A) 34
- (B) 27
- (C) 21
- (D) 16





Find the missing :-

- (A) 125
- (B) 120
- (C) 100
- (D) 140

51	65	?
06	15	20
08	04	05
03	05	20

