

RRB NTPC CBT 2/GROUP D



REASONING

अबकी बार **RAILWAY** पार

Complete Revision



LIVE 7:30 PM





Don't Let Your Studies Get Impacted By COVID-19 Pandemic

Stay Home & Study Online With Mahendras Hybrid Model

Features



CONTACT US:

1800-103-5225

www.mahendras.org





UPCOMING ONLINE BATCHES

January 2022

05 Jan 2022

08:00 AM to 10:00 AM

BANK ONLINE LIVE CLASS

10:30 AM to 12:30 PM

SSC ONLINE LIVE CLASS

01:00 PM to 03:00 PM

SSC ONLINE LIVE CLASS

05:30 PM to 07:30 PM

BANK ONLINE LIVE CLASS

BILINGUAL

12 Jan 2022

08:00 AM to 10:00 AM

SSC ONLINE LIVE CLASS

10:30 AM to 12:30 PM

BANK ONLINE LIVE CLASS

03:00 PM to 05:00 PM

BANK ONLINE LIVE CLASS

05:30 PM to 07:30 PM

SSC ONLINE LIVE CLASS

BILINGUAL

19 Jan 2022

08:00 AM to 10:00 AM

BANK ONLINE LIVE CLASS

01:00 PM to 03:00 PM

BANK ONLINE LIVE CLASS

03:00 PM to 05:00 PM

SSC ONLINE LIVE CLASS

07:30 PM to 09:30 PM

SSC ONLINE LIVE CLASS

BILINGUAL

27 Jan 2022

10:30 AM to 12:30 PM

BANK ONLINE LIVE CLASS

07:30 PM to 09:30 PM

BANK ONLINE LIVE CLASS

08:00 AM to 10:00 AM

SSC ONLINE LIVE CLASS

01:00 PM to 03:00 PM

SSC ONLINE LIVE CLASS

BILINGUAL



www.mahendras.org

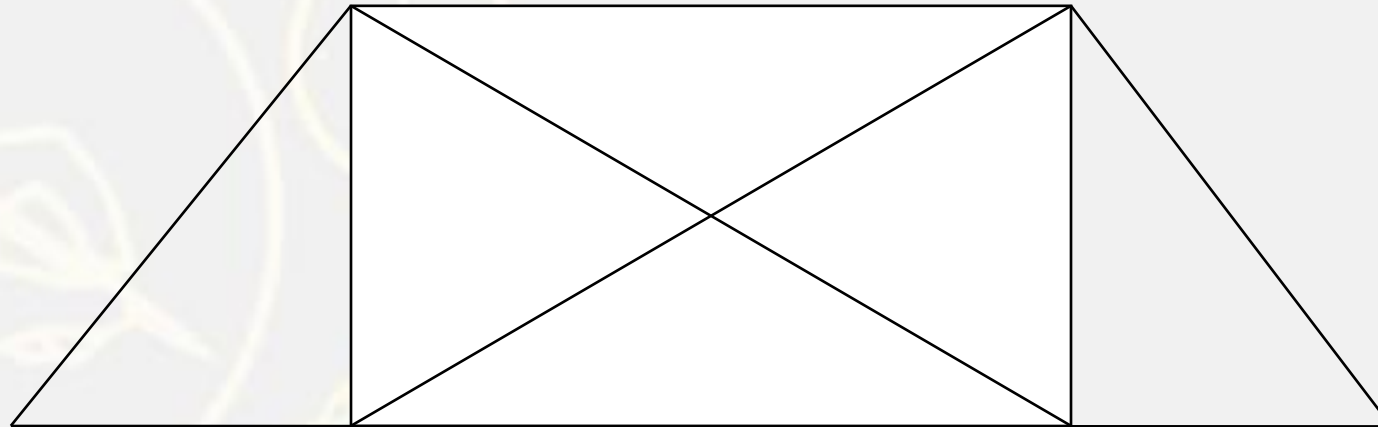
RRB NTPC Stage-2 Exam Pattern

Sections	No. of Questions	Total Marks	Duration
Mathematics	35	35	90 minutes
General Intelligence and Reasoning	35	35	
General Awareness	50	50	
Total	120	120	

Find number of triangle in figure?



- (A) 8
- (B) 10
- (C) 12
- (D) 14



Find the missing one (?)

JEEP : 144

MANY : 212

SHOW : ?

(A) 130

(B) 210

(C) 240

(D) 260



Find the option which should replace (?)

(12 , 67 , 122) :: ?

(A) 15 , 77 , 139

(B) 7 , 24 , 73

(C) 13 , 40 , 118

(D) 9 , 28 , 83



Which number will replace the question mark

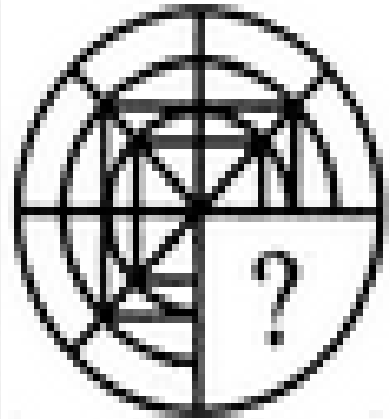
23	5	110
56	9	121
49	3	?



(A) 22
(C) 66

(B) 33
(D) 77


Find the complete image of given figure(?)




(1)



(2)



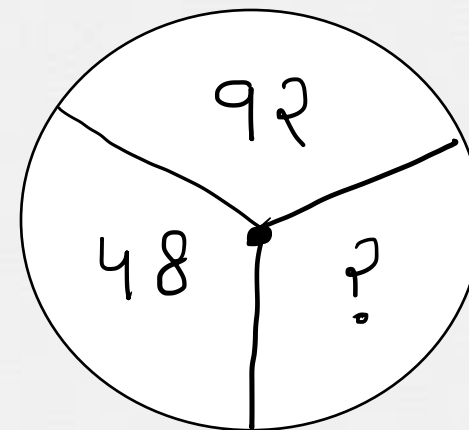
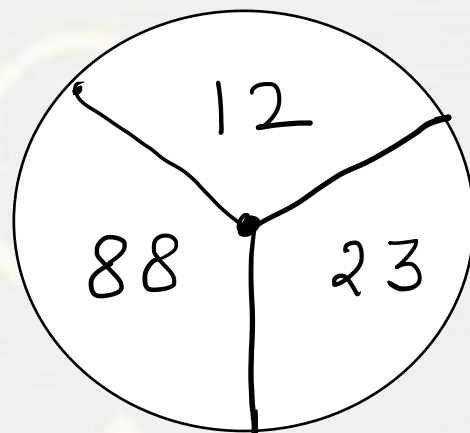
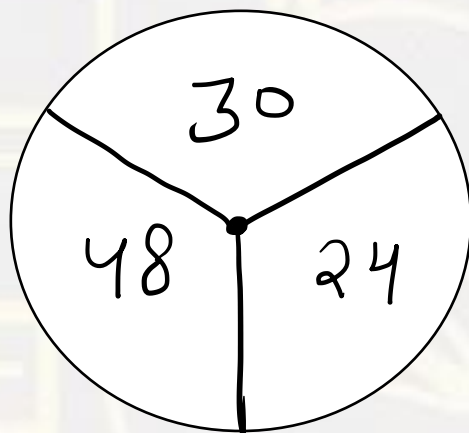
(3)



(4)

(X)

Find the option which should replace (?)



- (A) 60**
- (B) 46**
- (C) 86**
- (D) 75**



Find the option which should replace (?)

$$\text{FM} = 89$$

$$\text{GN} = 91$$

$$\text{PB} = ?$$

(A) 27

(B) 37

(C) 25

(D) 31



Find the option which should replace (?)

(8 , 28 , 6)

(A) 17 , 70 , 13

(B) 12 , 48 , 14

(C) 3 , 20 , 7

(D) 5 , 26 , 9



Find the option which should replace (?)

3 , 5 , 10 , 20 , 37 , ?

- (A) 69**
- (B) 58**
- (C) 61**
- (D) 63**



Find the Odd one (?)

- (A) 544**
- (B) 325**
- (C) 143**
- (D) 416**



Find the option which should replace (?)

$$12 : 42 :: ? : ?$$

(A) 16 : 53

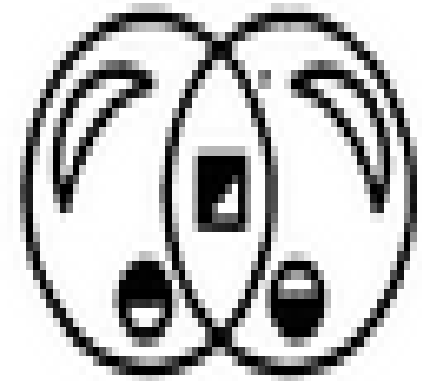
(B) 24 : 82

(C) 8 : 28

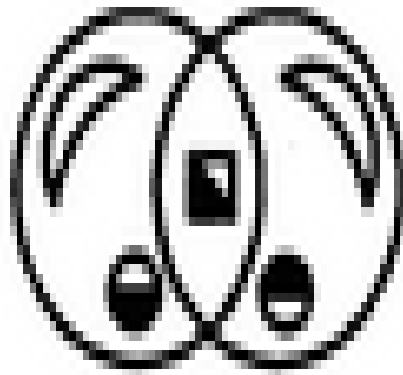
(D) 15 : 52



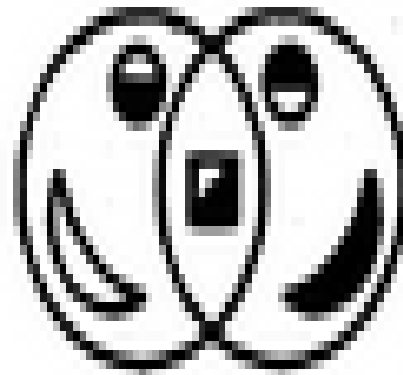
Find the water image of given figure(?)



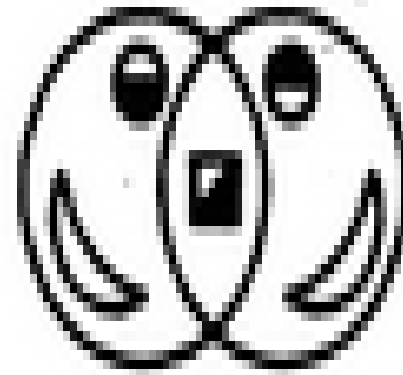
(X)



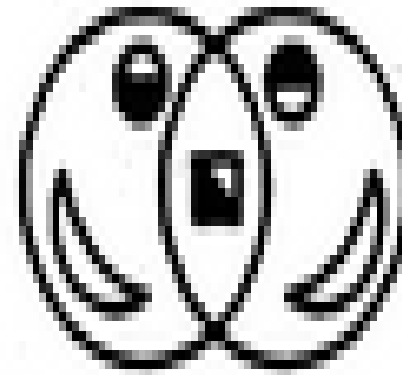
(1)



(2)



(3)



(4)



Find the option which should replace (?)

$$1111 = R$$

$$2222 = T$$

$$3333 = E$$

$$5555 = ?$$

- (A) T
- (B) Y
- (C) N
- (D) E



Find the option which should replace (?)

$$16 + 39 = 16$$

$$72 + 81 = 18$$

$$49 + 32 = 12$$

$$25 + 43 = ?$$

(A) 17

(B) 13

(C) 12

(D) 14



Find the option which should replace (?)

S , T , T , S , M , ?

- (A) S
- (B) B
- (C) R
- (D) W



Find the option which should replace (?)

$$6 @ 4 @ 3 = 29$$

$$3 @ 8 @ 7 = 338$$

$$9 @ 8 @ 2 = ?$$

(A) 8

(B) 9

(C) 56

(D) 165

