

RAILWAY GROUP D

 *Mahendra's*

REASONING



≡ अंतिम प्रहार ≡

EXPECTED QUESTIONS

LIVE | 08:30 PM





UPCOMING ONLINE BATCHES

August 2022

03 AUG 2022

03:00 PM to 05:00 PM

BANK ONLINE LIVE CLASS

01:00 PM to 03:00 PM

SSC ONLINE LIVE CLASS

BILINGUAL

10 AUG 2022

05:30 PM to 07:30 PM

BANK ONLINE LIVE CLASS

08:00 AM to 10:00 AM

SSC ONLINE LIVE CLASS

BILINGUAL

17 AUG 2022

08:00 AM to 10:00 AM

BANK ONLINE LIVE CLASS

05:30 PM to 07:30 PM

SSC ONLINE LIVE CLASS

BILINGUAL

24 AUG 2022

07:30 PM to 09:30 PM

BANK ONLINE LIVE CLASS

10:30 AM to 12:30 PM

SSC ONLINE LIVE CLASS

BILINGUAL

31 AUG 2022

10:30 AM to 12:30 PM

BANK ONLINE LIVE CLASS

07:30 PM to 09:30 PM

SSC ONLINE LIVE CLASS

BILINGUAL

10 AUG 2022

02:00 PM to 04:00 PM

BANK ONLINE LIVE CLASS

BENGALI+ENGLISH

31 AUG 2022

06:30 PM to 08:30 PM

BANK ONLINE LIVE CLASS

BENGALI+ENGLISH



www.mahendras.org



7052477777/7052577777



Mohit.. 19 hours ago 1 subscribers

Thank-you Sir for this Tremendous Class Session of today's.. 🙌 😊

And

My Answer for today's Homework is -

Option A- $32+ = 34$

Read more

👍 🗨️ REPLY ➡️

▼ [View reply from Mahendras : Online Videos For Govt. Exams](#)



🌸 PUJA KUNDU 🌸 ----- 21 hours ago 7 subscribers

Ans is—32 triangles.....thank you sir for the amazing session 🔥 🙌 🙌 🙌

👍 🗨️ REPLY ➡️

▼ [View reply from Mahendras : Online Videos For Govt. Exams](#)



Chhavi Saxena 21 hours ago

Home work answer is option A(32or more)

Very Nice session sir Thank you so much dear Sir 🙌 🙌 🙌 🙌 🙌 🙌 🙌 🙌 🙌 🙌 🙌

👍 🗨️ REPLY ➡️

▼ [View reply from Mahendras : Online Videos For Govt. Exams](#)



SANIA _____ 13 hours ago

Mast session sir 🙌 🙌

32++ 🔥 🔥

👍 🗨️ REPLY ➡️

▼ [View reply from Mahendras : Online Videos For Govt. Exams](#)



Puspranjan Singh 21 hours ago 1 subscribers

Thank you dear sir very nice session

REPLY



Surbhi Sinha 21 hours ago

32 or more ,, supper session sir,, take care Sir

REPLY

[View reply from Mahendras : Online Videos For Govt. Exams](#)



Ankit Vish 21 hours ago 249 subscribers

Answer. AAA

Lajwab session sir

1 REPLY

[View reply from Mahendras : Online Videos For Govt. Exams](#)



GUDIYA SHARMA 20 hours ago 2 subscribers

Sir जी कथन और निष्कर्ष के question liya kro grup d ke jese please

REPLY



vedant yaduwanshi 20 hours ago (edited)

Homework ans 32 more nice session sir

1 REPLY

[View reply from Mahendras : Online Videos For Govt. Exams](#)



GUDIYA SHARMA 20 hours ago [2 subscribers](#)

32more trianglae good sesss

REPLY



Janardan Yadav 8 hours ago [1 subscribers](#)

32

REPLY



BINOD_____ 21 hours ago [29 subscribers](#)

32+

REPLY

[View reply from Mahendras : Online Videos For Govt. Exams](#)



Bhavya thakur _____ 21 hours ago [27 subscribers](#)

32 more

REPLY

[View reply from Mahendras : Online Videos For Govt. Exams](#)



khushbu 21 hours ago

aaaa

REPLY

[View reply from Mahendras : Online Videos For Govt. Exams](#)



Puspranjan singh 21 hours ago [1 subscribers](#)

Aaa

REPLY

[View reply from Mahendras : Online Videos For Govt. Exams](#)

Find the option which should replace (?)

4 : 49

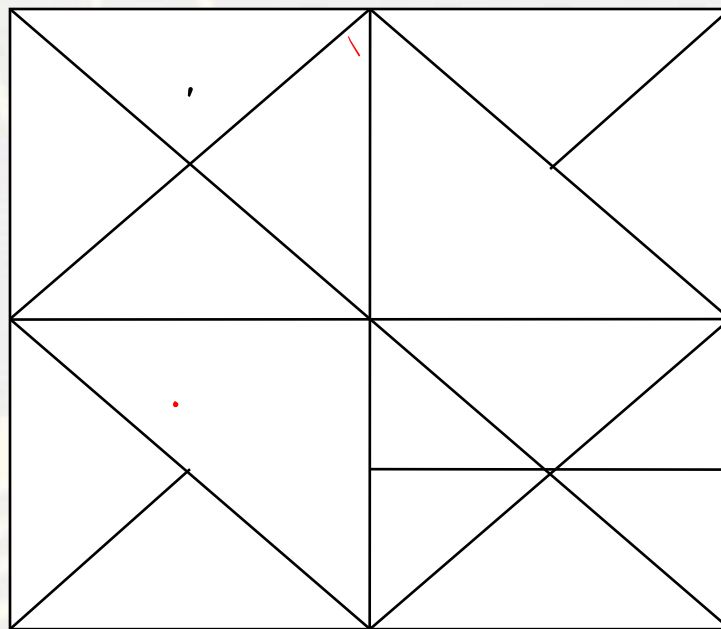
- (A) 7 : 100**
- (B) 5 : 82**
- (C) 8 : 144**
- (D) 6 : 64**



Find the number of triangle (?)



- (A) 32 OR MORE
- (B) 29
- (C) 30
- (D) 31



Find the option which should replace (?)

5	2
1	16

6	4
3	26

3	5
3	?



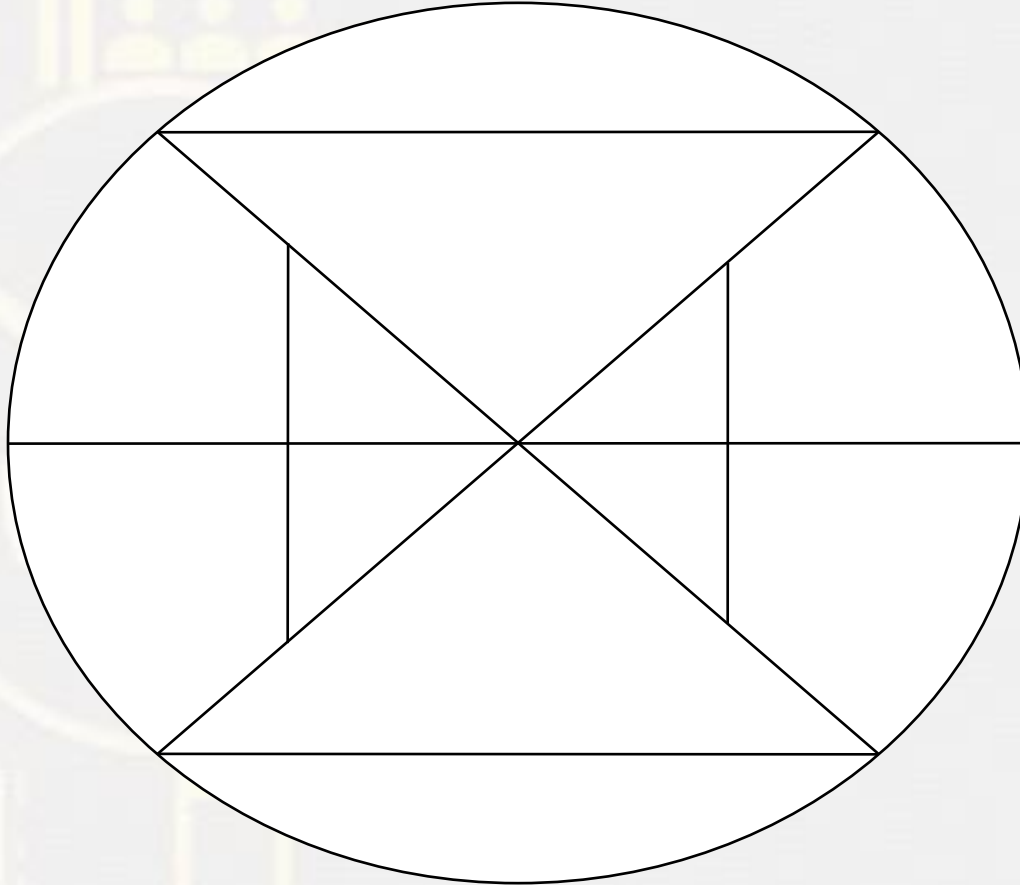
- (A) 30
- (B) 24
- (C) 22
- (D) 28

Choose the word which is different from the rest.

- A. 5934
- B. 248
- C. 3716
- D. 138



Find the number of triangles in the given figure.



- A. 5
- B. 8
- C. 10
- D. 9

Find the missing term(?)



(16 , 4 , 20) : ?

- (A) 17 , 11 , 35**
- (B) 32 , 8 , 40**
- (C) 10 , 4 , 44**
- (D) 9 , 3 , 41**

Find the option which should replace (?)

H : 8 :: K : ?

- (A) 8
- (B) 6
- (C) 27
- (D) 14



17	K	187
23	E	115
?	?	324



Find the option which should replace (?)

- (A) 18,18
- (B) 172,B
- (C) 164,B
- (D) 108,C

Find odd word from the given alternative.

दिए गए विकल्प में से विषम शब्द ज्ञात कीजिए ।

- (A) 44
- (B) 63
- (C) 35
- (D) 80



In a Certain code **PERMIT** is written as **275949**, than find the code for **AMOUNT**?

एक निश्चित कोड में **PERMIT** का कोड **275949** लिखा गया है तो **AMOUNT** का कोड क्या होगा ?

- (1) 635214
- (2) 214735
- (3) 214646
- (4) 214635



Arrange the in Meaning order :-

1. Birth / **जन्म**
2. Childhood / **बचपन**
3. Death / **मौत**
4. Infancy / **बचपन**
5. Adolescence / **किशोरावस्था**
6. Adulthood / **वयस्कता**
7. Old age / **बुढ़ापा**



A-,5,2, 3 ,1,4,6,7

B- 1,4,2,5,6,7,3


C- 1,2,4,5,6,3,7

D- 1,4,3,2,5,6,7

Find number of triangle in the given figure ?

दी गई आकृति में त्रिभुज की संख्या ज्ञात कीजिए?

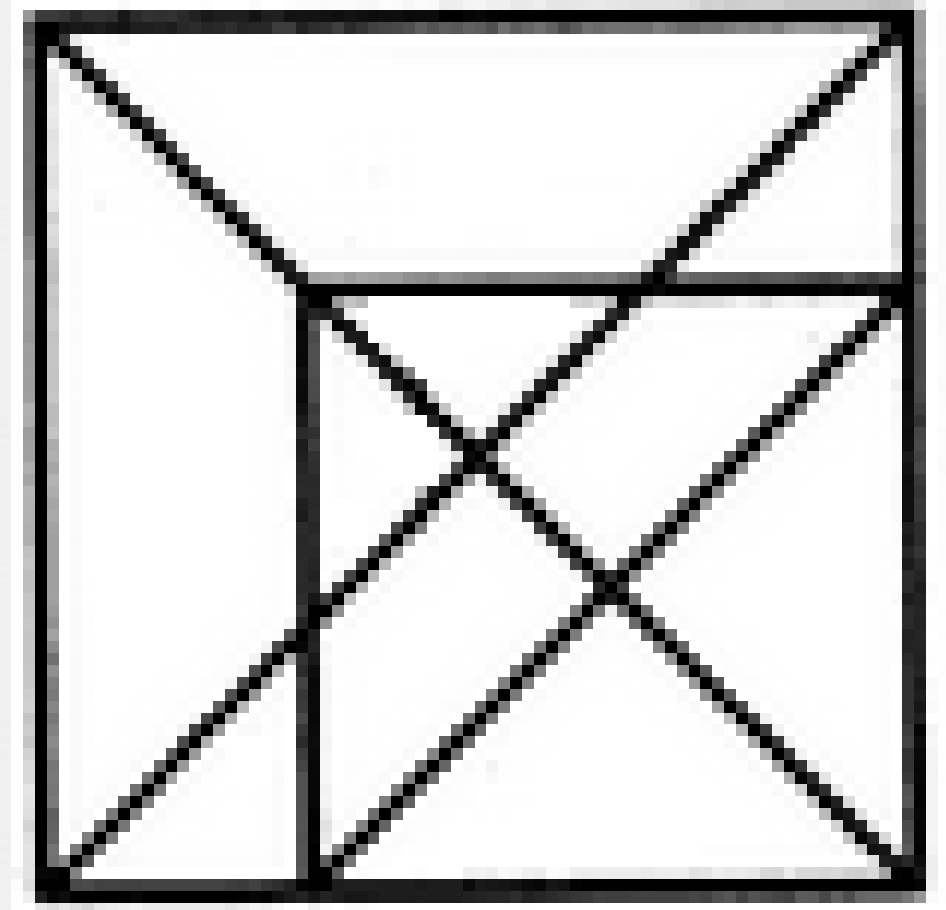
- (A) 34**
- (B) 27**
- (C) 24**
- (D) 16**



Find number of triangle in the given figure ?

दी गई आकृति में त्रिभुज की संख्या ज्ञात कीजिए?

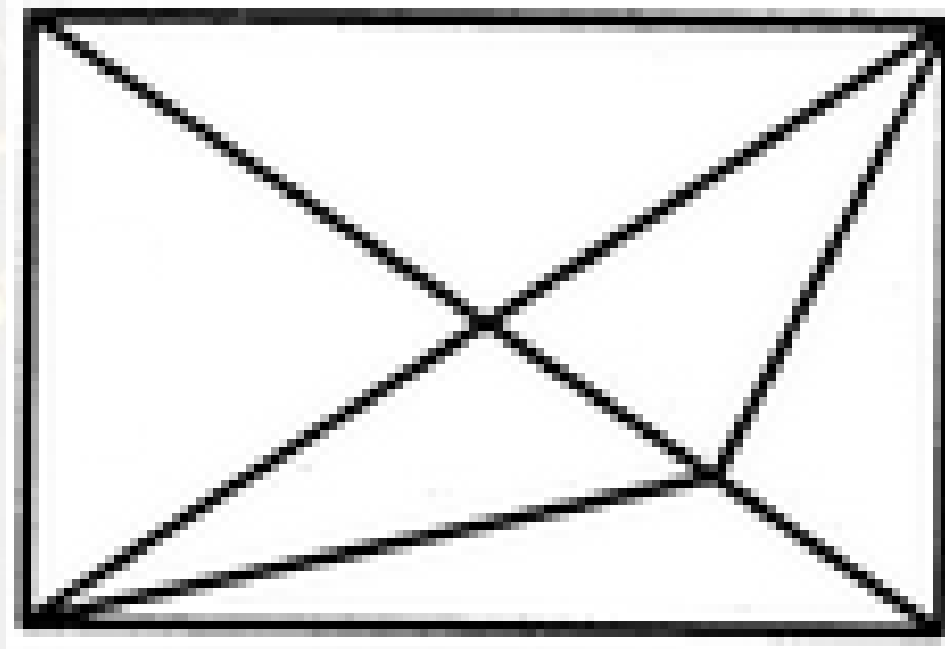
- (A) 34**
- (B) 27**
- (C) 21**
- (D) 16**



Find number of triangle in the given figure ?

दी गई आकृति में त्रिभुज की संख्या ज्ञात कीजिए?

- (A) 34**
- (B) 27**
- (C) 15**
- (D) 16**



Find the option which should replace (?)

$$6 : 24 :: 14 : ?$$

- (A) 61
- (B) 75
- (C) 131
- (D) 65



In each one kilometre distance a bike is standing .Then how many bikes are there in 10 km distance ?

प्रत्येक एक किलोमीटर की दूरी में एक बाइक खड़ी होती है। फिर 10 किलोमीटर की दूरी में कितनी बाइक होती हैं?

- (A) 10
- (B) 9
- (C) 11
- (D) 12

