



Mahendra's

RRB NTPC CBT 2 / GROUP D

REASONING

**NEW YEAR SPECIAL
CLASS**

**20
22**

LIVE

07:30 PM



RRB NTPC Stage-2 Exam Pattern

Sections	No. of Questions	Total Marks	Duration
Mathematics	35	35	90 minutes
General Intelligence and Reasoning	35	35	
General Awareness	50	50	
Total	120	120	

Find the MISSING (?)

169 : 10 :: 144 : ?

1. 8
2. 12
3. 18
4. 6



Find the missing term(?)

PO = @@@@

SBI = @@@

MAN = @

- A. @@@@
- B. @@@@
- C. @@@
- D. @



A is the father of X, B is the mother of Y. The sister of X and Z is Y.
Which of the following is not definitely true ?

A, X का पिता है, B, Y की माँ है। X और Z की बहन Y है। निम्नलिखित में से कौन निश्चित रूप से सत्य नहीं है?

- (A) B is the mother of Z.
- (B) X is the sister of Z.
- (C) Y is the son of A.
- (D) B has one daughter .



Find the option which should replace (?)

175 (576)463

192 (?) 357

- (A) 4**
- (B) 549**
- (C) 330**
- (D) 540**



Find the option which should replace (?)

e , h , j , m , o , r , t , _ , _

- (A) ur
- (B) pq
- (C) wy
- (D) xy



If in a certain code **ONE** is coded as **231**,
FIVE is coded as **9641**,
then how will be **NINE** coded?

- (A) 3316
- (B) 3361
- (C) 3613
- (D) 3631



Statement :

All 1 are 2. **सभी 1, 2 हैं।**

All 2 are 3 . **सभी 2, 3 हैं।**

Conclusions :

(I) Some 2 are 3. **कुछ 2, 3 हैं।**

(II) All 3 are 1. **सभी 3, 1 हैं।**

- (A) If only conclusion I follows.
(B) If only conclusion II follows.
(C) If neither conclusion I nor II follows.
(D) If both conclusion I and II are follows.



Which number will replace the question mark ?

10	5	6	42
17	3	14	68
8	15	?	92

(A) 46
(C) 10

(B) 23
(D) 25



Find the option which should replace (?)

$$7 : 85 :: ? : ?$$

- (A) 3 : 31
- (B) 8 : 113
- (C) 5 : 43
- (D) 2 : 9



Find odd word from the given alternative.
दिए गए विकल्प में से विषम शब्द ज्ञात कीजिए ।

- (A) Screw Driver / पेंचकस
- (B) Spanner / स्पैनर
- (C) Plier / प्लियर
- (D) Knife / चाकू



Find the MISSING (?)

$$16 * 25 * 77$$

$$23 * 52 * 57$$

$$23 * 32 * ?$$

(A) 78

(B) 55

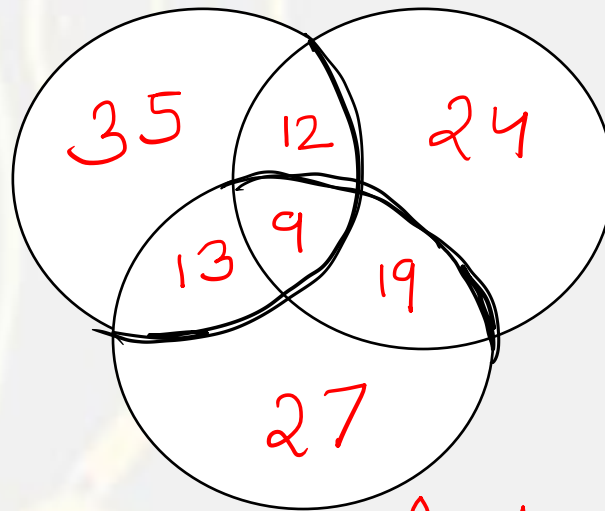
(C) 43

(D) 23



Find out the number of all those people who can speak Tamil and Telugu ?

Telugu



Tamil

English



- (A) 3
- (B) 59
- (C) 21
- (D) 112

Find the option which should replace (?)

0200, 1202, 2204, 3309, ?

- (A) 4409**
- (B) 1510**
- (C) 4520**
- (D) 4316**







Find the option which should replace (?)

13 , 12 , 16 , 7 , 23 , ?

- (A) 1**
- (B) 0**
- (C) -1**
- (D) -2**



Find the diagram that show right relation between **Kharif crops, Rice, Maize**
खरीफ की फसलें, चावल, मक्का?



- (A) A
- (B) B
- (C) C
- (D) D

IF you wrote all the numbers from 1 to 99 , then how many times would you have written 8 ?

यदि आपने 1 से 99 तक की सभी संख्याएँ लिखी हैं, तो आपने कितनी बार 8 लिखा होगा?

- (A) 18**
- (B) 19**
- (C) 20**
- (D) 21**



Find the TRIANGLE (?)

Hello , lower , error , originate , tense , ?

- (A) Night**
- (B) Rapture**
- (C) Senile**
- (D) Watch**



Find the missing (?)

2.5 , $10/3$, $15/4$, 4 , ?

- (A) $20/6$
- (B) $25/6$
- (C) 8
- (D) Not

