

RAILWAY GROUP D

 Mahendra's

REASONING



≡ अंतिम प्रहार ≡

EXPECTED
QUESTIONS

LIVE | 08:30 PM





UPCOMING ONLINE BATCHES

August 2022

03 AUG 2022

03:00 PM to 05:00 PM

BANK ONLINE LIVE CLASS

01:00 PM to 03:00 PM

SSC ONLINE LIVE CLASS

BILINGUAL

10 AUG 2022

05:30 PM to 07:30 PM

BANK ONLINE LIVE CLASS

08:00 AM to 10:00 AM

SSC ONLINE LIVE CLASS

BILINGUAL

17 AUG 2022

08:00 AM to 10:00 AM

BANK ONLINE LIVE CLASS

05:30 PM to 07:30 PM

SSC ONLINE LIVE CLASS

BILINGUAL

24 AUG 2022

07:30 PM to 09:30 PM

BANK ONLINE LIVE CLASS

10:30 AM to 12:30 PM

SSC ONLINE LIVE CLASS

BILINGUAL

31 AUG 2022

10:30 AM to 12:30 PM

BANK ONLINE LIVE CLASS

07:30 PM to 09:30 PM

SSC ONLINE LIVE CLASS

BILINGUAL

10 AUG 2022

02:00 PM to 04:00 PM

BANK ONLINE LIVE CLASS

BENGALI+ENGLISH

31 AUG 2022

06:30 PM to 08:30 PM

BANK ONLINE LIVE CLASS

BENGALI+ENGLISH



www.mahendras.org



7052477777/7052577777



Mohit.. 1 day ago 1 subscribers

Thank-you Sir for this Amazing class Session of today's.. 🙌 😊
And
My Answer for today's homework is like-
Option C- 19...

Read more



View reply from Mahendras : Online Videos For Govt. Exams



🌸 PUJA KUNDU 🌸 ----- 1 day ago 7 subscribers

The answer is ---19 rectangle.....thank you sir for the amazing session 🙌 🙌 🙌 🙌



View reply from Mahendras : Online Videos For Govt. Exams



Gautam 23 hours ago

Homework Answer is 19.
Very Nice Class Sir.. 🌸 🔥 🔥
Thank-you So much Sir.. 😊 😊 🙌



View reply from Mahendras : Online Videos For Govt. Exams



Vishnu Gupta 1 day ago 3 subscribers

Homework 📄 is the right ans 19
Very nice session sir Thank you 🙌 sir love you 🥰 sir



View reply from Mahendras : Online Videos For Govt. Exams



Chhavi Saxena 1 day ago

Home work answer is 19

Very Nice session sir Thank you so much dear Sir 🙏🙏🙏🙏🙏🙏🙏



REPLY



View reply from Mahendras : Online Videos For Govt. Exams



Ankit Vish 1 day ago 247 subscribers

Answer 19

Nice session sir 🙏🙏

Aap hamare liye itani mehnat karte hai bahut bahut dhanyawad sir 🙏🙏



1



REPLY



View reply from Mahendras : Online Videos For Govt. Exams



vedant yaduwanshi 1 day ago

Homework ans 19 THANK YOU SIR



REPLY



View reply from Mahendras : Online Videos For Govt. Exams



Kapil Bhagat 1 day ago

19



REPLY



Krishan Kumar 20 hours ago

Homework is 19 Answer



REPLY





khushbu 1 day ago

cccccc-----19



REPLY



View reply from Mahendras : Online Videos For Govt. Exams



Bidya Behera 1 day ago

19 👍



REPLY



View reply from Mahendras : Online Videos For Govt. Exams



Bhavya thakur _____ 1 day ago 27 subscribers

19 👍 👍



1



REPLY



View reply from Mahendras : Online Videos For Govt. Exams



Surbhi Sinha 1 day ago

19 🎉 🎉



REPLY



View reply from Mahendras : Online Videos For Govt. Exams



Jēthālāl _____ 1 day ago 29 subscribers

19



REPLY



View reply from Mahendras : Online Videos For Govt. Exams



Babu Sahab 1 day ago 1 subscribers

19



REPLY



View reply from Mahendras : Online Videos For Govt. Exams

Find the rectangle (?)

- 1. 15
- 2. 18
- 3. 19
- 4. 20



Find the missing :-

WATER : 55 :: STORE : 1 :: FORCE : ?

- (A) 10
- (B) 11
- (C) 14
- (D) 12



Find the odd (?)

1. M 25 H
2. J 16 G
3. R 49 K
4. K 49 D



Find the option which should replace (?)

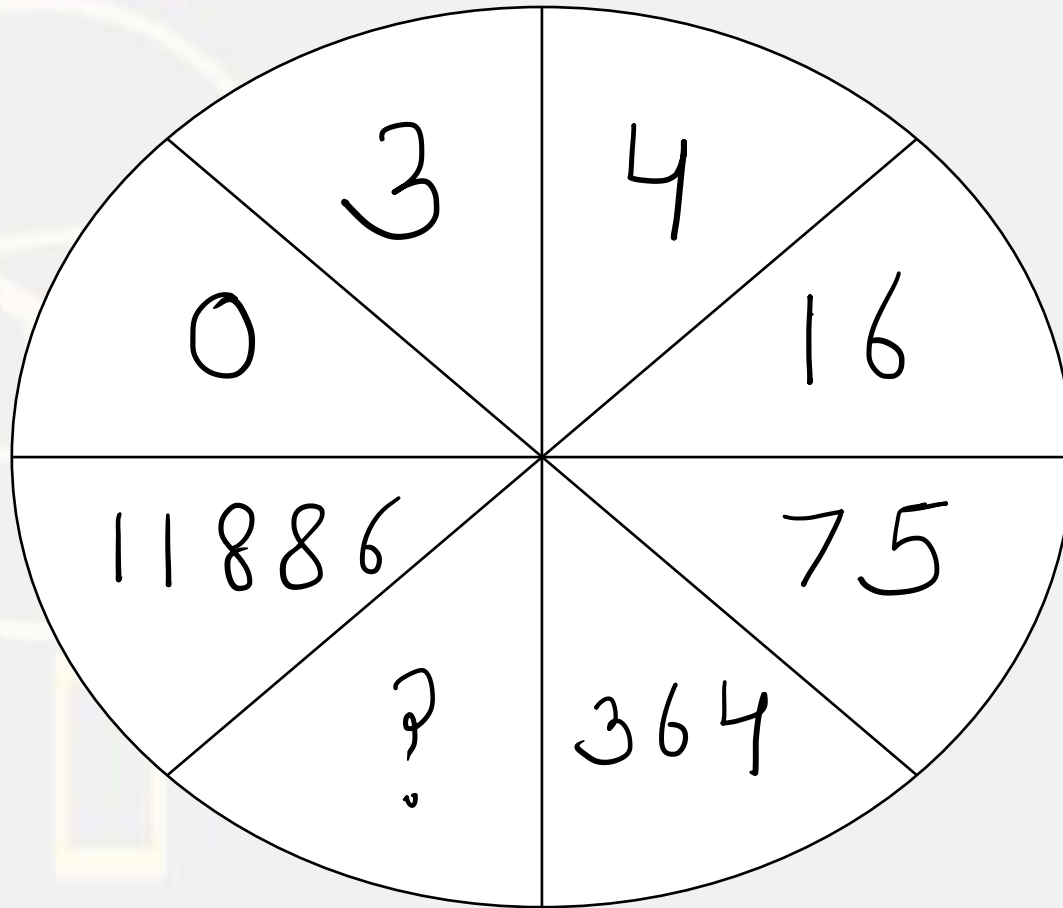
1. **Travel / यात्रा**
2. **Destination / गंतव्य**
3. **Payment / भुगतान**
4. **Seat no. / सीट नं।**
5. **Reservation / आरक्षण**
6. **Availability of Seat / सीट की उपलब्धता**

- (A) 236541
(B) 263541
(C) 341625
(D) 253461



Find the missing :-

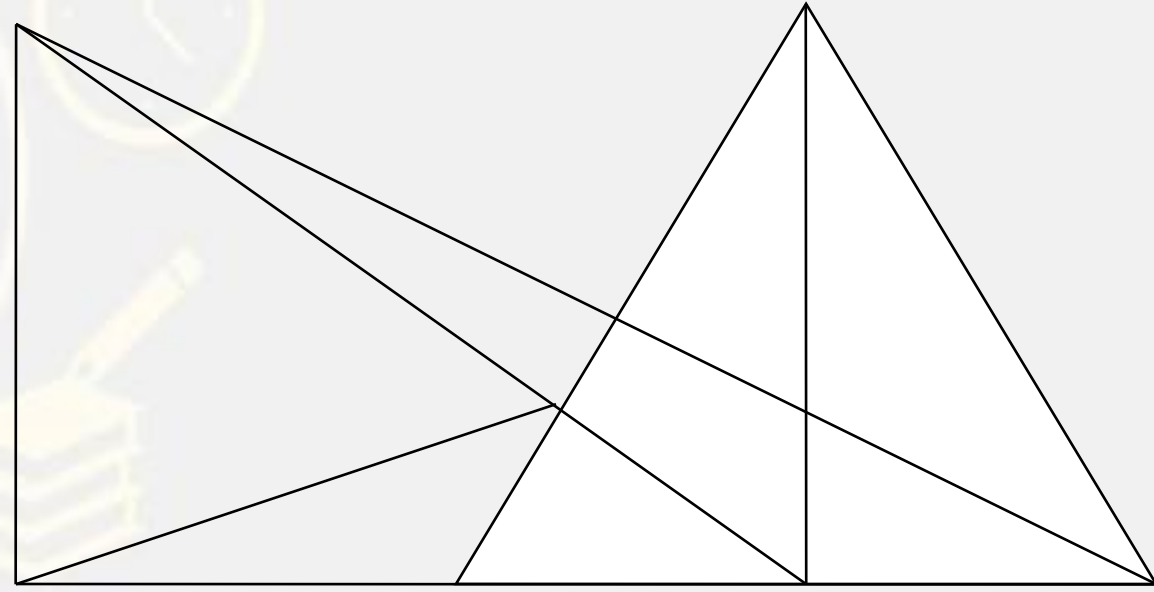
- (A) 828
- (B) 1293
- (C) 1945
- (D) 783



Find number of triangle in the given figure ?

दी गई आकृति में त्रिभुज की संख्या ज्ञात कीजिए?

- (A) 18**
- (B) 20**
- (C) 24**
- (D) 16**



Find the missing (?)

EDUCATION = 192021451420

GOVERNMENT =

(A) 1651516125

(B) 10152

(C) 3118

(D) 4516118201351420



There are two married couples in a family . % has two children . A is the wife of @ who is brother of # . F is daughter of % . U is sister of S who is son of @ . T is son of # who is male .

एक परिवार में दो विवाहित जोड़े हैं। % के दो बच्चे हैं। A, @ की पत्नी है जो # का भाई है। F, % की बेटी है। U, S का पुत्र है जो @ का पुत्र है। T, # का पुत्र है जो पुरुष है।

How is A related to % ?

A, % से कैसे संबंधित है?

1. SON
2. Sister in Law
3. Brother
4. Brother in Law



Find the ODD (?)

1. Political Science / राजनीति विज्ञान
2. Biology / जीवविज्ञान
3. History / इतिहास
4. Sociology / समाज शास्त्र



Find the missing (?)

YOGHURT = 7678392

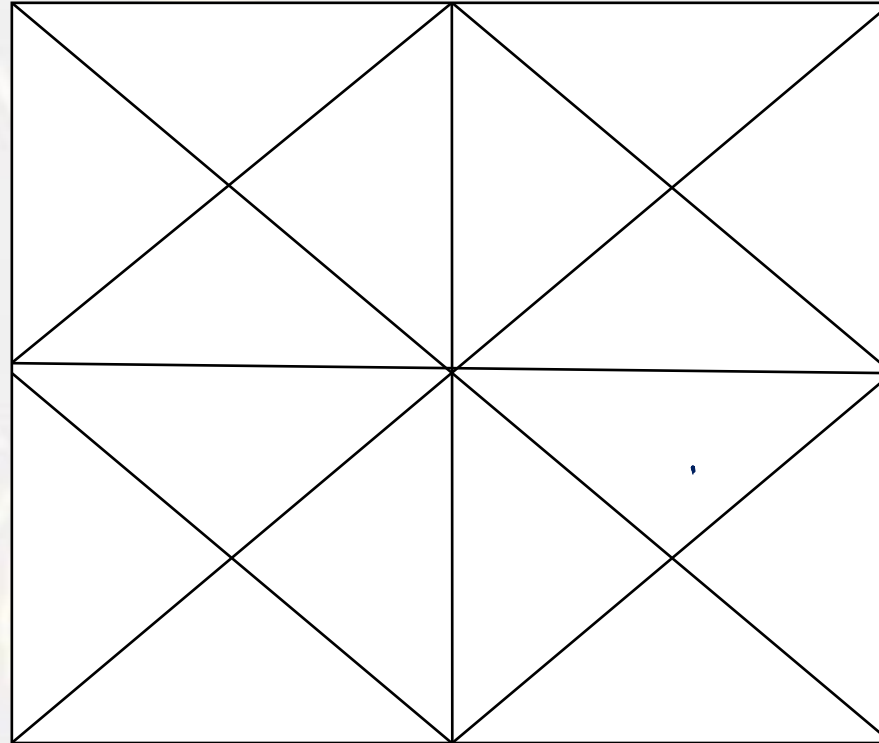
QUICKLY = ?

1. **8393117**
2. **8393237**
3. **7383237**
4. **8393227**



Find number of triangle in figure?

- (A) 48
- (B) 46
- (C) 44
- (D) 42



Find the missing term(?)

$$16 : 56 :: 32 : ?$$

- (A) 96
- (B) 112
- (C) 118
- (D) 128



Find the option which should replace (?)

$$9 \# 3 = 6$$

$$15 \# 3 = 9$$

$$27 \# 3 = ?$$

A. 10

B. 15

C. 20

D. 25



Find the option which should replace (?)

$$42 : 23 :: 123 : ?$$

- A. 41
- B. 42
- C. 44
- D. 45



Find the option which should replace (?)

45 : 7 :: 53 : ?

- A. 5
- B. 4
- C. 3
- D. 2



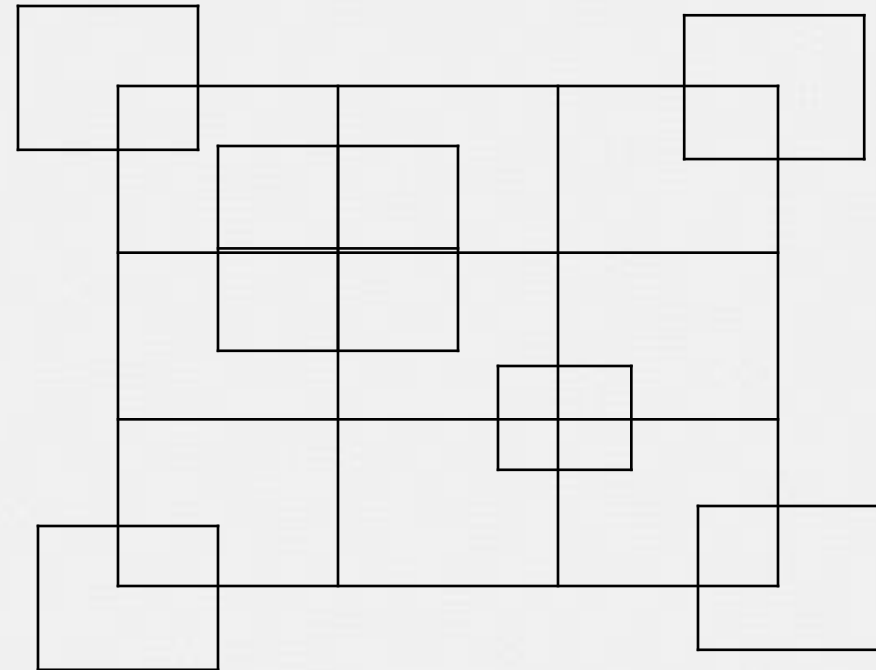
Find number of squares in figure?

(A) 25

(B) 35

(C) 32

(D) 30



Find the missing term(?)

$$5 : 421 :: 7 : ?$$

- (A) 125
- (B) 248
- (C) 243
- (D) 343



Arrange in dictionary order :

1. **Creates**
2. **Critically**
3. **Crores**
4. **Crucially**

- A. **4,2,1,3**
- B. **2,4,1,3**
- C. **1,2,3,4**
- D. **3,1,4,2**



If the letter of the English alphabet are serially numbered, one of the answer given below has a meaningful word hidden in it . Identify the answer .

यदि अंग्रेजी वर्णमाला के अक्षर को क्रमिक रूप से गिना जाता है, तो नीचे दिए गए उत्तर में से एक में एक सार्थक शब्द छिपा है। उत्तर को पहचानें।

- (A) 12 , 15 , 22 , 5
- (B) 6 , 1 , 5 , 3 , 5
- (C) 2 , 5 , 18 , 13 , 1
- (D) 1 , 5 , 18 , 13 , 1

