

SSC GD 2021



REASONING

25 कदम
Exam की ओर.....

Complete
MOCK TEST

25/25

LIVE 8:30 PM





Don't Let Your Studies Get Impacted By COVID-19 Pandemic

Stay Home & Study Online With Mahendras Hybrid Model

Features



Offline Classes



Live Interactive Online Classes



Same Faculty



Same Batch



Same Batch Timing



Online Library Facility



Recorded Video



PDFs



Classes In Both Model

CONTACT US:

1800-103-5225

www.mahendras.org





UPCOMING ONLINE BATCHES

November 2021

17 Nov 2021

01:00 PM to 3:00 PM

IBPS SO PRE CRASH COURSE
(BANK-SO)

08:00 AM to 10:00 AM

LIVE PREMIUM GREEN CARD
(BANK-PO & CLERK)

05:30 PM to 07:30 PM

LIVE PREMIUM GREEN CARD
(BANK-PO & CLERK)

10:30 AM to 12:30 PM

LIVE PREMIUM SILVER CARD
(SSC CGL & CHSL)

BILINGUAL

24 Nov 2021

10:30 AM to 12:30 PM

LIVE PREMIUM GREEN CARD
(BANK-PO & CLERK)

07:30 PM to 09:30 PM

LIVE PREMIUM GREEN CARD
(BANK-PO & CLERK)

03:00 PM to 5:00 PM

LIVE PREMIUM SILVER CARD
(SSC CGL & CHSL)

BILINGUAL



SSC GD 2021 Exam Analysis: Check difficulty level & number of good attempts

<i>Name of the section</i>	<i>Difficulty level</i>	<i>Number of good attempts</i>
General Intelligence and Reasoning	Easy to Moderate	20 to 22
General Knowledge and General Awareness	Easy to Moderate	18 to 20
Elementary Mathematics	Moderate	16 to 18
English/ Hindi	Easy to Moderate	21 to 23

Topic	No of Questions Asked in SSC GD Constable Exam
Coding-Decoding	2
Statement Conclusion	–
Missing Term	2
Venn Diagram	1
Syllogism	2
Paper Folding	1
Blood relation & order and ranking	2
Mathematics Operation	1
Analogy & Classification	6
Series	4
Dice & Sequence	2
Puzzle (Linear Sitting Arrangement)	2
Mirror Image	1
Hidden Figure	1
Complete Figure & Figure Counting	2
Total	25



🌸 PUJA KUNDU 🌸 20 hours ago

D is the answer....SUPERB SESSION SIR AND THANK YOU FOR THE SESSION 🙏

👍 1 🗨️ REPLY

▼ [View reply from Mahendras : Online Videos For Govt. Exams](#)



Viśhñù Güptâ 20 hours ago

D is the right ans very dhashu session sir thank you 🙏 sir ❤️

👍 1 🗨️ REPLY

▼ [View reply from Mahendras : Online Videos For Govt. Exams](#)



bablu sharma 1 hour ago

And -d aaj mera Sara question kaam time main Sahi hua mja aa gya sir super session sir ji 🙏🙏🙏

👍 1 🗨️ REPLY



RASHMI SONI 🙏 _____ 20 hours ago

ANSWER OF THE DAY, D
NICE SESSION 😊

👍 1 🗨️ REPLY

▼ [View reply from Mahendras : Online Videos For Govt. Exams](#)



SANIA _____ 18 hours ago

nice session sir 🙏🙏🙏🙏
option D 🔥🔥🔥🔥🔥

👍 1 🗨️ REPLY

▼ [View reply from Mahendras : Online Videos For Govt. Exams](#)



SOUVIK DUTTA 20 hours ago (edited)

D is the right Answer
NICE SESSION SIR

1 [REPLY](#)

[View reply from Mahendras : Online Videos For Govt. Exams](#)



Chhavi Saxena 20 hours ago

Home work answer is option D 🙏🙏

1 [REPLY](#)

[View reply from Mahendras : Online Videos For Govt. Exams](#)



Ankit Vish 20 hours ago

Answer. BBB

Very nice session sir 🙏🙏

2 [REPLY](#)

[View reply from Mahendras : Online Videos For Govt. Exams](#)



Masum Idki 🤔 18 hours ago

D very nice session 👍👍

1 [REPLY](#)

[View reply from Mahendras : Online Videos For Govt. Exams](#)



Shruti Jain 10 hours ago

Ddd👍👍👍

1 [REPLY](#)

[View reply from Mahendras : Online Videos For Govt. Exams](#)



Hrithik _____ 20 hours ago

B/D



1



REPLY

▼ [View reply from Mahendras : Online Videos For Govt. Exams](#)



uma Sankar 10 hours ago

B,d sir



1



REPLY

▼ [View reply from Mahendras : Online Videos For Govt. Exams](#)



Kapil Bhagat 20 hours ago

BBB



REPLY



Preeti 20 hours ago

Bb




1




REPLY

▼ [View reply from Mahendras : Online Videos For Govt. Exams](#)

Which of the following diagrams indicates the best relation between (Bird, Bat , Whale) / (पक्षी, चमगादड़, व्हेल)




A.



B



.C



.D.



Find the missing term(?)

$$15 : 441 :: 20 : ?$$

- (A) 625
- (B) 361
- (C) 982
- (D) 576



Find the missing term(?)

$$6 : 45 :: 11 : ?$$

- (A) 132
- (B) 144
- (C) 6
- (D) 81



Find the missing term(?)

852 : 454 :: 679 : ?

- (A) 691**
- (B) 666**
- (C) 579**
- (D) 289**



Find the missing term(?)

$$66 : 9 :: 44 : ?$$

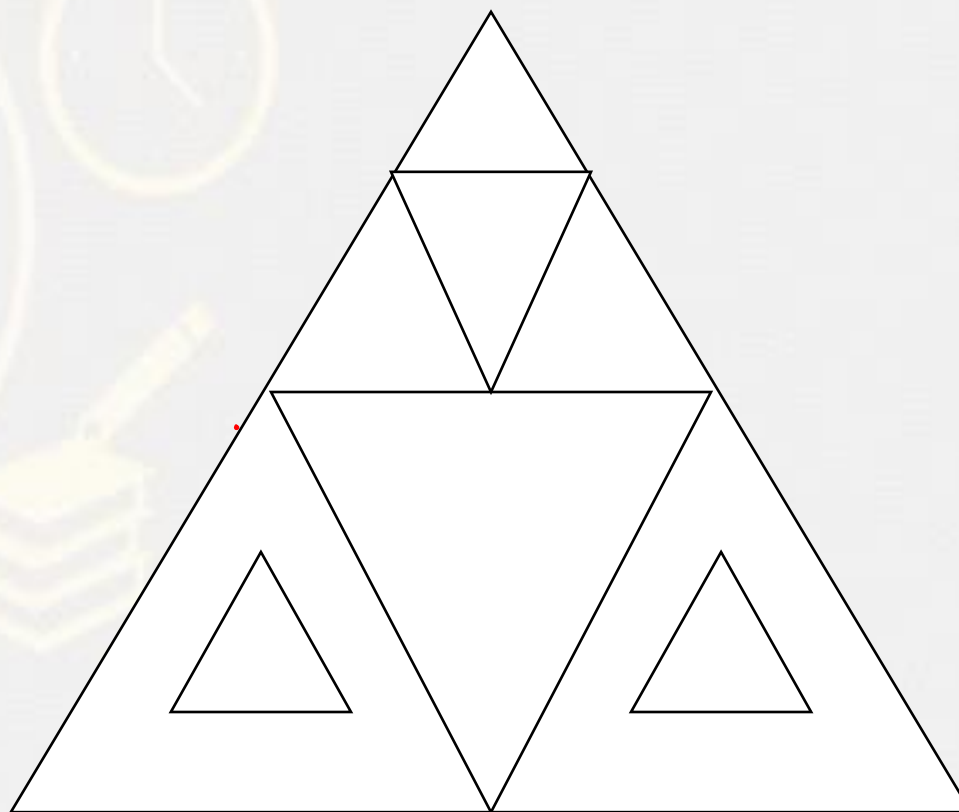
- (A) 10
- (B) 9
- (C) 8
- (D) 6



Find the number of triangle (?)



- (A) 9**
- (B) 10**
- (C) 11**
- (D) 12**



Find the option which should replace (?)

4 : 49

- (A) 7 : 100**
- (B) 5 : 82**
- (C) 8 : 144**
- (D) 6 : 64**



Find the option which should replace (?)

5	2
1	16

6	4
3	26

3	5
3	?



- (A) 30
- (B) 24
- (C) 22
- (D) 28

Choose the word which is different from the rest.

A. 5934

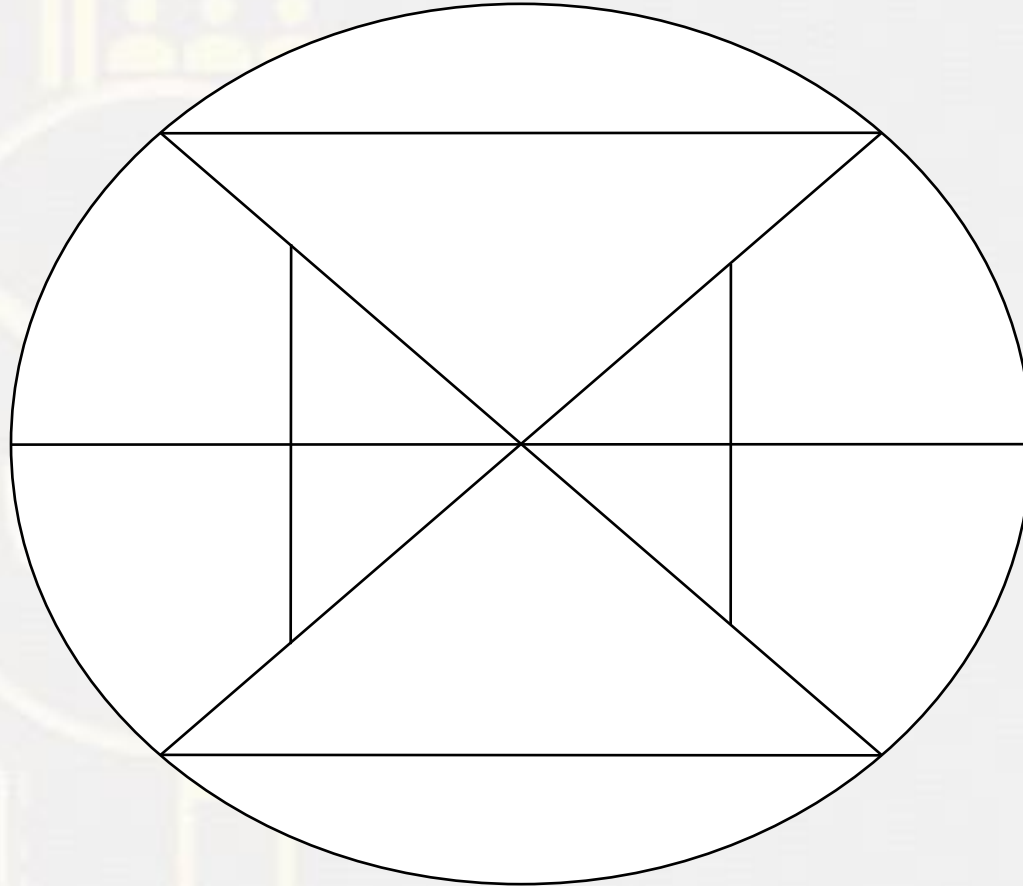
B. 248

C. 3716

D. 138



Find the number of triangles in the given figure.



- A. 5
- B. 8
- C. 10
- D. 9

17	K	187
23	E	115
?	?	324



Find the option which should replace (?)

- (A) 18,18
- (B) 172,B
- (C) 164,B
- (D) 108,C

Find odd word from the given alternative.

दिए गए विकल्प में से विषम शब्द ज्ञात कीजिए ।

- (A) 44
- (B) 63
- (C) 35
- (D) 80



In a Certain code **PERMIT** is written as **275949**, than find the code for **AMOUNT**?

एक निश्चित कोड में **PERMIT** का कोड **275949** लिखा गया है तो **AMOUNT** का कोड क्या होगा ?

- (1) 635214
- (2) 214735
- (3) 214646
- (4) 214635



Arrange the in Meaning order :-

1. Birth / **जन्म**
2. Childhood / **बचपन**
3. Death / **मौत**
4. Infancy / **बचपन**
5. Adolescence / **किशोरावस्था**
6. Adulthood / **वयस्कता**
7. Old age / **बुढ़ापा**



A-,5,2, 3 ,1,4,6,7

B- 1,4,2,5,6,7,3

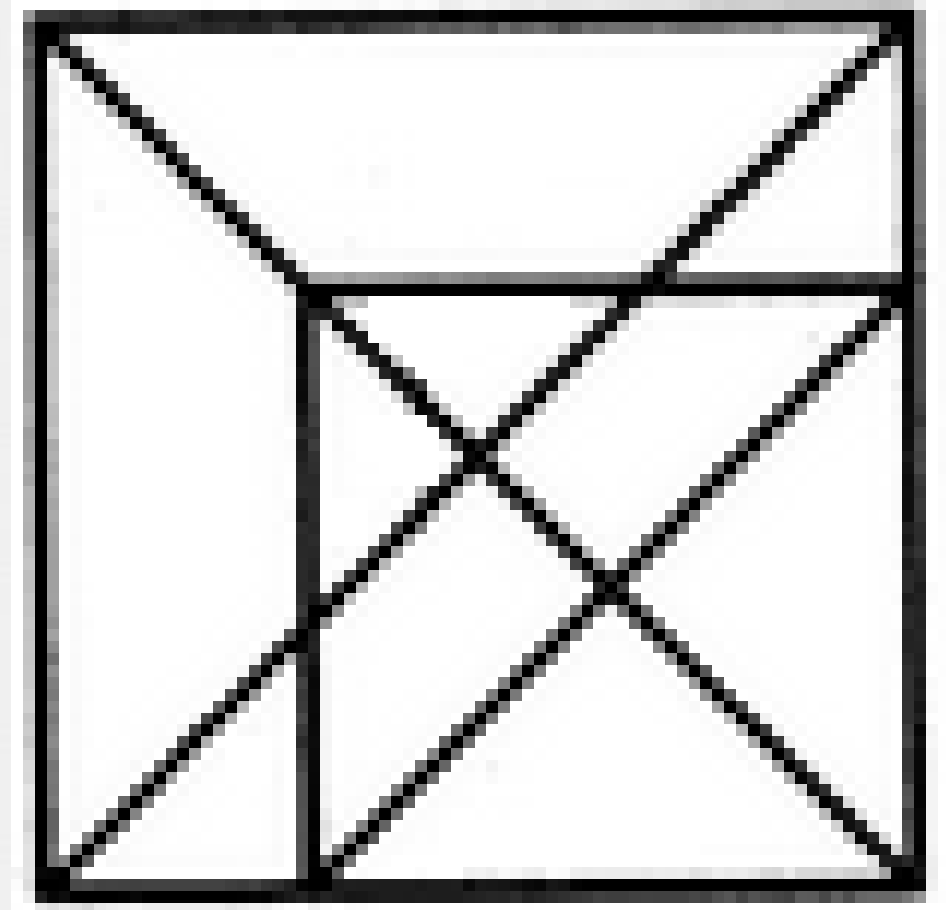
C- 1,2,4,5,6,3,7

D- 1,4,3,2,5,6,7

Find number of triangle in the given figure ?

दी गई आकृति में त्रिभुज की संख्या ज्ञात कीजिए?

- (A) 34**
- (B) 27**
- (C) 21**
- (D) 16**



Find the option which should replace (?)

$$6 : 24 :: 14 : ?$$

- (A) 61
- (B) 75
- (C) 131
- (D) 65

