

RRB NTPC CBT 2/GROUP D



REASONING

अबकी बार **RAILWAY** पार

Complete Revision



LIVE 7:30 PM





Don't Let Your Studies Get Impacted By COVID-19 Pandemic

Stay Home & Study Online With Mahendras Hybrid Model

Features



Offline Classes



Live Interactive Online Classes



Same Faculty



Same Batch



Same Batch Timing



Online Library Facility



Recorded Video



PDFs



Classes In Both Model

CONTACT US:

1800-103-5225

www.mahendras.org





UPCOMING ONLINE BATCHES

January 2022

05 Jan 2022

08:00 AM to 10:00 AM

BANK ONLINE LIVE CLASS

10:30 AM to 12:30 PM

SSC ONLINE LIVE CLASS

01:00 PM to 03:00 PM

SSC ONLINE LIVE CLASS

05:30 PM to 07:30 PM

BANK ONLINE LIVE CLASS

BILINGUAL

12 Jan 2022

08:00 AM to 10:00 AM

SSC ONLINE LIVE CLASS

10:30 AM to 12:30 PM

BANK ONLINE LIVE CLASS

03:00 PM to 05:00 PM

BANK ONLINE LIVE CLASS

05:30 PM to 07:30 PM

SSC ONLINE LIVE CLASS

BILINGUAL

19 Jan 2022

08:00 AM to 10:00 AM

BANK ONLINE LIVE CLASS

01:00 PM to 03:00 PM

BANK ONLINE LIVE CLASS

03:00 PM to 05:00 PM

SSC ONLINE LIVE CLASS

07:30 PM to 09:30 PM

SSC ONLINE LIVE CLASS

BILINGUAL

27 Jan 2022

10:30 AM to 12:30 PM

BANK ONLINE LIVE CLASS

07:30 PM to 09:30 PM

BANK ONLINE LIVE CLASS

08:00 AM to 10:00 AM

SSC ONLINE LIVE CLASS

01:00 PM to 03:00 PM

SSC ONLINE LIVE CLASS

BILINGUAL



RRB NTPC Stage-2 Exam Pattern

Sections	No. of Questions	Total Marks	Duration
Mathematics	35	35	90 minutes
General Intelligence and Reasoning	35	35	
General Awareness	50	50	
Total	120	120	



Viśhñù Güptá 15 hours ago

12 Triangles is the right ans

Very dhashu session sir thank you 🙏 sir ❤️

👍 1 🗨️ 📄 ▼ 📄 REPLY

▶ [View reply from Mahendras : Online Videos For Govt. Exams](#)



Viśhñù Güptá 15 hours ago

12 Triangles is the right ans

Very dhashu session sir thank you 🙏 sir ❤️

👍 1 🗨️ 📄 ▼ 📄 REPLY

▶ [View reply from Mahendras : Online Videos For Govt. Exams](#)



SAPANA 13 hours ago

Ans..... 12

Nice session sir 👍

Thank you sir 🙏🙏🙏

👍 1 🗨️ 📄 ▼ 📄 REPLY

▶ [View reply from Mahendras : Online Videos For Govt. Exams](#)



Radha Garima 15 hours ago

Answer : 12 📄📄📄

Nice session sir 🙏🙏🙏

👍 1 🗨️ 📄 ▼ 📄 REPLY

▶ [View reply from Mahendras : Online Videos For Govt. Exams](#)



RASHMI SONI 🇮🇳✍️ 14 hours ago

HW ANSWER 12

THANK YOU SIR 😊

👍 1 💬 📄 ▼ 📄 REPLY

▼ [View reply from Mahendras : Online Videos For Govt. Exams](#)



SANIA _____ 5 hours ago

shaandaar session sir 🙏🙏

12 🔥🔥🔥🔥🔥

👍 1 💬 📄 ▼ 📄 REPLY

▼ [View reply from Mahendras : Online Videos For Govt. Exams](#)



Shruti Jain 3 hours ago

12 nice session sir.

👍 💬 📄 ▼ 📄 REPLY



Rohit Gond 16 hours ago

12 triangles

Apka bahut bahut dhanyawad sir ji is shandaar class k liye

👍 1 💬 📄 ▼ 📄 REPLY

▼ [View reply from Mahendras : Online Videos For Govt. Exams](#)



GUDIYA SHARMA 13 hours ago

12 easy tha sir 🙏🙏🙏🙏🙏

👍 1 💬 📄 ▼ 📄 REPLY

▶ [View reply from Mahendras : Online Videos For Govt. Exams](#)



Chhavi Saxena 16 hours ago

Home work answer is 12

👍 1 💬 📄 ▼ 📄 REPLY

▶ [View reply from Mahendras : Online Videos For Govt. Exams](#)



JIBAN Rout 4 hours ago

Answer - 12

👍 💬 📄 ▼ 📄 REPLY



Kapil Bhagat 16 hours ago

12

👍 💬 📄 ▼ 📄 REPLY



SOUVIK DUTTA 16 hours ago

Answer is 12

👍 1 💬 📄 ▼ 📄 REPLY

▶ [View reply from Mahendras : Online Videos For Govt. Exams](#)



Piyush Rai 14 hours ago

12

1 [REPLY](#)

[View reply from Mahendras : Online Videos For Govt. Exams](#)



H.R.X 15 hours ago

12

1 [REPLY](#)

[View reply from Mahendras : Online Videos For Govt. Exams](#)



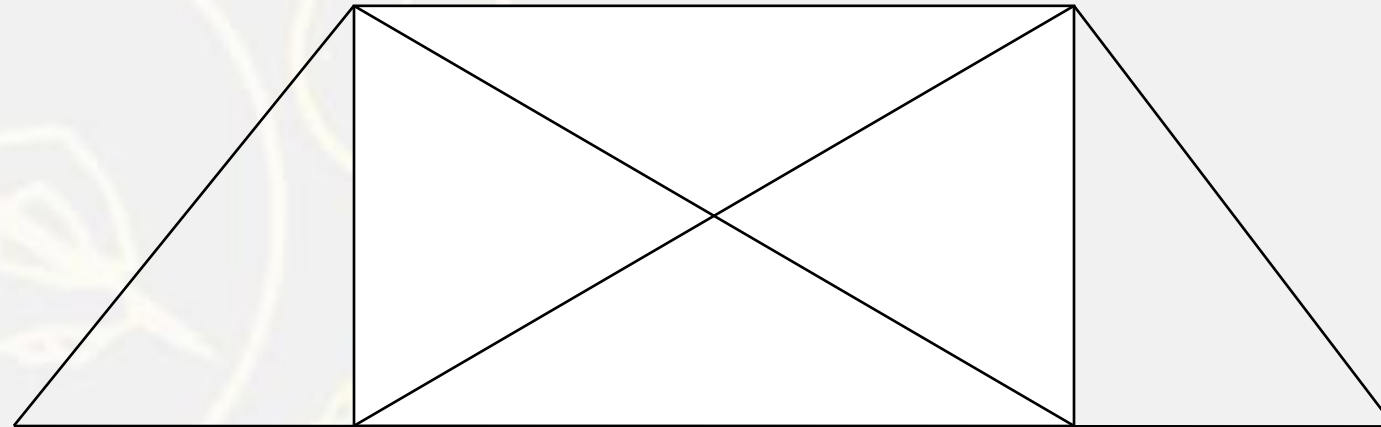
puspranjan singh 16 hours ago

12

1 [REPLY](#)

[View reply from Mahendras : Online Videos For Govt. Exams](#)

Find number of triangle in figure?



- (A) 8
- (B) 10
- (C) 12
- (D) 14

Find the missing one (?)

JEEP : 144
MANY : 212
SHOW : ?


- (A) 130**
- (B) 210**
- (C) 240**
- (D) 260**




Which of the following diagrams indicates the best relation between Villagers , Poor person and Males /
ग्रामीण, गरीब व्यक्ति और नर ?




A.



B



.C



.D.

Find the option which should replace (?)

(12 , 67 , 122) :: ?

- (A) 15 , 77 , 139**
- (B) 7 , 24 , 73**
- (C) 13 , 40 , 118**
- (D) 9 , 28 , 83**



Which number will replace the question mark



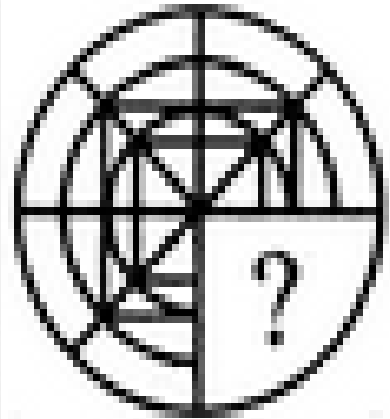
23	5	110
56	9	121
49	3	?



(A) 22
(C) 66

(B) 33
(D) 77

Find the complete image of given figure(?)



(X)

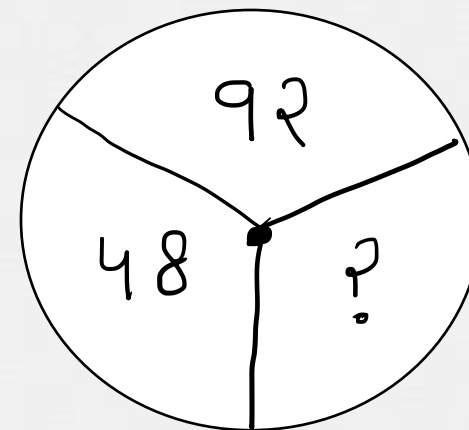
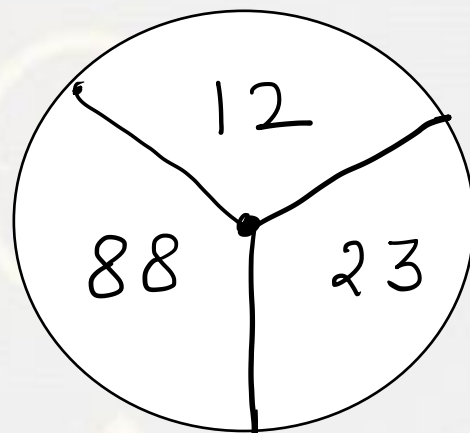
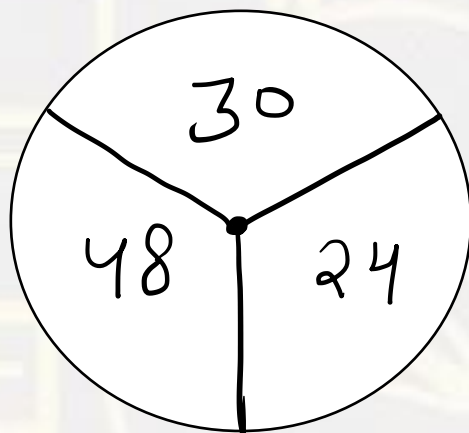
(1)

(2)

(3)

(4)

Find the option which should replace (?)



- (A) 60
- (B) 46
- (C) 86
- (D) 75



Find the option which should replace (?)

$$\text{FM} = 89$$

$$\text{GN} = 91$$

$$\text{PB} = ?$$

(A) 27

(B) 37

(C) 25

(D) 31



Kindly arrange the word in a meaningful order and find what is the last alphabet of that meaningful word :-

N U P C H A

- (A) A
- (B) N
- (C) H
- (D) P



Find the option which should replace (?)

(8 , 28 , 6)

(A) 17 , 70 , 13

(B) 12 , 48 , 14

(C) 3 , 20 , 7

(D) 5 , 26 , 9



Find the option which should replace (?)

3 , 5 , 10 , 20 , 37 , ?

- (A) 69**
- (B) 58**
- (C) 61**
- (D) 63**



Find the Odd one (?)

- (A) 544**
- (B) 325**
- (C) 143**
- (D) 416**



Find the option which should replace (?)

12 : 42 :: ? : ?

- (A) 16 : 53**
- (B) 24 : 82**
- (C) 8 : 28**
- (D) 15 : 52**

