



 *Mahendra's*

UP Police कांस्टेबल

REASONING

LIVE EXAM



 **4:00 PM**

LIVE 



Don't Let Your Studies Get Impacted By COVID-19 Pandemic

Stay Home & Study Online With Mahendras Hybrid Model

Features



Offline Classes



Live Interactive Online Classes



Same Faculty



Same Batch



Same Batch Timing



Online Library Facility



Recorded Video



PDFs



Classes In Both Model

CONTACT US:

1800-103-5225

www.mahendras.org





UPCOMING ONLINE BATCHES

February 2022

02 Feb 2022

08:00 AM to 10:00 AM

BANK ONLINE LIVE CLASS

05:30 PM to 07:30 PM

BANK ONLINE LIVE CLASS

01:00 PM to 03:00 PM

SSC ONLINE LIVE CLASS

10:30 AM to 12:30 PM

SSC ONLINE LIVE CLASS

BILINGUAL

09 Feb 2022

10:30 AM to 12:30 PM

BANK ONLINE LIVE CLASS

03:00 PM to 05:00 PM

BANK ONLINE LIVE CLASS

05:30 PM to 07:30 PM

SSC ONLINE LIVE CLASS

BILINGUAL

16 Feb 2022

01:00 PM to 03:00 PM

BANK ONLINE LIVE CLASS

08:00 AM to 10:00 AM

BANK ONLINE LIVE CLASS

07:30 PM to 09:30 PM

SSC ONLINE LIVE CLASS

03:00 PM to 05:00 PM

SSC ONLINE LIVE CLASS

BILINGUAL

23 Feb 2022

10:30 AM to 12:30 PM

BANK ONLINE LIVE CLASS

08:00 AM to 10:00 AM

SSC ONLINE LIVE CLASS

01:00 PM to 03:00 PM

SSC ONLINE LIVE CLASS

BILINGUAL

08:00 AM to 10:00 AM

SSC ONLINE LIVE CLASS

(SSC CGL & CHSL)

ENGLISH MEDIUM

07:30 PM to 09:30 PM

BANK ONLINE LIVE CLASS

(BANK PO & CLERK)

ENGLISH MEDIUM



Chhavi Saxena 17 hours ago

Home work answer is 17 (prime no. logic)

Very Nice Session Sir Thanku so much 🙏🙏🙏🙏

REPLY

▼ [View reply from Mahendras : Online Videos For Govt. Exams](#)



Viśhñù Güptâ 16 hours ago

Ans is the right =17

Very nice session sir Thank you 🙏 sir love ❤️ you sir

REPLY

▼ [View reply from Mahendras : Online Videos For Govt. Exams](#)



Radha Garima 13 hours ago

Answer : 17

Nice session sir 🙏😊

REPLY

▼ [View reply from Mahendras : Online Videos For Govt. Exams](#)



Ankit Vish 17 hours ago

Answer. C

Very nice session sir 🙏🙏

1 REPLY

▼ [View reply from Mahendras : Online Videos For Govt. Exams](#)



ANNU LATA 13 hours ago

ccc is right ans

REPLY

▼ [View reply from Mahendras : Online V](#)



SANIA _____ 3 hours ago

mast session sir 🙏🙏🙏🙏
17(all prime) 🔥🔥🔥🔥🔥

👍 🗨️ 🔄 ▼ 📄 REPLY

▶ [View reply from Mahendras : Online Videos For Govt. Exams](#)



🌸 PUJA KUNDU 🌸 17 hours ago

Answer is 17....all are prime.....aaj to photo session tha sir 🙏🙏🙏

👍 🗨️ 🔄 ▼ 📄 REPLY

▶ [View reply from Mahendras : Online Videos For Govt. Exams](#)



SANIA _____ 3 hours ago

sir 17 feb ko mene bhi answer kiya tha comment box me mera naam phir se uda diya sir 😞😞😞😞

👍 🗨️ 🔄 ▼ 📄 REPLY



Anushka Mishra 10 hours ago

17

👍 🗨️ 🔄 ▼ 📄 REPLY

▶ [View reply from Mahendras : Online Videos For Govt. Exams](#)



Piyush Rai 11 hours ago

17

👍 🗨️ 🔄 ▼ 📄 REPLY

▶ [View reply from Mahendras : Online Videos For Govt. Exams](#)

Find the missing ONE (?)

- (A) 15
- (B) 17
- (C) 23
- (D) 25

2	3	5
11	13	?
41	43	47



From the given alternative words, select the word which can be formed using the letters of the give word :

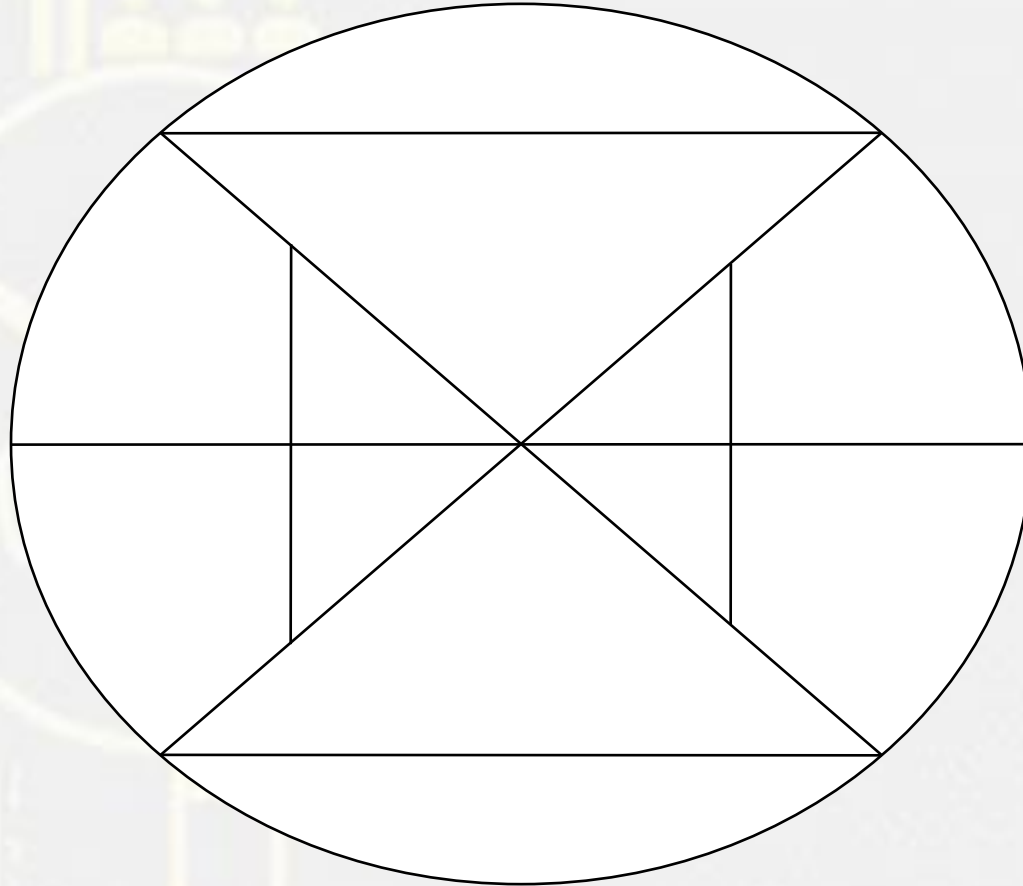
दिए गए वैकल्पिक शब्दों से, उस शब्द का चयन करें जिसे शब्द के अक्षरों का उपयोग करके बनाया जा सकता है:

INTELLIGENCE

- (A) INTERER**
- (B) INTERVAL**
- (C) LEGEND**
- (D) NEGLECT**


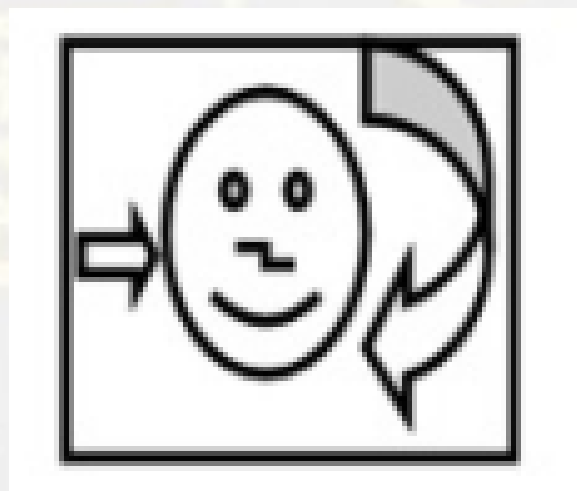


Find the number of triangles in the given figure.



- A. 5**
- B. 8**
- C. 10**
- D. 9**

Find the mirror image (?)



(A)

(B)

(C)

(D)

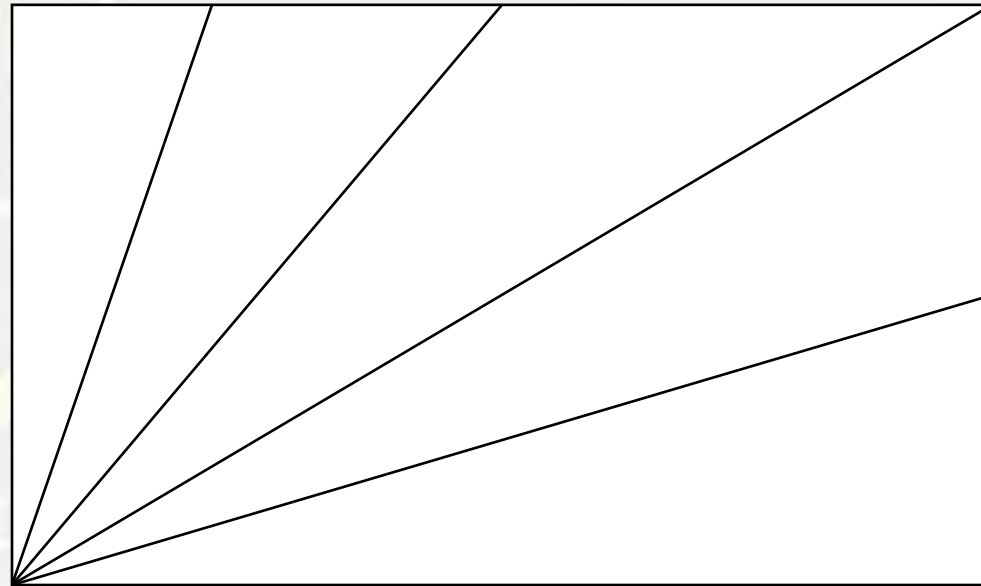


Find number of triangle in the given figure ?

दी गई आकृति में त्रिभुज की संख्या ज्ञात कीजिए?

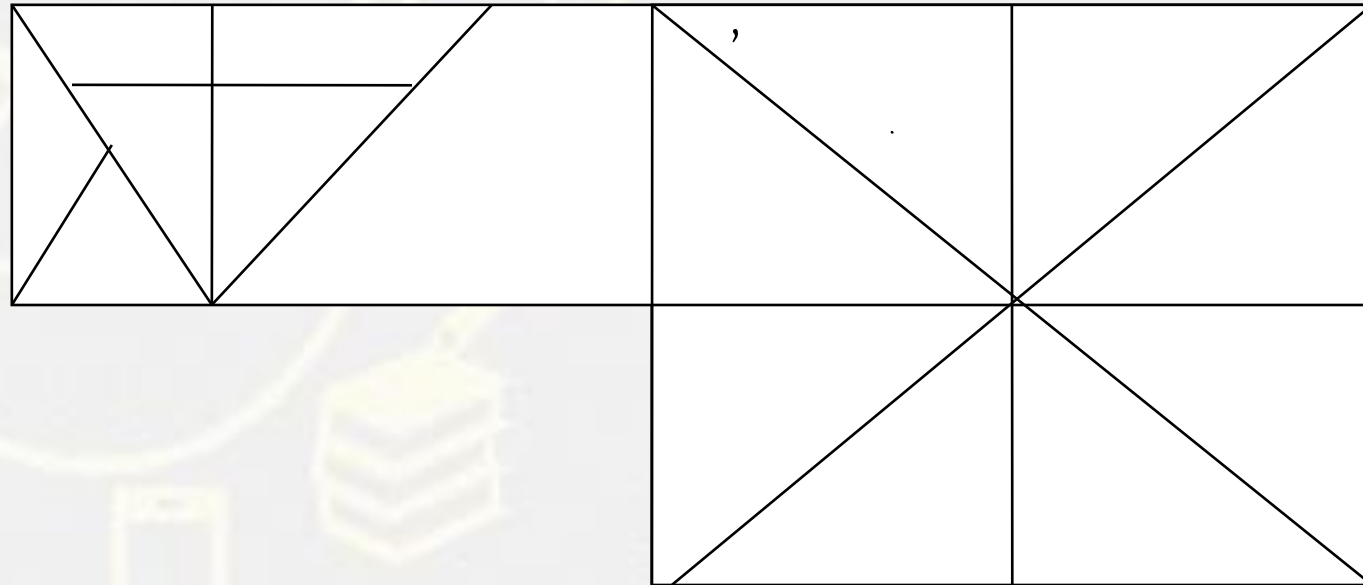


- (A) 9
- (B) 10
- (C) 11
- (D) 12



Find the triangle (?)

- 1. 26
- 2. 27
- 3. 28
- 4. 25



Find the option which should replace (?)

H : 8 :: K : ?

- (A) 8
- (B) 6
- (C) 27
- (D) 14



Find the option which should replace (?)

$$16 + 39 = 16$$

$$72 + 81 = 18$$

$$49 + 32 = 12$$

$$25 + 43 = ?$$

(A) 17

(B) 13

(C) 12

(D) 14



9	28	85
12	37	?
16	49	148

- A. 154**
- B. 165**
- C. 112**
- D. 114**

245 : 132 :: 256 : ?

- (A) 128**
- (B) 182**
- (C) 144**
- (D) 169**



Which number will replace the question mark ?

10	5	6	42
17	3	14	68
8	15	?	92



(A) 46
(C) 10

(B) 23
(D) 25

Find the option which should replace (?)

$$7 : 85 :: ? : ?$$

- (A) 3 : 31
- (B) 8 : 113
- (C) 5 : 43
- (D) 2 : 9



Find the MISSING (?)

12 : 35 :: 16 : ?

- (A) 78
- (B) 32
- (C) 63
- (D) 64



Find the MISSING (?)

$$5 : 100 :: 7 : ?$$

- (A) 49
- (B) 196
- (C) 91
- (D) 98



Find the MISSING (?)

$$16 * 25 * 77$$

$$23 * 52 * 57$$

$$23 * 32 * ?$$

(A) 78

(B) 55

(C) 43

(D) 23

