

RRB NTPC CBT 2/GROUP D



REASONING

अबकी बार **RAILWAY** पार

Complete Revision



LIVE 7:30 PM





Don't Let Your Studies Get Impacted By COVID-19 Pandemic

Stay Home & Study Online With Mahendras Hybrid Model

Features



Offline Classes



Live Interactive Online Classes



Same Faculty



Same Batch



Same Batch Timing



Online Library Facility



Recorded Video



PDFs



Classes In Both Model

CONTACT US:

1800-103-5225

www.mahendras.org





UPCOMING ONLINE BATCHES

January 2022

05 Jan 2022

08:00 AM to 10:00 AM

BANK ONLINE LIVE CLASS

10:30 AM to 12:30 PM

SSC ONLINE LIVE CLASS

01:00 PM to 03:00 PM

SSC ONLINE LIVE CLASS

05:30 PM to 07:30 PM

BANK ONLINE LIVE CLASS

BILINGUAL

12 Jan 2022

08:00 AM to 10:00 AM

SSC ONLINE LIVE CLASS

10:30 AM to 12:30 PM

BANK ONLINE LIVE CLASS

03:00 PM to 05:00 PM

BANK ONLINE LIVE CLASS

05:30 PM to 07:30 PM

SSC ONLINE LIVE CLASS

BILINGUAL

19 Jan 2022

08:00 AM to 10:00 AM

BANK ONLINE LIVE CLASS

01:00 PM to 03:00 PM

BANK ONLINE LIVE CLASS

03:00 PM to 05:00 PM

SSC ONLINE LIVE CLASS

07:30 PM to 09:30 PM

SSC ONLINE LIVE CLASS

BILINGUAL

27 Jan 2022

10:30 AM to 12:30 PM

BANK ONLINE LIVE CLASS

07:30 PM to 09:30 PM

BANK ONLINE LIVE CLASS

08:00 AM to 10:00 AM

SSC ONLINE LIVE CLASS

01:00 PM to 03:00 PM

SSC ONLINE LIVE CLASS

BILINGUAL



RRB NTPC Stage-2 Exam Pattern

Sections	No. of Questions	Total Marks	Duration
Mathematics	35	35	90 minutes
General Intelligence and Reasoning	35	35	
General Awareness	50	50	
Total	120	120	



🍁 PUJA KUNDU 🍁 11 hours ago

The answer is 22.5($16-1=15 \times 1.5$).....superb session sir and thank you 🙏🙏🙏🙏



REPLY



Radha Garima 11 hours ago

Answer : 22.5

Nice session sir 🙏🙏



REPLY



Shruti Jain 47 minutes ago

Nice session sir.



REPLY



GUDIYA SHARMA 10 hours ago

22.5 perfect 🍁🍁👍👍👍



REPLY



DEEKSHA SHARMA 11 hours ago

Home work answer is 22.5



REPLY



Chhavi Saxena 11 hours ago

Home work answer is 25.5



REPLY



Viśhñù Güptå 1 minute ago

22.5 is the right ans

Very super nice session sir Thank you 🙏 sir



REPLY



SANIA _____ 46 minutes ago

mjedaar session sir 🙏 🙏 🙏

25.5 😊 😊



REPLY




Rohit Gond 11 hours ago

22.5



REPLY



Hrithik _____ 4 hours ago

25.5



REPLY



Piyush Rai 9 hours ago

25.5



REPLY



ANNU LATA 11 hours ago

25.5



REPLY



SOUVIK DUTTA 11 hours ago

25.5



REPLY



Kapil Bhagat 11 hours ago

25.5



REPLY



Tarun Gupta 10 hours ago

I think sir maine 2018 m aapko offline jaipur mahendra's m dekha h



REPLY



Shahzada Jalal 8 hours ago

d



REPLY

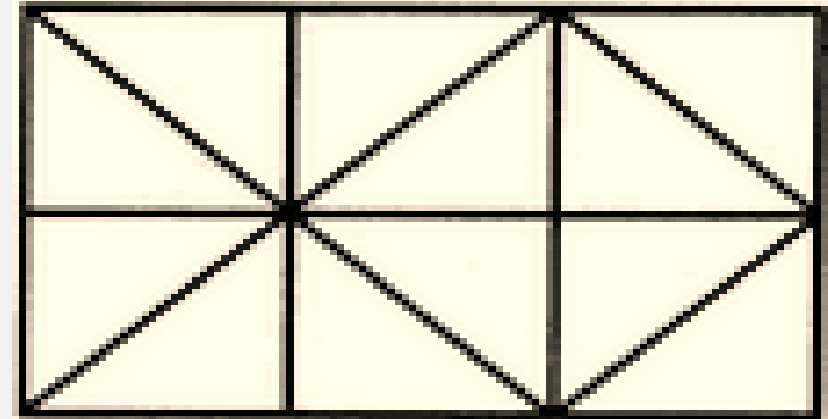
Find number of squares in figure?

(A) 6

(B) 7

(C) 9

(D) 10



Find the option which should replace (?)

- (A) 9107
- (B) 97
- (C) 907
- (D) 1097



Find the option which should replace (?)

- (A) 21
- (B) 22
- (C) 14
- (D) 15

9	11	13
13	15	17
10	12	14
14	16	18
11	13	?



Find the option which should replace (?)

- (A) 18
- (B) 12
- (C) 24
- (D) 6

25	15	40	8
65	25	90	?
45	15	60	12



Find the option which should replace (?)

- (A) 17
- (B) 18
- (C) 19
- (D) 21

6	8	7
36	64	49
24	48	35
18	24	?



Find the option which should replace (?)

- (A) 70
- (B) 12
- (C) 16
- (D) 24

15	225	30
7	70	20
3	?	8



Find the option which should replace (?)



- A. 58
- B. 14
- C. 49
- D. 4

3	4	2	14
6	5	4	44
5	2	7	?



5	3	28
9	1	810
8	6	214
5	4	19
7	3	??

- A. 10**
- B. 30**
- C. 40**
- D. 60**

14	9	12	20
4	9	8	10
12	13	7	20
3	3	11	?
20	42	19	40



- A. 3**
- B. 4**
- C. 5**
- D. 8**

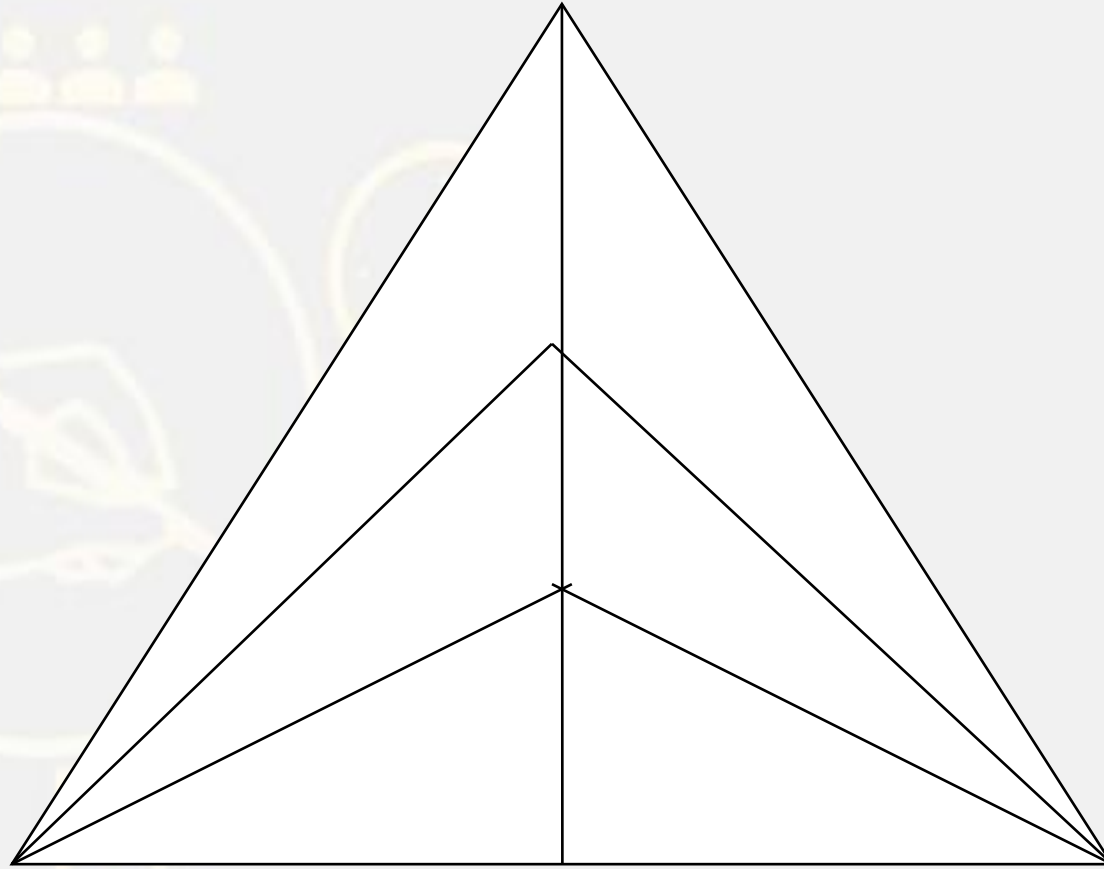
Find the option which should replace (?)



(3 , 68 , 5)

- A. (2 , 10 , 1)
- B. (5 , 95 , 8)
- C. (2 , 72 , 10)
- D. (4 , 64 , 5)

Find the number of triangles in the given figure.



- A. 15
- B. 13
- C. 14
- D. 18

Find the wrong number in the given series.

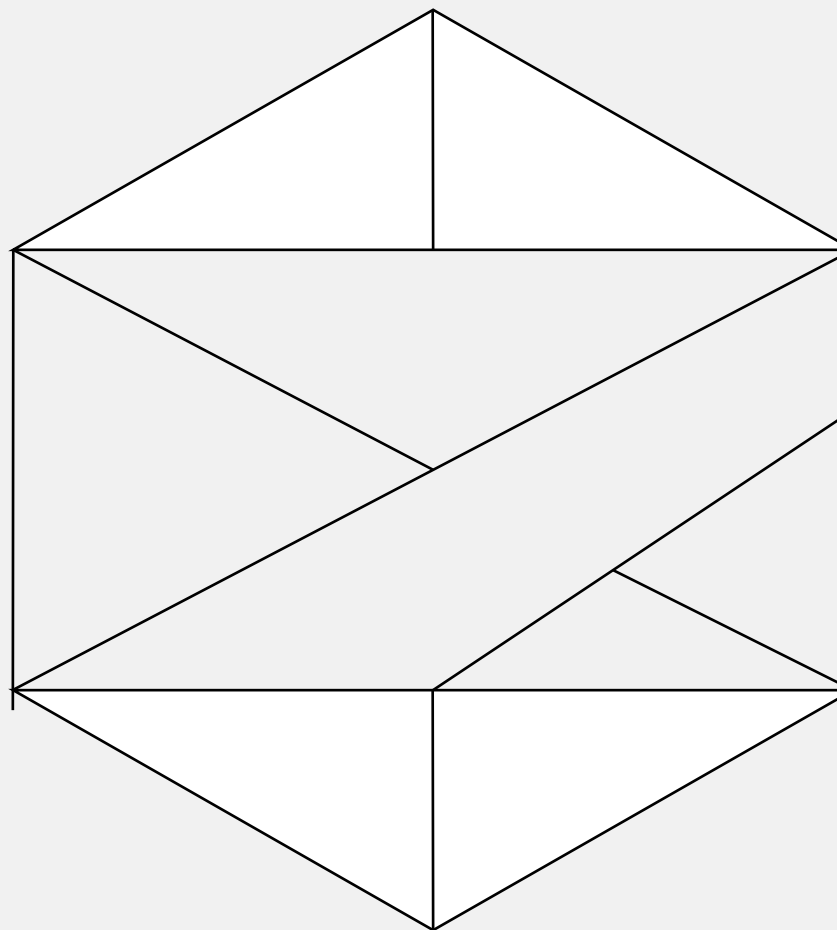


225, 336, 447, 555, 669

1. 225
2. 447
3. 555
4. 669

Find the number of triangle (?)

- (A) 12**
- (B) 13**
- (C) 17**
- (D) NOT**



Find the option which should replace (?)



5 : 10 :: 9 : ?

- A. 81**
- B. 8**
- C. 27**
- D. 9**