

RRB NTPC CBT 2/GROUP D



REASONING

अबकी बार **RAILWAY** पार

Complete Revision



LIVE 7:30 PM





Don't Let Your Studies Get Impacted By COVID-19 Pandemic

Stay Home & Study Online With Mahendras Hybrid Model

Features



Offline Classes



Live Interactive Online Classes



Same Faculty



Same Batch



Same Batch Timing



Online Library Facility



Recorded Video



PDFs



Classes In Both Model

CONTACT US:

1800-103-5225

www.mahendras.org





UPCOMING ONLINE BATCHES

December 2021

01 Dec 2021

08:00 AM to 10:00 AM

LIVE PREMIUM GREEN CARD
(BANK-PO & CLERK)

05:30 PM to 07:30 PM

LIVE PREMIUM GREEN CARD
(BANK-PO & CLERK)

01:00 PM to 03:00 PM

LIVE PREMIUM SILVER CARD
(SSC CGL & CHSL)

BILINGUAL

08 Dec 2021

10:30 AM to 12:30 PM

LIVE PREMIUM GREEN CARD
(BANK-PO & CLERK)

03:00 PM to 05:00 PM

LIVE PREMIUM GREEN CARD
(BANK-PO & CLERK)

08:00 AM to 10:00 AM

LIVE PREMIUM SILVER CARD
(SSC CGL & CHSL)

BILINGUAL

15 Dec 2021

01:00 PM to 03:00 PM

LIVE PREMIUM GREEN CARD
(BANK-PO & CLERK)

10:30 AM to 12:30 PM

LIVE PREMIUM SILVER CARD
(SSC CGL & CHSL)

BILINGUAL

22 Dec 2021

08:00 AM to 10:00 AM

LIVE PREMIUM GREEN CARD
(BANK-PO & CLERK)

07:30 PM to 09:30 PM

LIVE PREMIUM SILVER CARD
(SSC CGL & CHSL)

BILINGUAL

29 Dec 2021

10:30 AM to 12:30 PM

LIVE PREMIUM GREEN CARD
(BANK-PO & CLERK)

07:30 PM to 09:30 PM

LIVE PREMIUM GREEN CARD
(BANK-PO & CLERK)

03:00 PM to 05:00 PM

LIVE PREMIUM SILVER CARD
(SSC CGL & CHSL)

BILINGUAL



RRB NTPC Stage-2 Exam Pattern

Sections	No. of Questions	Total Marks	Duration
Mathematics	35	35	90 minutes
General Intelligence and Reasoning	35	35	
General Awareness	50	50	
Total	120	120	



RASHMI SONI  19 hours ago

8 WILL BE CORRECT ONE

$9 \times 6 + 1 = 55$, $5 + 5 = 10$

$4 \times 4 + 1 = 17$, $1 + 7 = 8$

NICE SESSION 😊

 1  REPLY

▼ [View reply from Mahendras : Online Videos For Govt. Exams](#)



Radha Garima 19 hours ago

Answer : 8

Nice session sir 🙏👍

 1  REPLY

▼ [View reply from Mahendras : Online Videos For Govt. Exams](#)



Hijacker Jack 19 hours ago

We can also do that. $7 * 2 + 4 * 2 = 49 + 16 = 65$

$25 + 81 = 106$

 1  REPLY

▼ [View reply from Mahendras : Online Videos For Govt. Exams](#)



Viṣhñù Güptâ 17 hours ago

8 will be correct ans

Thank you so much sir love ❤️ you sir very nice 🙏 session sir

 1  REPLY

▼ [View reply from Mahendras : Online Videos For Govt. Exams](#)



SANIA _____ 10 hours ago

awesome session sir 🙏🙏

8 🍌🍌🍌🍌

👍 1 🗨️ [REPLY](#)

➤ [View reply from Mahendras : Online Videos For Govt. Exams](#)



Deepali Yadav 18 hours ago

Ans 8 Nice session sir 🙏

👍 1 🗨️ [REPLY](#)

➤ [View reply from Mahendras : Online Videos For Govt. Exams](#)



Chhavi Saxena 19 hours ago

Home work answer is 8 🙏

👍 1 🗨️ [REPLY](#)

➤ [View reply from Mahendras : Online Videos For Govt. Exams](#)




DEEKSHA SHARMA 19 hours ago

Home work answer is 8

👍 1 🗨️ [REPLY](#)

➤ [View reply from Mahendras : Online Videos For Govt. Exams](#)



Ankit Vish 18 hours ago

Answer 8

Very nice session sir 🙏🙏

👍 2 🗨️ [REPLY](#)

➤ [View reply from Mahendras : Online Videos For Govt. Exams](#)



Priyanka Yadav 20 hours ago

6 Correct answer



1



REPLY

▶ [View reply from Mahendras : Online Videos For Govt. Exams](#)




Kapil Bhagat 20 hours ago

6666



REPLY



Priyanka Yadav 20 hours ago

6666



1



REPLY

▶ [View reply from Mahendras : Online Videos For Govt. Exams](#)



Atri Ray 19 hours ago

Ans. 8



1



REPLY

▶ [View reply from Mahendras : Online Videos For Govt. Exams](#)



Masum Idki 😊 18 hours ago

8



1



REPLY

▶ [View reply from Mahendras : Online Videos For Govt. Exams](#)

Find the MISSING (?)

169 : 10 :: 144 : ?

1. 8
2. 12
3. 18
4. 6



Find the missing term(?)

PO = @@@@

SBI = @@@

MAN = @

- A. @@@@
- B. @@@@
- C. @@@
- D. @



A is the father of X, B is the mother of Y. The sister of X and Z is Y.
Which of the following is not definitely true ?

A, X का पिता है, B, Y की माँ है। X और Z की बहन Y है। निम्नलिखित में से कौन निश्चित रूप से सत्य नहीं है?

- (A) B is the mother of Z.
- (B) X is the sister of Z.
- (C) Y is the son of A.
- (D) B has one daughter .



Find the option which should replace (?)

175 (576)463

192 (?) 357

- (A) 4**
- (B) 549**
- (C) 330**
- (D) 540**



Find the option which should replace (?)

e , h , j , m , o , r , t , _ , _

- (A) ur
- (B) pq
- (C) wy
- (D) xy



If in a certain code **ONE** is coded as **231**,
FIVE is coded as **9641**,
then how will be **NINE** coded?

- (A) 3316
- (B) 3361
- (C) 3613
- (D) 3631



Statement :

All 1 are 2. **सभी 1, 2 हैं।**

All 2 are 3 . **सभी 2, 3 हैं।**

Conclusions :

(I) Some 2 are 3. **कुछ 2, 3 हैं।**

(II) All 3 are 1. **सभी 3, 1 हैं।**

- (A) If only conclusion I follows.
(B) If only conclusion II follows.
(C) If neither conclusion I nor II follows.
(D) If both conclusion I and II are follows.



Which number will replace the question mark ?

10	5	6	42
17	3	14	68
8	15	?	92



- (A) 46
- (C) 10

- (B) 23
- (D) 25

Find the option which should replace (?)

$$7 : 85 :: ? : ?$$

- (A) 3 : 31
- (B) 8 : 113
- (C) 5 : 43
- (D) 2 : 9



Find odd word from the given alternative.
दिए गए विकल्प में से विषम शब्द ज्ञात कीजिए ।

- (A) Screw Driver / पेंचकस
- (B) Spanner / स्पैनर
- (C) Plier / प्लियर
- (D) Knife / चाकू



Find the MISSING (?)

$$16 * 25 * 77$$

$$23 * 52 * 57$$

$$23 * 32 * ?$$

(A) 78

(B) 55

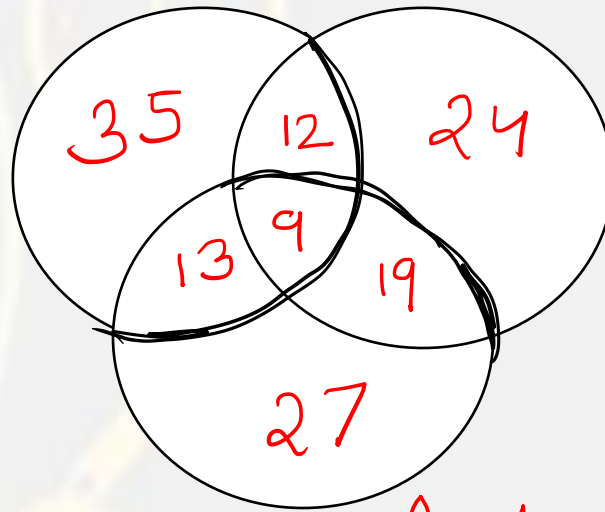
(C) 43

(D) 23



Find out the number of all those people who can speak Tamil and Telugu ?

Telugu
→



Tamil
←

English
→



- (A) 3
- (B) 59
- (C) 21
- (D) 112

Find the option which should replace (?)

0200, 1202, 2204, 3309, ?

- (A) 4409**
- (B) 1510**
- (C) 4520**
- (D) 4316**







Find the option which should replace (?)

13 , 12 , 16 , 7 , 23 , ?

- (A) 1**
- (B) 0**
- (C) -1**
- (D) -2**



Find the diagram that show right relation between **Kharif crops, Rice, Maize**
खरीफ की फसलें, चावल, मक्का?



- (A) A
- (B) B
- (C) C
- (D) D

IF you wrote all the numbers from 1 to 99 , then how many times would you have written 8 ?

यदि आपने 1 से 99 तक की सभी संख्याएँ लिखी हैं, तो आपने कितनी बार 8 लिखा होगा?

- (A) 18**
- (B) 19**
- (C) 20**
- (D) 21**



Find the MISSING (?)

Compass : Ship :: Vastu : ?

कम्पास : जहाज :: वास्तु : ?

(A) Building / इमारत

(B) Flat / फ्लैट

(C) Home / होम

(D) Land / भूमि

