



RRB GROUP D 2022



REASONING

MEMORY BASED PAPER DISCUSSION

18TH AUG - ALL SHIFTS

LIVE  **08:30 PM**





UPCOMING ONLINE BATCHES

August 2022

03 AUG 2022

03:00 PM to 05:00 PM

BANK ONLINE LIVE CLASS

01:00 PM to 03:00 PM

SSC ONLINE LIVE CLASS

BILINGUAL

10 AUG 2022

05:30 PM to 07:30 PM

BANK ONLINE LIVE CLASS

08:00 AM to 10:00 AM

SSC ONLINE LIVE CLASS

BILINGUAL

17 AUG 2022

08:00 AM to 10:00 AM

BANK ONLINE LIVE CLASS

05:30 PM to 07:30 PM

SSC ONLINE LIVE CLASS

BILINGUAL

24 AUG 2022

07:30 PM to 09:30 PM

BANK ONLINE LIVE CLASS

10:30 AM to 12:30 PM

SSC ONLINE LIVE CLASS

BILINGUAL

31 AUG 2022

10:30 AM to 12:30 PM

BANK ONLINE LIVE CLASS

07:30 PM to 09:30 PM

SSC ONLINE LIVE CLASS

BILINGUAL

10 AUG 2022

02:00 PM to 04:00 PM

BANK ONLINE LIVE CLASS

BENGALI+ENGLISH

31 AUG 2022

06:30 PM to 08:30 PM

BANK ONLINE LIVE CLASS

BENGALI+ENGLISH



www.mahendras.org



7052477777/7052577777



🍁 PUJA KUNDU 🍁 ----- 10 hours ago 8 subscribers

The answer is -"J"..(17-7=10.....)....thank you sir for the superb session 🙌 🙏

👍 🗨️ REPLY ➡️



Ankit Vish 10 hours ago 267 subscribers

Answer. Option- AAA
Lajwab session sir 🙌 🙏

👍 1 🗨️ REPLY ➡️



Chhavi Saxena 10 hours ago

Home work answer is option B (j)
Very Nice Session Sir Thanku So much dear Sir 🙌 🙌 🙌 🙌 🙌 🙌 🙌 🙌 🙌 🙌 🙌 🙌 🙌 🙌 🙌

👍 🗨️ REPLY ➡️



khushbu 10 hours ago

aaaaa__X(17+7)=24

👍 🗨️ REPLY ➡️



GUDIYA SHARMA 3 minutes ago 3 subscribers

Sir sitting and क्लॉक and colck ke question 1111=rk liya kro plz reversion ho jaya kre jse 🙌 🙌 🙌 🙌 🙌 🙌 🙌 🙌 🙌 🙌 🙌 🙌 🙌 🙌 🙌

👍 🗨️ REPLY ➡️



GUDIYA SHARMA 4 minutes ago 3 subscribers

17-7====, 10

👍 🗨️ REPLY ➡️



Surbhi Sinha 10 hours ago

Option JJJJJJJJJJJJJJJJ 😞 shayad

👍 🗨️ REPLY ➡️



Puspranjan singh 10 hours ago 1 subscribers

J

👍 🗨️ REPLY ➡️

Which letter is seventh to the right of the seventeenth from the left end in the alphabetical series ?

कौन सा अक्षर वर्णमाला श्रृंखला में बाएं छोर से सत्रहवें के दाईं ओर सातवां है?

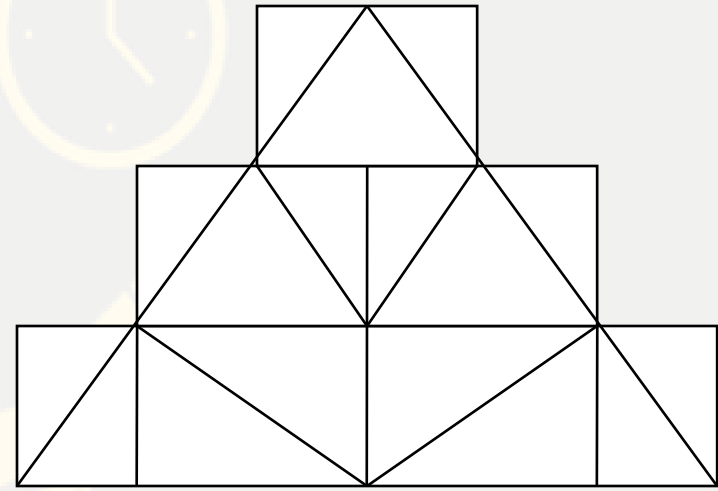
- (A) X
- (B) J
- (C) Q
- (D) P



Find the number of triangle (?)



- (A) 23**
- (B) 21**
- (C) 22**
- (D) 20**



The teacher arrived in a classroom at 9:55 am and Pappu came 45 minute later and was delayed by 10 minute. How early did the teacher reach the planned time ?

शिक्षक सुबह 9:55 बजे एक कक्षा में पहुंचे और पप्पू 45 मिनट बाद आया और 10 मिनट देरी से आया। नियोजित समय पर शिक्षक कितनी जल्दी पहुँच गए?

- A. 10 minute
- B. 45 minute
- C. 15 minute
- D. 35 minute



From the given alternative words, select the word which can not be formed using the letters of the give word :

दिए गए वैकल्पिक शब्दों से, उस शब्द का चयन करें जिसे शब्द के अक्षरों का उपयोग करके नहीं बनाया जा सकता है:

SEPARATED

- (A) RAT
- (B) REPEAT
- (C) SEAT
- (D) PRIVATE



In a Certain code **MOTHER** is written as **TOMREH** ,than find the code for **NEPHEW** ?

एक निश्चित कोड में **MOTHER** का कोड **TOMREH** लिखा गया है , तो **NEPHEW** का कोड क्या होगा ?

- (1) ENHPWE
- (2) PENWEH
- (3) WEHPEN
- (4) WEHPNE



Find odd word from the given alternative.

दिए गए विकल्प में से विषम शब्द ज्ञात कीजिए ।

- (A) Game : Ground
- (B) Cinema : Screen
- (C) Theatre : Stage
- (D) Eraser : Rub



Statements: कथन :

Some politician are sinister./ कुछ राजनेता पापी होते हैं।
All sinister is a bureaucrats. / सभी पापी नौकरशाह हैं।



Conclusions: निष्कर्ष:

- I. Some bureaucrats are not sinister./ कुछ नौकरशाह पापी नहीं हैं।
- II. No politician is a bureaucrats. / कोई भी राजनेता नौकरशाह नहीं है।

Q.. Statement :

Some Cats are Rats.

All bats are tables.

All Rats are Bats.

Conclusions :

(I) Some Cats are bats

(II) All tables are rats

प्र.. कथन :

कुछ बिल्लिया चूहे हैं।

सभी चमगादड़ टेबल हैं।

सभी चूहे बल्ले हैं।

निष्कर्ष:

(I) कुछ बिल्लियों चमगादड़ हैं

(II) सभी टेबल चूहे हैं

Q.. Statement :

Some Cats are Rats.

All bats are tables.

All Rats are Bats.

Conclusions :

(I) Some Cats are bats

(II) All tables are rats

Find the missing one (?)

$$93 : 117 :: 73 : ?$$

- (A) 79
- (B) 64
- (C) 81
- (D) 74



Find the missing one (?)

Cup : Lips :: Bird : ?

कप : होंठ :: पक्षी : ?

- (A) Bush / झाड़ी
- (B) Grass / घास
- (C) Forest / वन
- (D) Beak / चोंच

Find the missing ONE (?)



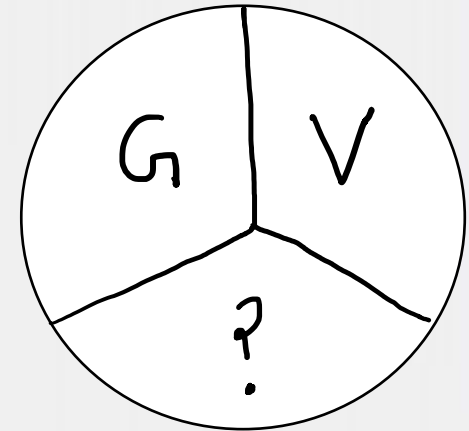
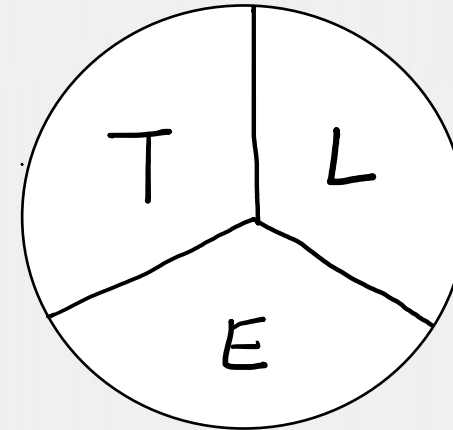
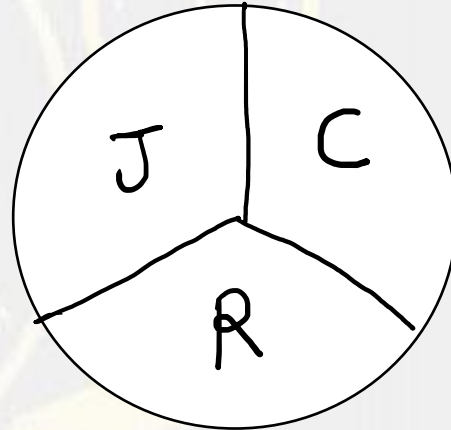
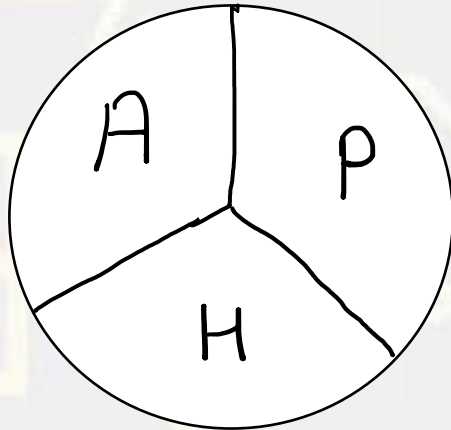
- (A) 164
- (B) 176
- (C) 188
- (D) 190

1	4	10
	22	
46	94	?



Find the missing ONE (?)

- (A) T
- (B) P
- (C) N
- (D) K

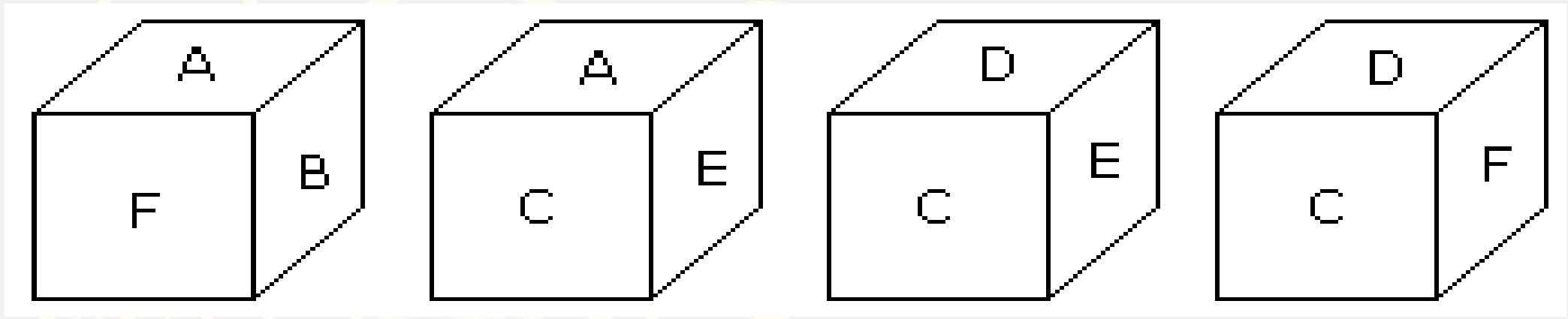


Find the missing one (?)

2A11 , 4D13 , 12G17 , 48J23 , ?

- (A) 240M31**
- (B) 31M240**
- (C) 24N310**
- (D) 310J11**

A cube has six different Alphabet drawn over its six faces. Three different positions of the cube are shown in figures .



Which alphabet is opposite the A?

- A. B
- B. C
- C. D
- D. E



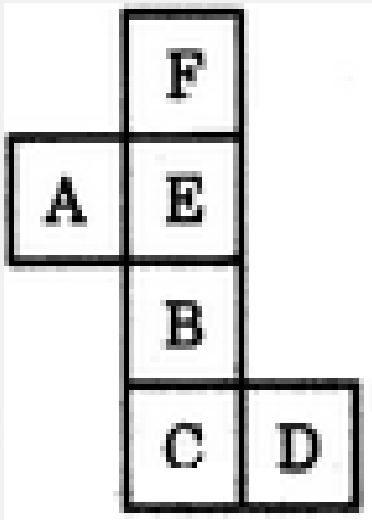
Find the missing one (?)

Ornithologist : Bird :: Archaeologist : ?


पक्षी विज्ञानी: पक्षी :: पुरातत्वविदः?

- (A) Island / द्वीप
- (B) Mediators / मध्यस्थ
- (C) Archaeology / पुरातत्व
- (D) Aquatic / जलीय


Choose the box that is similar to the box formed from the given sheet of paper (X).




(X)




(1)



(2)



(3)



(4)

- [A].1 only
- [B].2 only
- [C].1 and 3 only
- [D].1, 2, 3 and 4 only





Which number will replace the question mark ?

5	4	141
6	2	220
7	3	?

- (A) 292**
- (C) 352**

- (B) 332**
- (D) 285**

Find the odd one (?)

- (A) Biswa / बिस्वा
- (B) Bigha / बीघा
- (C) Inches / इंच
- (D) Biswansi / बिस्वंसी