



SSC MTS 2022-23



REASONING

SESSION-I

LIVE TEST

WITH TIMER



BASED ON PREVIOUS YEAR QUESTIONS

📶 LIVE | 03:00 PM

BY KULDEEP MAHENDRAS





UPCOMING ONLINE BATCHES

February 2023

08 FEB 2023

03:00 PM to 05:00 PM

SSC ONLINE LIVE CLASS

BILINGUAL

15 FEB 2023

10:30 AM to 12:30 PM

BANK ONLINE LIVE CLASS

BILINGUAL

15 FEB 2023

06:30 PM to 08:30 PM

BANK ONLINE LIVE CLASS

English & Bengali



www.mahendras.org •  7052477777/7052577777

14.6 Computer Based Examination:

Part	Subject	Number of Questions/ Maximum Marks	Time Duration (For all four Parts)
Session-I			45 Minutes (60 Minutes for candidates eligible for scribes as per para 8)
I	Numerical and Mathematical Ability	20/60	
II	Reasoning Ability and Problem Solving	20/60	
Session-II			45 Minutes (60 Minutes for candidates eligible for scribes as per para 8)
I	General Awareness	25/75	
II	English Language and Comprehension	25/75	



SSC MTS 2022-23

LIVE at 3:00 PM

	UR	OBC	SC	ST	EWS	TOTAL	ESM	OH	HH	VH	OTHERS
MTS AGE GROUP 18-25	4115	2505	1051	679	979	9329	979	104	131	119	58
MTS AGE GROUP 18-27	1085	723	358	216	283	2665	222	36	36	32	18
Havaladar in CBIC	201	143	106	29	50	529	53	8	7	0	6
Grand Total	5401	3371	1515	924	1312	12523	1254	148	174	151	82



Vishnu Gupta 1 day ago 10 subscribers

C- 7245613

Very nice session sir thank you 🙏 sir ❤️

👍 🗨️ Reply 📺

▼ 🚫 • 1 reply



Kumar Bablu 1 day ago

VIBGYOR option c

👍 🗨️ Reply 📺



SK6 1 day ago 13 subscribers

C - 7245613 🌈

👍 1 🗨️ Reply 📺

▼ 🚫 • 1 reply



Surbhi Sinha 1 day ago 4 subscribers

Homework question answer 🙏 option ccccc

👍 🗨️ Reply 📺

▼ 🚫 • 1 reply



Ravi Patel 1 day ago 5 subscribers

C 🌿

👍 1 🗨️ Reply 📺

▼ 🚫 • 1 reply
Like



Suruchi Jha 1 day ago

Hw answer option C

👍 🗨️ Reply 📺

▼ 🚫 • 1 reply





Find the odd (?)

1. M 25 H

2. J 16 G

3. R 49 K


4. K 49 D





Find the number of triangle (?)

- (A) 13**
- (B) 14**
- (C) 17**
- (D) 12**





Find the missing one (?)



4568 : 62 :: 4652 : ?

- (A) 69**
- (B) 23**
- (C) 48**
- (D) 38**



SSC MTS 2022-23

LIVE at 3:00 PM

Choose the odd one.



- (A) Equality / समानता**
- (B) Brotherhood / भाईचारा**
- (C) Freedom / स्वतंत्रता**
- (D) Society / समाज**



Find the option which should replace (?)

$$8 : 60 :: 6 : ?$$



- (A) 28**
- (B) 31**
- (C) 35**
- (D) 33**



Find the option which should replace (?)

APPLE : 26 :: MANGO : ?



- (A) 226**
- (B) 230**
- (C) 100**
- (D) 225**



Find the option which should replace (?)

1956 : leap year :: 1600 : ?

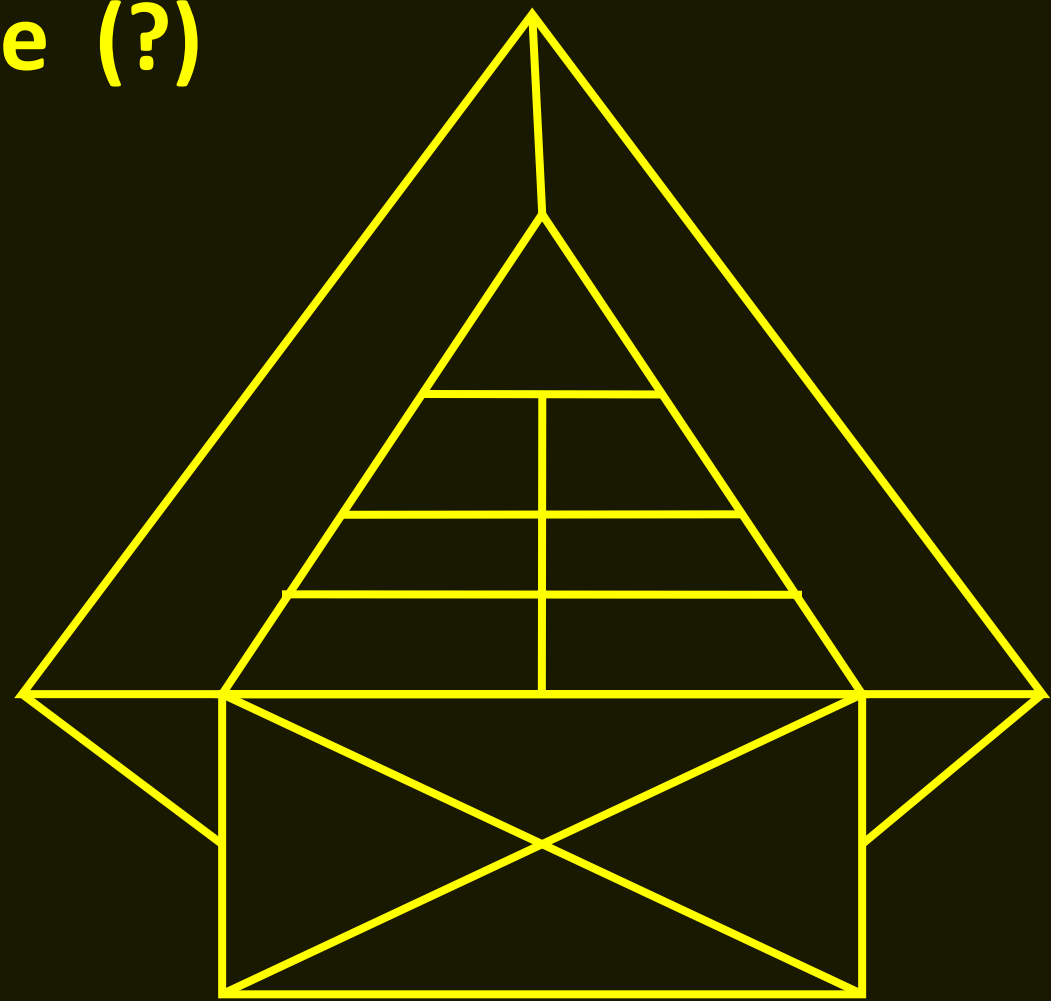


- (A) Leap year**
- (B) Non leap year**
- (C) Century year**
- (D) Leap Century year**



Find the triangle (?)

- 1. 15**
- 2. 17**
- 3. 19**
- 4. None**





Find the missing term(?)

4 , 101 , 298 , 595 , 992 , ?



- (A) 1489**
- (B) 1479**
- (C) 1478**
- (D) 1498**



Find the missing term(?)

5 , 17 , 35 , 59 , 89 , ?



- (A) 136**
- (B) 155**
- (C) 144**
- (D) 125**



Which number will replace the question mark ?



31	11
20	22
13	?

- (A) 22
- (C) 23


- (B) 24
- (D) 29



Find the number of RECTANGLE in the given figure.
दिए गए आंकड़े में की संख्या ज्ञात कीजिए।



- A. 8**
- B. 9**
- C. 10**
- D. 7**





Babita (the girl) points out to a man , “ His sister is the mother of my daughter’s brother .”

What does that person related with Babita?

बबिता (लड़की) एक आदमी की ओर इशारा करती है, "उसकी बहन मेरी बेटी के भाई की माँ है।" वह व्यक्ति बबिता से क्या संबंधित है?

- (A) Father**
- (B) Brother in law**
- (C) Brother**
- (D) Sister**





Find the odd one (?)



- (A) Earthquakes / भूकंप**
- (B) Loss / नुकसान**
- (C) Droughts / सूखा**
- (D) Floods / बाढ़**



Find the missing term(?)

$$1137 : 441 :: 4312 : ?$$



- (A) 576**
- (B) 676**
- (C) 625**
- (D) 729**