



# SSC STENO 2022



GS | ENGLISH | REASONING

# MEMORY BASED PAPER

SHIFT-1 & 2 | 17<sup>th</sup> NOV

LIVE | 03:45 PM



# UPCOMING ONLINE BATCHES

## November 2022

02 NOV 2022

08:00 AM to 10:00 AM

**BANK ONLINE LIVE CLASS**

05:30 PM to 07:30 PM

**SSC ONLINE LIVE CLASS**

**BILINGUAL**

09 NOV 2022

07:30 PM to 09:30 PM

**BANK ONLINE LIVE CLASS**

08:00 AM to 10:00 AM

**SSC ONLINE LIVE CLASS**

**BILINGUAL**

16 NOV 2022

01:00 PM to 03:00 PM

**BANK ONLINE LIVE CLASS**

03:00 PM to 05:00 PM

**SSC ONLINE LIVE CLASS**

**BILINGUAL**

23 NOV 2022

05:30 PM to 07:30 PM

**BANK ONLINE LIVE CLASS**

01:00 PM to 03:00 PM

**SSC ONLINE LIVE CLASS**

**BILINGUAL**

30 NOV 2022

10:30 AM to 12:30 PM

**BANK ONLINE LIVE CLASS**

07:30 PM to 09:30 PM

**SSC ONLINE LIVE CLASS**

**BILINGUAL**

02 NOV 2022

06:30 PM to 08:30 PM

**BANK ONLINE LIVE CLASS**

**BENGLI+ENGLISH**

23 NOV 2022

04:00 PM to 06:00 PM

**BANK ONLINE LIVE CLASS**

**BENGLI+ENGLISH**



[www.mahendras.org](http://www.mahendras.org) •  7052477777/7052577777





**SSC Steno Exam**  
**Reasoning Question**

Topics	Number of Questions
Analogy	4-5
Blood Relation	2
Coding/Decoding	3-4
Number Series	3-4
Counting Figure	2
Classification	4
Non Verbal Reasoning	2-3
Symbol and Narration	2-4
Direction & Distance	3-4
Syllogism	3
Sitting Arrangement	6-7
Logical Order of Words	2
Venn Diagram	2
Calendar	1



**Find the option which should replace (?)**

**Fly : Bird :: Gallop : ?**

**मकख्री: पक्षी :: सरपटः?**



**A. Tiger / बाघ**

**B. Lion / सिंह**

**C. Horse / घोड़ा**

**D. Elephant / हाथी**



**Find the option which should replace (?)**

**WOLF : FLOW :: DRAW : ?**

- A. WRAD**
- B. WARD**
- C. RWAD**
- D. DARW**





**Find the option which should replace (?)**

**3, 8, 35, 204, ?**



- (A) 1420**
- (B) 1421**
- (C) 1015**
- (D) 821**



**Find the option which should replace (?)**

$$17 : 201 :: 13 : ?$$



- A. 138**
- B. 831**
- C. 256**
- D. 196**



**Find the option which should replace (?)**

**6, 13, 28, 59, ? , 249**



**(A) 120**

**(B) 122**

**(C) 94**

**(D) 124**





Amit said - "This girl is the wife of the grandson of my mother". How is Amit related to the girl?

अमित ने कहा - "यह लड़की मेरी माँ के पोते की पत्नी है"। अमित का लड़की से क्या संबंध है?

- (A) Brother
- (B) Grandfather
- (C) Husband
- (D) Father-in-law





**Find the odd one out(?)**

- A. Scalpel : Surgeon / छुरी: सर्जन**
- B. Chisel : Sculptor / छेनी: मूर्तिकार**
- C. Anvil : Blacksmith / एन्विल: लोहार**
- D. Paper : Book / कागज : किताब**





**If January 7<sup>th</sup> 2007 was Monday then what day of the week lies on January 7<sup>th</sup> 2008 ?**

यदि 7 जनवरी 2007 सोमवार था तो सप्ताह का कौन सा दिन 7 जनवरी 2008 को निहित है?

- A. Monday**
- B. Tuesday**
- C. Wednesday**
- D. Sunday**





If + means −, − means ×, ÷ means + and × means ÷, then

$$25 \times 5 \div 8 - 4 + 7 = ?$$

(1) 44

(2) 30

(3) 7

(4) 24





**Find the option which should replace (?)**

**DON : 463**

**ROAM : 7612**

**FREEDOM : ?**

**A. 713462**

**B. 6755462**

**C. 6755452**

**D. 6555345**





**Find the option which should replace (?)**

**AF : 8 :: AA : 4 :: AE**

**A. 10**

**B. 15**

**C. 8**

**D. 12**







**Find the option which should replace (?)**

- A. 154**
- B. 165**
- C. 112**
- D. 114**

9	28	85
12	37	?
16	49	148



**Find the option which should replace (?)**

**24, 5, 2, 1.5, 1.5, ?**



**(A) 1.75**

**(B) 1.50**

**(C) 2.25**

**(D) 7.50**



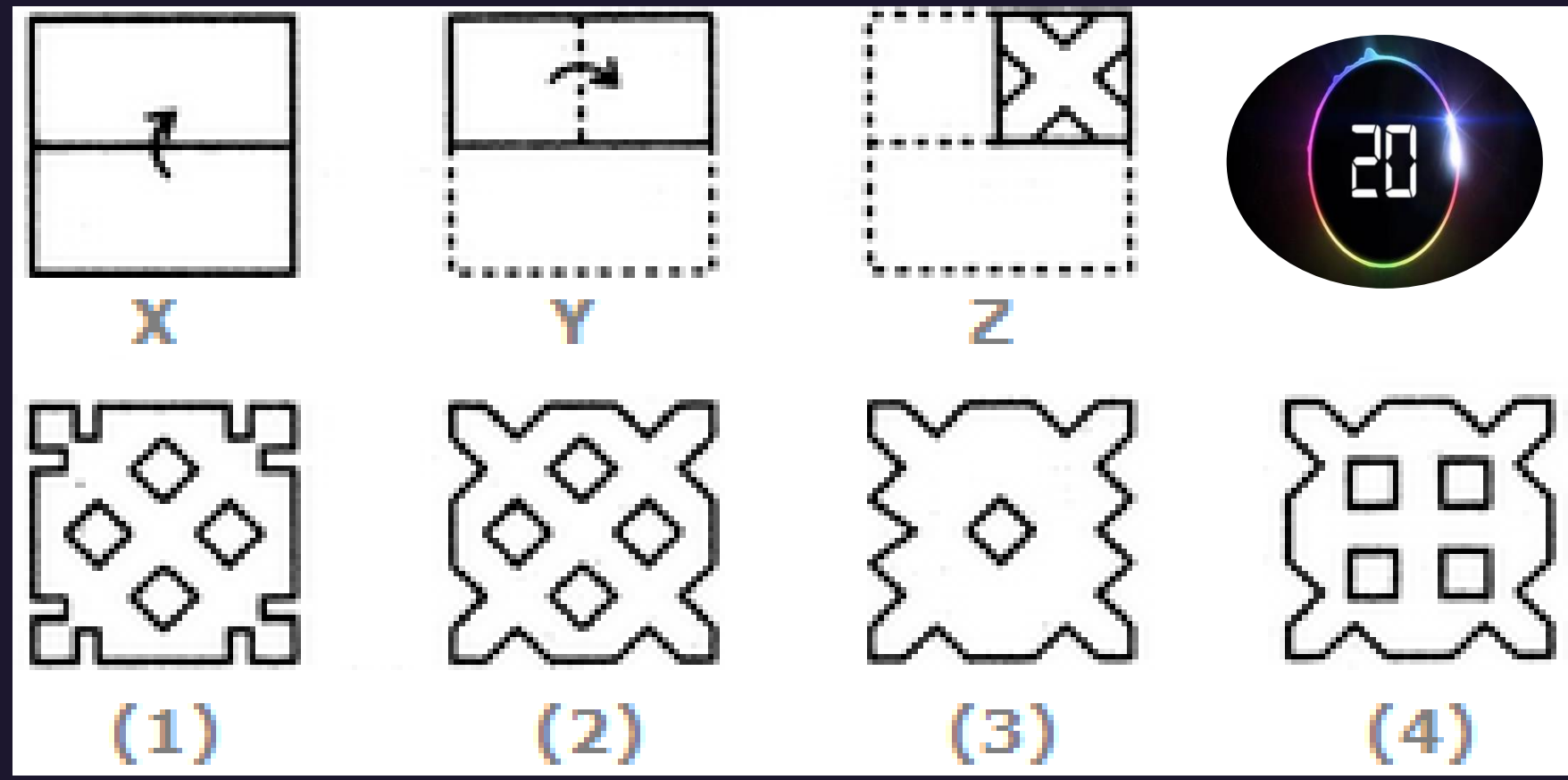
## Find the odd one out(?)

- A. **Dogri : Jammu and Kashmir** / डोगरी: जम्मू और कश्मीर
- B. **Tamil: Kerala** / तमिल: केरल
- C. **Bori : Arunachal Pradesh** / बोरी: अरुणाचल प्रदेश
- D. **Konkani : Goa** / कोंकणी: गोवा





Choose a figure which would most closely resemble the unfolded form of Figure (Z).



A.1

B.2

C.3

D.4



**Find the odd one out(?)**

**A. KMT**

**B. OQV**

**C. FHO**

**D. QSZ**

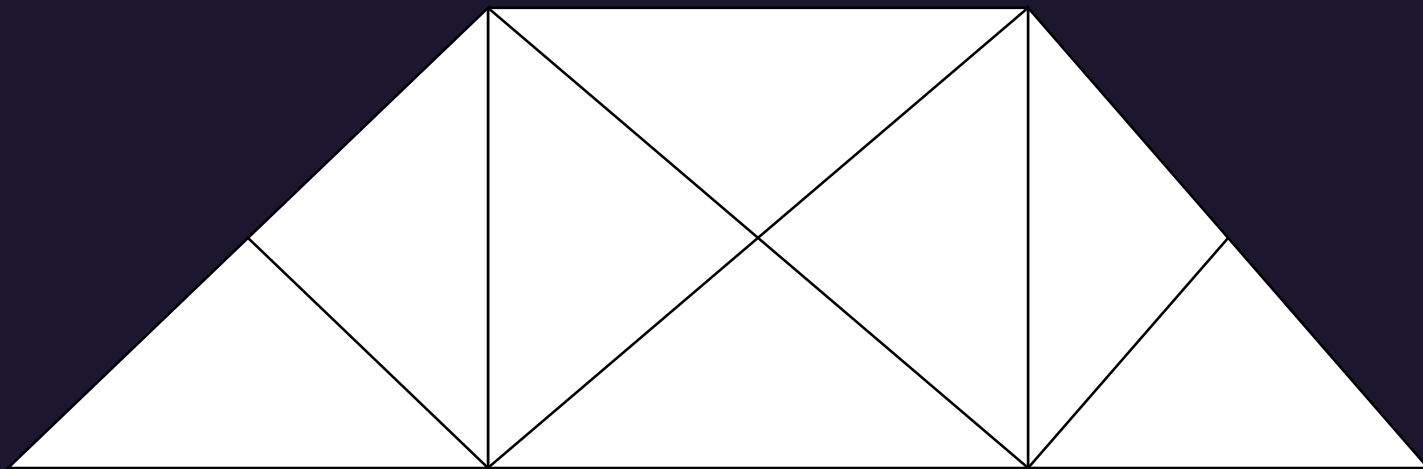




Find the number of triangle (?)



- (A) 14
- (B) 16
- (C) 18
- (D) 20



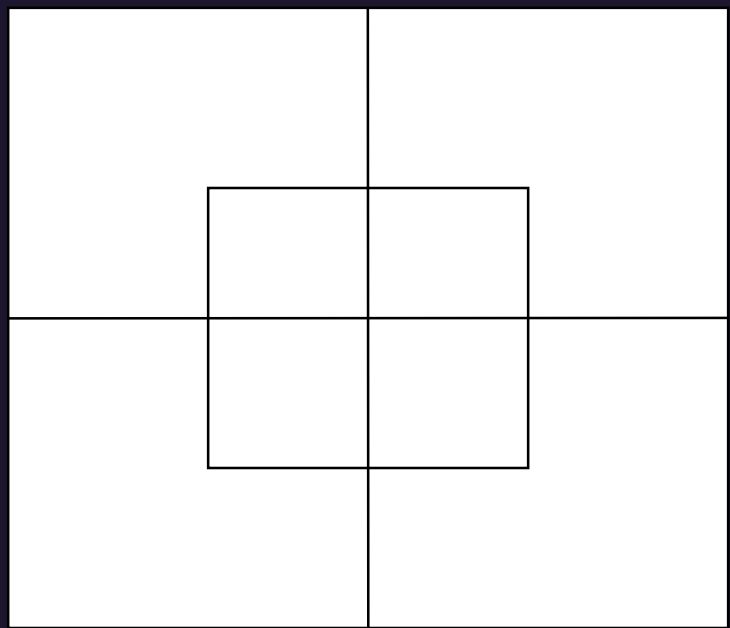




Find the number of square (?)



- (A) 10
- (B) 24
- (C) 14
- (D) NOT





**Find the option which should replace (?)**

**feet : Socks :: ? : ?**

**पैर: मोजे :: ? : ?**



- A. Finger : Nail / उंगली: नाखून**
- B. Head : Turbun / सिर: पगड़ी**
- C. Legs : vest / पैर: बनियान**
- D. Abdomen :Pants / उदर: पैंट**



**Find the option which should replace (?)**

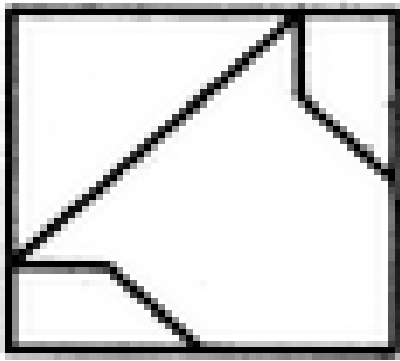
**CBA , FGE , ILI , LQM**

- A. OVP**
- B. NVQ**
- C. OUP**
- D. OVQ**

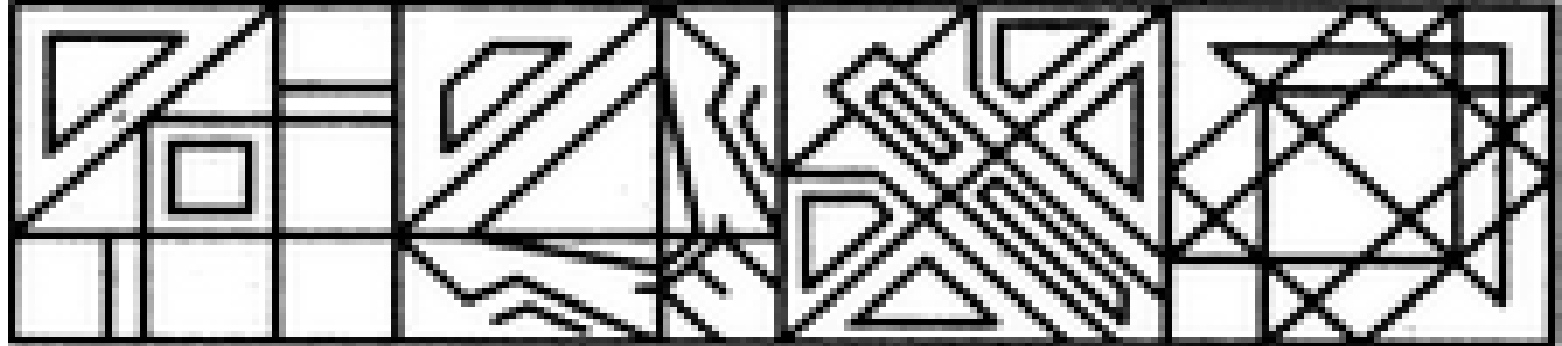




Find out the alternative figure which contains figure (X) as its part.



(X)



(1)

(2)

(3)

(4)

A.1

B.2

C.3

D.4





**Arrange the given words in the sequence in which they occur in the dictionary.**

- 1. Heart**
- 2. Henry**
- 3. Heavy**
- 4. Hence**
- 5. Hedge**



- (1) 15342**
- (2) 31452**
- (3) 13425**
- (4) 13542**



**Statement :**

All Carrots are birds.

Some telephones are Carrots.

All bedsheets are telephone.

**Conclusions :**

(I) Some birds are telephone

(II) All telephone are birds

**कथन :**

सभी गाजर पक्षी हैं।

कुछ टेलीफोन गाजर हैं।

सभी बेडशीट टेलीफोन हैं।



**निष्कर्ष :**

(I) कुछ पक्षी टेलीफोन हैं

(II) सभी टेलीफोन पक्षी हैं





**Statement :**

All Carrots are birds.

Some telephones are Carrots.

All bedsheets are telephone.

**Conclusions :**

(I) Some birds are telephone

(II) All telephone are birds



A, P, R, X, S and Z are sitting in a row. S and Z are in the centre. A and P are at the ends. R is sitting to the left of A. Who is to the right of P ?

A, P, R, X, S और Z एक पंक्ति में बैठे हैं। S और Z केंद्र में हैं। A और P सिरों पर हैं। R, A के बायें बैठा है। P के दायीं ओर कौन है?

- (A) A
- (B) X
- (C) S
- (D) Z





Five students are standing in a circle. Amit is between Ambuj and Ankit. Arun is on the left of Abhishek. Ambuj is on the left of Arun. Who is sitting next to Amit on his right?

पांच छात्र एक घेरे में खड़े हैं। अमित अंबुज और अंकित के बीच में है। अरुण, अभिषेक के बायें है। अंबुज, अरुण के बाईं ओर है। अमित के दायें बगल में कौन बैठा है?

- (A) Arun
- (B) Ambuj
- (C) Amit
- (D) Abhishek

