



Don't Let Your Studies Get Impacted By COVID-19 Pandemic

Stay Home & Study Online With Mahendras Hybrid Model

Features



Offline Classes



Live Interactive Online Classes



Same Faculty



Same Batch



Same Batch Timing



Online Library Facility



Recorded Video



PDFs



Classes In Both Model

CONTACT US:

1800-103-5225

www.mahendras.org





UPCOMING ONLINE BATCHES

JULY 2021

07 July 2021

08:00 AM to 10:00 AM

**LIVE PREMIUM
GREEN CARD**
(BANK-PO & CLERK)

BILINGUAL

14 July 2021

10:30 AM to 12:30 PM

LIVE PREMIUM SILVER CARD
(CGL & CHSL)

03:00 PM to 05:00 PM

LIVE PREMIUM STATE CARD
(UPSSSC PET)

10:30 AM to 02:00 PM

IBPS CLERK PRELIMS 2021
(CRASH COURSE)

BILINGUAL

21 July 2021

01:00 PM to 03:00 PM

LIVE PREMIUM GREEN CARD
(IBPS RRB PO/CLERK PRE + MAINS)

06:30 PM to 09:30 PM

IBPS CLERK PRELIMS 2021
(CRASH COURSE)

BILINGUAL

28 July 2021

01:00 PM to 03:00 PM

LIVE PREMIUM BRONZE CARD
(TET)

07:30 PM to 09:30 PM

LIVE PREMIUM GREEN CARD
(IBPS PO & CLERK)

08:00 AM to 10:00 AM

LIVE PREMIUM SILVER CARD
(SSC CGL & CHSL)

08:00 AM to 11:30 AM

IBPS CLERK PRELIMS 2021
(CRASH COURSE)

BILINGUAL



 *Mahendra's*

IBPS Clerk Prelims 2021

Crash Course

Batch Starts July 14, 2021

10:30 AM To 02:00 PM

LIVE CLASS



Bilingual

 *Mahendra's*

IBPS Clerk Prelims 2021

Crash Course

Batch Starts July 28, 2021

08:00 AM To 11:30 AM

LIVE CLASS



Bilingual



Mahendra's

IBPS Clerk Prelims 2021

Crash Course

Batch Starts July 21, 2021

06:30 PM To 09:30 PM


LIVE CLASS




Bilingual

The Staff Selection Commission has decided to re-schedule its following examinations as per the details given below:


S. No.	Name of Examination	Revised Schedule
1.	Sub-Inspector in Delhi Police, CAPFs and ASI in CISF Examination (Paper-II), 2019	26.07.2021
2.	Combined Higher Secondary (10+2) Level Examination (Tier-I), 2020 - For left-over candidates	04.08.2021-12.08.2021
3.	Combined Graduate Level Examination (Tier-I), 2020	13.08.2021-24.08.2021

 **barbie dancer** 12 hours ago
60 sir aapki class sch m osssm h sir or aapke pdhane ka trika or bhi ossm 😊😊

👍 🗨️ REPLY


 **Radha Garima** 11 hours ago
No. of Peacock 🦚 = 60
Awesome session sir 🙏🙏

👍 🗨️ REPLY

 **Abhi Vaghela** 19 hours ago
60
*****Ek dum TEJASVI SESSION 🔥❤️❤�
solid questions , thank you so much sir 🙏❤️❤�❤�❤�🙏🙏🙏


👍 🗨️ REPLY

📄 [View reply from Mahendras : Online Videos For Govt. Exams](#)

 **sarita rawat** 17 hours ago
Homework answer
Option (D) 60,,,,,,hoga
Awesome session sir 🙏👍🙏🙏
Thanku so much sir 🙏


👍 🗨️ REPLY

📄 [View reply from Mahendras : Online Videos For Govt. Exams](#)

 **kavita kumari** 16 hours ago
Peacock = 60
Nice session sir 👍
Thank u sir 🙏


👍 🗨️ REPLY

📄 [View reply from Mahendras : Online Videos For Govt. Exams](#)

 **Manidipa Mandal** 19 hours ago
Option (D) 60.
Thank you sir.....Nice session sir... 🙏🙏🙏🙏


👍 🗨️ REPLY

📄 [View reply from Mahendras : Online Videos For G](#)

 ****MISS KACHKACH**** 19 hours ago (edited)
ANSWER OF THE DAY 60
200-80 ,, 120 Half 60
V NICE SESSION


👍 🗨️ REPLY

📄 [View reply from Mahendras : Online Videos For G](#)


 **Roshni Khandelwal** 19 hours ago
60 is correct answer
Very nice session sir thank you

👍 🗨️ REPLY

📄 [View reply from Mahendras : Online Videos For G](#)

 **Khushboo Meena** 11 hours ago
60

👍 🗨️ REPLY

 **suraj** 12 hours ago
60

👍 🗨️ REPLY

 **Anushka Mishra** 12 hours ago
60



Kapil Bhagat 19 hours ago

60

👍 🗨️ REPLY



Juthika Das 19 hours ago

Ans is=60

$200-80=120/2=60$

Thank you sir

👍 🗨️ REPLY

▶ [View reply from Mahendras : Online Videos For Govt.](#)



Masum Idki 😊 17 hours ago

60 👍👍

👍 🗨️ REPLY

▶ [View reply from Mahendras : Online Videos For Govt.](#)



Sukhchand Paradkar 18 hours ago

Nice session sir. 👍👍👍👍

👍 🗨️ REPLY

▶ [View reply from Mahendras : Online Videos For Govt.](#)



Mohit Bhagat 9 hours ago

ये 2 बजे वाली Reasoning तो ज़रा हट के हे Sir.. 👍👍👍

Nice class and concepts.. 😊

And

Today's homework is-

Out of 80 animals, we've 60 peacocks and 20 deer.. 👍👍

Show less

👍 🗨️ REPLY



Chhavi Saxena 19 hours ago

Answer is option D 60

$20\text{deer} \times 4 \text{ legs} = 80$

$60 \text{ peacock} \times 2 \text{ legs} = 120$

$120 + 80 = 200..$

Read more

👍 🗨️ REPLY

▶ [View reply from Mahendras : Online Videos For Govt. Exams](#)



PUJA KUNDU 19 hours ago

60 is the correct answer.....aj k session bahat sandar tha and questions bhi sandar tha sir 🙏🙏 thank you sir 🙏

👍 🗨️ REPLY

▶ [View reply from Mahendras : Online Videos For Govt. Exams](#)



Vardhman Daga 19 hours ago

60

👍 🗨️ REPLY

▶ [View reply from Mahendras : Online Videos For Govt. Exams](#)



Preeti 19 hours ago

60

👍 🗨️ REPLY

▶ [View reply from Mahendras : Online Videos For Govt. Exams](#)



Sunny Gupta 19 hours ago

60

👍 🗨️ REPLY

▶ [View reply from Mahendras : Online Videos For Govt. Exams](#)



Shivam Kumar 12 hours ago

60 is right Answer sir 👍👍👍✅✅✅✅✅

👍 🗨️ REPLY



Divyanshi Tiwari 18 hours ago

Option(d): 60 is the answer

👍 🗨️ REPLY

▼ [View reply from Mahendras : Online Videos For Govt. Exams](#)



nikita Chauhan 19 hours ago

Homework ANS option DDD 60

👍 1 🗨️ REPLY

▼ [View reply from Mahendras : Online Videos For Govt. Exams](#)



Abhishek Pandey 19 hours ago

Option -(D) 60

👍 🗨️ REPLY

▼ [View reply from Mahendras : Online Videos For Govt. Exams](#)



Reelaxmi Bhardwaj 19 hours ago

Ans is 60

👍 🗨️ REPLY

▼ [View reply from Mahendras : Online Videos For Govt. Exams](#)

There are deer and peacocks in a zoo. By counting heads they are 80. The number of their legs is 200. How many peacocks are there ?

एक चिड़ियाघर में हिरण और मोर होते हैं। सिर गिनने पर वे 80 होते हैं। उनके पैरों की संख्या 200 होती है। कितने मोर हैं?

A.20 B.30

C.50 D.60

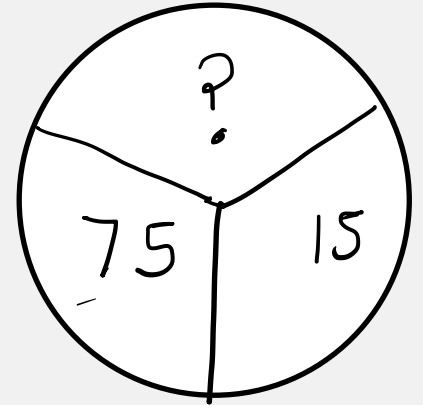
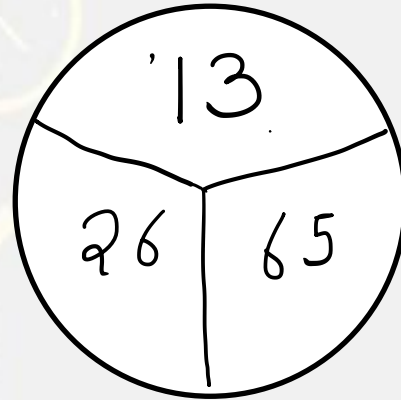
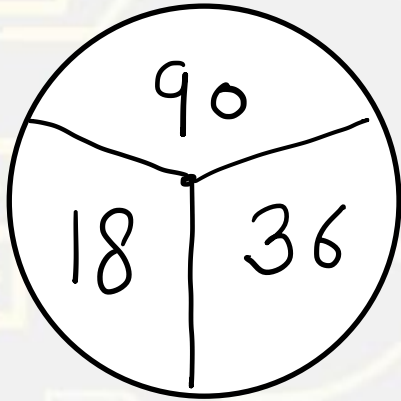


MISSING NUMBER

PART-3

REASONING

Find the missing ONE (?)



- (A) 30
- (B) 45
- (C) 60
- (D) 75

Find the missing ONE (?)

- (A) 90
- (B) 45
- (C) 36
- (D) 72

12	132	144
9	?	81
7	42	49



Find the missing ONE (?)

$$? : 63 :: 08 : 26$$

- (A) 12
- (B) 91
- (C) 18
- (D) 15



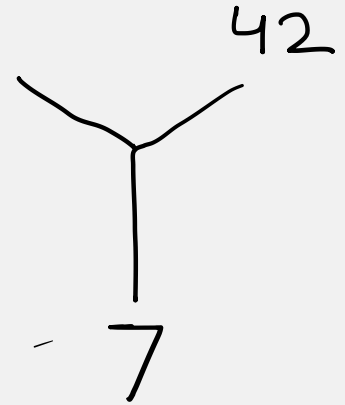
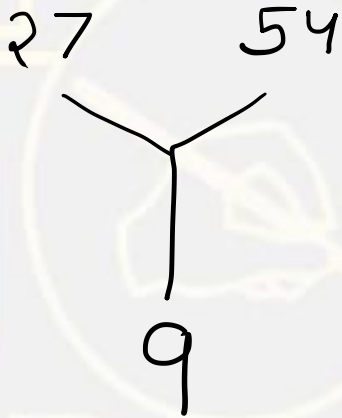
Find the Missing one (?)

42 : 54 :: 56 : ?

- (A) 18
- (B) 64
- (C) 72
- (D) 90



Find the missing ONE (?)



- (A) 12
- (B) 21
- (C) 24
- (D) 35

8	27	17
4	6	6
14	51	31
11	?	19



Find the option which should replace (?)

- (A) 21
- (B) 24
- (C) 35
- (D) 37

Find the option which should replace (?)

6	5	4
11	9	7
?	56	33



- (A) 75
- (B) 95
- (C) 65
- (D) 85

11 : 8 :: 15 : ?

- (A) 30**
- (B) 25**
- (C) 18**
- (D) 12**



42 : 56 :: 132 : ?

- (A) 156**
- (B) 145**
- (C) 110**
- (D) 240**



Find the option which should replace (?)

$$5 : 52 :: 10 : ?$$

- (A) 200
- (B) 202
- (C) 196
- (D) 169

