

RRB NTPC CBT 2/GROUP D



REASONING

अबकी बार **RAILWAY** पार

Complete Revision



LIVE 7:30 PM





Don't Let Your Studies Get Impacted By COVID-19 Pandemic

Stay Home & Study Online With Mahendras Hybrid Model

Features



Offline Classes



Live Interactive Online Classes



Same Faculty



Same Batch



Same Batch Timing



Online Library Facility



Recorded Video



PDFs



Classes In Both Model

CONTACT US:

1800-103-5225

www.mahendras.org





UPCOMING ONLINE BATCHES

December 2021

01 Dec 2021

08:00 AM to 10:00 AM

LIVE PREMIUM GREEN CARD
(BANK-PO & CLERK)

05:30 PM to 07:30 PM

LIVE PREMIUM GREEN CARD
(BANK-PO & CLERK)

01:00 PM to 03:00 PM

LIVE PREMIUM SILVER CARD
(SSC CGL & CHSL)

BILINGUAL

08 Dec 2021

10:30 AM to 12:30 PM

LIVE PREMIUM GREEN CARD
(BANK-PO & CLERK)

03:00 PM to 05:00 PM

LIVE PREMIUM GREEN CARD
(BANK-PO & CLERK)

08:00 AM to 10:00 AM

LIVE PREMIUM SILVER CARD
(SSC CGL & CHSL)

BILINGUAL

15 Dec 2021

01:00 PM to 03:00 PM

LIVE PREMIUM GREEN CARD
(BANK-PO & CLERK)

10:30 AM to 12:30 PM

LIVE PREMIUM SILVER CARD
(SSC CGL & CHSL)

BILINGUAL

22 Dec 2021

08:00 AM to 10:00 AM

LIVE PREMIUM GREEN CARD
(BANK-PO & CLERK)

07:30 PM to 09:30 PM

LIVE PREMIUM SILVER CARD
(SSC CGL & CHSL)

BILINGUAL

29 Dec 2021

10:30 AM to 12:30 PM

LIVE PREMIUM GREEN CARD
(BANK-PO & CLERK)

07:30 PM to 09:30 PM

LIVE PREMIUM GREEN CARD
(BANK-PO & CLERK)

03:00 PM to 05:00 PM

LIVE PREMIUM SILVER CARD
(SSC CGL & CHSL)

BILINGUAL



RRB NTPC Stage-2 Exam Pattern

Sections	No. of Questions	Total Marks	Duration
Mathematics	35	35	90 minutes
General Intelligence and Reasoning	35	35	
General Awareness	50	50	
Total	120	120	



PUJA KUNDU 13 hours ago

The answer is 51.....AMAZING SESSION SIR AND THANK YOU FOR THE SESSION SIR

👍 1 REPLY

[View reply from Mahendras : Online Videos For Govt. Exams](#)



SANIA 5 hours ago

shaandaar session sir 🙏🙏

51 🔥🔥🔥🔥

👍 1 REPLY

[View reply from Mahendras : Online Videos For Govt. Exams](#)



Radha Garima 13 hours ago

Answer :51

Nice session sir 🙏🙏

👍 1 REPLY

[View reply from Mahendras : Online Videos For Govt. Exams](#)



Chhavi Saxena 15 hours ago

Home work answer is 51

Nice session sir 🙏🙏

👍 1 REPLY

[View reply from Mahendras : Online Videos For Govt. Exams](#)



Ankit Vish 15 hours ago

Answer. 51

Very nice session sir 🙏🙏

👍 2 REPLY



Devesh Trivedi 14 hours ago

51 Right answer

1 [REPLY](#)

[View reply from Mahendras : Online Videos For Govt. Exams](#)



Kapil Bhagat 15 hours ago

51

[REPLY](#)



Masum Idki 😊 14 hours ago

51

1 [REPLY](#)

[View reply from Mahendras : Online Videos For Govt. Exams](#)



Priyanka Yadav 15 hours ago

51

1 [REPLY](#)

[View reply from Mahendras : Online Videos For Govt. Exams](#)



puspranjan singh 15 hours ago

51

1 [REPLY](#)

[View reply from Mahendras : Online Videos For Govt. Exams](#)

Find the missing :-

$$37 * 14 = 17$$

$$91 * 125 = 72$$

$$28 * 125 = ?$$

1. 26
2. 42
3. 34
4. 51



Find the Missing one (?)



- (A) 270
- (B) 265
- (C) 280
- (D) 275

4	18	23
10	165	?
4	6	1

Find the missing :-

? : ALKLO : WOULD : TLRIA

- (A) DONOR**
- (B) CONES**
- (C) BARGE**
- (D) BLOCK**



Find the missing :-

47 : 65 :: 59 : ?

- (A) 95
- (B) 110
- (C) 106
- (D) 118



Find the ODD :-

- (A) Shimla / शिमला
- (B) Darjeeling / दार्जिलिंग
- (C) Ooty / ऊटी
- (D) Agra / आगरा



Find the missing :-

d_fde__ deee_

- (A) eeff
- (B) cdef
- (C) ddee
- (D) deee



Find the Missing one (?)

$$12 : 3.6 :: 108 : ?$$

- (A) 32.4
- (B) 3.24
- (C) 324
- (D) 81



Find the option which should replace (?)

40, 40, 52, 70, 150, ?

- (A) 100**
- (B) 300**
- (C) 230**
- (D) 250**



Find the odd one (?)

(A) 187 : 621

(B) 233 : 96

(C) 636 : 873

(D) 179 : 153



Find the option which should replace (?)

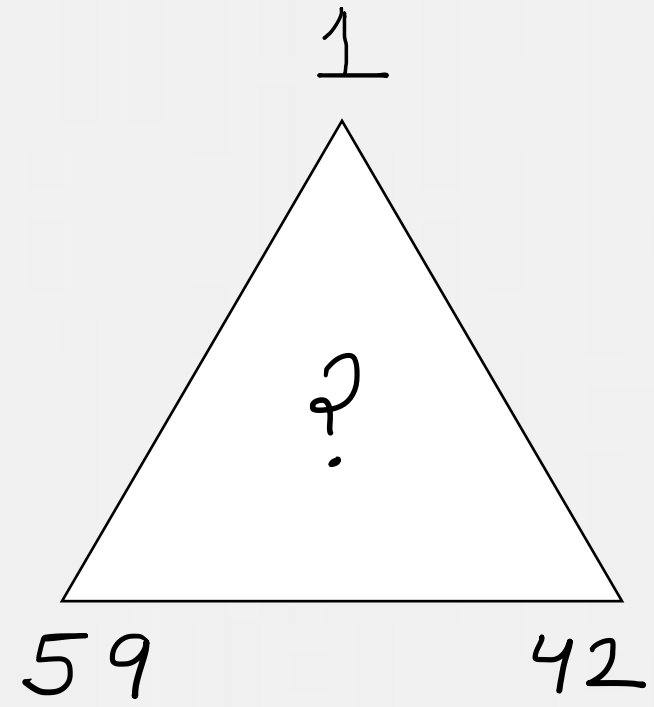
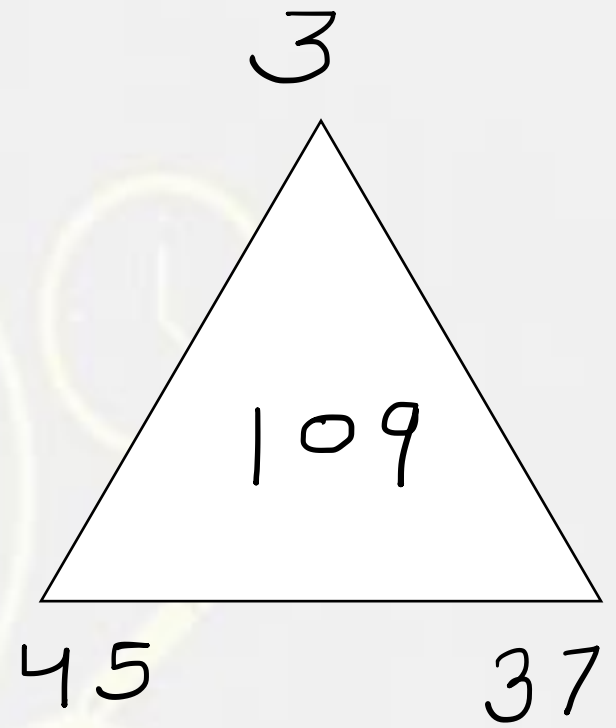
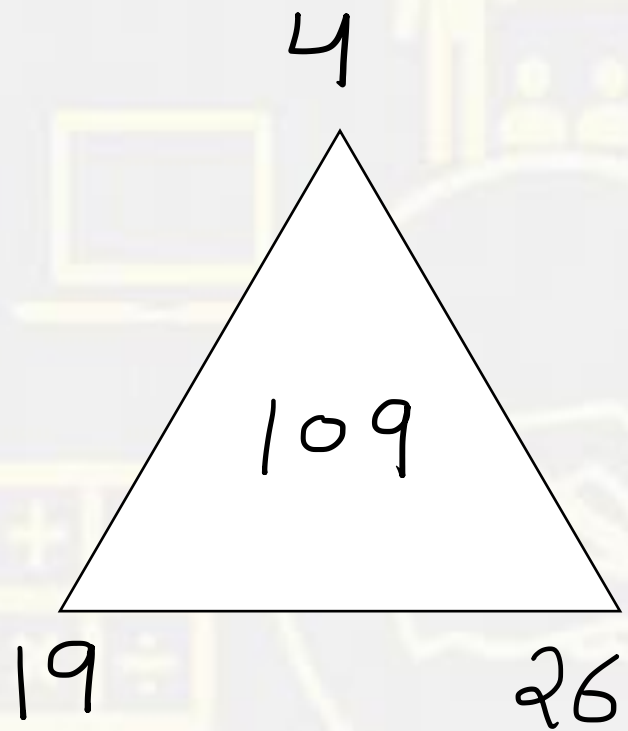
$$20 + 15 = 20$$

$$64 + 13 = 204$$

$$59 + 28 = ?$$

- A. 158
- B. 165
- C. 164
- D. 124





- A. 103
- B. 102
- C. 109
- D. 225



Find the missing :-

$$15 * 62 = 6512$$

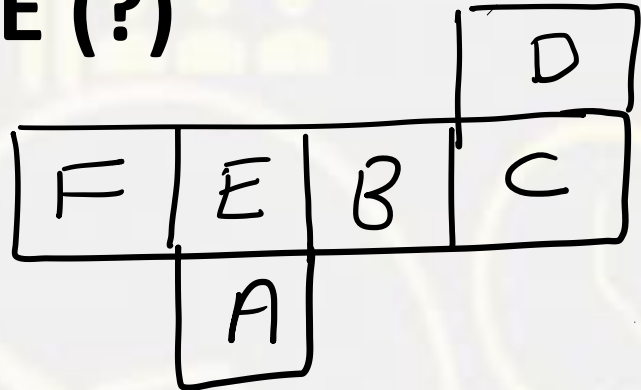
$$29 * 36 = 6923$$

$$46 * 54 = ?$$

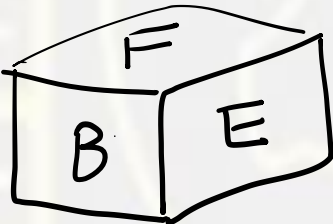
1. 5564
2. 4645
3. 4564
4. 4465



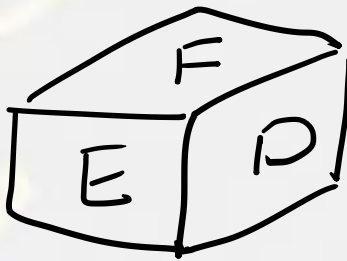
Find the DICE (?)



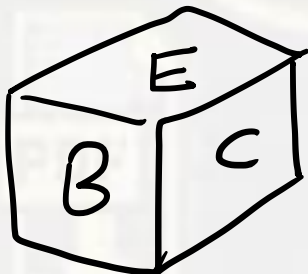
(A)



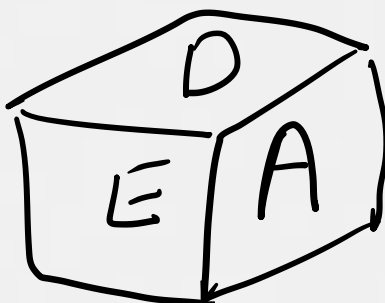
(B)



(C)



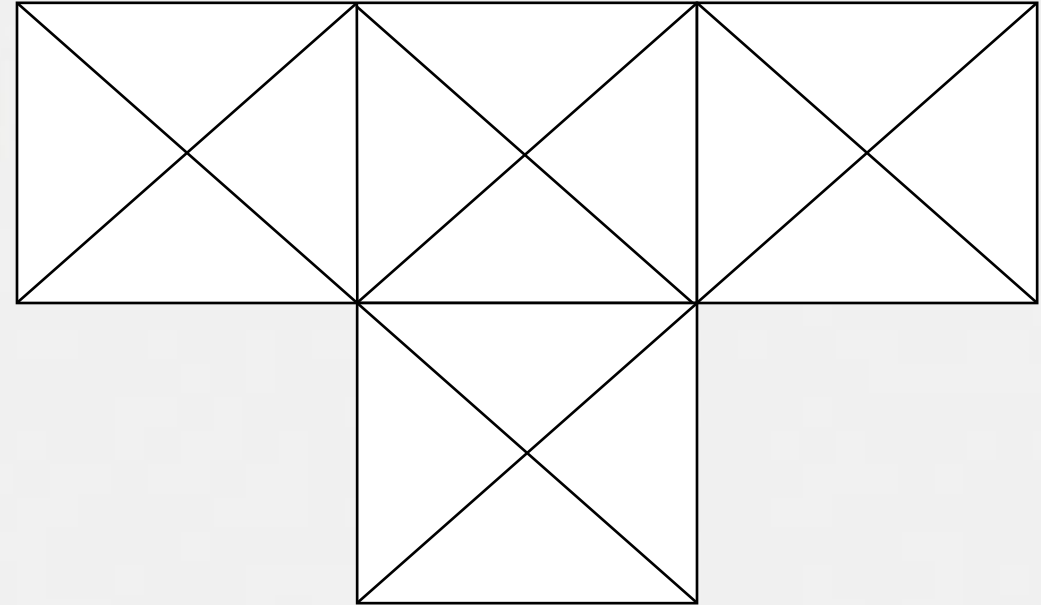
(D)



Find number of triangle in the given figure ?

दी गई आकृति में त्रिभुज की संख्या ज्ञात कीजिए?

- (A) 40**
- (B) 41**
- (C) 38**
- (D) 25**



Statement :-

Some machine are kite. / कुछ मशीन पतंग हैं।
No machine is hero. / कोई मशीन हीरो नहीं है।

Conclusion:-

Some Machine are hero. / कुछ मशीन हीरो हैं।
All kites are hero. / सभी पतंग हीरो हैं।
Some kite are hero. / कुछ पतंग हीरो हैं।



Statement :-

All Women are Doctors . / सभी महिलाएं डॉक्टर्स हैं।
Some Doctors are Advocate./ कुछ डॉक्टर एडवोकेट हैं।



Conclusion:-

All Doctors are Women . / सभी डॉक्टर महिलाएं हैं।
Some Women are advocate . / कुछ महिलाएं वकील हैं।
No Women are Advocate./ कोई भी महिला एडवोकेट नहीं हैं।