



RRB GROUP D 2022



REASONING

MEMORY BASED PAPER DISCUSSION

17TH AUG - ALL SHIFTS

LIVE  **08:30 PM**





UPCOMING ONLINE BATCHES

August 2022

03 AUG 2022

03:00 PM to 05:00 PM

BANK ONLINE LIVE CLASS

01:00 PM to 03:00 PM

SSC ONLINE LIVE CLASS

BILINGUAL

10 AUG 2022

05:30 PM to 07:30 PM

BANK ONLINE LIVE CLASS

08:00 AM to 10:00 AM

SSC ONLINE LIVE CLASS

BILINGUAL

17 AUG 2022

08:00 AM to 10:00 AM

BANK ONLINE LIVE CLASS

05:30 PM to 07:30 PM

SSC ONLINE LIVE CLASS

BILINGUAL

24 AUG 2022

07:30 PM to 09:30 PM

BANK ONLINE LIVE CLASS

10:30 AM to 12:30 PM

SSC ONLINE LIVE CLASS

BILINGUAL

31 AUG 2022

10:30 AM to 12:30 PM

BANK ONLINE LIVE CLASS

07:30 PM to 09:30 PM

SSC ONLINE LIVE CLASS

BILINGUAL

10 AUG 2022

02:00 PM to 04:00 PM

BANK ONLINE LIVE CLASS

BENGALI+ENGLISH

31 AUG 2022

06:30 PM to 08:30 PM

BANK ONLINE LIVE CLASS

BENGALI+ENGLISH



www.mahendras.org



7052477777/7052577777



Chhavi Saxena 19 hours ago

Home work answer is option C (35)

Logic $(4+2+1)*5=35$

Very Nice session sir Thank you so much dear Sir 🙏🙏🙏🙏🙏🙏🙏🙏🙏

👍 🗨️ REPLY ▶️

▼ 🚫 • 1 REPLY



Ankit Vish 19 hours ago 267 subscribers

Answer. CCC

Logic $4+2+1*5=35$

Lajwab session sir 🙏🙏

👍 🗨️ REPLY ▶️

▼ 🚫 • 1 REPLY



🌸 PUJA KUNDU 🌸 ----- 19 hours ago 8 subscribers

The answer is 35... $(4+2+1)*5=35$aaajk session superb dhasu 🔥🔥🔥🔥 tha sir...wrong NO. Series bahat accha tha..thank you sir 🙏🙏🙏🙏

👍 🗨️ REPLY ▶️

▼ 🚫 • 1 REPLY



Puspranjan singh 19 hours ago 1 subscribers

$35(4+2+1) \times 5$

👍 🗨️ REPLY ▶️

▼ 🚫 • 1 REPLY



khushbu 19 hours ago

cccc--- phle teen disit ka sum ka multipl last no



REPLY



vedant yaduwanshi 9 hours ago

Homework ans $35^4 + 2 + 1 * 5 = 35$ 🙏🙏🙏🙏



REPLY



• 1 REPLY



GUDIYA SHARMA 7 hours ago 3 subscribers

35=



REPLY



Surbhi Sinha 19 hours ago

Option cccccccc 35 35 😞 😞



REPLY



• 1 REPLY

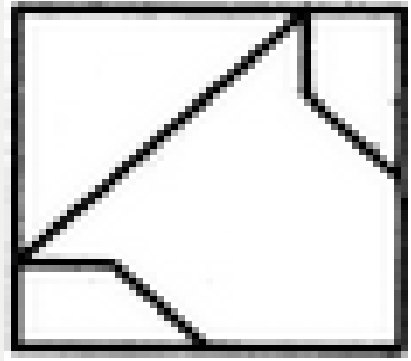
Find the option which should replace (?)

2353 : 30 :: 4215 : ?

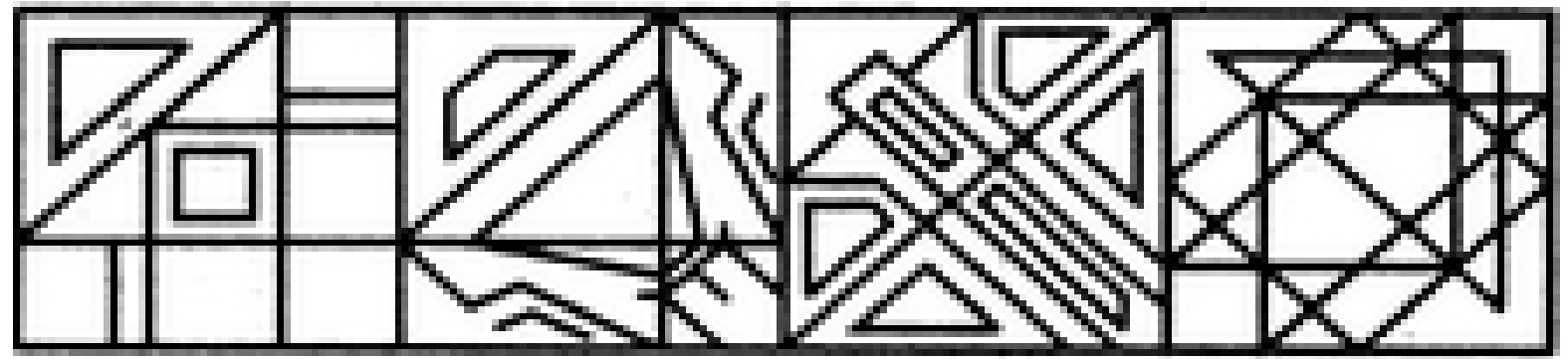
- A. 30
- B. 32
- C. 35
- D. 39



Find out the alternative figure which contains figure (X) as its part.



(X)



(1)

(2)

(3)

(4)

A.1

B.2

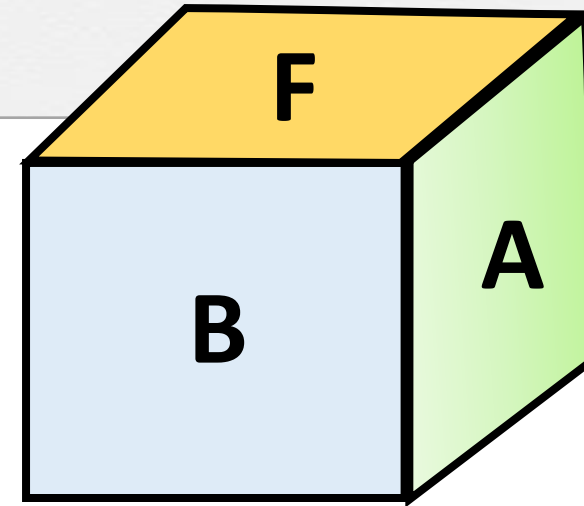
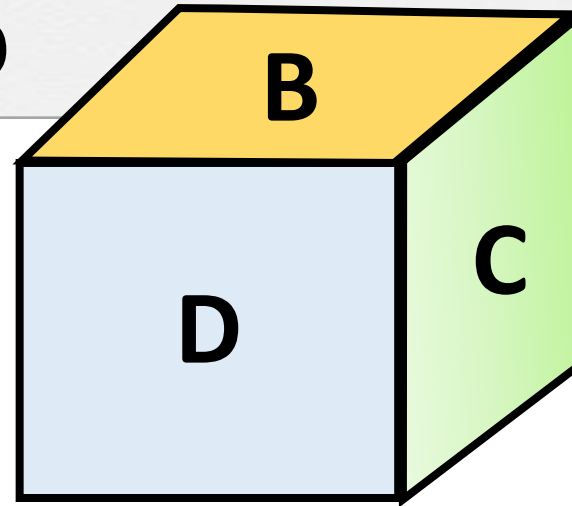
C.3

D.4



Two positions of dice are shown using A to F letters. What will appear on the opposite to the face containing B?

- (A) F
- (B) C
- (C) E
- (D) CND



Q.. Statement :

Some ships are boats.

All boats are submarines.

Some submarines are yatches.

Conclusions :

(I) Some ships are yatches.

(II) Some submarines are ships.

प्र.. कथन :

कुछ जहाज नौकाएं हैं।

सभी नाव पनडुब्बी हैं।

कुछ पनडुब्बी नौकाएं हैं।

निष्कर्ष:

(I) कुछ जहाज नौका हैं।

(II) कुछ पनडुब्बियां जहाज हैं।

Q.. Statement :

Some ships are boats.

All boats are submarines.

Some submarines are yatches.

Conclusions :

(I) Some ships are yatches.

(II) Some submarines are ships.



Find the option which should replace (?)

$$6 : 2 :: 8 : ?$$

- (A) 1
- (B) 3
- (C) 5
- (D) 7

Find the option which should replace (?)

$$17 : 4 :: 37 : ?$$

- (A) 4
- (B) 6
- (C) 12
- (D) 7

Find the missing ONE (?)

- (A) 10
- (B) 14
- (C) 8
- (D) 2

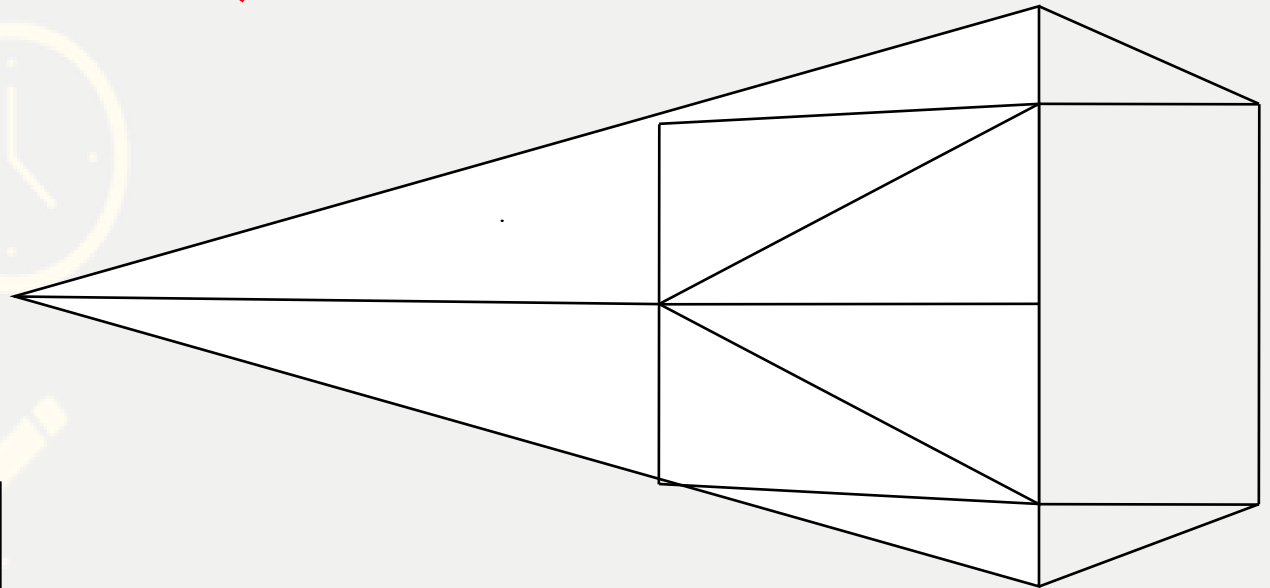
10	
8	13
16	6
4	19
22	?



Find number of triangle in the given figure ?

दी गई आकृति में त्रिभुज की संख्या ज्ञात कीजिए?

- (A) 22**
- (B) 18**
- (C) 17**
- (D) 16**





Find the option which should replace (?)

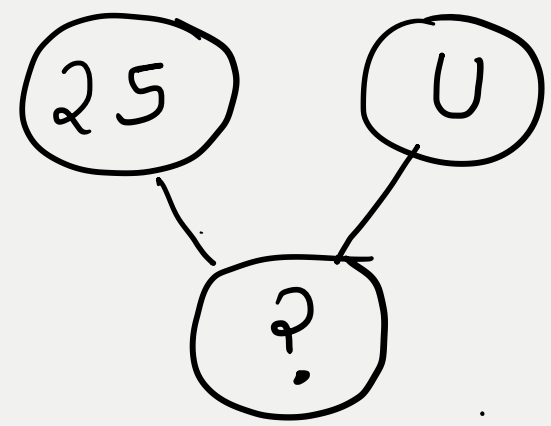
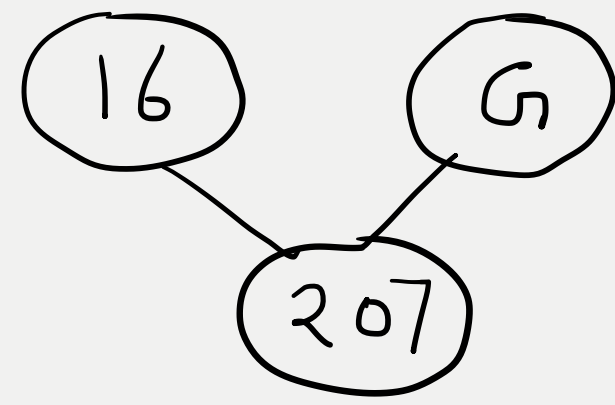
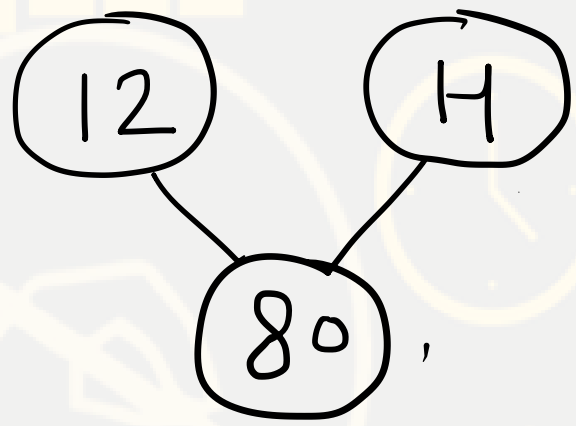
GO : AA :: NO : ?

- (A) EE
- (B) OO
- (C) AA
- (D) UU



Find the option which should replace (?)

- (A) 184
- (B) 160
- (C) 120
- (D) 250





Find the missing term(?)

PEMOURD : RNVRFIFH :: FENDRAK : ?

- (A) IVMGZIN**
- (B) IMVGIZN**
- (C) HMVGZIO**
- (D) IMVGZIP**



Find the missing term(?)

2 , 3 , 9 , 49 , ? , 3841

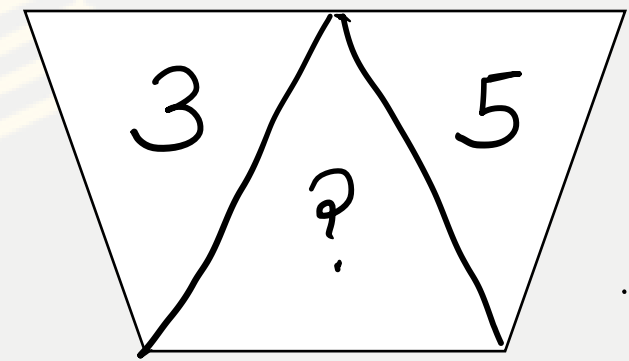
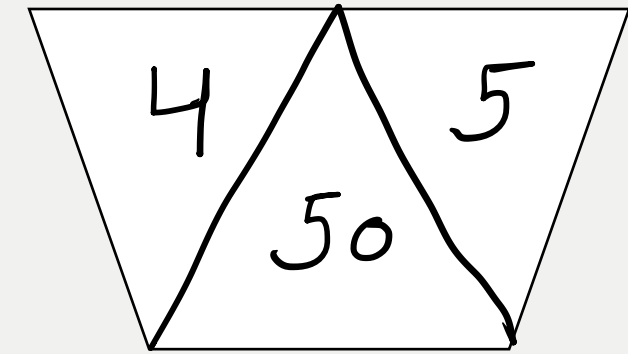

- (A) 385**
- (B) 685**
- (C) 458**
- (D) 565**





Find the option which should replace (?)

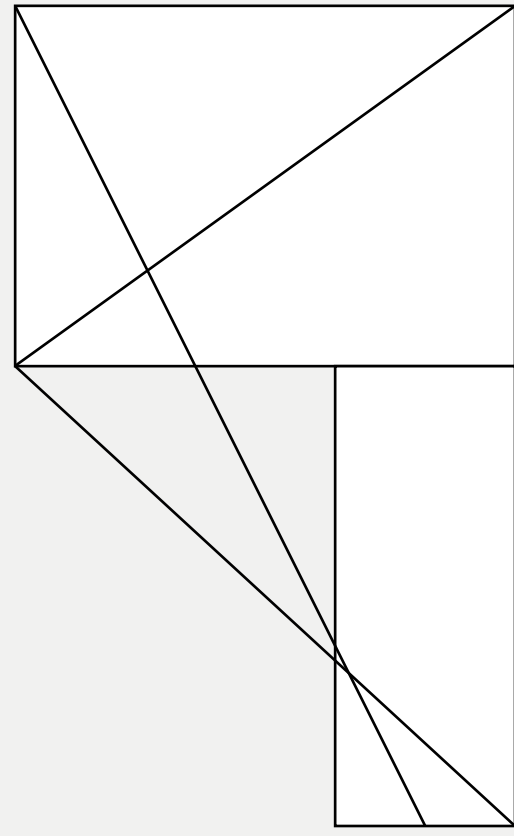
- (A) 34
- (B) 40
- (C) 49
- (D) 53





Find the number of triangle (?)

- (A) 12
- (B) 15 RIGHT
- (C) 11
- (D) 13



Find odd word from the given alternative.

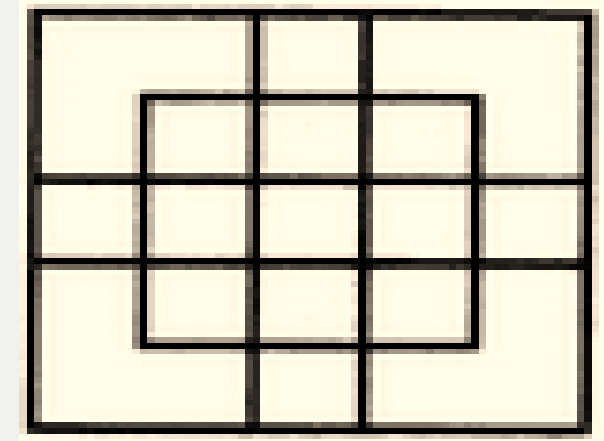
दिए गए विकल्प में से विषम शब्द ज्ञात कीजिए ।

1. Pradhan Mantri Jan Dhan Yojana: Ministry of Health & Family Welfare
2. Atal Pension Yojana: Ministry of Finance
3. Pradhan Mantri Fasal Bima Yojana: Ministry of Agriculture
4. Make in India: Ministry of Commerce and Industry
5. Namami Gange: Ministry of Water Resources

1. प्रधानमंत्री जन धन योजना: स्वास्थ्य और परिवार कल्याण मंत्रालय
2. अटल पेंशन योजना: वित्त मंत्रालय
3. प्रधानमंत्री आवास बीमा योजना: कृषि मंत्रालय
4. मेक इन इंडिया: वाणिज्य और उद्योग मंत्रालय
5. नमामि गंगे: जल संसाधन मंत्रालय

Find number of squares in figure?

- (A) 18
- (B) 19
- (C) 25
- (D) 27



Arrange in meaningful order :

- 1. Orange
- 2. Indigo
- 3. Red
- 4. Blue
- 5. Green
- 6. Yellow
- 7. Violet

- A. 5,4,2,1,3,6,7
- B. 2,4,1,3,6,5,7
- C. 7,2,4,5,6,1,3
- D. 2,1,6,5,3,4,7

