

SSC GD 2021



REASONING

25 कदम
Exam की ओर.....

Complete
MOCK TEST

25/25

LIVE 8:30 PM





Don't Let Your Studies Get Impacted By COVID-19 Pandemic

Stay Home & Study Online With Mahendras Hybrid Model

Features

- Offline Classes ↔ Live Interactive Online Classes
- Same Faculty
- Same Batch
- Same Batch Timing
- Online Library Facility
- Recorded Video
- PDFs
- Classes In Both Model

CONTACT US:

1800-103-5225

www.mahendras.org





UPCOMING ONLINE BATCHES

November 2021

17 Nov 2021

01:00 PM to 3:00 PM

IBPS SO PRE CRASH COURSE
(BANK-SO)

08:00 AM to 10:00 AM

LIVE PREMIUM GREEN CARD
(BANK-PO & CLERK)

05:30 PM to 07:30 PM

LIVE PREMIUM GREEN CARD
(BANK-PO & CLERK)

10:30 AM to 12:30 PM

LIVE PREMIUM SILVER CARD
(SSC CGL & CHSL)

BILINGUAL

24 Nov 2021

10:30 AM to 12:30 PM

LIVE PREMIUM GREEN CARD
(BANK-PO & CLERK)

07:30 PM to 09:30 PM

LIVE PREMIUM GREEN CARD
(BANK-PO & CLERK)

03:00 PM to 5:00 PM

LIVE PREMIUM SILVER CARD
(SSC CGL & CHSL)

BILINGUAL





Radha Garima 16 hours ago

Answer : 9999

Nice session sir 🙏

👍 🗨️ REPLY



SAPANA 16 hours ago

Ans...D) 9999

Nice session sir.. 👍

Thank you sir 🙏

👍 1 🗨️ REPLY




🌸 PUJA KUNDU 🌸 17 hours ago

9999 is the correct answer....THANK YOU SOO MUCH SIR 🙏 AAJ KA SESSION SANDAR ,MUSICDAAR BHI THA 😊😊...THANK YOU SOO MUCH FOR THE SESSION 🙏

👍 1 🗨️ REPLY

▶ [View reply from Mahendras : Online Videos For Govt. Exams](#)



SANIA _____ 17 hours ago

mast session sir 🙏🙏🙏🙏

dj wala session sir 😊😊

9999 🔥🔥🔥🔥

logic---square-1 🔥🔥🔥🔥

👍 1 🗨️ REPLY

▶ [View reply from Mahendras : Online Videos For Govt. Exams](#)



Roshni Khandelwal 16 hours ago
9999 is correct answer
Very nice session sir thank you

REPLY



Ankit Vish 17 hours ago
Answer. 9999
Very nice session sir 🙏🙏

2 REPLY

▼ [View reply from Mahendras : Online Videos For Govt. Exams](#)



future YT's 17 hours ago
D- 9999 is the correct answer 😊😊

1 REPLY

▼ [View reply from Mahendras : Online Videos For Govt. Exams](#)



puspranjan singh 6 hours ago
Nice session guru g

REPLY



Masum Idki 😊 15 hours ago
D very nice session

REPLY



Kapil Bhagat 17 hours ago
9999

REPLY



bablu sharma 2 hours ago
9999

1 REPLY



Preeti 17 hours ago
9999

1 REPLY

▼ [View reply from Mahendras : Online Videos For Govt. Ex](#)



Hrithik_____ 17 hours ago
9999

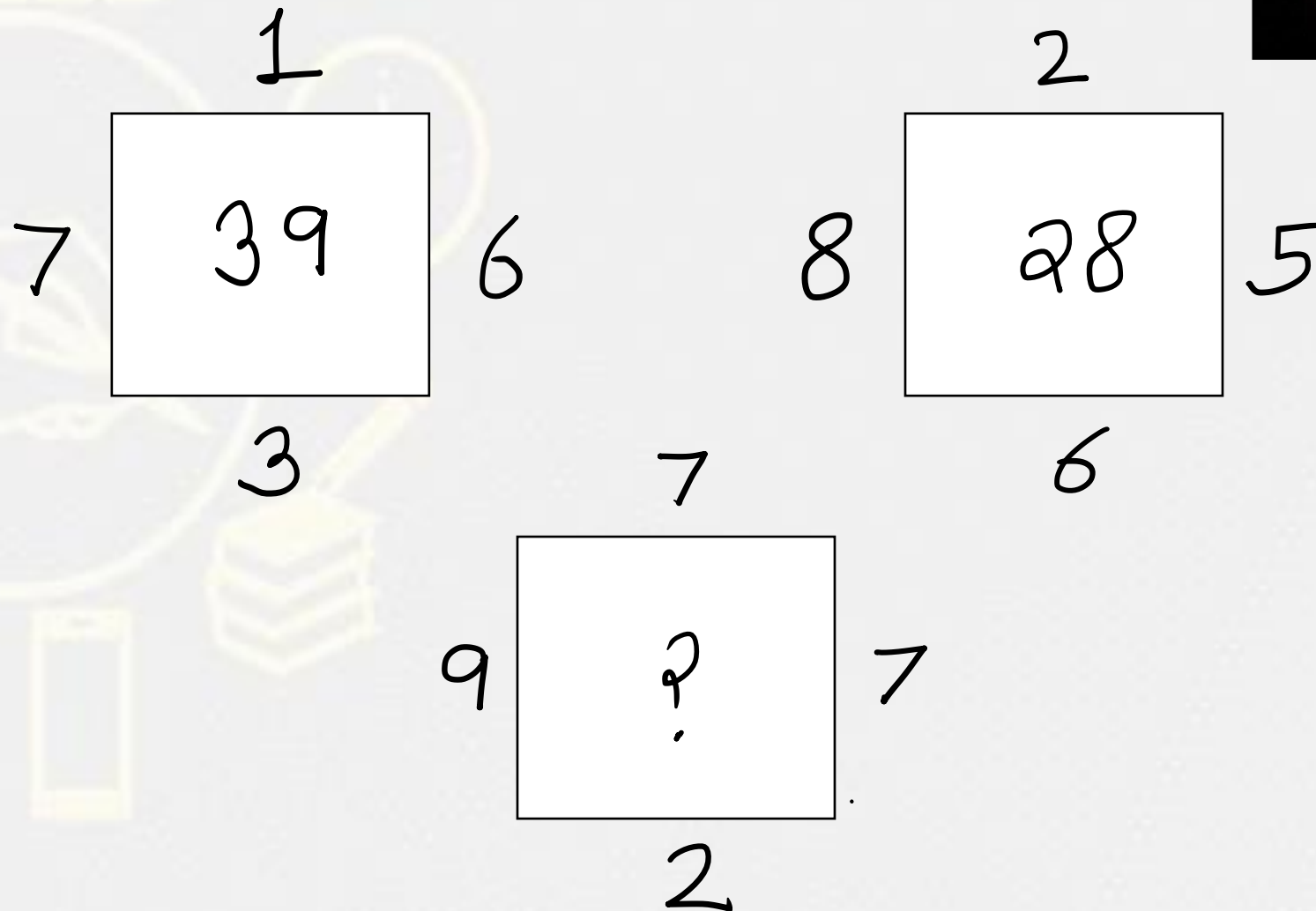
1 REPLY

▼ [View reply from Mahendras : Online Videos For Govt. Ex](#)



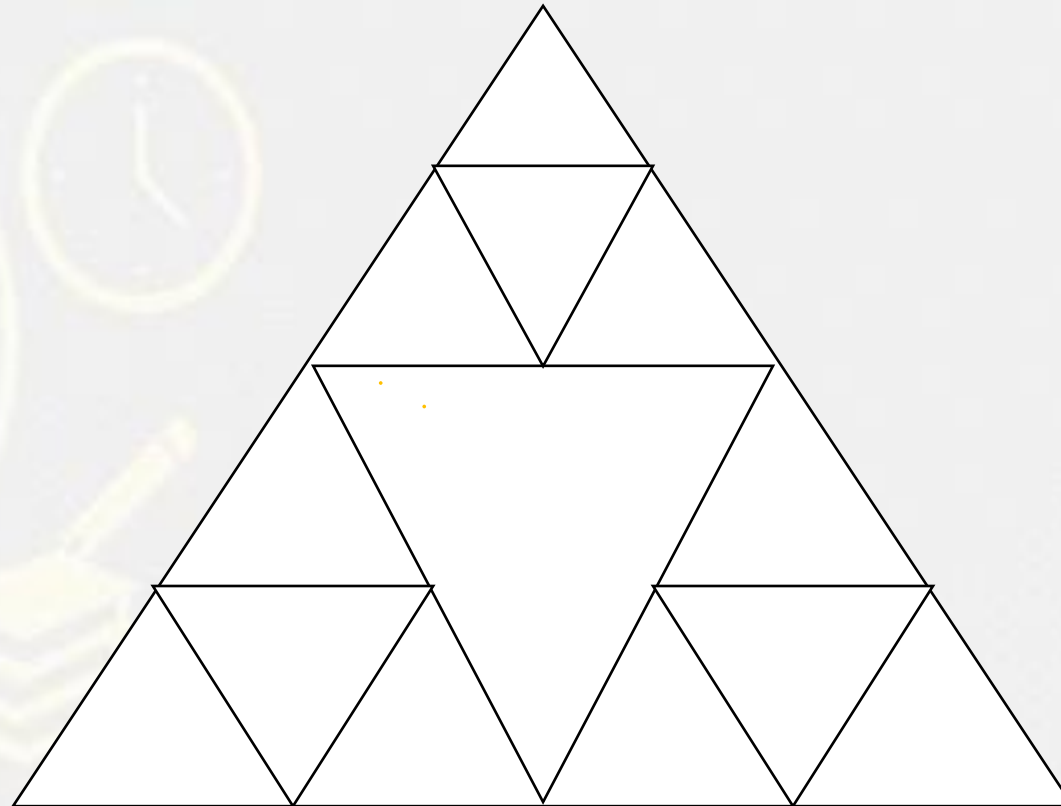
Find the option which should replace (?)

- (A) 49
- (B) 50
- (C) 44
- (D) 56



Find the number of triangle (?)

- (A) 13
- (B) 14
- (C) 17
- (D) 12



Find the missing :-

1. 66
2. 87
3. 78
4. 76

8	7	6
8	7	6
88	77	?
5632	3773	3132



Find the ODD :-

1. Pen / कलम
2. Pencil / पेंसिल
3. Rubber / रबर
4. Sketch pen / स्केच पेन



Find the ODD :-

1. DZVR
2. GCYU
3. QMIF
4. RNJF



Find the ODD :-

- 1. 268 - 16**
- 2. 246 - 12**
- 3. 357 - 15**
- 4. 579 - 13**



Find the missing :-

$$10 * 1 = 18$$

$$50 * 40 = 20$$

$$10 * 5 = ?$$

1. 10

2. 5

3. 15

4. 50



Find the missing :-

51 : 66 :: 81 : ?

1. 99
2. 96
3. 98
4. 90



Find the odd :-

1. 11 - 17
2. 23 - 31
3. 41 - 47
4. 43 - 59



Find the odd :-

- 1. 12 - 156**
- 2. 13 - 182**
- 3. 14 - 210**
- 4. 15 - 230**



Find the missing :-

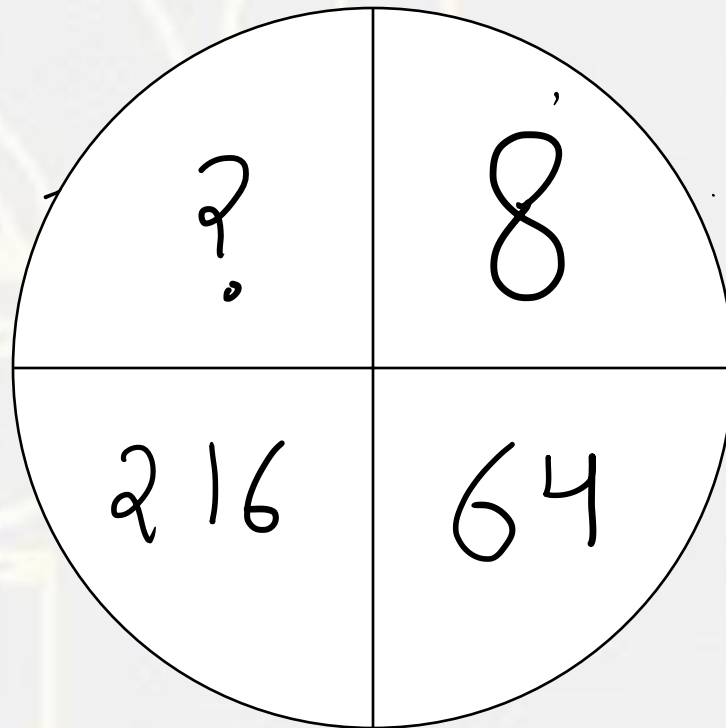
1. 50
2. 60
3. 70
4. 98

5	17	23
7	8	2
9	15	5
42	80	?




Find the missing :-

1. 343
2. 512
3. 729
4. 1000



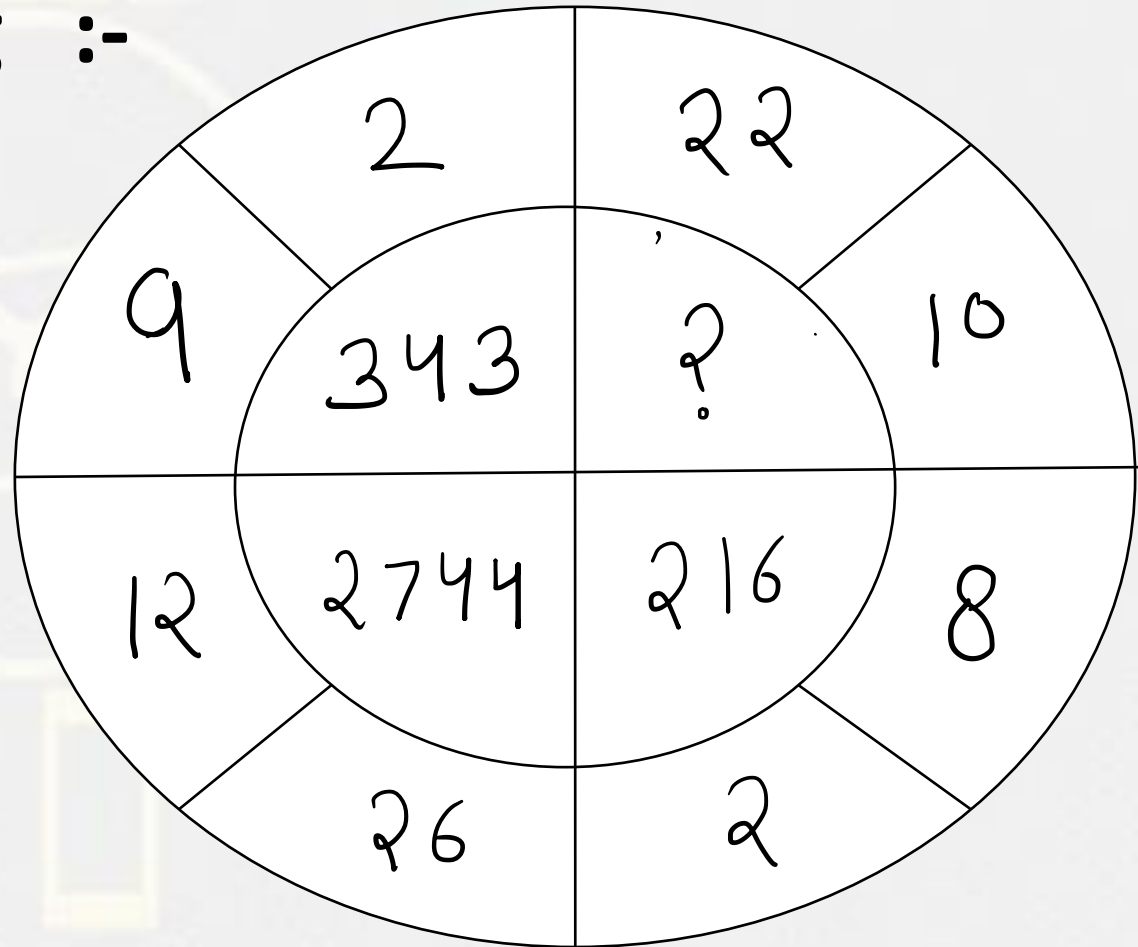
Find the missing :-

1. 14
2. 150
3. 125
4. 53




Find the missing :-


- 1. 1000
- 2. 1728
- 3. 878
- 4. 560




Which of the following diagrams indicates the best relation between (India , Delhi ,Taj mahal) / (भारत, दिल्ली, ताजमहल)



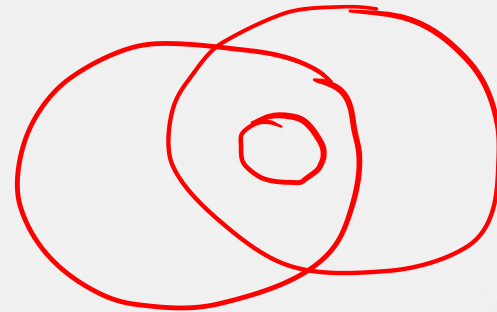
A.



B



.C

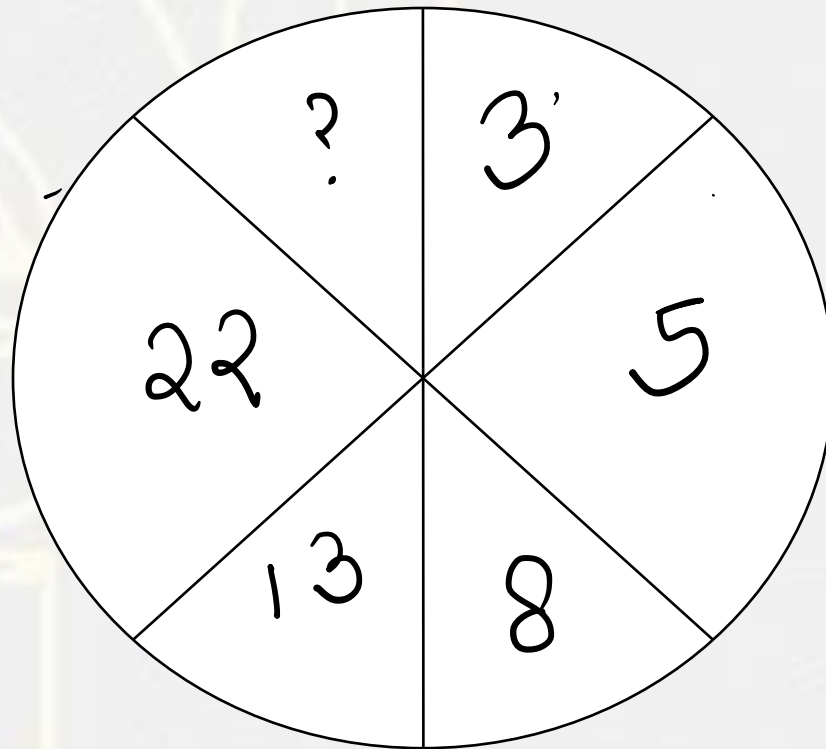


.D.

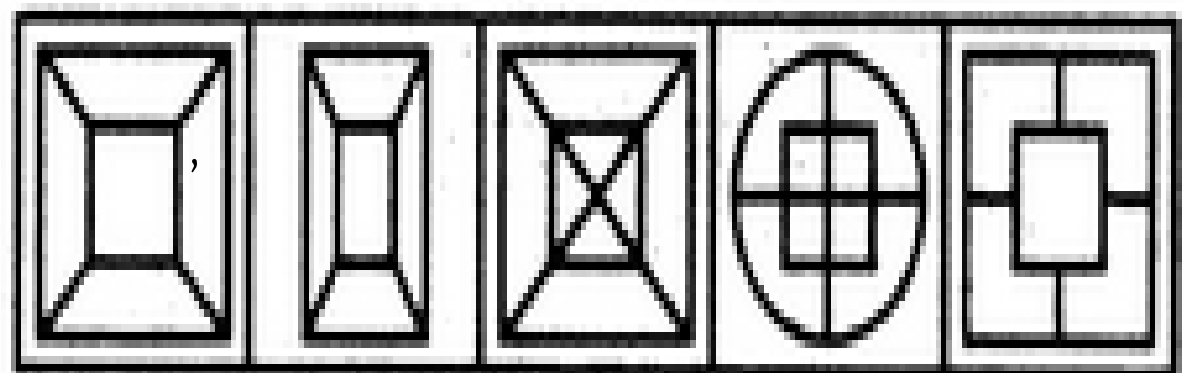
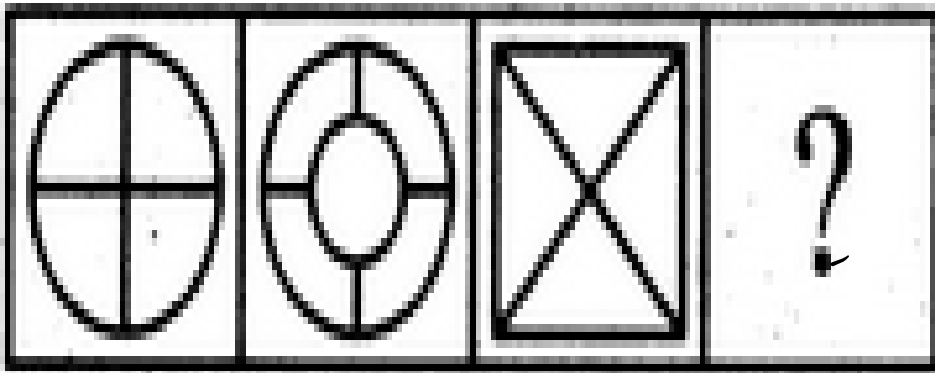


Find the missing :-

- 1. 1
- 2. 26
- 3. 39
- 4. 45



Select a suitable figure from the Answer Figures that would replace the question mark (?)



Problem Figures:

(A) (B) (C) (D)

A.1

B.2

C.3

D.4

E.5

Answer Figures:

(1) (2) (3) (4) (5)



Find the option which should replace (?)

- (A) 1
- (B) 2
- (C) 4
- (D) 3

729	3	216
343	?	64



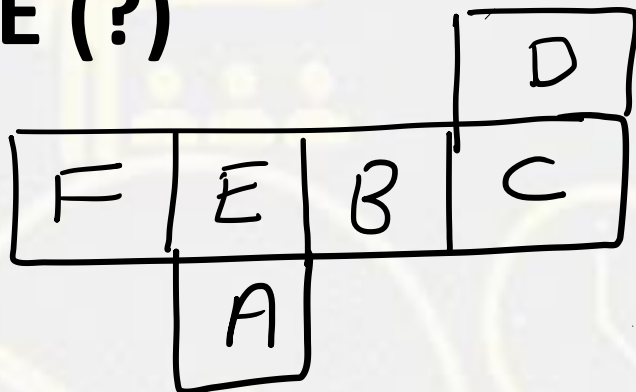
Find the missing term(?)

2 , 3 , 9 , 49 , ? , 3841

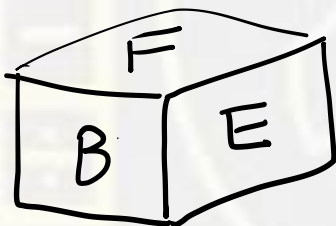
- (A) 385**
- (B) 685**
- (C) 458**
- (D) 565**



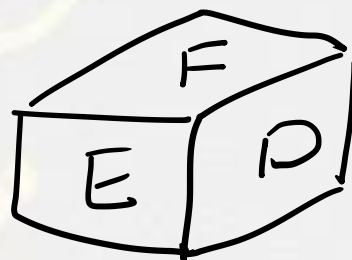
Find the DICE (?)



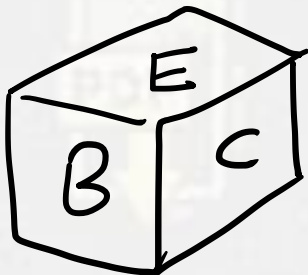
(A)



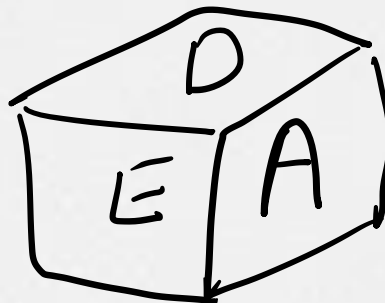
(B)



(C)



(D)



Find number of triangle in the given figure ?

दी गई आकृति में त्रिभुज की संख्या ज्ञात कीजिए?

- (A) 40**
- (B) 41**
- (C) 38**
- (D) 25**

