



# SSC MTS 2022-23



**REASONING**

**SESSION-I**

# **LIVE TEST**

**WITH TIMER**



**BASED ON PREVIOUS YEAR QUESTIONS**

**LIVE | 03:00 PM**

**BY KULDEEP MAHENDRAS**







# UPCOMING ONLINE BATCHES

## MARCH 2023

01 MARCH 2023

10:30 AM to 12:30 PM

**SSC ONLINE LIVE CLASS**

**BILINGUAL**

15 MARCH 2023

08:00 AM to 10:00 AM

**BANK ONLINE LIVE CLASS**

**BILINGUAL**

29 MARCH 2023

08:00 AM to 10:00 AM

**SSC ONLINE LIVE CLASS**

**BILINGUAL**

22 MARCH 2023

02:00 PM to 04:00 PM

**BANK ONLINE LIVE CLASS**

**ENGLISH & BENGALI**

05 APRIL 2023

05:30 PM to 07:30 PM

**BANK ONLINE LIVE CLASS**

**BILINGUAL**



[www.mahendras.org](http://www.mahendras.org) •  7052477777/7052577777

**14.6 Computer Based Examination:**

<b>Part</b>	<b>Subject</b>	<b>Number of Questions/ Maximum Marks</b>	<b>Time Duration (For all four Parts)</b>
<b>Session-I</b>			45 Minutes (60 Minutes for candidates eligible for scribes as per para 8)
I	Numerical and Mathematical Ability	20/60	
II	Reasoning Ability and Problem Solving	20/60	
<b>Session-II</b>			45 Minutes (60 Minutes for candidates eligible for scribes as per para 8)
I	General Awareness	25/75	
II	English Language and Comprehension	25/75	



# SSC MTS 2022-23

**LIVE** at 3:00 PM

	UR	OBC	SC	ST	EWS	TOTAL	ESM	OH	HH	VH	OTHERS
MTS AGE GROUP 18-25	4115	2505	1051	679	979	9329	979	104	131	119	58
MTS AGE GROUP 18-27	1085	723	358	216	283	2665	222	36	36	32	18
Havaldar in CBIC	201	143	106	29	50	529	53	8	7	0	6
Grand Total	5401	3371	1515	924	1312	12523	1254	148	174	151	82





Vishnu Gupta 19 hours ago **11** subscribers

8:256 right ans

Very super nice session sir thank you sir  

  Reply 

  • 1 reply



Surbhi Sinha 16 hours ago **5** subscribers

Homework question answer  8.256


  Reply 

  • 1 reply



Ravi Patel 20 hours ago **5** subscribers

8. :256 

 1  Reply 



  • 1 reply



MO ANAS CHAUDHARY 20 hours ago

Ccccc

  Reply 

  • 1 reply



**Find the option which should replace (?)**

**10 : 500 :: ?**



**A. 9 : 343**

**B. 5 : 75**

**C. 8 : 256**

**D. 7 : 343**



**Find the option which should replace (?)**

**A , G , L , P , S , ?**



- (A) X**
- (B) U**
- (C) Y**
- (D) W**



**Find the odd one (?)**

- (A) 2 - 7**
- (B) 3 - 26**
- (C) 5 - 126**
- (D) 4 - 63**







**Find the odd one (?)**

- (A) 61**
- (B) 90**
- (C) 75**
- (D) 144**





**Find the missing one (?)**

**Hen : Egg :: Tree : ?**  
**मुर्गी: अंडा :: पेड़:?**



- (A) Bark / बार्क**
- (B) Seed / बीज**
- (C) Leaves / पत्तियां**
- (D) Fruits / फल**



**Find the missing one (?)**

**6 : 180 :: 10 : ?**

- (A) 1000**
- (B) 891**
- (C) 900**
- (D) 910**

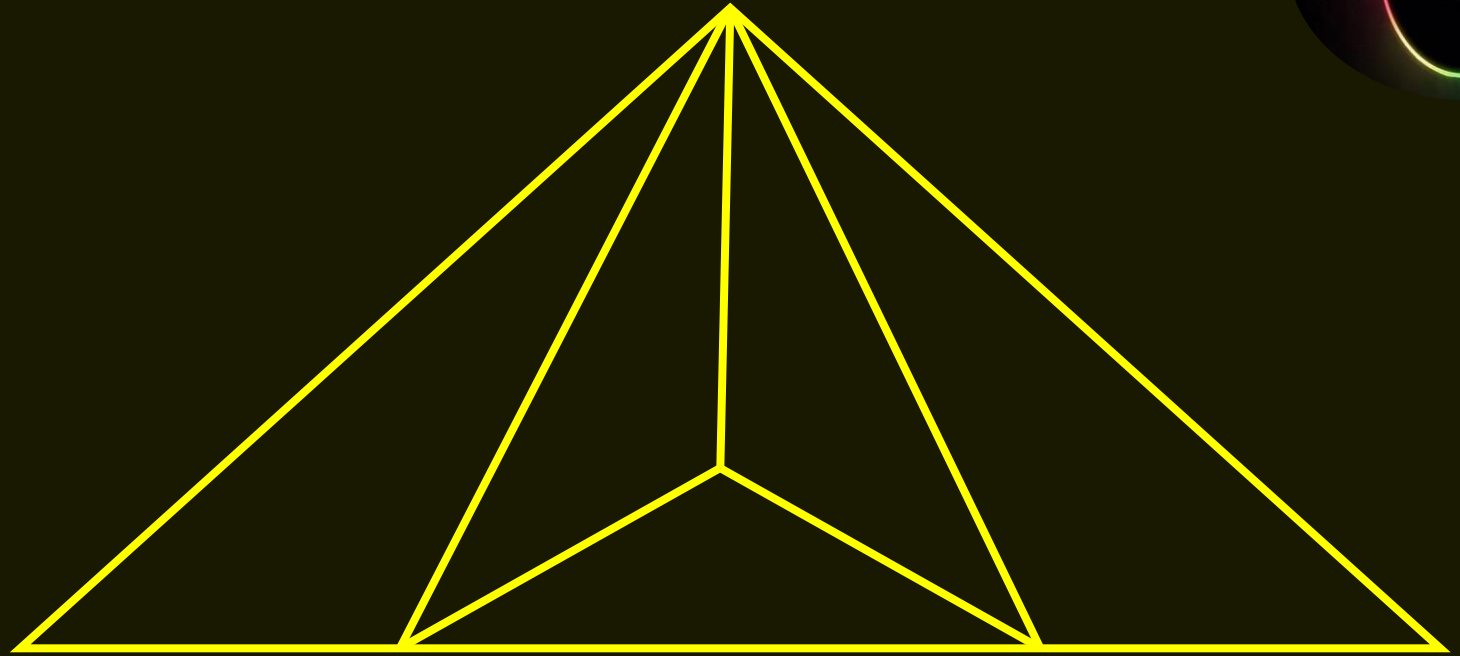




**Find number of triangle in the given figure ?**  
दी गई आकृति में त्रिभुज की संख्या ज्ञात कीजिए?



- (A) 9**
- (B) 10**
- (C) 11**
- (D) NOT**





**Find the missing one (?)**

**XXIV : 48 :: XIV : ?**



- (A) 28**
- (B) 24**
- (C) 14**
- (D) 30**



**Find the missing one (?)**

**600 : 2000 :: ? : 9000**

- (A) 2700**
- (B) 3600**
- (C) 5400**
- (D) 5600**







**Find the missing one (?)**



**Teacher : Student :: Pontiff : ?**

शिक्षक: छात्र :: पुरोहित : ?

- (A) Disciple / शिष्य**
- (B) Followers / फोलेर्स**
- (C) Priest / पुजारी**
- (D) Diety / दैत्य**



**Find the missing one (?)**

**Cot : Mattress :: Floor : ?**  
खाट : गद्दे :: फर्श : ?



- (A) Curtain / पर्दा**
- (B) Bedsheet / बेडशीट**
- (C) Tiles / टाइलें**
- (D) Carpet / कार्पीन**



**Find the missing one (?)**

**55 : 32 :: 76 : ?**



- (A) 14**
- (B) 16**
- (C) 18**
- (D) 20**



**Find the missing one (?)**

$$14 : 9 :: 26 : ?$$

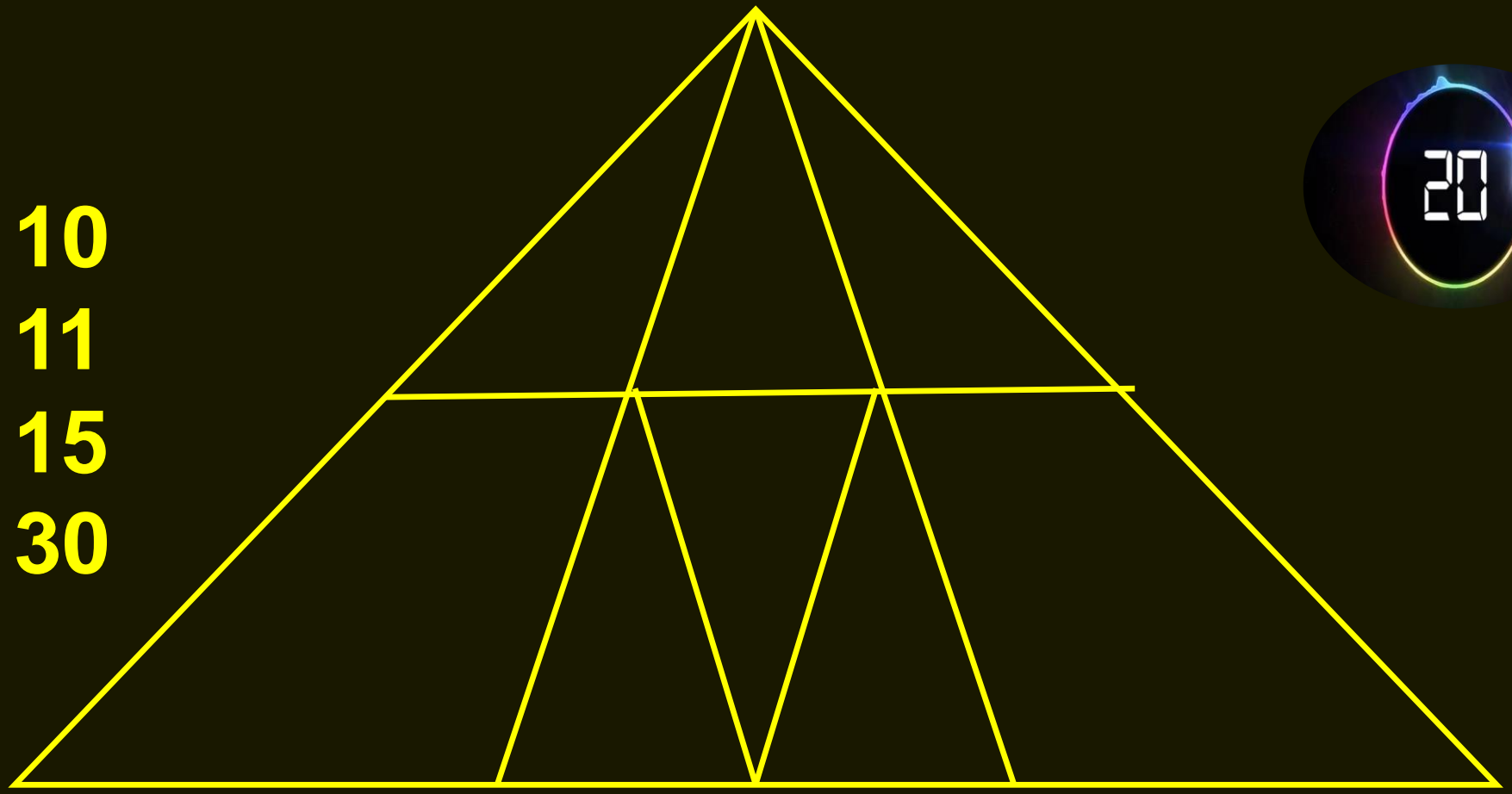


- (A) 12**
- (B) 13**
- (C) 15**
- (D) 31**



**Find the number of triangle (?)**

- (A) 10**
- (B) 11**
- (C) 15**
- (D) 30**





**Find the ODD option (?)**

**A.  $10 + 9$**

**B.  $19 - 0$**

**C.  $95 \div 5$**

**D.  $19 * 0$**

