



Don't Let Your Studies Get Impacted By COVID-19 Pandemic

Stay Home & Study Online With Mahendras Hybrid Model

Features



Offline Classes



Live Interactive Online Classes



Same Faculty



Same Batch



Same Batch Timing



Online Library Facility



Recorded Video



PDFs



Classes In Both Model

CONTACT US:

1800-103-5225

www.mahendras.org





UPCOMING ONLINE BATCHES

JULY 2021

07 July 2021

08:00 AM to 10:00 AM

**LIVE PREMIUM
GREEN CARD**
(BANK-PO & CLERK)

BILINGUAL

14 July 2021

10:30 AM to 12:30 PM

LIVE PREMIUM SILVER CARD
(CGL & CHSL)

03:00 PM to 05:00 PM

LIVE PREMIUM STATE CARD
(UPSSSC PET)

10:30 AM to 02:00 PM

IBPS CLERK PRELIMS 2021
(CRASH COURSE)

BILINGUAL

21 July 2021

01:00 PM to 03:00 PM

LIVE PREMIUM GREEN CARD
(IBPS RRB PO/CLERK PRE + MAINS)

06:30 PM to 09:30 PM

IBPS CLERK PRELIMS 2021
(CRASH COURSE)

BILINGUAL

28 July 2021

01:00 PM to 03:00 PM

LIVE PREMIUM BRONZE CARD
(TET)

07:30 PM to 09:30 PM

LIVE PREMIUM GREEN CARD
(IBPS PO & CLERK)

08:00 AM to 10:00 AM

LIVE PREMIUM SILVER CARD
(SSC CGL & CHSL)

08:00 AM to 11:30 AM

IBPS CLERK PRELIMS 2021
(CRASH COURSE)

BILINGUAL



 *Mahendra's*

IBPS Clerk Prelims 2021

Crash Course

Batch Starts July 14, 2021

10:30 AM To 02:00 PM

LIVE CLASS



Bilingual

 *Mahendra's*

IBPS Clerk Prelims 2021

Crash Course

Batch Starts July 28, 2021

08:00 AM To 11:30 AM

LIVE CLASS



Bilingual



Mahendra's

IBPS Clerk Prelims 2021

Crash Course

Batch Starts July 21, 2021

06:30 PM To 09:30 PM

LIVE CLASS



Bilingual

The Staff Selection Commission has decided to re-schedule its following examinations as per the details given below:

S. No.	Name of Examination	Revised Schedule
1.	Sub-Inspector in Delhi Police, CAPFs and ASI in CISF Examination (Paper-II), 2019	26.07.2021
2.	Combined Higher Secondary (10+2) Level Examination (Tier-I), 2020 - For left-over candidates	04.08.2021-12.08.2021
3.	Combined Graduate Level Examination (Tier-I), 2020	13.08.2021-24.08.2021



Radha Garima 7 hours ago

Answer: 24

"आपकी सफलता पर आपसे भी ज्यादा खुशी आपके माता - पिता और शिक्षक को ही होती है।"

Nice session sir 🙌

👍 1 🗨️ REPLY

▶ [View reply from Mahendras : Online Videos For Govt. Exams](#)



PUJA KUNDU 7 hours ago

24(11x2+2=24)IS THE CORRECT ANSWER...SANDAR SESSION SIR 🙏🙏 THANK YOU SIR 🙏

👍 1 🗨️ REPLY

▶ [View reply from Mahendras : Online Videos For Govt. Exams](#)



Sania S 1 hour ago

24🔥🔥🔥

superb session sir 🙏🙏🙏

👍 🗨️ REPLY



sarita rawat 7 hours ago

Homework answer

Option (C) 24,,,,,hoga

Awesome session sir 🙌👍🙏🙏

Thanku so much sir 🙏

👍 1 🗨️ REPLY

▶ [View reply from Mahendras : Online Videos For Govt. Exams](#)



Arju praween 7 hours ago

Ans - 24

thank you so much sir very nice session

👍 1 🗨️ REPLY



The PUBLIC TAK 10 minutes ago

super session sir g

right answer is 24. sorry for wrong answer for yesterday
mai aaj bhi 8:30 pe class leta hu

👍 🗨️ REPLY



Manidipa Mandal 7 hours ago

Option (C) 24.

61x2= 122+2=124.

11x2=22+2=24.

Thank you sir.....Nice session sir ... 🙏🙏🙏

👍 1 🗨️ REPLY

▶ [View reply from Mahendras : Online Videos For Govt. Exams](#)



Masum Idki 😊 5 hours ago

11*2=22+2=24👍👍

👍 🗨️ REPLY

▶ [View reply from Mahendras : Online Videos For Govt. Exams](#)



Susmita Manna 7 hours ago

Homework ans 24

Thank you so much sir

👍 1 🗨️ REPLY


▶ [View reply from Mahendras : Online Videos For Govt. Exams](#)



Jayshree Singh 7 hours ago


11*2+2=24 👍👍👍👍

👍 1 🗨️ REPLY

 **barbie dancer** 7 hours ago
Ossmmmm ❤️ session sir


👍 1 🗨️ REPLY

▶ [View reply from Mahendras : Online Videos For Govt.](#)

 **Abhi Vaghela** 6 hours ago
24 ❤️🔥🔥🔥
Nice session ❤️🙏🙏


👍 1 🗨️ REPLY

▶ [View reply from Mahendras : Online Videos For Govt.](#)

 **Shobha Negi** 4 hours ago
Option C is the right answer of today's session
Nice session sir 🙏

👍 🗨️ REPLY


▶ [View reply from Mahendras : Online Videos For Govt.](#)

 **Babli Kumari** 7 hours ago
24 is right answer 🙏🙏

Nice session sir 🙏🙏🙏🙏 Thank you 🙏🙏🙏🙏


👍 1 🗨️ REPLY

▶ [View reply from Mahendras : Online Videos For Govt.](#)


 **Juthika Das** 7 hours ago
Ans is=24
Thank u sir Nice session

👍 1 🗨️ REPLY

▶ [View reply from Mahendras : Online Videos For Govt.](#)

 **Kapil Bhagat** 7 hours ago
24

👍 1 🗨️ REPLY

 **QUARANTINED NOOB** 5 hours ago
(11 x 2 + 2) = 24 is the right answer sir...


👍 🗨️ REPLY

▶ [View reply from Mahendras : Online Vide](#)

 **Vardhman Daga** 7 hours ago
24


👍 1 🗨️ REPLY

▶ [View reply from Mahendras : Online Vide](#)

 **barbie dancer** 7 hours ago
24

👍 1 🗨️ REPLY

▶ [View reply from Mahendras : Online Vide](#)


 **Sunny Gupta** 7 hours ago
24

👍 1 🗨️ REPLY

▶ [View reply from Mahendras : Online Vide](#)


 **Anushka Mishra** 28 minutes ago
24

👍 🗨️ REPLY

 **Roshni Khandelwal** 3 hours ago
24 is correct Answer
Very nice session sir thank you


👍 🗨️ REPLY

▶ [View reply from Mahendras : Online](#)

 **Sagar shakya.** 😄 7 hours ago
Badhiya class maza a gaya


👍 1 🗨️ REPLY

▶ [View reply from Mahendras : Online](#)

 **bablu sharma** 3 hours ago
24


👍 🗨️ REPLY

▶ [View reply from Mahendras : Online](#)


 **Priyanka Dixit** 5 hours ago
24

👍 🗨️ REPLY

▶ [View reply from Mahendras : Online](#)

 **vaibhav sahu** 5 minutes ago
24 is right 🙏🙏🙏🙏🙏 thanq sir

👍 🗨️ REPLY

 **Prakash Kumar** 6 hours ago
Nice question and trick🙏

👍 1 🗨️ REPLY



nikita Chauhan 1 hour ago
Homework ANS option CCC
24

REPLY



Reelaxmi Bhardwaj 7 hours ago
24ans thanks sir

1 REPLY

[View reply from Mahendras : Online](#)



Preeti 2 hours ago
24 is right answer

REPLY



Subhaja Pahari 8 minutes ago
ans - 24

REPLY



Abhishek Pandey 6 hours ago
Answer is 24

1 REPLY

[View reply from Mahendras : Online](#)



SAPANA WAKODE 7 hours ago
Ans.....24

1 REPLY

[View reply from Mahendras : Online](#)

Find the option which should replace (?)

$$16 : 124 :: 11 : ?$$



- (A) 88
- (B) 86
- (C) 24
- (D) 22

Find number of triangle in given figure ?

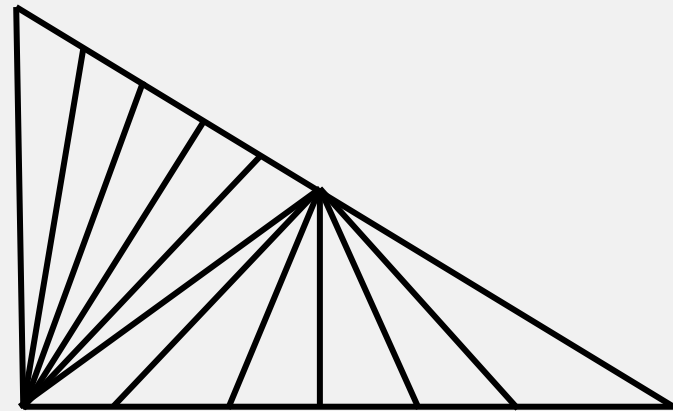
त्रिभुज की संख्या ज्ञात कीजिये?

(A) 32

(B) 27

(C) 41

(D) 37



ARITHMETIC

REASONING

REASONING

***WITHOUT PEN AND PAPER
MARKS CONFIRM IN EXAM***

The total of the ages of Amar, Akbar and Anthony is 80 years.

What was the total of their ages three years ago ?

अमर, अकबर और एंथोनी की कुल आयु 80 वर्ष है। तीन वर्ष पूर्व उनकी आयु का योग कितना था?

A.71 years

B.72 years

C.74 years

D.77 years



If you write down all the numbers from 1 to 100, then how many times do you write 3 ?

यदि आप 1 से 100 तक की सभी संख्याएँ लिख दें, तो आप 3 को कितनी बार लिखेंगे?

- A.11
- B.18
- C.20
- D.21



The total number of digits used in numbering the pages of a book having 366 pages is

366 पृष्ठों वाली एक पुस्तक के पृष्ठों को क्रमांकित करने में प्रयुक्त अंकों की कुल संख्या है

- A.732
- B.990
- C.1098
- D.1305



We have 16 columns and 18 rows of students in a playground and distance between the two students is 1.5metres. The length of the row of students is

हमारे पास एक खेल के मैदान में छात्रों के 16 स्तंभ और 18 पंक्तियां हैं और दो छात्रों के बीच की दूरी 1.5 मीटर है। छात्रों की पंक्ति की लंबाई है-

(A) 20.5 m

(B) 22.5 m

(C) 22 m

(D) 25.5 m



What is the product of all the numbers in the dial of a telephone ?

एक टेलीफोन के डायल में सभी नंबरों का गुणनफल क्या होता है?

A.1,58,480

B.1,59,450

C.1,59,480

D.None of these



A school has 2100 students. For every 20 students there is one class monitor. The number of monitors in the school is

एक स्कूल में 2100 छात्र हैं। प्रत्येक 20 छात्रों के लिए एक कक्षा का मॉनीटर होता है। स्कूल में मॉनीटर की संख्या क्या है-

(A) 100

(C) 80

(B) 75

(D) 85



In an examination, a student scores 4 marks for every correct answer and loses 1 mark for every wrong answer. If he attempts in all 60 question and secures 130 marks, the number of question he attempts correctly, is

एक परीक्षा में, एक छात्र प्रत्येक सही उत्तर के लिए 4 अंक स्कोर करता है और हर गलत उत्तर के लिए 1 अंक खो देता है। यदि वह सभी 60 प्रश्नों में प्रयास करता है और 130 अंकों को सुरक्षित करता है, तो उस के सही प्रश्नों की संख्या क्या होगी-

(A) 35

(C) 40

(B) 38

(D) 42



Anuj is 5 years older to Barkha and 7 years younger to Chandan, while Barkha and Dheeraj are twins. How many years older is Chandan to Dheeraj ?

अनुज बरखा से 5 साल बड़ा है और चंदन से 7 साल छोटा हैं, जबकि बरखा और धीरज जुड़वा हैं। चंदन से धीरज कितने साल बड़ा हैं?

(A) 10

(B) 18

(C) 14

(D) 12



There are deer and peacocks in a zoo. By counting heads they are 80. The number of their legs is 200. How many peacocks are there ?

एक चिड़ियाघर में हिरण और मोर होते हैं। सिर गिनने पर वे 80 होते हैं। उनके पैरों की संख्या 200 होती है। कितने मोर हैं?

- A.20 B.30
C.50 D.60

