



# SSC MTS 2022-23



**REASONING**

**SESSION-I**

**LIVE TEST**

**WITH TIMER**



**BASED ON PREVIOUS YEAR QUESTIONS**

**📶 LIVE | 03:00 PM**

**BY KULDEEP MAHENDRAS**





# UPCOMING ONLINE BATCHES

## February 2023

**08 FEB 2023**

**03:00 PM to 05:00 PM**

**SSC ONLINE LIVE CLASS**

**BILINGUAL**

**15 FEB 2023**

**10:30 AM to 12:30 PM**

**BANK ONLINE LIVE CLASS**

**BILINGUAL**

**15 FEB 2023**

**06:30 PM to 08:30 PM**

**BANK ONLINE LIVE CLASS**

**English & Bengali**



[www.mahendras.org](http://www.mahendras.org) •  7052477777/7052577777



## 14.6 Computer Based Examination:

Part	Subject	Number of Questions/ Maximum Marks	Time Duration (For all four Parts)
<b>Session-I</b>			45 Minutes (60 Minutes for candidates eligible for scribes as per para 8)
I	Numerical and Mathematical Ability	20/60	
II	Reasoning Ability and Problem Solving	20/60	
<b>Session-II</b>			45 Minutes (60 Minutes for candidates eligible for scribes as per para 8)
I	General Awareness	25/75	
II	English Language and Comprehension	25/75	



# SSC MTS 2022-23

**LIVE** at 3:00 PM

	UR	OBC	SC	ST	EWS	TOTAL	ESM	OH	HH	VH	OTHERS
MTS AGE GROUP 18-25	4115	2505	1051	679	979	9329	979	104	131	119	58
MTS AGE GROUP 18-27	1085	723	358	216	283	2665	222	36	36	32	18
Havaldar in CBIC	201	143	106	29	50	529	53	8	7	0	6
Grand Total	5401	3371	1515	924	1312	12523	1254	148	174	151	82



Vishnu Gupta 1 day ago 10 subscribers

A is the right ans very super duper nice session sir Thank you sir 🙏❤️

👍 🗨️ Reply

📄 • 1 reply



Suruchi Jha 1 day ago

Hw answer option A nice session thankyou sir 🙏

👍 🗨️ Reply

📄 • 1 reply



Ravi Patel 1 day ago 5 subscribers

A 🌱

👍 1 🗨️ Reply

📄 • 1 reply



Surbhi Sinha 1 day ago 4 subscribers

Homework question answer 🙏 option AAÀA

👍 🗨️ Reply

📄 • 1 reply



Zikra Yasmeen 1 day ago

Option A

👍 🗨️ Reply

📄 • 1 reply



SK6 18 hours ago 13 subscribers

$\sqrt{144} - 4 = 8$

👍 1 🗨️ Reply

• LIVE at 3:00 PM



**SSC MTS 2022-23**

**LIVE at 3:00 PM**

**Find the MISSING (?)**

**169 : 10 :: 144 : ?**



**1. 8**

**2. 12**

**3. 18**

**4. 6**



**Find the missing term(?)**

**6 : 27 :: 10 : ?**



- (A) 115**
- (B) 145**
- (C) 105**
- (D) 125**



**Find the missing term(?)**

$$832 : 48 :: 962 : ?$$



- (A) 50**
- (B) 96**
- (C) 120**
- (D) 108**





Find the missing :-



- 1. 9
- 2. 6
- 3. 3
- 4. 7

3	1	4
5	4	7
2	8	?
38	81	74




# SSC MTS 2022-23

**LIVE** at 3:00 PM

Find the number of triangles in the given figure.  
दिए गए आंकड़े में त्रिकोणों की संख्या ज्ञात कीजिए।

- A.16
- B.14
- C.19
- D.21





Find the missing :-

1. 380
2. 405
3. 320
4. 430

12	8	9
3	4	5
432	256	?





**SSC MTS 2022-23**

**LIVE at 3:00 PM**

**Find the option which should replace (?)**

$$P = - \quad Q = *$$

$$R = \div \quad S = +$$



$$15 \ Q \ 3 \ P \ 25 \ R \ 5 \ S \ 8 = ?$$

**A. 40**

**B. 48**

**C. 52**

**D. 46**



**Find the missing :-**

- 1. 110**
- 2. 120**
- 3. 130**
- 4. 140**

<b>21</b>	<b>56</b>	<b>70</b>
<b>45</b>	<b>87</b>	<b>84</b>
<b>115</b>	<b>180</b>	<b>?</b>





**Find the missing :-**

**Ramanujan : Mathematician :: Charak : ?**  
**रामानुजनः गणितज्ञ :: चरकः?**



- 1. Scientist / वैज्ञानिक**
- 2. Architect / वास्तुकार**
- 3. Physician / चिकित्सक**
- 4. Astronomer / खगोलविद**

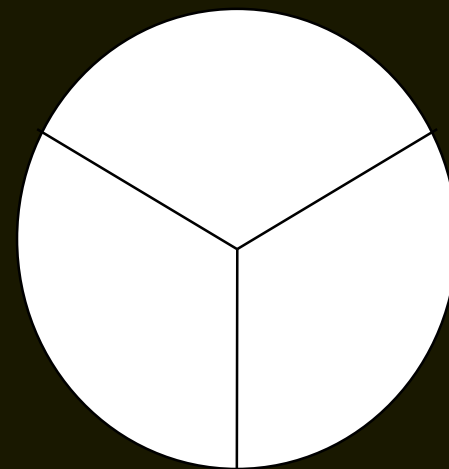
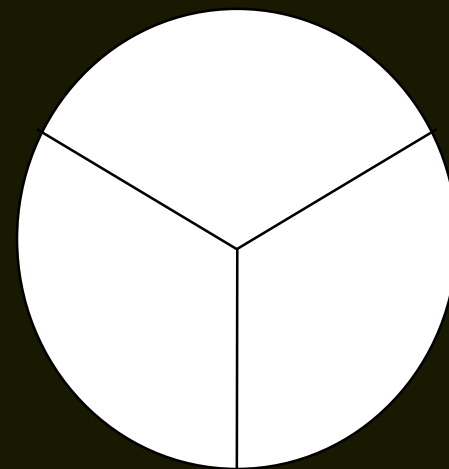
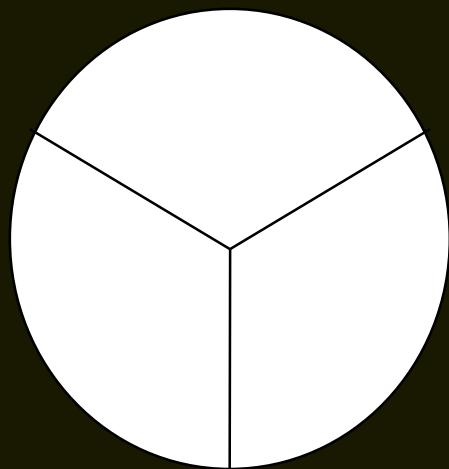


# SSC MTS 2022-23

**LIVE** at 3:00 PM

Find the missing :-

- 1. S
- 2. T
- 3. W
- 4. Z





# SSC MTS 2022-23

**LIVE** at 3:00 PM

Find the missing :-

- 1. 108
- 2. 216
- 3. 144
- 4. 288

7	6	5
2	3	3
98	?	75







**Find the missing (?)**



**a\_b\_aad\_ca\_dbc\_adb\_a**

- 1. dcabca**
- 2. dbcaca**
- 3. dcbaac**
- 4. dcabac**



**SSC MTS 2022-23**

**LIVE at 3:00 PM**

**Find the missing (?)**



**96 : 54 :: 89 : ?**

1. 76
2. 72
3. 67
4. 64



Find the missing (?)



- 1. 53
- 2. 54
- 3. 55
- 4. 56

7	8	9
24	?	45
5	3	6



**SSC MTS 2022-23**

**LIVE at 3:00 PM**

**How many leap year does 400 years have ?**

**400 साल कितने लीप वर्ष होते हैं?**

- a) 98
- b) 100
- c) 97
- d) 94





**Find the option which should replace (?)**

**11, 13, 17, 23, 31, 41, 53, 67, 83, ?**

**(A) 101**

**(B) 97**

**(C) 110**

**(D) 100**

