

SSC GD 2021



REASONING

25 कदम
Exam की ओर.....

Complete
MOCK TEST

25/25

LIVE  **8:30 PM**





Don't Let Your Studies Get Impacted By COVID-19 Pandemic

Stay Home & Study Online With Mahendras Hybrid Model

Features

- Offline Classes ↔ Live Interactive Online Classes
- Same Faculty
- Same Batch
- Same Batch Timing
- Online Library Facility
- Recorded Video
- PDFs
- Classes In Both Model

CONTACT US:

1800-103-5225

www.mahendras.org





UPCOMING ONLINE BATCHES

November 2021

03 Nov 2021

10:30 AM to 12:30 PM

LIVE PREMIUM GREEN CARD
(BANK-PO & CLERK)

01:00 PM to 03:00 PM

LIVE PREMIUM GREEN CARD
(BANK-PO & CLERK)

05:30 PM to 07:30 PM

LIVE PREMIUM SILVER CARD
(SSC CGL & CHSL)

BILINGUAL

10 Nov 2021

03:00 PM to 05:00 PM

LIVE PREMIUM GREEN CARD
(BANK-PO & CLERK)

08:00 AM to 10:00 AM

LIVE PREMIUM SILVER CARD
(SSC CGL & CHSL)

BILINGUAL

17 Nov 2021

08:00 AM to 10:00 AM

LIVE PREMIUM GREEN CARD
(BANK-PO & CLERK)

05:30 PM to 07:30 PM

LIVE PREMIUM GREEN CARD
(BANK-PO & CLERK)

10:30 AM to 12:30 PM

LIVE PREMIUM SILVER CARD
(SSC CGL & CHSL)

BILINGUAL

24 Nov 2021

10:30 AM to 12:30 PM

LIVE PREMIUM GREEN CARD
(BANK-PO & CLERK)

07:30 PM to 09:30 PM

LIVE PREMIUM GREEN CARD
(BANK-PO & CLERK)

03:00 PM to 05:00 PM

LIVE PREMIUM SILVER CARD
(SSC CGL & CHSL)

BILINGUAL





Chhavi Saxena 1 day ago

Home work answer is option C

Very nice session sir Thank you so much 🙏🙏🙏🙏🙏

👍 1 🗨️ REPLY

▶ [View reply from Mahendras : Online Videos For Govt. Exams](#)



🌸 PUJA KUNDU 🌸 1 day ago

ANS-8(4÷2=2..4×2)....AMAZING SESSION SIR AND THANK YOU FOR THE SESSION 🙏

👍 1 🗨️ REPLY

▶ [View reply from Mahendras : Online Videos For Govt. Exams](#)



Manidipa Mandal 1 day ago

Answer - Option (C)...8.

Thank you sir..... nice session sir 🙏🙏🙏🙏

👍 1 🗨️ REPLY

▶ [View reply from Mahendras : Online Videos For Govt. Exams](#)



SANIA ____ 1 day ago

shaandaar session sir 🙏🙏🙏🙏

8👍👍👍👍👍

👍 🗨️ REPLY



Radha Garima 1 day ago

Answer : 8

Nice session sir 🙏😊

👍 1 🗨️ REPLY

▶ [View reply from Mahendras : Online Videos For Govt. Exams](#)



Itu Soren 1 day ago

Ans:- 8

Very Nice Session Sir 😊🙏

👍 🗨️ REPLY



Roshni Khandelwal 1 day ago

Answer is 8

Very nice session sir thank you

👍 🗨️ REPLY



arun ch mandal 1 day ago


8

nice session sir

thank you sir

👍 1 🗨️ REPLY

▶ [View reply from Mahendras : Online Videos For Govt. Exams](#)



Ankit Vish 1 day ago

Answer. 8

Very nice session sir 🙏🙏

👍 2 🗨️ REPLY

▶ [View reply from Mahendras : Online Videos For Govt. Exams](#)



Toptak study 1 day ago

(C) 8 .. Thank you sir jiiiiiii

👍 1 🗨️ REPLY



Toptak study 1 day ago

(C) 8 .. Thank you sir jiiiiiii

👍 1 🗨️ REPLY



Heta shah 1 day ago

ANS==8 NICE SESSION SIR
AAJ LIVE NHI AA PAYI RECORDED DEKHNA PDA

👍 1 🗨️ REPLY

▶️ [View reply from Mahendras : Online Videos For Govt. Exam.](#)



puspranjan singh 1 day ago

Good class es Sir

👍 1 🗨️ REPLY



future YT's 1 day ago

8 is the correct answer 😊😄

👍 1 🗨️ REPLY

▶️ [View reply from Mahendras : Online Videos For Govt. Exam.](#)



Shruti Jain 1 day ago

888

👍 🗨️ REPLY



Kapil Bhagat 1 day ago

888

👍 🗨️ REPLY



Vikash Gupta 1 day ago

B

👍 1 🗨️ REPLY

▶️ [View reply from Mahendras : Or](#)



MAHESHRAI UNIQUE 1 day ago

8

👍 1 🗨️ REPLY

▶️ [View reply from Mahendras : Online Videos For Go](#)



puspranjan singh 1 day ago

8

👍 1 🗨️ REPLY

▶️ [View reply from Mahendras : Online Videos For Go](#)



Preeti 1 day ago

8

👍 1 🗨️ REPLY

▶️ [View reply from Mahendras : Online Videos For Go](#)



Hrithik_____ 1 day ago

8

👍 1 🗨️ REPLY

▶️ [View reply from Mahendras : Online Videos For Go](#)



#sandhya sinha 1 day ago

40

👍 🗨️ REPLY

Find the option which should replace (?)

$$6 : 18 :: 4 : ?$$

- (A) 23
- (B) 25
- (C) 8
- (D) 10



Find the option which should replace (?)

4 , 7 , 15 , 31 , 35 , 19 , 11 , ?

- (A) 8**
- (B) 6**
- (C) 4**
- (D) None of these**



Q- What is the angle between the minute hand and the hour hand of a clock when the time is 10:30?

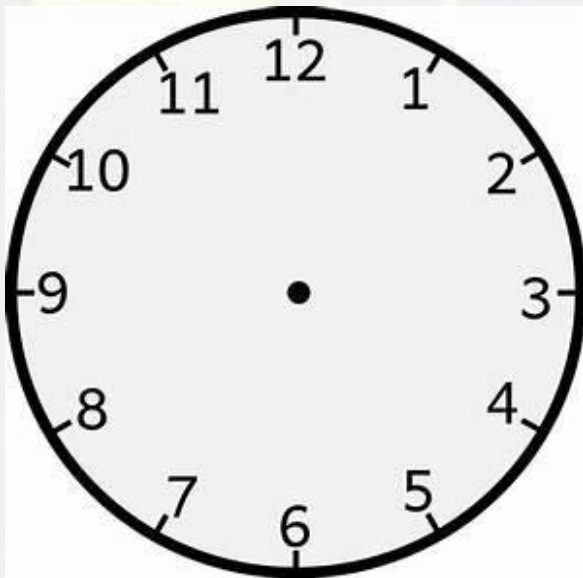
Q- समय 10:30 पर मिनट और घड़ी के घंटे के बीच का कोण क्या होगा ?

(1) 150°

(2) 135°

(3) 120°

(4) None of these



10	9	13
9	7	9
5	9	10
55	72	?



- (A) 90
- (B) 94
- (C) 108
- (D) 103

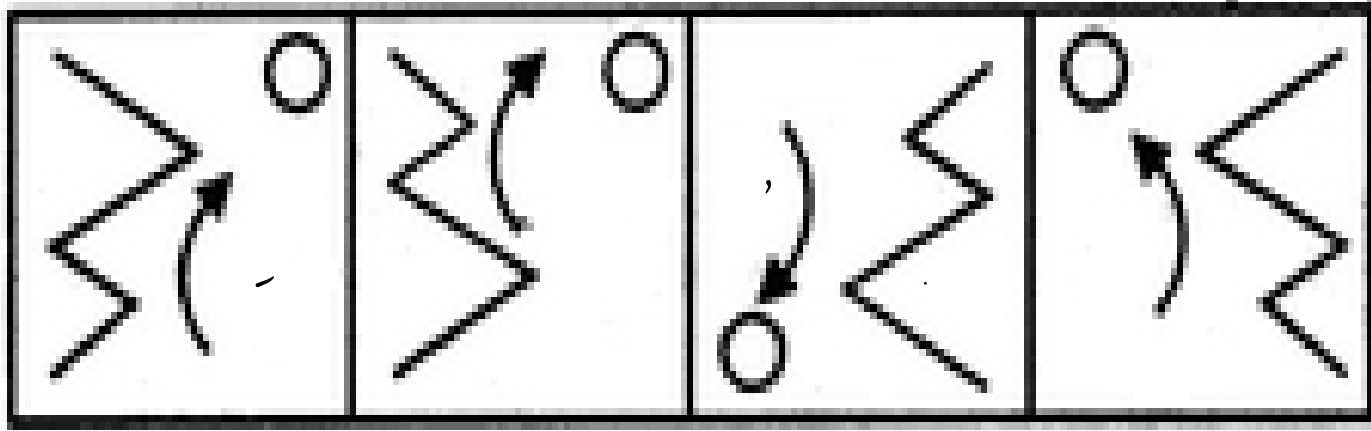

In a Certain code **MOTHER** is written as **TOMREH** ,than find the code for **NEPHEW** ?

एक निश्चित कोड में **MOTHER** का कोड **TOMREH** लिखा गया है , तो **NEPHEW** का कोड क्या होगा ?

- (1) ENHPWE
- (2) PENWEH
- (3) WEHPEN
- (4) WEHPNE



Choose the correct mirror image of the given figure (X) from amongst the four alternatives.



(1)

(2)

(3)

(4)



(X)

A.1

B.2

C.3

D.4

Find the missing term(?)



January : December :: Monday : ?

- (A) Wednesday**
- (B) Sunday**
- (C) Monday**
- (D) Saturday**

Find the odd one (?)

- (A) GJ - 24
- (B) AF - 120
- (C) MQ - 60
- (D) BH - 120



Statements : -

- Some lions are tigers./ कुछ शेर बाघ हैं।
No jaguar is lion./ कोई जगुआर शेर नहीं है।
Some leopards are lions./ कुछ तेंदुए शेर हैं।

**Conclusion :-**

- No lion is Jaguar./ कोई भी शेर जगुआर नहीं है।
All tiger being leopard is a possibility./ सभी बाघ तेंदुआ होने की संभावना है।
Some leopard are not jaguar./ कुछ तेंदुए जगुआर नहीं हैं।

Two women and two men are playing ludo and are seated at north , South , East and West direction . No man is facing east . Persons sitting opposite to each other are not of the same sex . One woman is facing south . Which direction are the man facing ?

दो महिलाएं और दो पुरुष लूडो खेल रहे हैं और उत्तर, दक्षिण, पूर्व और पश्चिम दिशा में बैठे हैं। कोई भी आदमी पूर्व की ओर मुंह नहीं कर रहा है। एक दूसरे के विपरीत बैठे व्यक्ति एक ही लिंग के नहीं होते हैं। एक महिला दक्षिण का सामना कर रही है। आदमी किस दिशा का सामना कर रहा है?

1. East and West
2. North and West
3. North and South
4. South and East



Find the missing term(?)

BCJ / O : AFK / R : CDE / L : ?

- (A) DEF / P**
- (B) DEF / M**
- (C) TAC / X**
- (D) CET / E**



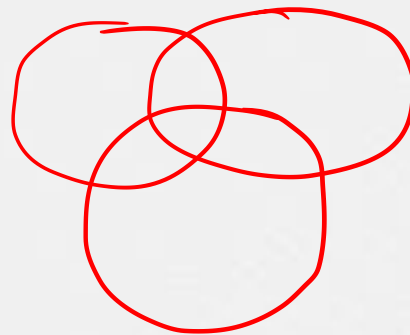
Find the missing term(?)

_ X X _ Y _ X Y Y X _ Y

- (A) YYXY
- (B) YXYX
- (C) XYYX
- (D) YYXX



Which of the following diagrams indicates the best relation between **life, Death and Time** / जीवन, मृत्यु और समय



A.

B

.C

.D.

Find the option which should replace (?)

(12 , 67 , 122) :: ?

(A) 15 , 77 , 139

(B) 7 , 24 , 73

(C) 13 , 40 , 118

(D) 9 , 28 , 83



Arrange the words given below in a meaningful sequence.

1. Work in progress / **कार्य प्रगति पर**
2. Profit / **लाभ**
3. Raw Material / **कच्चा माल**
4. Sale / **बिक्री**
5. Commodity / **कमोडिटी**



- A. 3, 1, 5, 4, 2
- B. 2, 4, 3, 1, 5
- C. 1, 3, 2, 4, 5
- D. 4, 3, 1, 5, 2

Find the missing :-

Sack : Jute :: Prism : ?
बोरी : जूट :: प्रिज्म : ?

1. Wood / लकड़ी
2. Glass / कांच
3. Gold / सोना
4. Metal / धातु



Find the missing :-

$$12 : 84 :: 24 : ?$$

1. 312
2. 315
3. 268
4. 270



Find the missing :-

7 : 559 :: ? : ?

1. 11 : 786
2. 9 : 593
3. 3 : 35
4. 5 : 89



Find the missing :-

Ship : Ship Fleet :: ? : ?

जहाज : जहाज बेड़े :: ? : ?

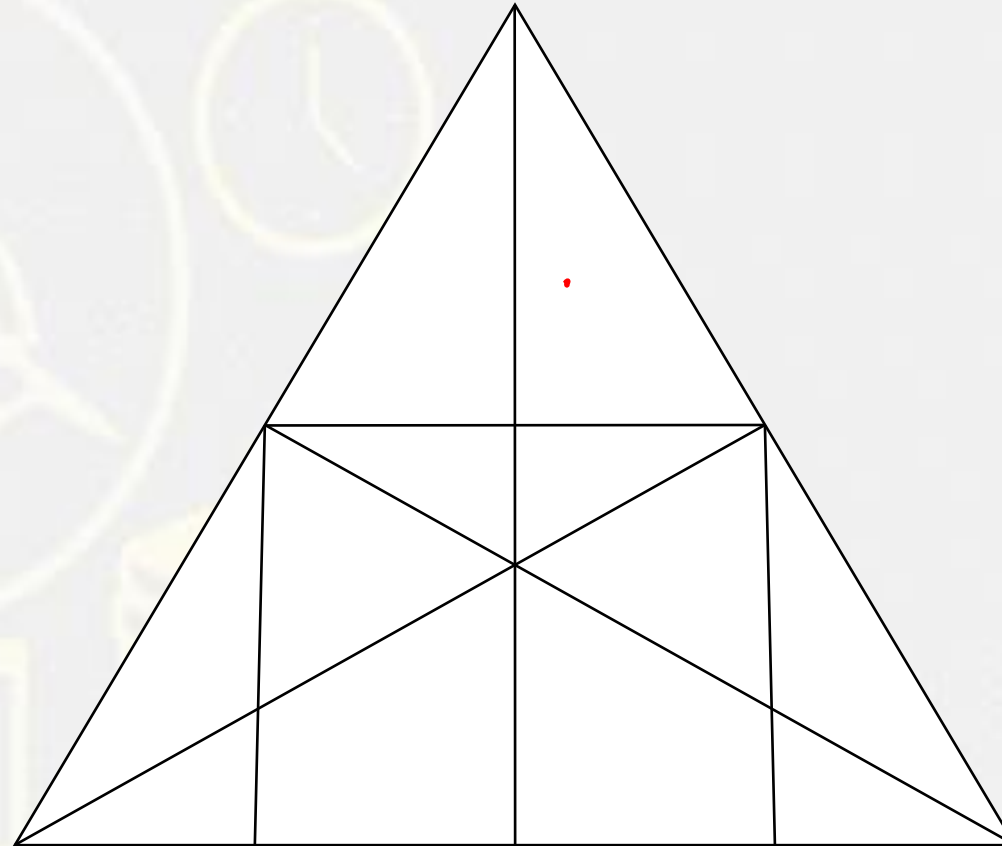
1. Nomad : Crowd / घुमक्कड़ : भीड़
2. Hyena : Herd / हाइना : झुंड
3. Scholar : Gang / विद्वान : गिरोह
4. Singers : Band / गायक : बैंड



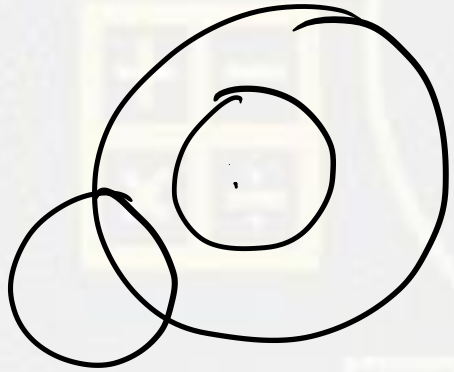
Find the number of STRAIGHT LINE (?)



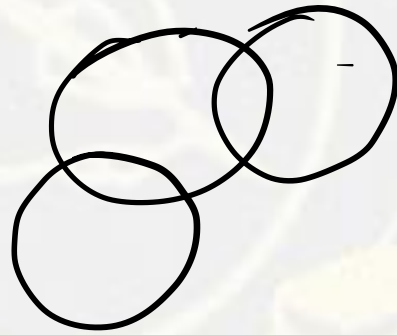
- (A) 9
- (B) 10
- (C) 11
- (D) 12



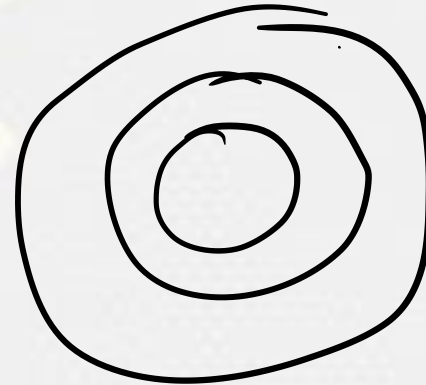
Home wall , Pink , Red / घर की दीवार, गुलाबी, लाल



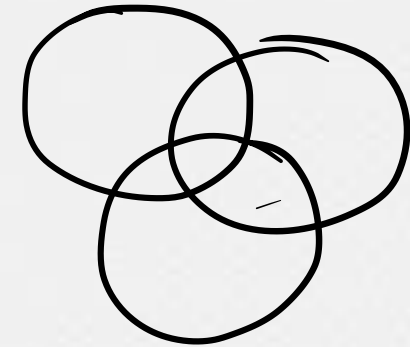
(A)



(B)



(C)



(D)