

# RRB NTPC CBT 2/GROUP D



## REASONING

अबकी बार **RAILWAY** पार

Complete Revision



LIVE 7:30 PM





# Don't Let Your Studies Get Impacted By COVID-19 Pandemic

Stay Home & Study Online With Mahendras Hybrid Model

## Features



Offline Classes



Live Interactive Online Classes



Same Faculty



Same Batch



Same Batch Timing



Online Library Facility



Recorded Video



PDFs



Classes In Both Model

CONTACT US:

1800-103-5225

[www.mahendras.org](http://www.mahendras.org)





# UPCOMING ONLINE BATCHES

## December 2021

01 Dec 2021

08:00 AM to 10:00 AM

**LIVE PREMIUM GREEN CARD**  
(BANK-PO & CLERK)

05:30 PM to 07:30 PM

**LIVE PREMIUM GREEN CARD**  
(BANK-PO & CLERK)

01:00 PM to 03:00 PM

**LIVE PREMIUM SILVER CARD**  
(SSC CGL & CHSL)

**BILINGUAL**

08 Dec 2021

10:30 AM to 12:30 PM

**LIVE PREMIUM GREEN CARD**  
(BANK-PO & CLERK)

03:00 PM to 05:00 PM

**LIVE PREMIUM GREEN CARD**  
(BANK-PO & CLERK)

08:00 AM to 10:00 AM

**LIVE PREMIUM SILVER CARD**  
(SSC CGL & CHSL)

**BILINGUAL**

15 Dec 2021

01:00 PM to 03:00 PM

**LIVE PREMIUM GREEN CARD**  
(BANK-PO & CLERK)

10:30 AM to 12:30 PM

**LIVE PREMIUM SILVER CARD**  
(SSC CGL & CHSL)

**BILINGUAL**

22 Dec 2021

08:00 AM to 10:00 AM

**LIVE PREMIUM GREEN CARD**  
(BANK-PO & CLERK)

07:30 PM to 09:30 PM

**LIVE PREMIUM SILVER CARD**  
(SSC CGL & CHSL)

**BILINGUAL**

29 Dec 2021

10:30 AM to 12:30 PM

**LIVE PREMIUM GREEN CARD**  
(BANK-PO & CLERK)

07:30 PM to 09:30 PM

**LIVE PREMIUM GREEN CARD**  
(BANK-PO & CLERK)

03:00 PM to 05:00 PM

**LIVE PREMIUM SILVER CARD**  
(SSC CGL & CHSL)

**BILINGUAL**



# RRB NTPC Stage-2 Exam Pattern

Sections	No. of Questions	Total Marks	Duration
Mathematics	35	35	90 minutes
General Intelligence and Reasoning	35	35	
General Awareness	50	50	
<b>Total</b>	<b>120</b>	<b>120</b>	



Radha Garima 18 hours ago

Answer : Stomach

Nice session sir 🙏😊

👍 1 🗨️ REPLY

➤ [View reply from Mahendras : Online Videos For Govt. Exams](#)



SANIA \_\_\_\_\_ 10 hours ago

nice session sir 🙏🙏

stomach 🔥🔥

👍 1 🗨️ REPLY

➤ [View reply from Mahendras : Online Videos For Govt. Exams](#)



🌸 PUJA KUNDU 🌸 18 hours ago

STOMACH (7 alphabets ))).....SUPERB SESSION SIR AND THANK YOU 🙏

👍 1 🗨️ REPLY

➤ [View reply from Mahendras : Online Videos For Govt. Exams](#)



Chhavi Saxena 18 hours ago

Home work answer is Stomach 🙏🙏

👍 1 🗨️ REPLY

➤ [View reply from Mahendras : Online Videos For Govt. Exams](#)



**Sonu Pal** 18 hours ago

3,4,5,6,7,8

2 [REPLY](#)



**RANJU KUMARI** 2 hours ago

Ans\_\_\_\_\_STOMACH

[REPLY](#)



**Tilak Ram** 7 hours ago

Good morning sir

[REPLY](#)



**DEEKSHA SHARMA** 18 hours ago

Home work answer is Stomach

1 [REPLY](#)

[View reply from Mahendras : Online Videos For Govt. Exams](#)



**puspranjan singh** 18 hours ago

34568

1 [REPLY](#)



**Kapil Bhagat** 18 hours ago

AAA 34567

[REPLY](#)

Find the option which should replace (?)

**Leg , Nose , Brain , Finger , ?**



- (A) Shoulder**
- (B) Hand**
- (C) Stomach**
- (D) Mouth**

Find the missing :-

Ship : Ship Fleet :: ? : ?

जहाज : जहाज बेड़े :: ? : ?

1. Nomad : Crowd / घुमक्कड़ : भीड़
2. Hyena : Herd / हाइना : झुंड
3. Scholar : Gang / विद्वान : गिरोह
4. Singers : Band / गायक : बैंड





**Find the odd one (?)**

- (A) CDC**
- (B) ABE**
- (C) BAE**
- (D) GBI**

20

Find the option which should replace (?)

$$94 + 16 = 42$$

$$89 + 23 = 78$$

$$63 + 45 = ?$$

(A) 18

(B) 28

(C) 38

(D) 48



Find the option which should replace (?)

**DHLP : BDFH**

**FLRX :: ?**

- (A) FHLK**
- (B) CFIL**
- (C) KHPL**
- (D) DHMK**



Find the option which should replace (?)

**CDEF : EGJM**

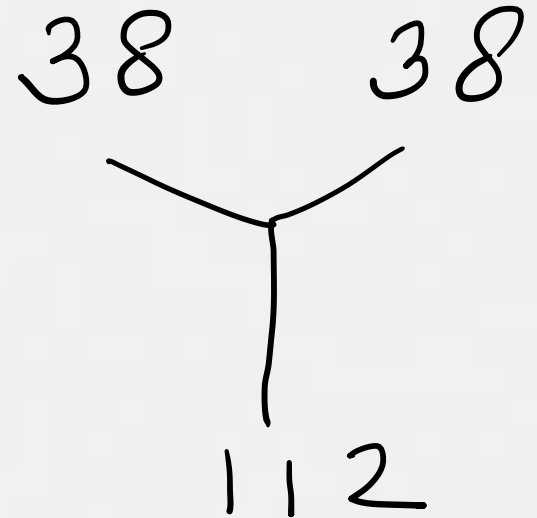
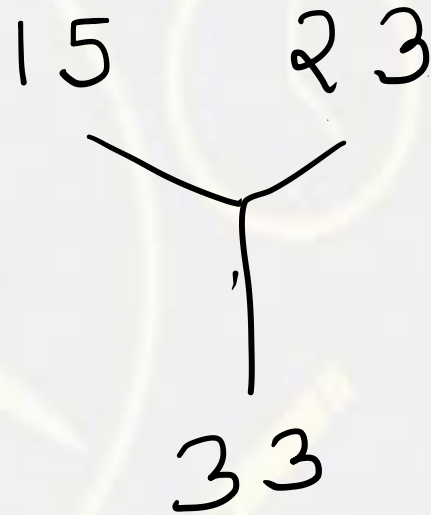
**PQRS :: ?**

- (A) RTUZ**
- (B) SUMK**
- (C) ADIL**
- (D) ALNP**



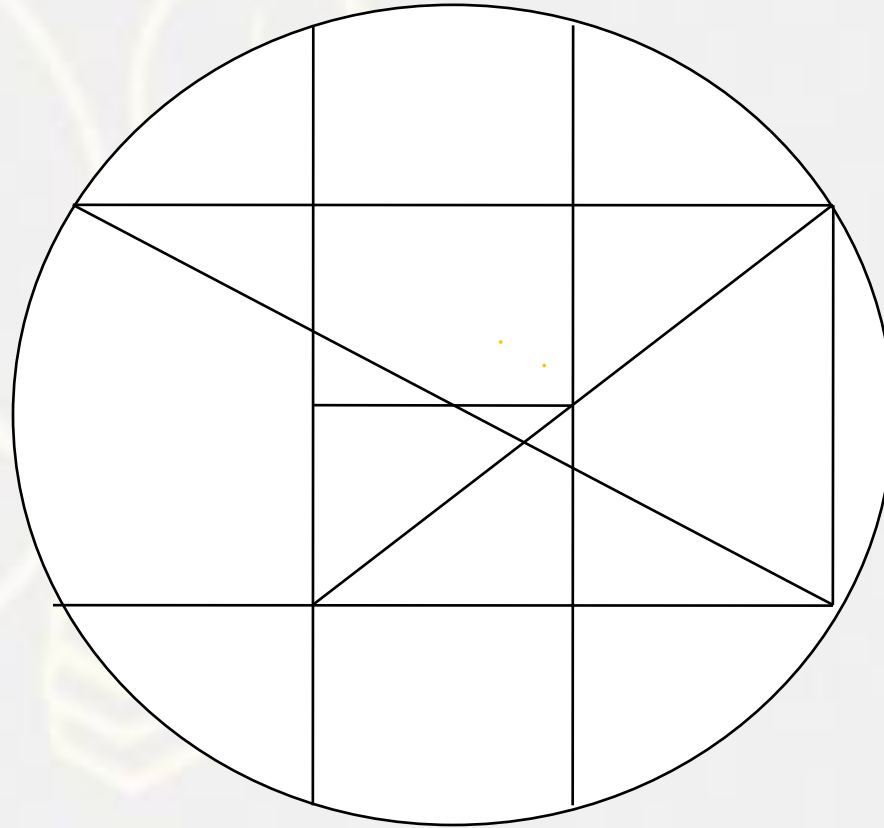
Find the option which should replace (?)

- (A) 98
- (B) 100
- (C) 132
- (D) 2560



**Find the number of square (?)**

- (A) 5**
- (B) 2**
- (C) 3**
- (D) 1**



Find the option which should replace (?)

**8 : 8 , 10**

**5 : 8 , 7**

**4 : ? , ?**

**(A) 10 , 7**

**(B) 7 , 10**

**(C) 5 , 12**

**(D) 12 , 5**



Find the option which should replace (?)

Breeze : Cyclone :: Drizzle

हवा : चक्रवात :: बूँदा बांदी

- (A) Flood / बाढ़
- (B) Dought / सूखा
- (C) Downpour / मूसलधार बारिश
- (D) Rain / वर्षा





**Find the odd one (?)**

- 1. Fog / कोहरा**
- 2. Cloud / बादल**
- 3. Rain / वर्षा**
- 4. Mist / धुंध**



Find the option which should replace (?)

$$6 * 3 = 13$$

$$5 * 20 = 96$$

$$19 * 11 = ?$$



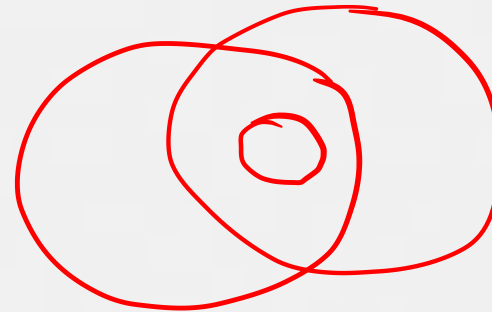
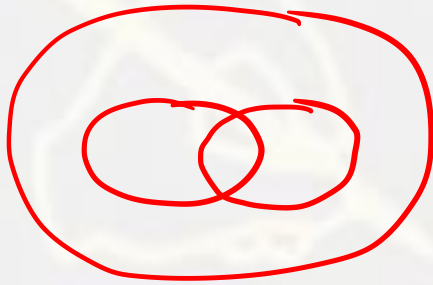

(A) 191

(B) 194

(C) 207

(D) 209

Which of the following diagrams indicates the best relation between  
(Criminal , Thief , Murderer) / (अपराधी, चोर, हत्यारा)



A.

B

.C

.D.



Find the missing term(?)

$$5 : 36 :: 11 : ?$$

- (A) 70
- (B) 77
- (C) 72
- (D) 80



Find the missing term(?)

$$16 : 240 :: 25 : ?$$

- (A) 625
- (B) 650
- (C) 675
- (D) 600



Find the missing term(?)

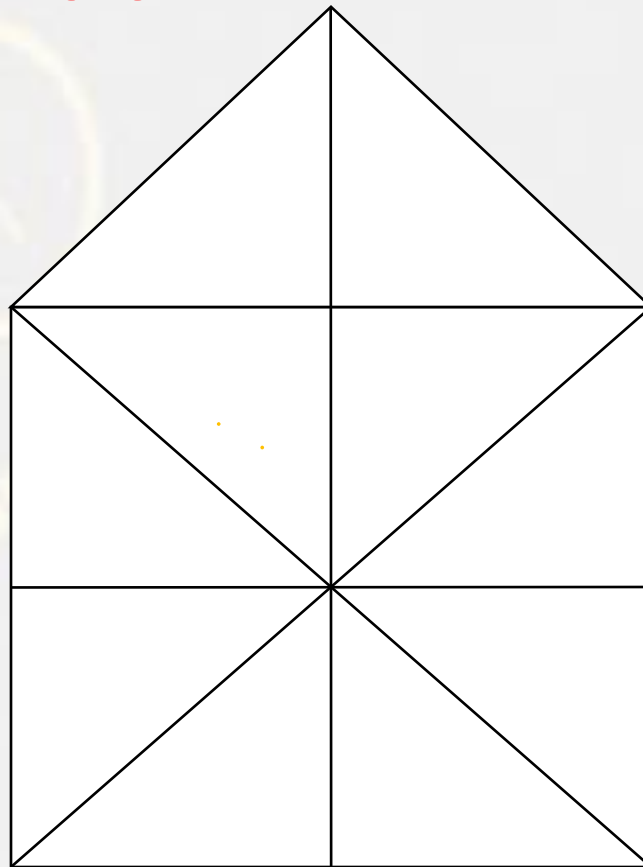
$$6 : 27 :: 10 : ?$$

- (A) 115
- (B) 145
- (C) 105
- (D) 125



**Find the number of triangle (?)**

- (A) 10**
- (B) 16**
- (C) 19**
- (D) 21**



There are 8 members in a friends group who greet each other on a Diwali day by sending cards . How many cards will be use for this purpose by this group ?

एक मित्र समूह में 8 सदस्य हैं जो एक-दूसरे को दिवाली के दिन कार्ड भेजकर बधाई देते हैं। इस समूह द्वारा इस उद्देश्य के लिए कितने कार्ड का उपयोग किया जाएगा?

- (A) 50
- (B) 64
- (C) 56
- (D) 60

