



MISSION SSC 2023



CGL·CHSL·MTS·CPO

REASONING

**TOP 25 SSC (CGL+ MTS)
MOST EXPECTED
PREVIOUS YEAR QUESTIONS**

तैयारी SELECTION वाली

BY KULDEEP MAHENDRAS



(((•))) OLIVE | 05:30 PM

SSC MTS / CGL 2023

LIVE at 5:30 PM

Selection Examination, Phase-XI, 2023	Post	Paper-I (CBE)*	24/Feb/2023 (Friday)	17/Mar/2023 (Friday)	May-Jun, 2023
Combined Graduate Level Examination, 2023		Tier-I (CBE)*	01/Apr/2023 (Saturday)	01/May/2023 (Monday)	Jun-Jul, 2023
Combined Secondary Level Examination, 2023	Higher (10+2)	Tier-I (CBE)*	09/May/2023 (Tuesday)	08/Jun/2023 (Thursday)	Jul-Aug, 2023
Multi Tasking (Non-Technical) Staff, and Havaldar (CBIC & CBN) Examination-2023		Tier-I (CBE)*	14/Jun/2023 (Wednesday)	14/Jul/2023 (Friday)	Aug-Sep, 2023
Sub-Inspector in Delhi Police and Central Armed Police Forces Examination, 2023		Tier-I (CBE)*	20/Jul/2023 (Thursday)	13/Aug/2023 (Sunday)	Oct/2023
Junior Engineer (Civil, Mechanical, Electrical & Quantity Surveying & Contracts) Examination, 2023		Paper-I (CBE)*	26/Jul/2023 (Wednesday)	16/Aug/2023 (Wednesday)	Oct/2023
Stenographer Grade 'C' & 'D' Examination, 2023	Grade	CBE*	02/Aug/2023 (Wednesday)	23/Aug/2023 (Wednesday)	Oct-Nov, 2023



Find the missing one (?)

55 : 32 :: 76 : ?



- (A) 14**
- (B) 16**
- (C) 18**
- (D) 20**



Find the missing one (?)

14 : 9 :: 26 : ?

- (A) 12**
- (B) 13**
- (C) 15**
- (D) 31**






Find number of triangle in the given figure ?

दी गई आकृति में त्रिभुज की संख्या ज्ञात कीजिए?

- (A) 7
- (B) 9
- (C) 8
- (D) 11





SSC MTS / CGL 2023

LIVE at 5:30 PM

Find the odd one (?)

- (A) Bat / चमगादड़**
- (B) Owl / उल्लू**
- (C) Duck / बतख**
- (D) Ostrich / शुतुरमुर्ग**





Find the missing one (?)

$$8 : 81 :: 64 : ?$$



- (A) 125**
- (B) 137**
- (C) 525**
- (D) 625**



Find the missing one (?)

2573 : 31 :: 4629 : ?

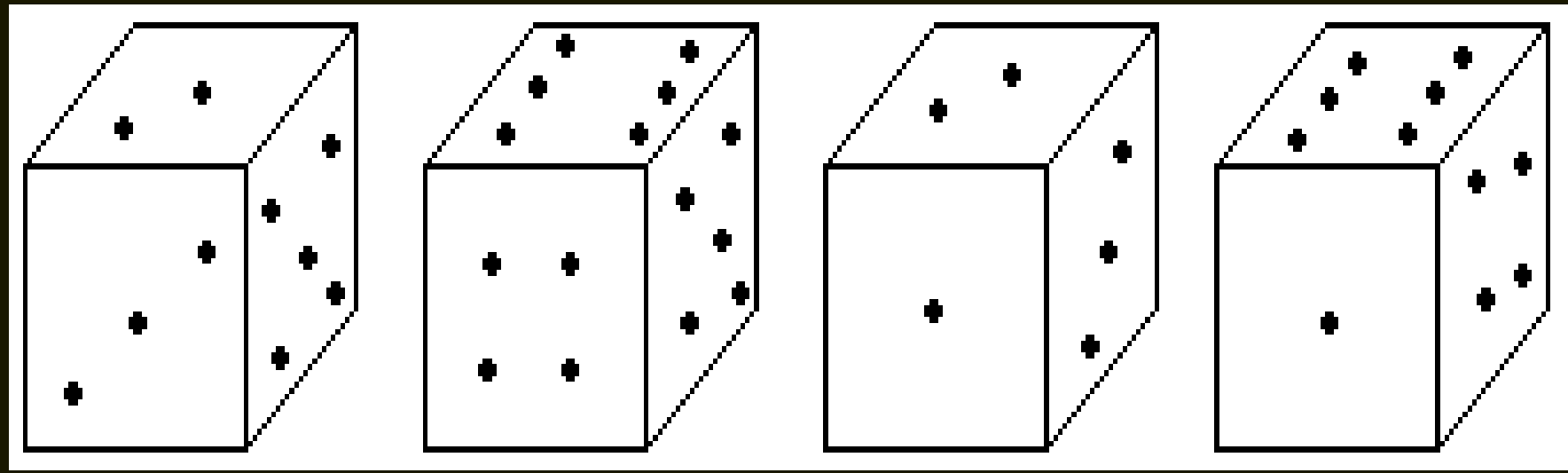


- (A) 40**
- (B) 42**
- (C) 44**
- (D) 46**



How many points will be on the face opposite to in face which contains 2 points?

2 बिंदुओं वाले फलक के विपरीत फलक पर कितने बिंदु होंगे?




- A.1
- B.6
- C.3
- D.4





Find the number of triangle (?)

- (A) 38**
- (B) 24**
- (C) 23**
- (D) 42**





Find the missing term(?)

6 , 18 , 66 , ? , 1026

(A) 276

(B) 274

(C) 288

(D) 258





Find the missing term(?)

Hitler : Germany :: ? : ?

हिटलर : जर्मनी :: ? : ?



- (A) Shakerpear : England / शेकरपियर: इंग्लैंड**
- (B) Mussolini : Italy / मुसोलिनी: इटली**
- (C) Boris Yeltsin : Russia / बोरिस येल्तसिन: रूस**
- (D) Tulsidas : India / तुलसीदास: भारत**



If today is Sunday then which day would be the 65th day after today ?

अगर आज रविवार है तो आज के 65 वें दिन कौन सा दिन होगा?

- (A) Monday**
- (B) Tuesday**
- (C) Wednesday**
- (D) Sunday**





Find the missing term(?)

28 : 14 :: 172 : ?

- (A) 11**
- (B) 13**
- (C) 15**
- (D) 14**





SSC MTS / CGL 2023

LIVE at 5:30 PM

Which number will replace the question mark ?

12	16	22
23	33	18
08	13	?



- (A) 40
- (C) 12

- (B) 04
- (D) 14



SSC MTS / CGL 2023

LIVE at 5:30 PM

Find the missing term(?)

Operation Blue Star : 1984 :: Bhopal gas Tragedy : ?

ऑपरेशन ब्लू स्टार : 1984 :: भोपाल गैस त्रासदी :
?

(A) 1992

(B) 1975

(C) 1984

(D) 1999





Statement :-

This world is neither good nor evil ; each man manufactures a world for himself.

Conclusion:-

Some people find this world quite good.

Some people find this world quite bad .



बयान :-

यह दुनिया न तो अच्छी है और न ही बुराई; प्रत्येक आदमी अपने लिए एक दुनिया बनाता है।

निष्कर्ष: -

कुछ लोगों को यह दुनिया काफी अच्छी लगती है।
कुछ लोगों को यह दुनिया काफी बुरी लगती है।



Find the missing term(?)

15 , 76 , 128 , 191 , ?



- (A) 242**
- (B) 283**
- (C) 285**
- (D) 286**