

SSC MTS/HAWALDAR/CHSL



REASONING

LIVE EXAM

तैयारी जीत की...

LIVE

08:30 PM





UPCOMING ONLINE BATCHES

May 2022

04 May 2022

05:30 PM to 07:30 PM

BANK ONLINE LIVE CLASS

10:30 AM to 12:30 PM

SSC ONLINE LIVE CLASS

BILINGUAL

11 May 2022

10:30 AM to 12:30 PM

BANK ONLINE LIVE CLASS

01:00 PM to 03:00 PM

SSC ONLINE LIVE CLASS

BILINGUAL

18 May 2022

07:30 PM to 09:30 PM

BANK ONLINE LIVE CLASS

05:30 PM to 07:30 PM

SSC ONLINE LIVE CLASS

BILINGUAL

04:00 PM to 06:00 PM

BANK ONLINE LIVE CLASS

ENGLISH & BENGALI

25 May 2022

03:00 PM to 05:00 PM

BANK ONLINE LIVE CLASS

08:00 AM to 10:00 AM

SSC ONLINE LIVE CLASS

BILINGUAL

05:30 PM to 09:30 PM

CUET ONLINE LIVE CLASS

BILINGUAL



www.mahendras.org



7052477777/7052577777



🌸 PUJA KUNDU 🌸 21 hours ago 8 subscribers

The answer is ———8or 10....thank you sir for the amazing session 🔥 🙏



REPLY



➤ [View reply from Mahendras : Online Videos For Govt. Exams](#)



Chhavi Saxena 21 hours ago

Home work answer is option C (both A and B)

Very Nice Session Sir Thank you so much 🙏 🙏 🙏 🙏



REPLY



➤ [View reply from Mahendras : Online Videos For Govt. Exams](#)



Radha Garima 20 hours ago 1 subscribers

Answer: C

Nice session sir 🙏 🙏



REPLY



➤ [View reply from Mahendras : Online Videos For Govt. Exams](#)



Vishnu Gupta 20 hours ago 3 subscribers

8or10 is the right ans very super nice session sir Thank you 🙏 sir love you 😊 sir



REPLY



➤ [View reply from Mahendras : Online Videos For Govt. Exams](#)



arun ch mandal 18 hours ago

OPT C BOTH A & B

THANK YOU SIR



REPLY



▼ [View reply from Mahendras : Online Videos For Govt. Exams](#)



A K 20 hours ago 27 subscribers

C 🐼 🐼 🐼 🐼 🐼



REPLY



▼ [View reply from Mahendras : Online Videos For Govt. Exams](#)



Bhavya thakur ✍ 21 hours ago 1 subscribers

A & B



REPLY



▼ [View reply from Mahendras : Online Videos For Govt. Exams](#)



Puspranjan singh 21 hours ago 2 subscribers

a& b



REPLY

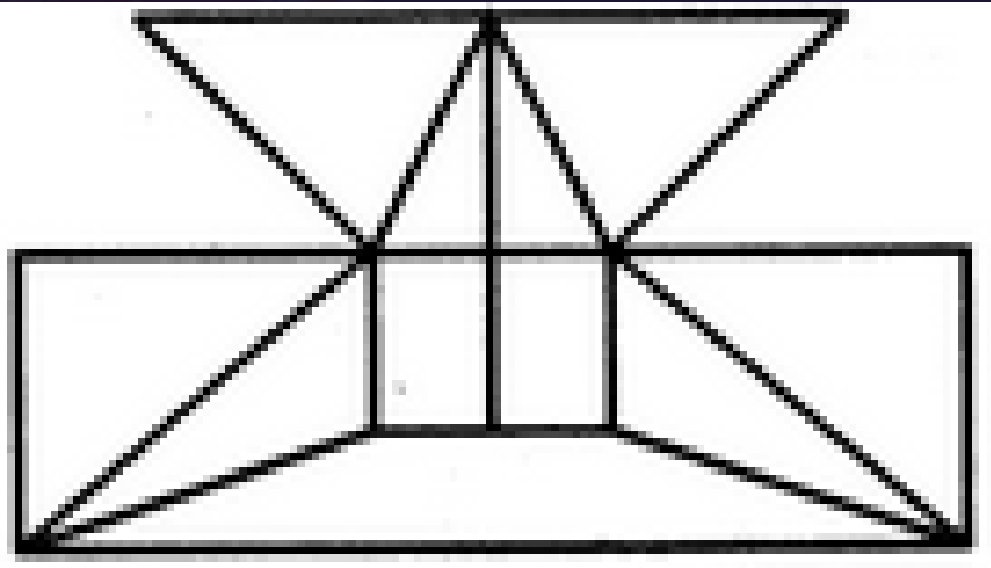


▼ [View reply from Mahendras : Online Videos For Govt. Exams](#)



Find the number of Straight line (?)

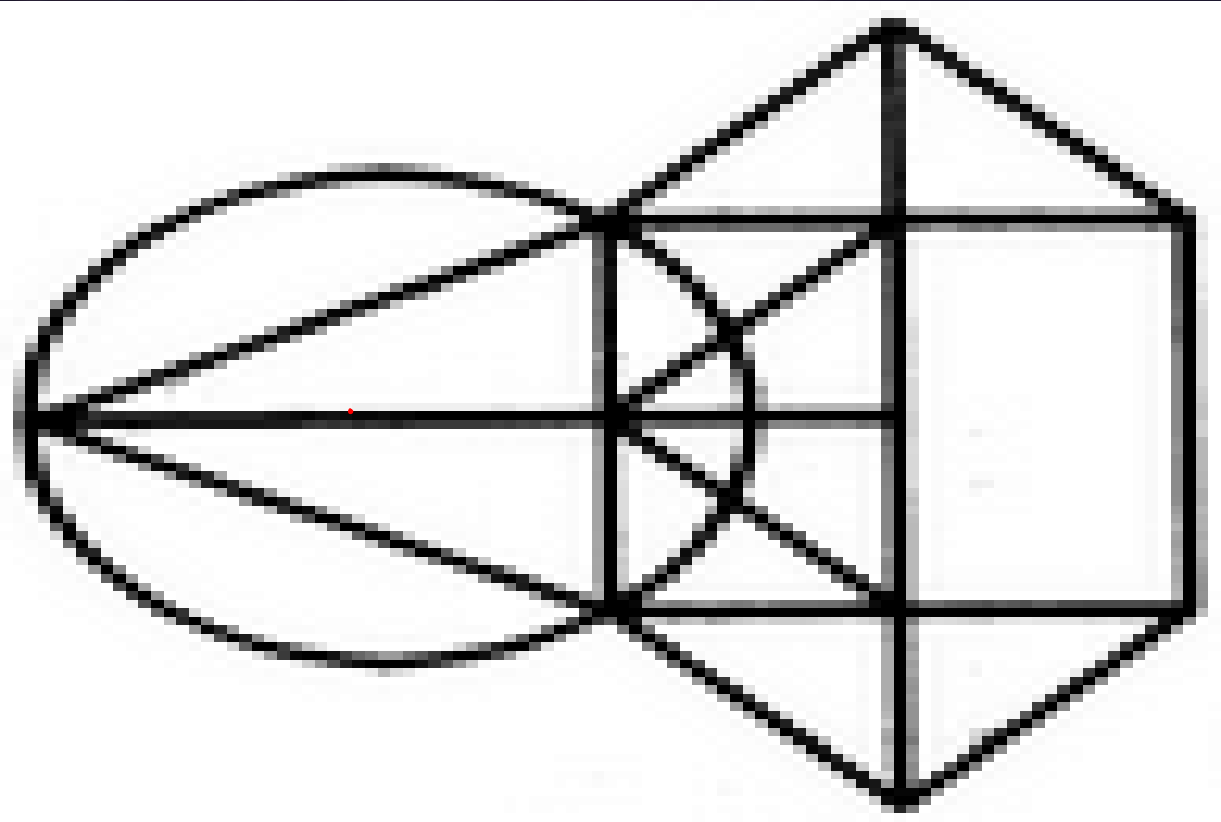
- A.16
- B.17
- C.18
- D.19





Find the number of triangles in the given figure.

- A.10
- B.12
- C.14
- D.16

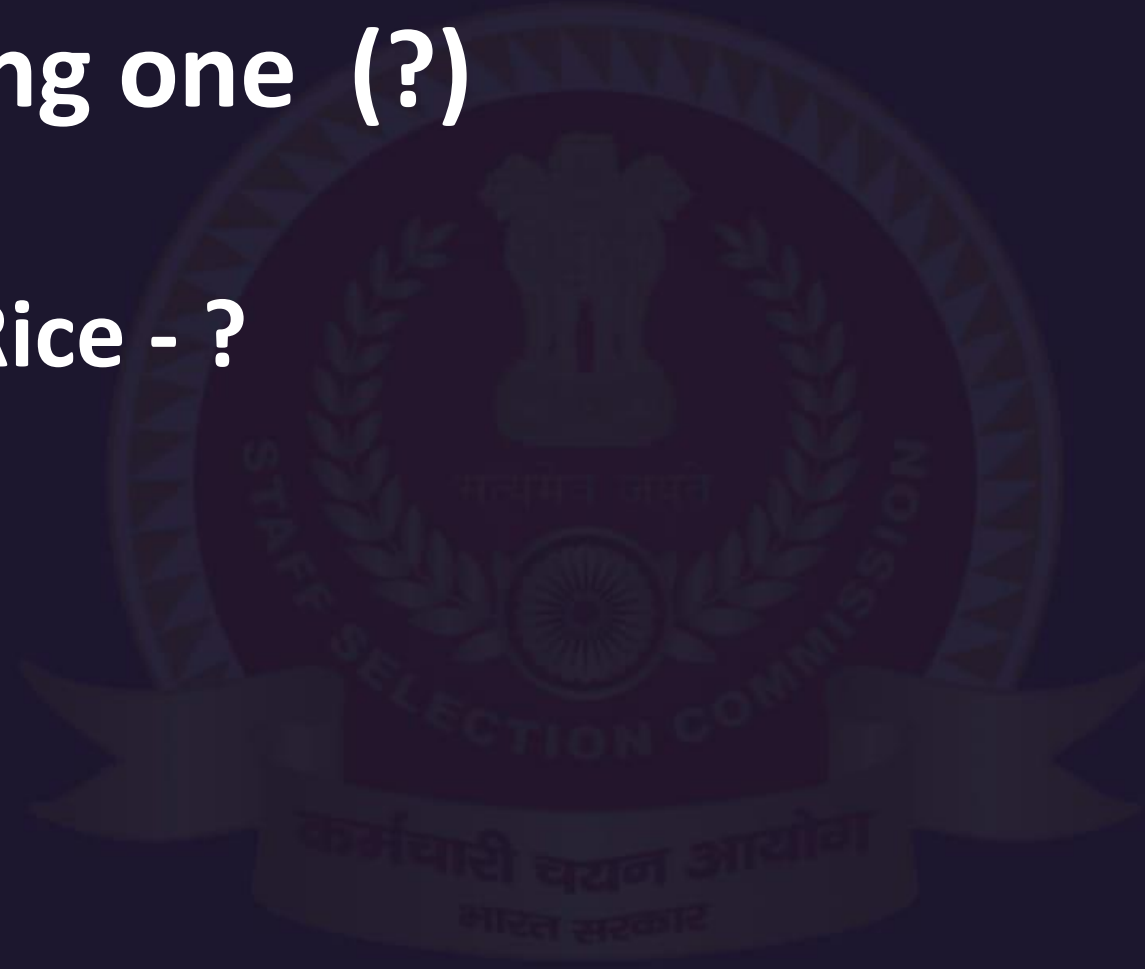




Find the missing one (?)

Wheat, Barley, Rice - ?
गेहूं, जौ, चावल - ?

- A. Food / खाना**
- B. Pizza / पिज़्ज़ा**
- C. Farm / खेत**
- D. Grain / अनाज**





Arrange the in Dictionary order :-

- 1. First**
- 2. Frown**
- 3. Fist**
- 4. Fast**
- 5. Floor**

A- 3,5,2,4,1

B- 4,1,3,5,2

C- 2,1,3,5,4

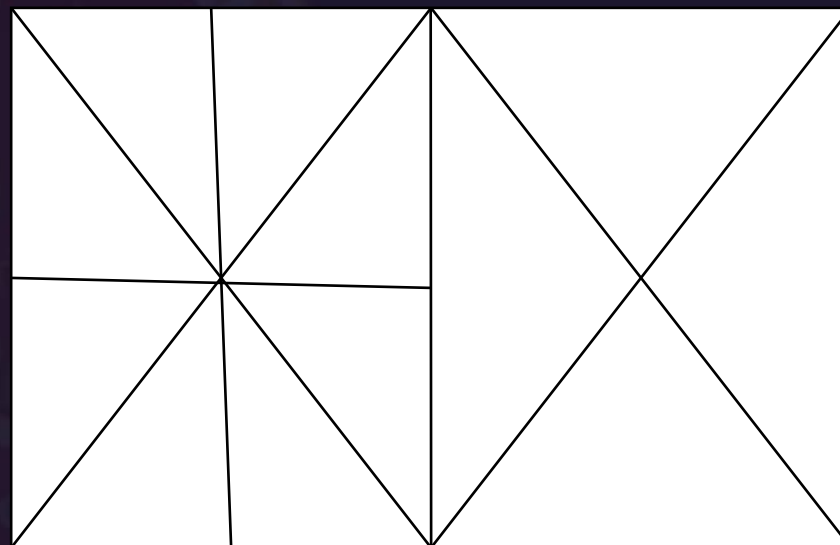
D- 2,4,1,5,3





Find number of triangle in the given figure ?
दी गई आकृति में त्रिभुज की संख्या ज्ञात कीजिए?

- (A) 24
- (B) 26
- (C) 28
- (D) 30





Find the missing one (?)

Lock : Shut :: Fasten :
ताला : शट :: बांधना :

- A.Window / खिड़की
- B.Door / द्वार
- C.Iron / लोहा
- D.Block/ बाधा



Choose the word which is different from the rest.

- A.Kiwi / कीवी
- B.Eagle / ईगल
- C.Emu / एमु
- D.Ostrich / शुतुरमुर्ग





Statement :

All Samosas are Jalebi. सभी समोसा जलेबी हैं।

All Jalebis are Tikki. सभी जलेबीस टिक्की हैं।

All Tikkis are Barfi. सभी टिक्की बर्फी हैं।

Conclusions :

(I) All Toffee are not Barfi. सभी जलेबी बर्फी नहीं हैं।

(II) All Tikkis are Samosas. सभी टिक्की समोसे हैं।

(A) If only conclusion I follows.

(B) If only conclusion II follows.

(C) If neither conclusion I nor II follows.

(D) If both conclusion I and II are follows.



Find the option which should replace (?)

2	3
4	17

9	7
3	83

6	?
5	50

- (A) 11
- (B) 12
- (C) 10
- (D) 13



In 2018, which of the following two months have 1st day will be same days ?

2018 में, निम्नलिखित में से किस दो महीने में 1 दिन समान दिन होगा?

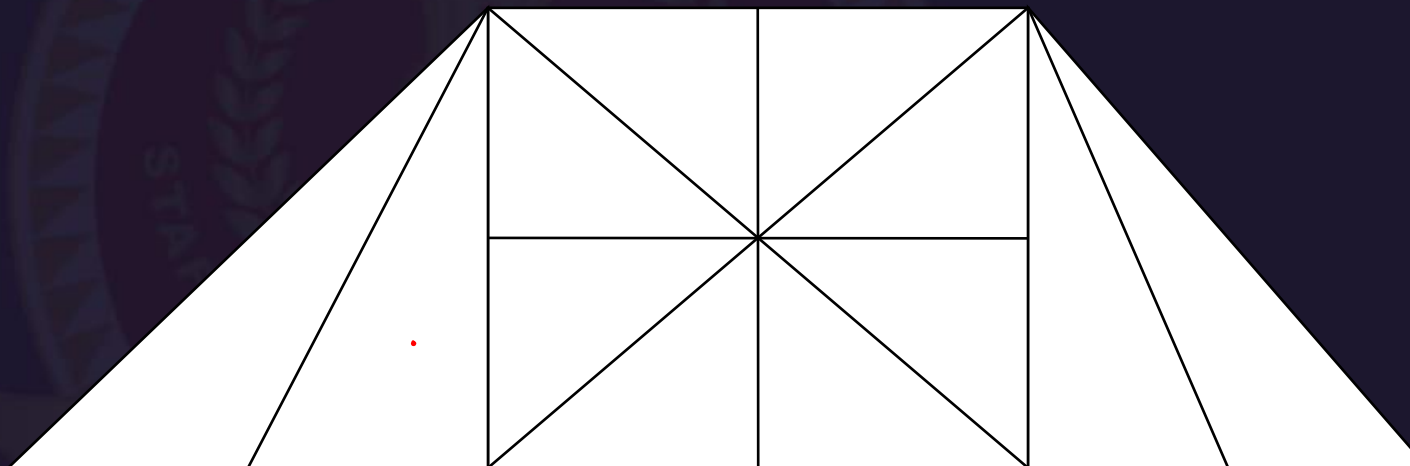
- 1) February , April**
- 2) May , July**
- 3) June , September**
- 4) January , October**





Find the number of triangle (?)

- (A) 14
- (B) 16
- (C) 18
- (D) 20 or more



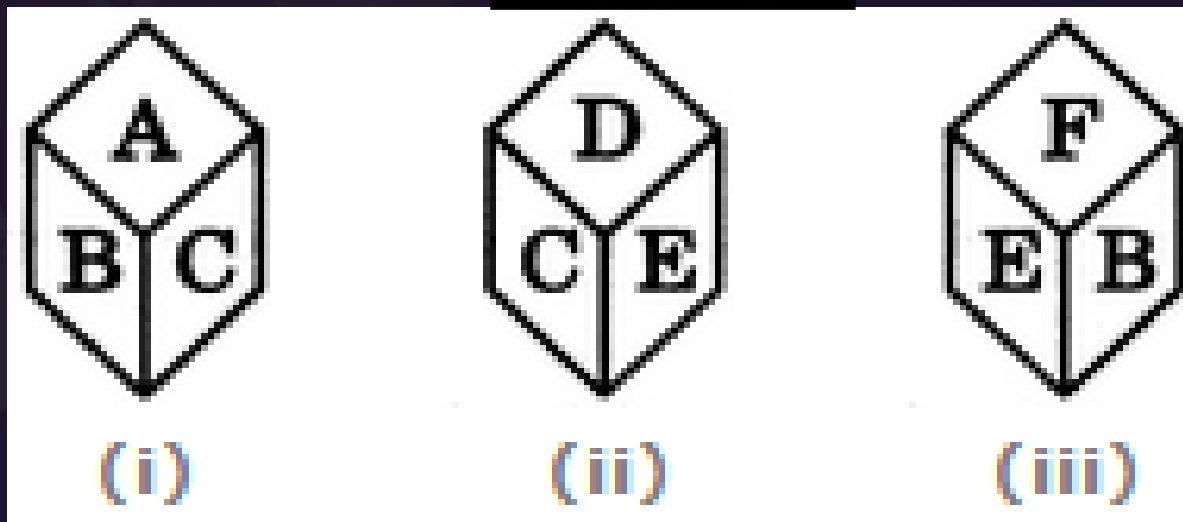


The six faces of a dice have been marked with alphabets A, B, C, D, E and F respectively. This dice is rolled down three times. The three positions are shown as:



Find the alphabet opposite A.

- A.C
- B.D
- C.E
- D.F





Find the missing one (?)

$$37 * 25 = 7$$

$$95 * 37 = 5$$

$$87 * 85 = 15$$

$$27 * 41 = ?$$

- (A) 9
- (B) 7
- (C) 12
- (D) 13

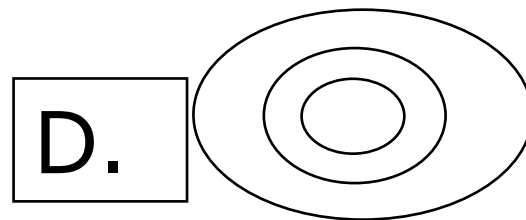
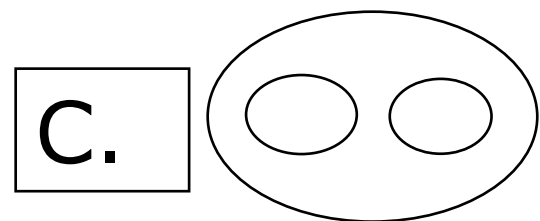
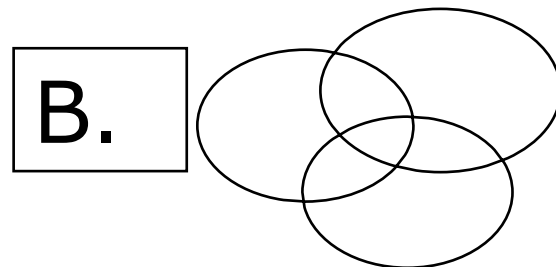
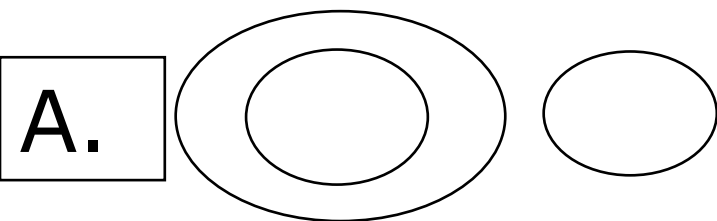


E	F	H	S
B	Q	C	V
D	F	G	?


- (A) R
- (B) S
- (C) Q
- (D) P



Which of the following diagrams indicate best relation between Author, Lawyer and Singer?
निम्नलिखित में से कौन सा चित्र लेखक, वकील और गायक के बीच संबंध को दर्शाता है?



Problem Figures:



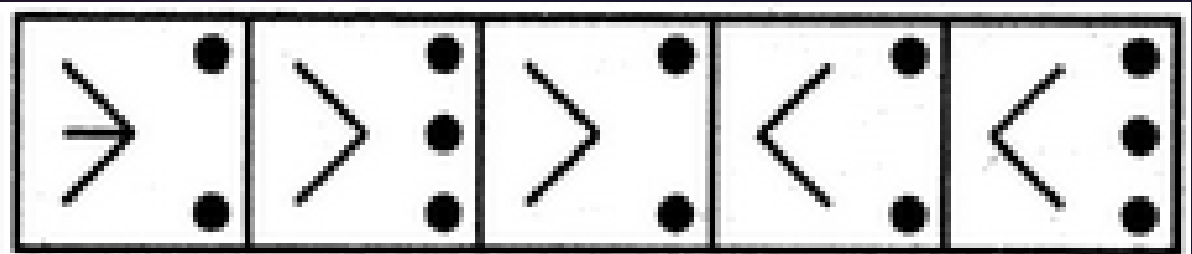
(A)

(B)

(C)

(D)

Answer Figures:



(1)

(2)

(3)

(4)

(5)

- A.1
- B.2
- C.3
- D.4
- E.5





Choose the word which is different from the rest.

- A.Coat / कोट
- B.Shirt / शर्ट
- C.Blouse / ब्लाउज
- D.Trousers / पायजामा
- E.Sweater / स्वेटर

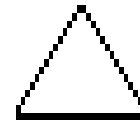
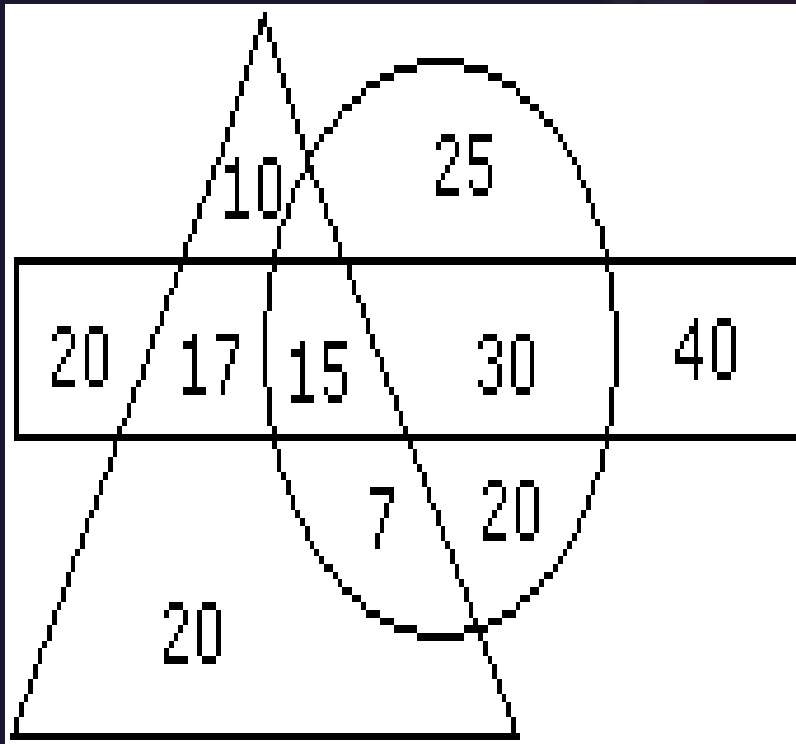




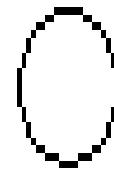
Study the diagram given below and answer each of the following questions.

How many persons who take tea and wine but not coffee ?
कितने लोग हैं जो चाय और वाइन लेते हैं लेकिन कॉफी नहीं?

- A.20
- B.17
- C.25
- D.15



→ Persons who takes tea



→ Persons who takes coffee



→ Persons who takes wine

20