



# SSC MTS 2022-23



**REASONING**

**SESSION-I**

# **LIVE TEST**

**WITH TIMER**



**BASED ON PREVIOUS YEAR QUESTIONS**

**📡 LIVE | 03:00 PM**

**BY KULDEEP MAHENDRAS**





# UPCOMING ONLINE BATCHES

## MARCH 2023

01 MARCH 2023

10:30 AM to 12:30 PM

**SSC ONLINE LIVE CLASS**

**BILINGUAL**

15 MARCH 2023

08:00 AM to 10:00 AM

**BANK ONLINE LIVE CLASS**

**BILINGUAL**

29 MARCH 2023

08:00 AM to 10:00 AM

**SSC ONLINE LIVE CLASS**

**BILINGUAL**

22 MARCH 2023

02:00 PM to 04:00 PM

**BANK ONLINE LIVE CLASS**

**ENGLISH & BENGALI**

05 APRIL 2023

05:30 PM to 07:30 PM

**BANK ONLINE LIVE CLASS**

**BILINGUAL**



[www.mahendras.org](http://www.mahendras.org) •  7052477777/7052577777



Suruchi Jha 11 days ago

Hw answer option C thank you sir 🙏



▼ 🚫 • 1 reply



Vishnu Gupta 11 days ago 11 subscribers

28 is the right ans very super duper nice session sir thank you sir ❤️



▼ 🚫 • 1 reply



Surbhi Sinha 11 days ago 5 subscribers

Homework question answer 🙏 28



▼ 🚫 • 1 reply



ROHIT PARKHE 11 days ago

B.28



▼ 🚫 • 1 reply



Puspranjan Singh 11 days ago 1 subscribers

B



▼ 🚫 • 1 reply



Aarav Roy 11 days ago

D



SK6 11 days ago 13 subscribers

$18 \times 2 = 36$



**14.6 Computer Based Examination:**

<b>Part</b>	<b>Subject</b>	<b>Number of Questions/ Maximum Marks</b>	<b>Time Duration (For all four Parts)</b>
<b>Session-I</b>			45 Minutes (60 Minutes for candidates eligible for scribes as per para 8)
I	Numerical and Mathematical Ability	20/60	
II	Reasoning Ability and Problem Solving	20/60	
<b>Session-II</b>			45 Minutes (60 Minutes for candidates eligible for scribes as per para 8)
I	General Awareness	25/75	
II	English Language and Comprehension	25/75	



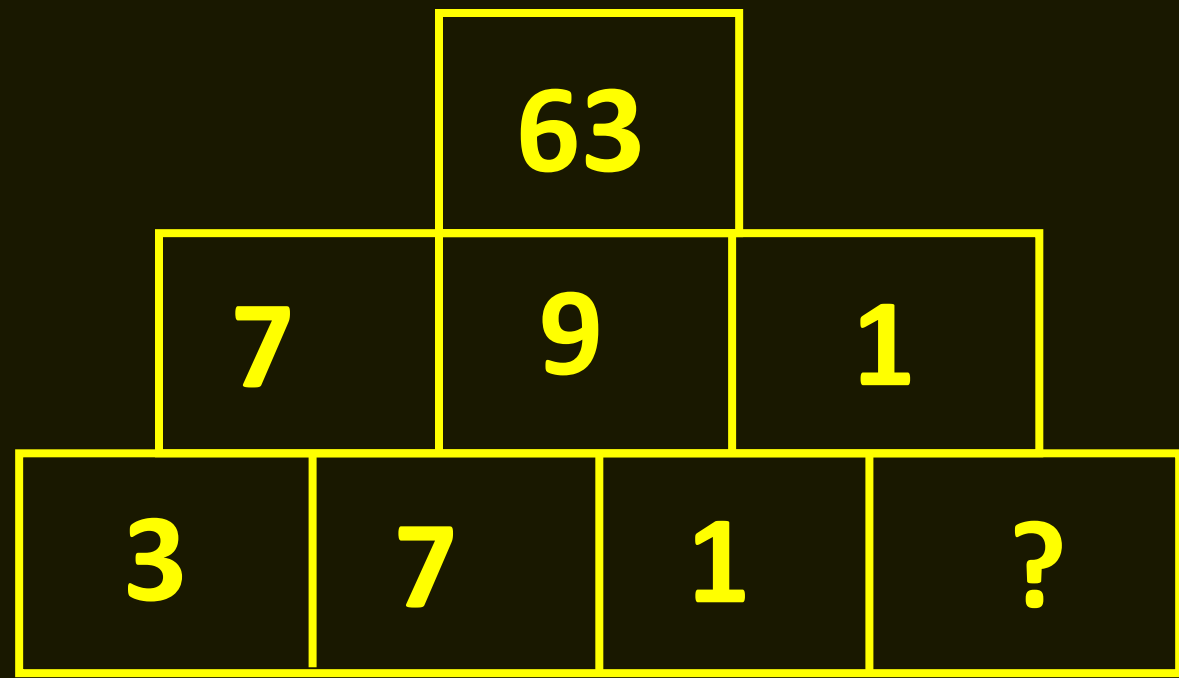
# SSC MTS 2022-23

**LIVE** at 3:00 PM

	UR	OBC	SC	ST	EWS	TOTAL	ESM	OH	HH	VH	OTHERS
MTS AGE GROUP 18-25	4115	2505	1051	679	979	9329	979	104	131	119	58
MTS AGE GROUP 18-27	1085	723	358	216	283	2665	222	36	36	32	18
Havaldar in CBIC	201	143	106	29	50	529	53	8	7	0	6
Grand Total	5401	3371	1515	924	1312	12523	1254	148	174	151	82



**Find the option which should replace (?)**



- A. 3**
- B. 9**
- C. 5**
- D. 2**

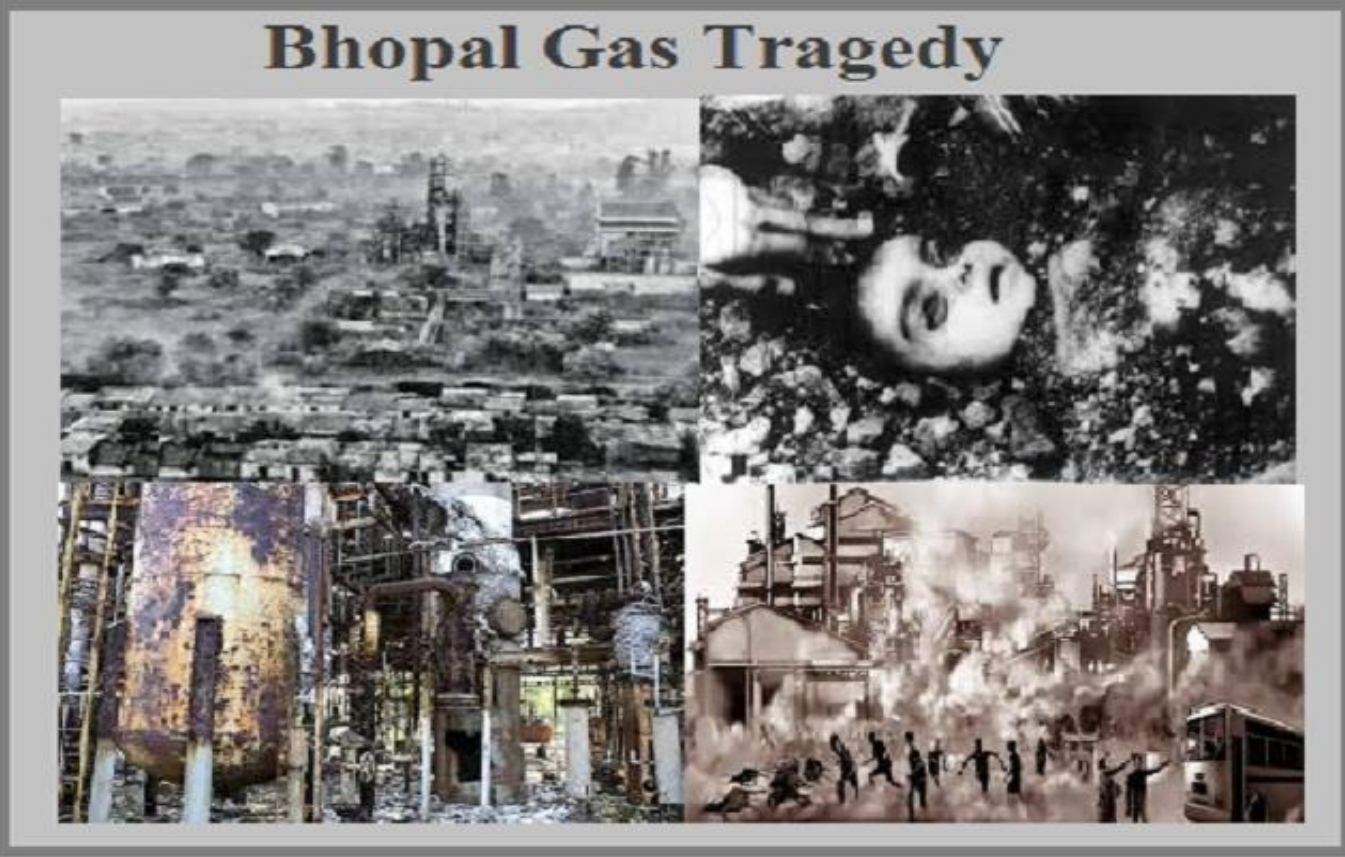


**Find the missing term(?)**

**Operation Blue Star : 1984 :: Bhopal gas Tragedy : ?**  
**ऑपरेशन ब्लू स्टार : 1984 :: भोपाल गैस त्रासदी : ?**

- (A) 1992**
- (B) 1975**
- (C) 1984**
- (D) 1999**









**Find the option which should replace (?)**

$$6 : 2 :: 8 : ?$$

- (A) 1**
- (B) 3**
- (C) 5**
- (D) 7**





**Find the option which should replace (?)**

**17 : 4 :: 37 : ?**

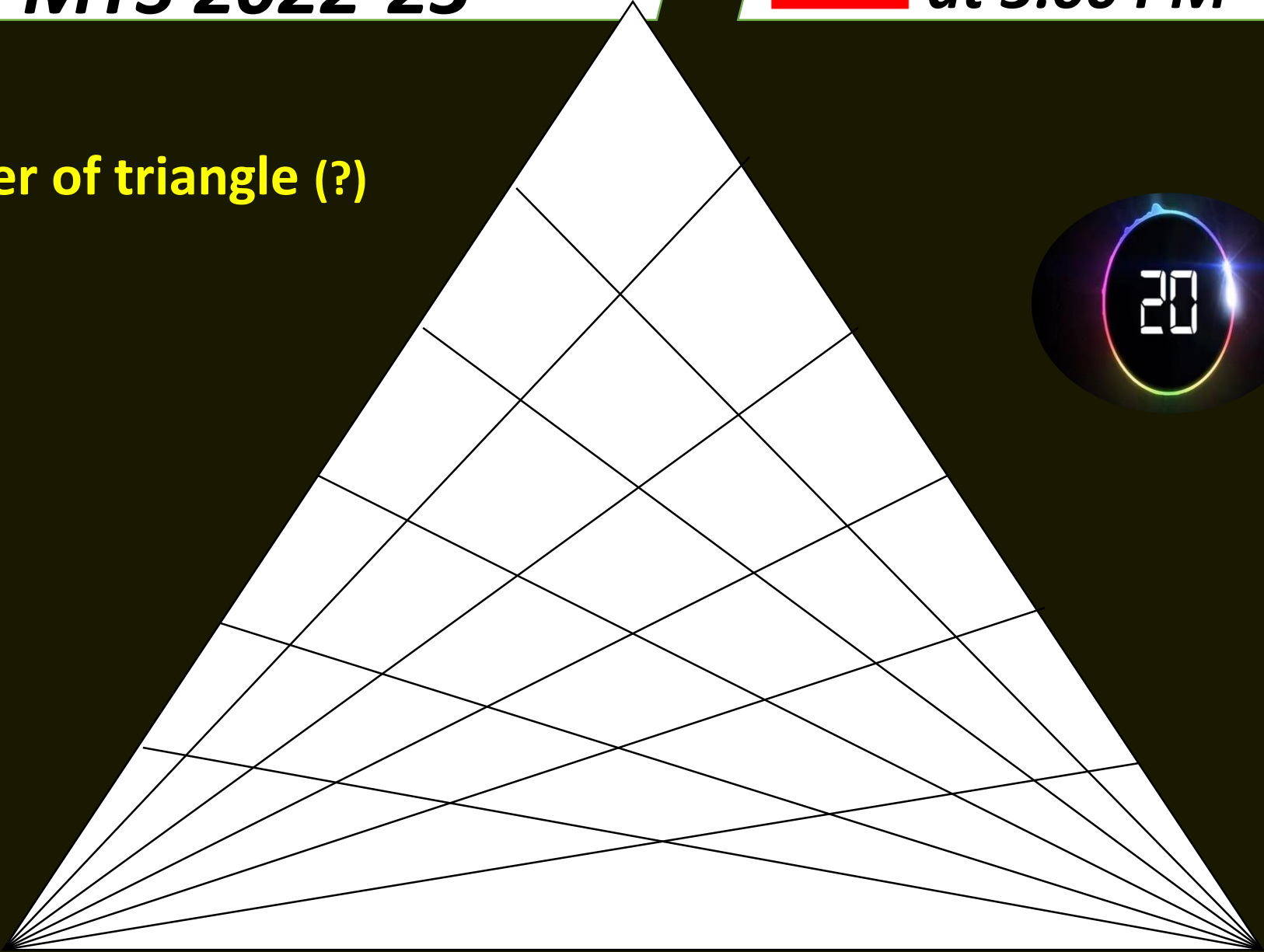
- (A) 4**
- (B) 6**
- (C) 12**
- (D) 7**





**Find the number of triangle (?)**

- (A) 125**
- (B) 216**
- (C) 256**
- (D) 64**





**Find the missing term(?)**



- (A) 50**
- (B) 60**
- (C) 70**
- (D) 98**

5	17	23
7	8	2
9	15	5
42	80	?



**Find the missing term(?)**

- (A) 6**
- (B) 7**
- (C) 8**
- (D) 9**

<b>3</b>	<b>5</b>	<b>7</b>
<b>4</b>	<b>1</b>	<b>2</b>
<b>3</b>	<b>2</b>	<b>?</b>



**Find the option which should replace (?)**

**Kangaroo: Australia :: Penguin : ?**

**कंगारू: ऑस्ट्रेलिया :: पेंगुइन : ?**

- (A) River / नदी**
- (B) Russia / रूस**
- (C) Antarctica / अंटार्कटिका**
- (D) India / भारत**

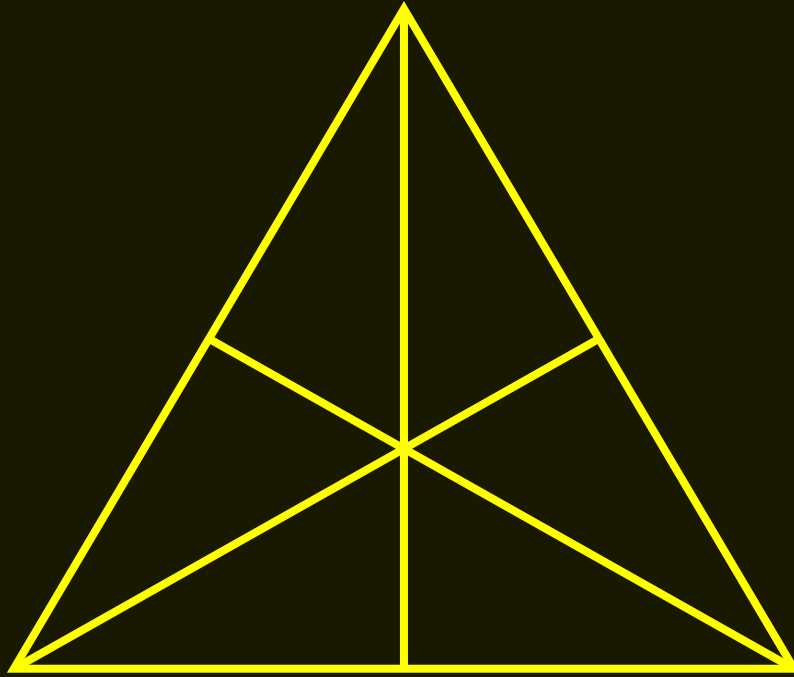






**Find the number of triangle (?)**

- (A) 16**
- (B) 14**
- (C) 13**
- (D) 12**







**Find the option which should replace (?)**

$$1 + 4 = 15$$

$$8 + 2 = 60$$

$$3 + 6 = 27$$

$$9 + 7 = ?$$



**(A) 37**

**(B) 49**

**(C) 32**

**(D) 35**



**Find the odd one (?)**

- (A) Y**
- (B) A**
- (C) I**
- (D) H**





**Choose a figure which would most closely resemble the unfolded form of Figure (Z)**

X	Y	Z	
(1)	(2)	(3)	(4)

- A.1
- B.2
- C.3
- D.4





**Find the odd one (?)**

- (A) Andrew Symonds / एंड्रयू साइमंड्स**
- (B) Brett Lee / ब्रेट ली**
- (C) P. V. Sindhu / पी वी सिंधु**
- (D) Michal Clarke / मिशाल क्लार्क**

