



 *Mahendra's*

UP Police कांस्टेबल

REASONING

LIVE EXAM



 **4:00 PM**

LIVE 



Don't Let Your Studies Get Impacted By COVID-19 Pandemic

Stay Home & Study Online With Mahendras Hybrid Model

Features

- Offline Classes ↔ Live Interactive Online Classes
- Same Faculty
- Same Batch
- Same Batch Timing
- Online Library Facility
- Recorded Video
- PDFs
- Classes In Both Model

CONTACT US:

1800-103-5225

www.mahendras.org





UPCOMING ONLINE BATCHES

February 2022

02 Feb 2022

08:00 AM to 10:00 AM
BANK ONLINE LIVE CLASS

05:30 PM to 07:30 PM
BANK ONLINE LIVE CLASS

01:00 PM to 03:00 PM
SSC ONLINE LIVE CLASS

10:30 AM to 12:30 PM
SSC ONLINE LIVE CLASS

BILINGUAL

09 Feb 2022

10:30 AM to 12:30 PM
BANK ONLINE LIVE CLASS

03:00 PM to 05:00 PM
BANK ONLINE LIVE CLASS

05:30 PM to 07:30 PM
SSC ONLINE LIVE CLASS

BILINGUAL

16 Feb 2022

01:00 PM to 03:00 PM
BANK ONLINE LIVE CLASS

08:00 AM to 10:00 AM
BANK ONLINE LIVE CLASS

07:30 PM to 09:30 PM
SSC ONLINE LIVE CLASS

03:00 PM to 05:00 PM
SSC ONLINE LIVE CLASS

BILINGUAL

23 Feb 2022

10:30 AM to 12:30 PM
BANK ONLINE LIVE CLASS

08:00 AM to 10:00 AM
SSC ONLINE LIVE CLASS

01:00 PM to 03:00 PM
SSC ONLINE LIVE CLASS

BILINGUAL

08:00 AM to 10:00 AM
SSC ONLINE LIVE CLASS
(SSC CGL & CHSL)

ENGLISH MEDIUM

07:30 PM to 09:30 PM
BANK ONLINE LIVE CLASS
(BANK PO & CLERK)

ENGLISH MEDIUM



SAPANA 1 day ago

H.W. ans31

Nice session sir 👍👍👍

Thank you sir 🙏🙏🙏

👍 1 🗨️ 📄 ▾ 📄 REPLY

▶ [View reply from Mahendras : Online Videos For Govt. Exams](#)



Viśhñù Güptâ 1 day ago

31 is the right ans

Very dhashu session sir thank you 🙏 sir love ❤️ you sir

👍 🗨️ 📄 ▾ 📄 REPLY

▶ [View reply from Mahendras : Online Videos For Govt. Exams](#)



SANIA _____ 1 day ago

awesome session sir 🙏🙏

31 🔥🔥🔥🔥

👍 🗨️ 📄 ▾ 📄 REPLY

▶ [View reply from Mahendras : Online Videos For Govt. Exams](#)




Chhavi Saxena 1 day ago

Home work answer is 31

Nice session sir 🙏🙏

👍 🗨️ 📄 ▾ 📄 REPLY

▶ [View reply from Mahendras : Online Videos For Govt. Exams](#)




🌸 PUJA KUNDU 🌸 1 day ago

The answer is..... 31sandar session sir 🙏 thank you sir 🙏🙏🙏

👍 🗨️ 📄 ▾ 📄 REPLY

▶ [View reply from Mahendras : Online Videos For Govt. Exams](#)




Ankit Vish 1 day ago

Answer 31

Nice session sir 🙏🙏

👍 1 🗨️ 📄 ▾ 📄 REPLY

▶ [View reply from Mahendras : Online Videos For Govt. Exams](#)



Shruti Jain 1 day ago

31 nice session sir 🙏.

👍 🗨️ 📄 ▾ 📄 REPLY

▶ [View reply from Mahendras : Online Videos For Govt. Exams](#)




Anushka Mishra 1 day ago

31

👍 🗨️ 📄 ▾ 📄 REPLY

▶ [View reply from Mahendras : Online Videos For Govt. Exams](#)



TATHAGATA BISWAS 1 day ago

The answer is 31.

👍 🗨️ 📄 ▾ 📄 REPLY

▶ [View reply from Mahendras : Online Videos For Govt. Exams](#)



ANNU LATA 1 day ago

31 is right ans

     REPLY

▼ [View reply from Mahendras : Online Videos For Govt. Exams](#)



Parikh Akash 18 hours ago

31 HW answer

     REPLY

▼ [View reply from Mahendras : Online Videos For Govt. Exams](#)



Find the missing :-

- (A) 19
- (B) 23
- (C) 25
- (D) 31

$$\begin{array}{ccccc} & & 36 & & \\ & & \boxed{26} & & \\ 49 & & & & 64 \\ & & 25 & & \end{array}$$

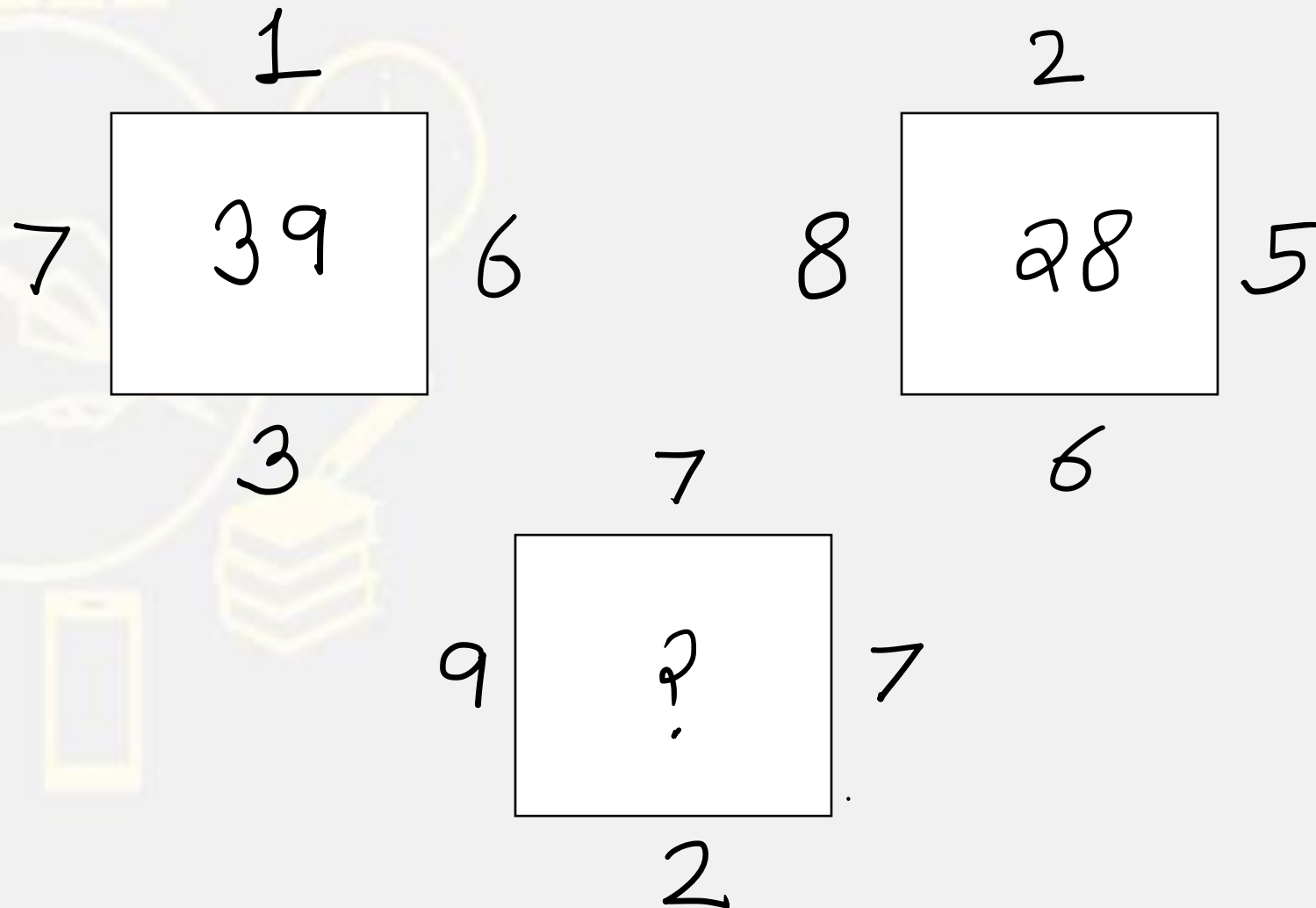
$$\begin{array}{ccccc} & & 9 & & \\ & & \boxed{21} & & 25 \\ 81 & & & & \\ & & 16 & & \end{array}$$

$$\begin{array}{ccccc} & & 25 & & \\ & & \boxed{?} & & 144 \\ 64 & & & & \\ & & 36 & & \end{array}$$

Find the option which should replace (?)



- (A) 49
- (B) 50
- (C) 44
- (D) 56



Find the option which should replace (?)

$$6 * 7 * 5 = 756$$

$$9 * 4 * 2 = 429$$

$$8 * 9 * 3 = ?$$

(A) 839

(B) 389

(C) 216

(D) 938



Find the option which should replace (?)

$$4 * 40 = 10$$

$$5 * 5 = 1$$

$$1 * 7 = 7$$

$$11 * 11 = ?$$

- (A) 1
- (B) 21
- (C) 22
- (D) NOT



Find the option which should replace (?)

$$9 * 3 + 8 = 24$$

$$10 * 2 + 7 = 35$$

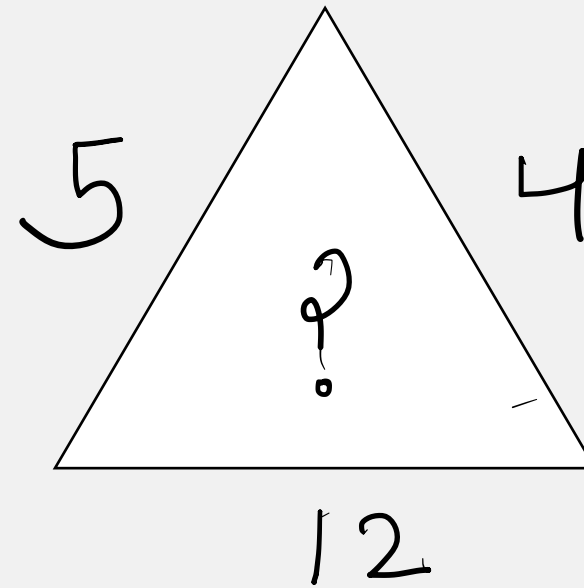
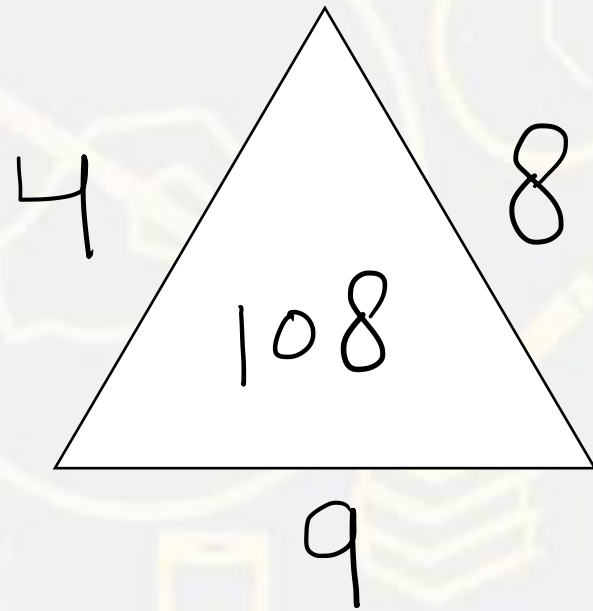
$$80 * 4 + 3 = 6$$

$$12 * 4 + 3 = ?$$

- (A) 7
- (B) 9
- (C) 12
- (D) 16



Find the option which should replace (?)

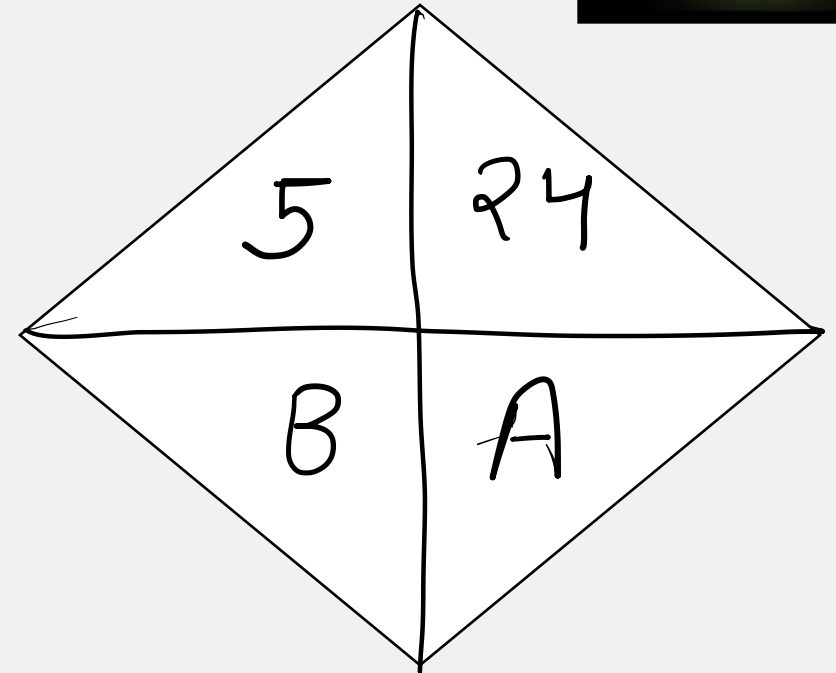
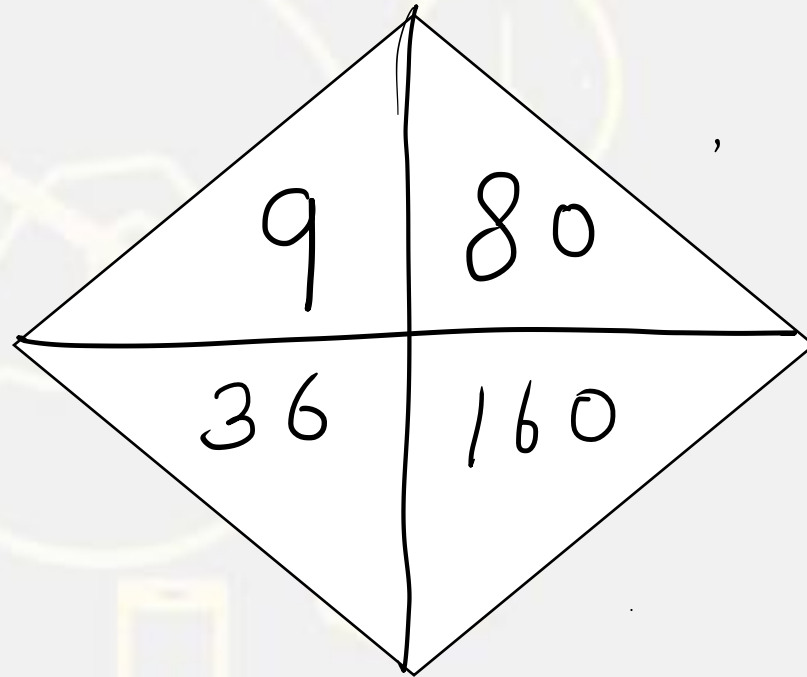


- (A) 80
- (B) 108
- (C) 114
- (D) NOT

Find the option which should replace (?)



- (A) 48 , 24
- (B) 40 , 20
- (C) 36 , 24
- (D) 48 , 20



Find the option which should replace (?)



20

- (A) H
- (B) I
- (C) G
- (D) F

M	H	E
R	I	?
V	K	K

Find the option which should replace (?)

$$89 + 3 = 50$$

$$58 + 4 = 51$$

$$56 + 5 = 54$$

$$54 + 6 = ?$$

(A) 53

(B) 54

(C) 46

(D) 49



Find the missing term(?)

2345 : 26 :: 3456 : ?

- (A) 42
- (B) 43
- (C) 45
- (D) 41



Find the rectangle :-



- (A) 40
- (B) 45
- (C) 44
- (D) 40

Find the missing :-

Googly: Cricket :: Dice : ?

गुगली: क्रिकेट :: पासा:?

- (A) Carrom / कैरम
- (B) Ludo / लूडो
- (C) Hockey / हॉकी
- (D) Chess / शतरंज



Find the missing :-

99 , 121 , 143 , 165 , ?

- (A) 187
- (B) 192
- (C) 275
- (D) 173




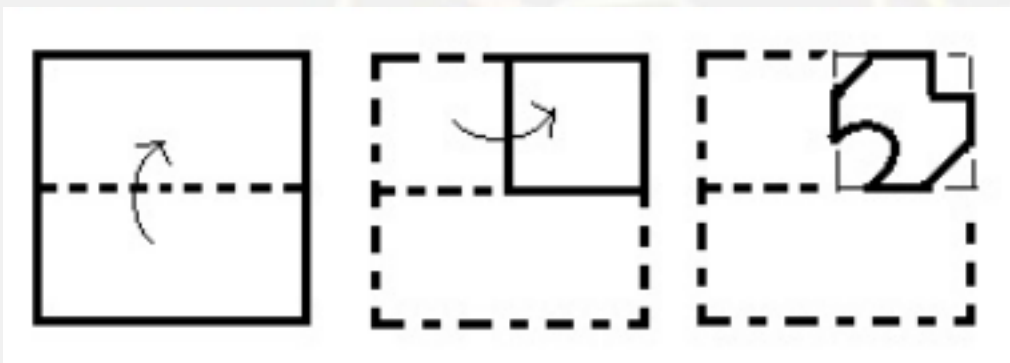
Pinki ranks 16th from the top and 15th from the bottom in a class. How many students are there in the class?

पिंकी एक कक्षा में 16 वीं और नीचे से 15 वीं रैंक पर है। वहाँ कक्षा में कितने छात्र हैं?

1. 30
2. 31
3. 32
4. Cannot be determined /निर्धारित नहीं किया जा सकता है



Find the Upfolded image (?)



(A)

(B)

(C)

(D)

